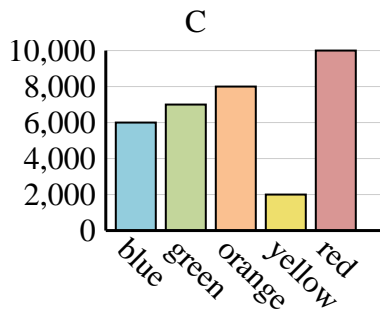
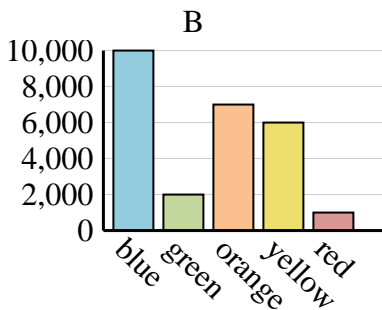
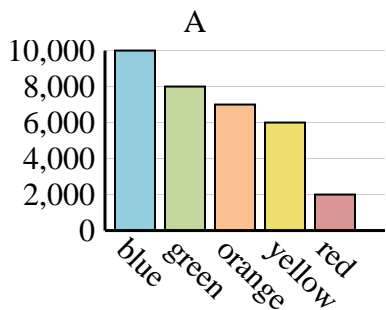




Determine which graph (A, B or C) best represents the information in the table.

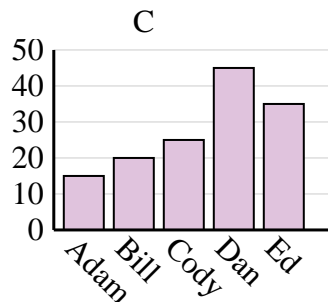
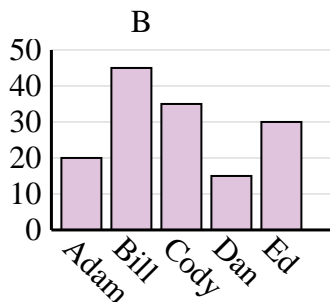
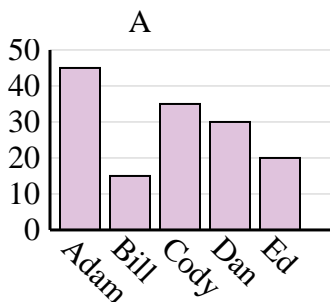
Answers

Favorite Color	blue	green	orange	yellow	red
People	10,000	8,000	7,000	6,000	2,000

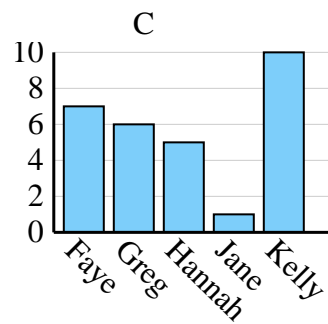
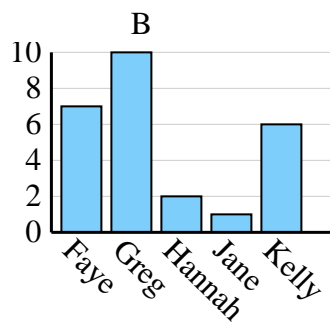
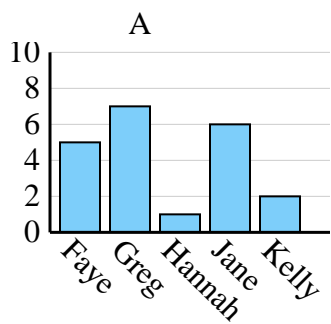


1. _____
2. _____
3. _____
4. _____

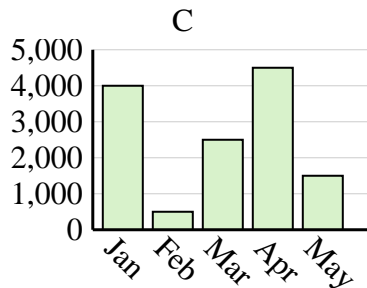
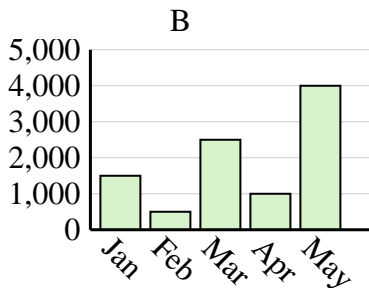
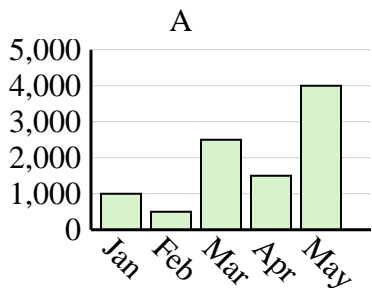
Name	Adam	Bill	Cody	Dan	Ed
Points	15	20	25	45	35



Name	Faye	Greg	Hannah	Jane	Kelly
States Lived In	7	6	5	1	10



Sales	Jan	Feb	Mar	Apr	May
Month	1,500	500	2,500	1,000	4,000

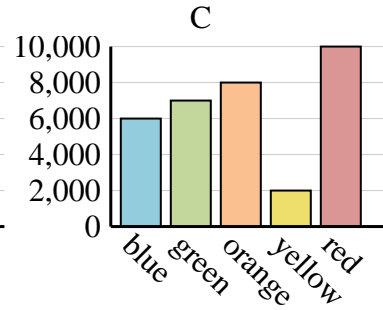
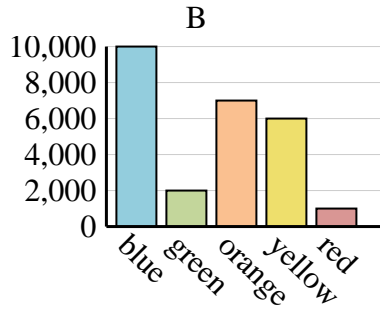
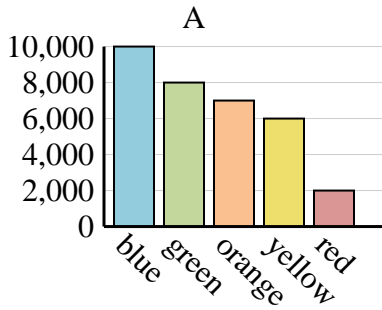




Determine which graph (A, B or C) best represents the information in the table.

Answers

Favorite Color	blue	green	orange	yellow	red
People	10,000	8,000	7,000	6,000	2,000



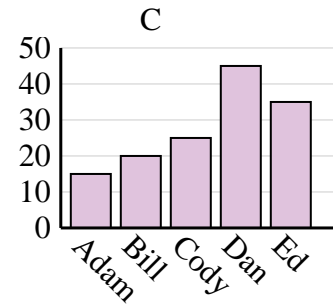
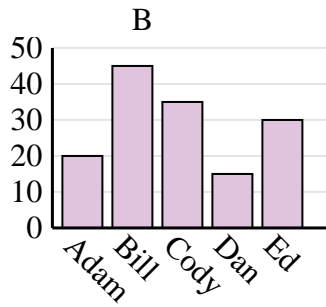
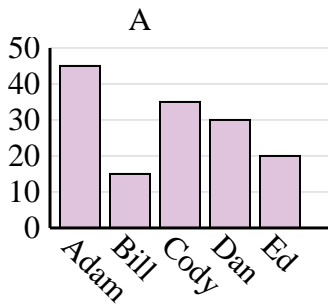
1. **A**

2. **C**

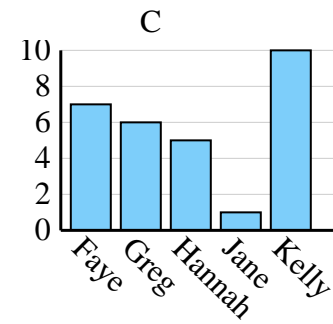
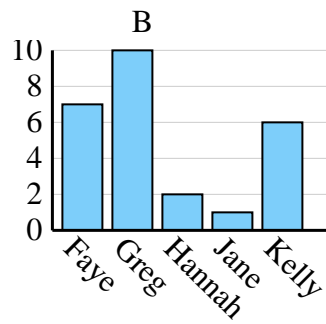
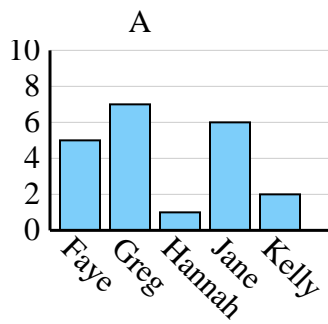
3. **C**

4. **B**

Name	Adam	Bill	Cody	Dan	Ed
Points	15	20	25	45	35



Name	Faye	Greg	Hannah	Jane	Kelly
States Lived In	7	6	5	1	10



Sales	Jan	Feb	Mar	Apr	May
Month	1,500	500	2,500	1,000	4,000

