



Determine which graph goes with which table.

1)

| Color  | People |
|--------|--------|
| blue   | 5,000  |
| green  | 3,000  |
| orange | 10,000 |
| yellow | 1,000  |
| red    | 4,000  |

2)

| Color  | People |
|--------|--------|
| blue   | 5,000  |
| green  | 3,000  |
| orange | 1,000  |
| yellow | 10,000 |
| red    | 4,000  |

3)

| Color  | People |
|--------|--------|
| blue   | 3,000  |
| green  | 10,000 |
| orange | 5,000  |
| yellow | 1,000  |
| red    | 4,000  |

4)

| Color  | People |
|--------|--------|
| blue   | 1,000  |
| green  | 3,000  |
| orange | 10,000 |
| yellow | 5,000  |
| red    | 4,000  |

5)

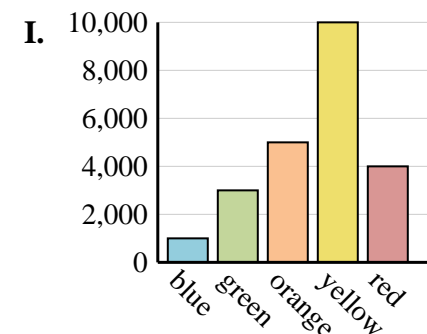
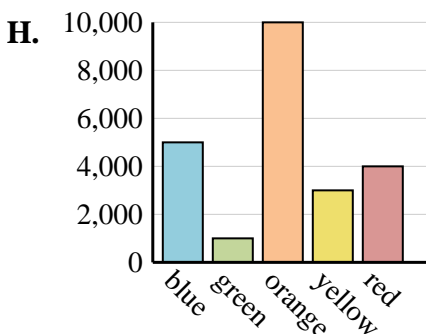
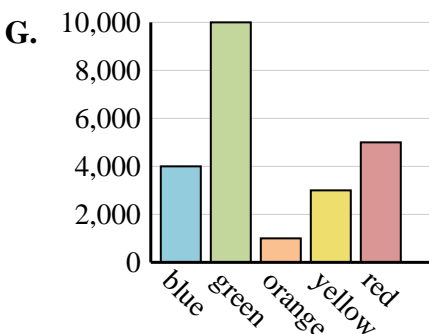
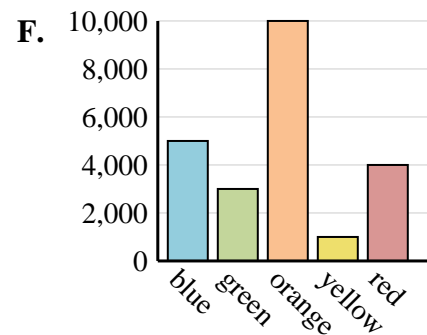
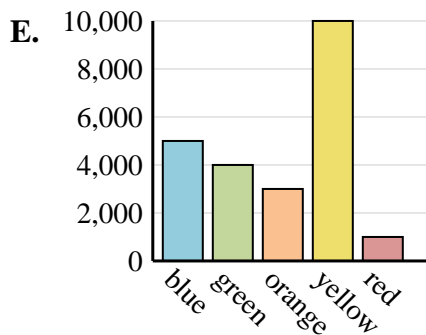
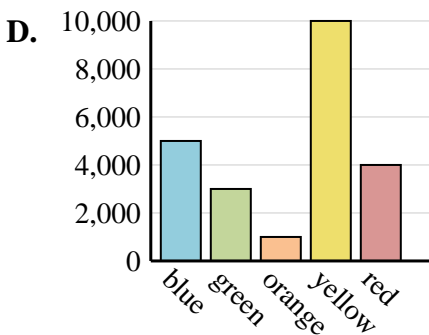
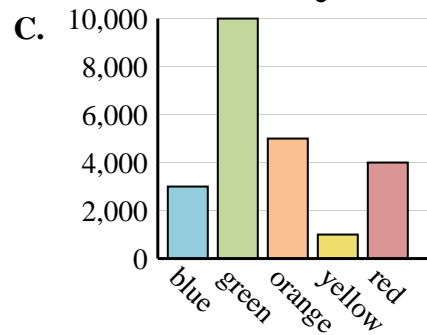
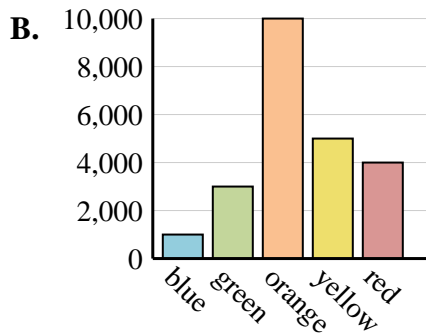
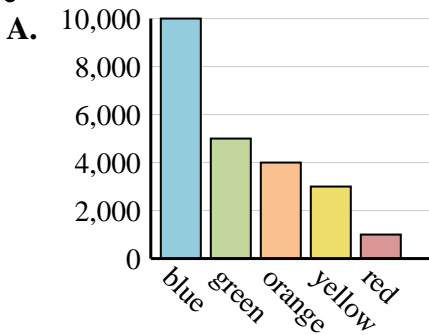
| Color  | People |
|--------|--------|
| blue   | 5,000  |
| green  | 1,000  |
| orange | 10,000 |
| yellow | 3,000  |
| red    | 4,000  |

6)

| Color  | People |
|--------|--------|
| blue   | 5,000  |
| green  | 4,000  |
| orange | 3,000  |
| yellow | 10,000 |
| red    | 1,000  |

**Answers**

1. \_\_\_\_\_
2. \_\_\_\_\_
3. \_\_\_\_\_
4. \_\_\_\_\_
5. \_\_\_\_\_
6. \_\_\_\_\_





Determine which graph goes with which table.

1)

| Color  | People |
|--------|--------|
| blue   | 5,000  |
| green  | 3,000  |
| orange | 10,000 |
| yellow | 1,000  |
| red    | 4,000  |

2)

| Color  | People |
|--------|--------|
| blue   | 5,000  |
| green  | 3,000  |
| orange | 1,000  |
| yellow | 10,000 |
| red    | 4,000  |

3)

| Color  | People |
|--------|--------|
| blue   | 3,000  |
| green  | 10,000 |
| orange | 5,000  |
| yellow | 1,000  |
| red    | 4,000  |

4)

| Color  | People |
|--------|--------|
| blue   | 1,000  |
| green  | 3,000  |
| orange | 10,000 |
| yellow | 5,000  |
| red    | 4,000  |

5)

| Color  | People |
|--------|--------|
| blue   | 5,000  |
| green  | 1,000  |
| orange | 10,000 |
| yellow | 3,000  |
| red    | 4,000  |

6)

| Color  | People |
|--------|--------|
| blue   | 5,000  |
| green  | 4,000  |
| orange | 3,000  |
| yellow | 10,000 |
| red    | 1,000  |

**Answers**

1. **F**
2. **D**
3. **C**
4. **B**
5. **H**
6. **E**

