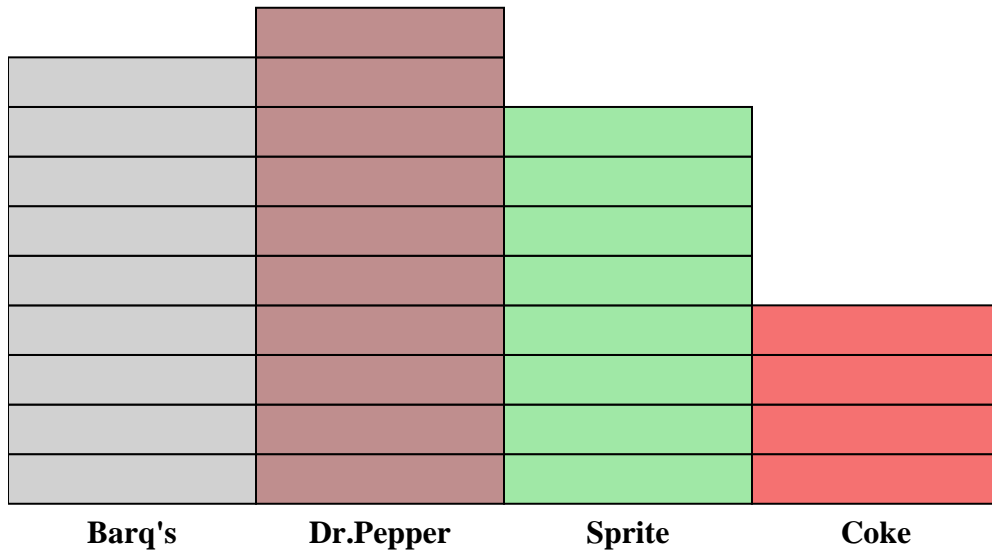




Solve each problem.



Each  = 2 people

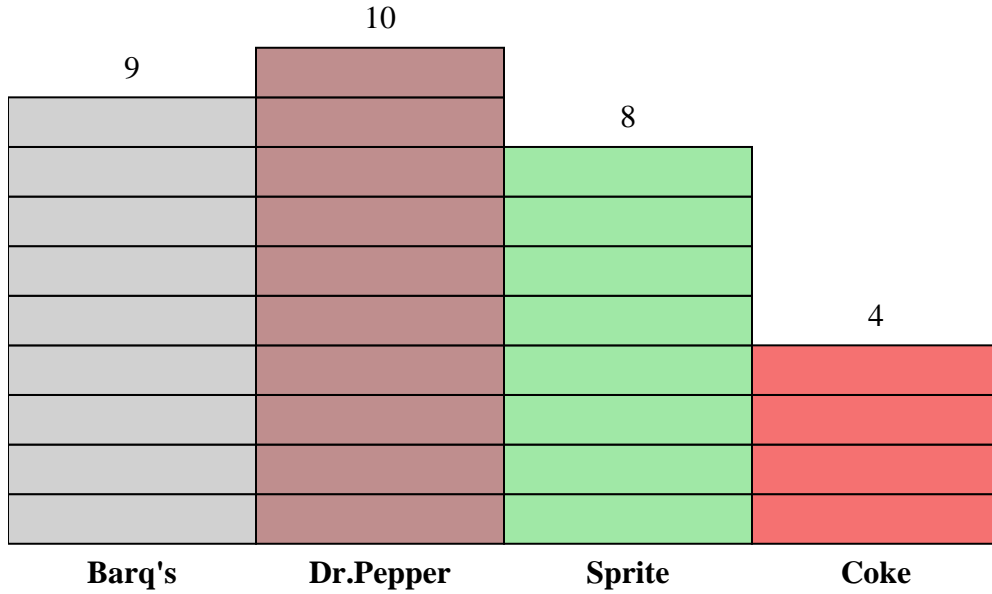
Answers

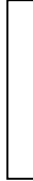
1. _____
2. _____
3. _____
4. _____
5. _____
6. _____
7. _____
8. _____
9. _____
10. _____

- 1) How many more people liked Barq's than liked Coke?
- 2) Which drink did the most people like?
- 3) Which drink did the fewest people like?
- 4) What is the total number of people in the taste test?
- 5) Did fewer people like Barq's or Dr. Pepper?
- 6) Did more people like Barq's or Sprite?
- 7) Which drink did exactly 16 people say was their favorite?
- 8) How many people said Dr. Pepper was their favorite drink?
- 9) What is the combined number of people who liked Dr. Pepper and Sprite?
- 10) What is the difference in the number of people who liked Coke and the number who liked Dr. Pepper?



Solve each problem.



Each  = 2 people

Answers

1. 10
2. Dr. Pepper
3. Coke
4. 62
5. Barq's
6. Barq's
7. Sprite
8. 20
9. 36
10. 12

- 1) How many more people liked Barq's than liked Coke?
- 2) Which drink did the most people like?
- 3) Which drink did the fewest people like?
- 4) What is the total number of people in the taste test?
- 5) Did fewer people like Barq's or Dr. Pepper?
- 6) Did more people like Barq's or Sprite?
- 7) Which drink did exactly 16 people say was their favorite?
- 8) How many people said Dr. Pepper was their favorite drink?
- 9) What is the combined number of people who liked Dr. Pepper and Sprite?
- 10) What is the difference in the number of people who liked Coke and the number who liked Dr. Pepper?