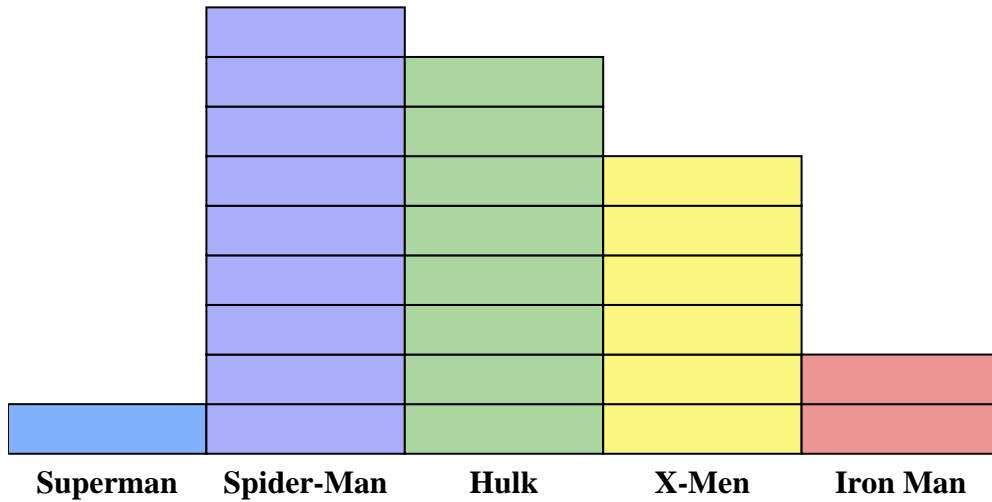




Solve each problem.



Each  = 2 issues sold

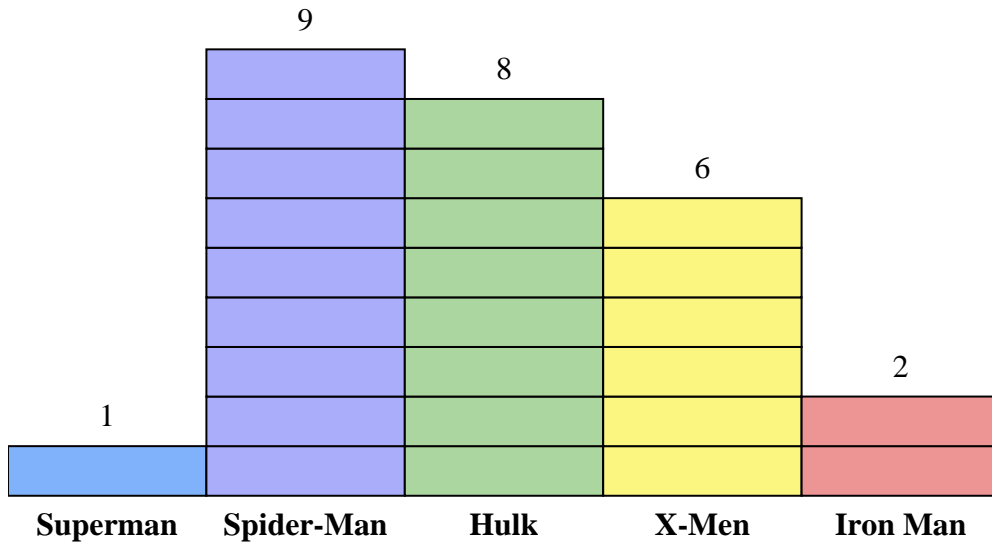
Answers

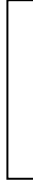
1. \_\_\_\_\_
2. \_\_\_\_\_
3. \_\_\_\_\_
4. \_\_\_\_\_
5. \_\_\_\_\_
6. \_\_\_\_\_
7. \_\_\_\_\_
8. \_\_\_\_\_
9. \_\_\_\_\_
10. \_\_\_\_\_

- 1) How many more issues of Spider-Man were sold than issues of X-Men?
- 2) Which comic series sold the most issues?
- 3) Which comic series sold the fewest issues?
- 4) What is the total number of issues sold for all the comics?
- 5) Which sold fewer, issues of Iron Man or issues of Hulk?
- 6) Which comic series sold more, Superman or Iron Man?
- 7) Which comic series sold exactly 2 issues?
- 8) How many issues of X-Men were sold?
- 9) What is the combined number of X-Men and Hulk issues sold?
- 10) What is the difference in the number of X-Men issues sold and the number of Iron Man issues sold?



Solve each problem.



Each  = 2 issues sold

Answers

- How many more issues of Spider-Man were sold than issues of X-Men?
- Which comic series sold the most issues?
- Which comic series sold the fewest issues?
- What is the total number of issues sold for all the comics?
- Which sold fewer, issues of Iron Man or issues of Hulk?
- Which comic series sold more, Superman or Iron Man?
- Which comic series sold exactly 2 issues?
- How many issues of X-Men were sold?
- What is the combined number of X-Men and Hulk issues sold?
- What is the difference in the number of X-Men issues sold and the number of Iron Man issues sold?

- 6
- Spider-Man
- Superman
- 52
- Iron Man
- Iron Man
- Superman
- 12
- 28
- 8