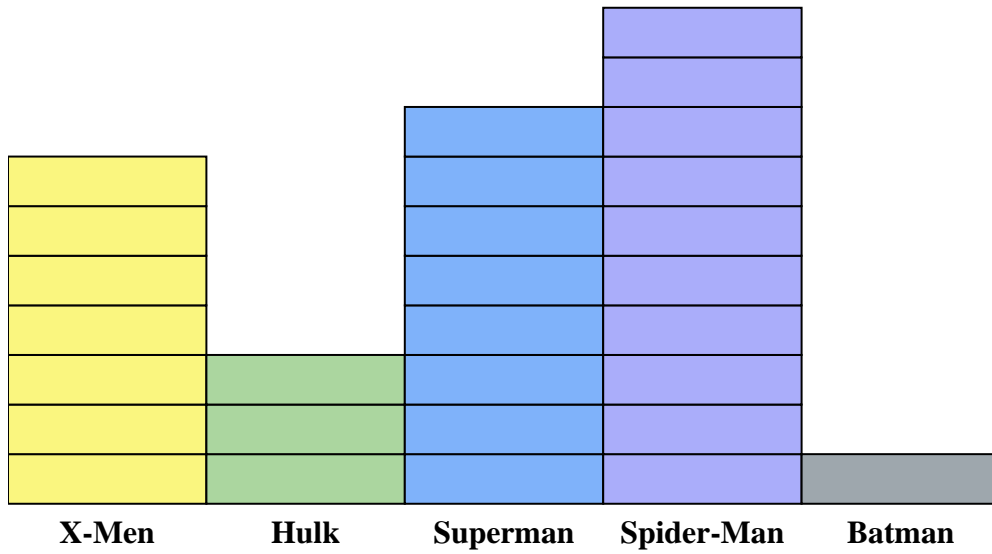
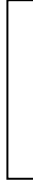




Solve each problem.



Each  = 2 issues sold

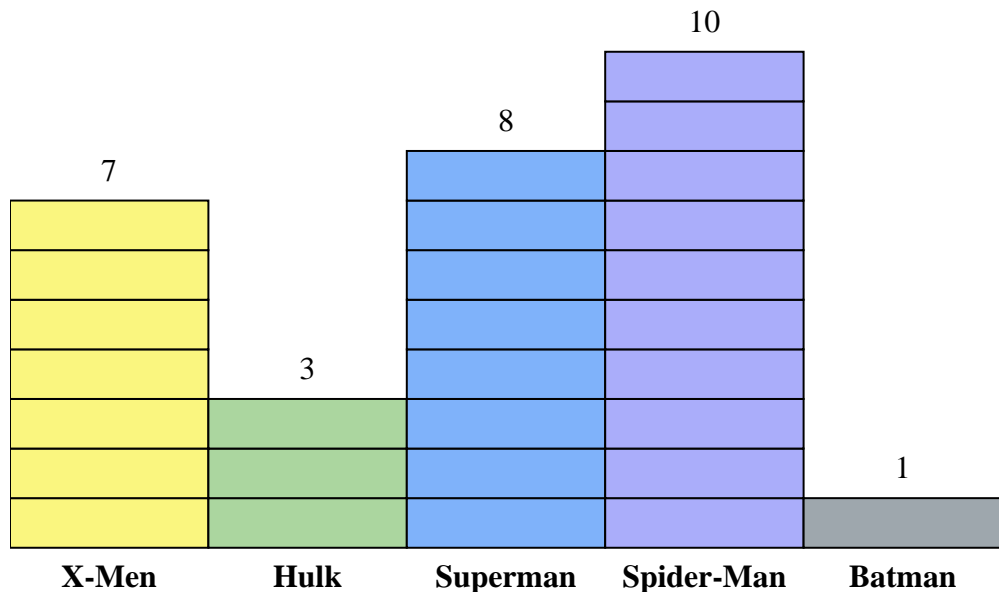
Answers

1. \_\_\_\_\_
2. \_\_\_\_\_
3. \_\_\_\_\_
4. \_\_\_\_\_
5. \_\_\_\_\_
6. \_\_\_\_\_
7. \_\_\_\_\_
8. \_\_\_\_\_
9. \_\_\_\_\_
10. \_\_\_\_\_

- 1) How many more issues of Spider-Man were sold than issues of X-Men?
- 2) Which comic series sold the most issues?
- 3) Which comic series sold the fewest issues?
- 4) What is the total number of issues sold for all the comics?
- 5) Which sold fewer, issues of Spider-Man or issues of Hulk?
- 6) Which comic series sold more, Hulk or X-Men?
- 7) Which comic series sold exactly 16 issues?
- 8) How many issues of Spider-Man were sold?
- 9) What is the combined number of Hulk and Superman issues sold?
- 10) What is the difference in the number of Superman issues sold and the number of Batman issues sold?



Solve each problem.



Each  = 2 issues sold

Answers

1. 6
2. Spider-Man
3. Batman
4. 58
5. Hulk
6. X-Men
7. Superman
8. 20
9. 22
10. 14

- 1) How many more issues of Spider-Man were sold than issues of X-Men?
- 2) Which comic series sold the most issues?
- 3) Which comic series sold the fewest issues?
- 4) What is the total number of issues sold for all the comics?
- 5) Which sold fewer, issues of Spider-Man or issues of Hulk?
- 6) Which comic series sold more, Hulk or X-Men?
- 7) Which comic series sold exactly 16 issues?
- 8) How many issues of Spider-Man were sold?
- 9) What is the combined number of Hulk and Superman issues sold?
- 10) What is the difference in the number of Superman issues sold and the number of Batman issues sold?