



Determine which letter best represents the volume.

Answers

Cup

A cup is about the amount of milk you get from the cafeteria.

Pint

A pint is about the amount you get in a large glass.

1 pint = 2 cups

Quart

A quart is about the amount you get in a large milk container.

1 quart = 2 pints

Gallon

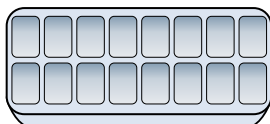
A gallon is the amount that comes in the large plastic container.

1 gallon = 4 quarts



1. _____
2. _____
3. _____
4. _____
5. _____
6. _____
7. _____
8. _____
9. _____


1)



Water in an ice tray

- A. 10 gallons
- B. 1 pint
- C. 4 pints
- D. 1 gallon

2)



Soda in a can

- A. 1.5 cups
- B. 4 cups
- C. 4 pints
- D. 1 gallon


3)



Measuring Cup

- A. 1 quart
- B. 1 pint
- C. 1 gallon
- D. 1 cup


4)



Sand a wheel barrow holds

- A. 4 cups
- B. 1000 grams
- C. 45 gallons
- D. 8 quarts


5)



Gas tank in a car

- A. 16 cups
- B. 4 pints
- C. 15 gallons
- D. 3 quarts

6)



Eyedropper holds

- A. less than 1 cup
- B. 1 cup
- C. 3 gallons
- D. 1 pint

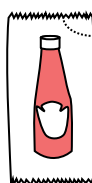
7)



2 liter of Soda

- A. 2 cups
- B. 1 pint
- C. 0.5 gallons
- D. 5 gallons

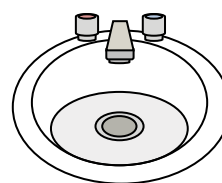
8)



Ketchup in a packet

- A. 0.5 gallons
- B. less than 1 cup
- C. 1.5 pints
- D. 2 quarts

9)



Water in bathroom sink

- A. 2 cups
- B. 2 gallons
- C. 2 pints
- D. 2 fluid ounces



Determine which letter best represents the volume.

Cup

A cup is about the amount of milk you get from the cafeteria.

Pint

A pint is about the amount you get in a large glass.

1 pint = 2 cups

Quart

A quart is about the amount you get in a large milk container.

1 quart = 2 pints


Gallon

A gallon is the amount that comes in the large plastic container.

1 gallon = 4 quarts




1)



Water in an ice tray

- A. 10 gallons
- B. 1 pint
- C. 4 pints
- D. 1 gallon

2)



Soda in a can

- A. 1.5 cups
- B. 4 cups
- C. 4 pints
- D. 1 gallon


3)



Measuring Cup

- A. 1 quart
- B. 1 pint
- C. 1 gallon
- D. 1 cup

4)



Sand a wheel barrow holds

- A. 4 cups
- B. 1000 grams
- C. 45 gallons
- D. 8 quarts


5)



Gas tank in a car

- A. 16 cups
- B. 4 pints
- C. 15 gallons
- D. 3 quarts

6)



Eyedropper holds

- A. less than 1 cup
- B. 1 cup
- C. 3 gallons
- D. 1 pint

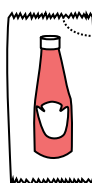
7)



2 liter of Soda

- A. 2 cups
- B. 1 pint
- C. 0.5 gallons
- D. 5 gallons

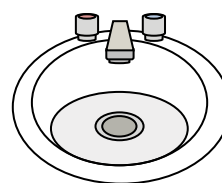
8)



Ketchup in a packet

- A. 0.5 gallons
- B. less than 1 cup
- C. 1.5 pints
- D. 2 quarts

9)



Water in bathroom sink

- A. 2 cups
- B. 2 gallons
- C. 2 pints
- D. 2 fluid ounces

Answers

1. **B**

2. **A**

3. **D**

4. **C**

5. **C**

6. **A**

7. **C**

8. **B**

9. **B**