




Determine which letter best represents the volume.

Milliliter

A milliliter is equal to about 20 drops of water.



Liter

Many large soda bottles are either 1 or 2 liters.

1 Liter = 1,000 Milliliters



Answers

1. _____
2. _____
3. _____
4. _____
5. _____
6. _____
7. _____
8. _____
9. _____

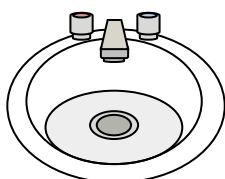
1)



Glue in a bottle

- A. 5 liters
- B. 120 milliliters
- C. 2 liters
- D. 3 milliliters

2)



Water in bathroom sink

- A. 10 milliliters
- B. 7.5 liters
- C. 500 milliliters
- D. 2 liters


3)



Shampoo in a bottle

- A. 20 liters
- B. 1 milliliter
- C. 1.5 liters
- D. 20 milliliters

4)



Ice Chest

- A. 20 milliliters
- B. 100 milliliters
- C. 200 milliliters
- D. 100 liters

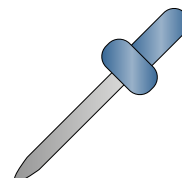
5)



Liquid in a tea cup

- A. 250 milliliters
- B. 2 liters
- C. 2 milliliters
- D. 5 liters


6)



Eyedropper holds

- A. 1000 milliliters
- B. 2 milliliters
- C. 500 milliliters
- D. 2 liters

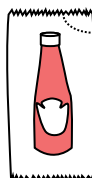
7)



Sand a wheel barrow holds

- A. 50 milliliters
- B. 3 liters
- C. 170 liters
- D. 500 milliliters


8)



Ketchup in a packet

- A. 500 milliliters
- B. 1 milliliter
- C. 1 liter
- D. 50 milliliters

9)



Gas tank in a car

- A. 60 liters
- B. 70 milliliters
- C. 15 milliliters
- D. 3 liters



Determine which letter best represents the volume.

Milliliter

A milliliter is equal to about 20 drops of water.



Liter

Many large soda bottles are either 1 or 2 liters.

1 Liter = 1,000 Milliliters



Answers

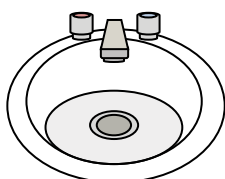
1)



Glue in a bottle

- A. 5 liters
- B. 120 milliliters
- C. 2 liters
- D. 3 milliliters

2)



Water in bathroom sink

- A. 10 milliliters
- B. 7.5 liters
- C. 500 milliliters
- D. 2 liters


3)



Shampoo in a bottle

- A. 20 liters
- B. 1 milliliter
- C. 1.5 liters
- D. 20 milliliters

4)



Ice Chest

- A. 20 milliliters
- B. 100 milliliters
- C. 200 milliliters
- D. 100 liters


5)



Liquid in a tea cup

- A. 250 milliliters
- B. 2 liters
- C. 2 milliliters
- D. 5 liters


6)



Eyedropper holds

- A. 1000 milliliters
- B. 2 milliliters
- C. 500 milliliters
- D. 2 liters

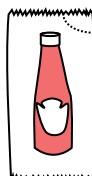
7)



Sand a wheel barrow holds

- A. 50 milliliters
- B. 3 liters
- C. 170 liters
- D. 500 milliliters


8)



Ketchup in a packet

- A. 500 milliliters
- B. 1 milliliter
- C. 1 liter
- D. 50 milliliters

9)



Gas tank in a car

- A. 60 liters
- B. 70 milliliters
- C. 15 milliliters
- D. 3 liters

- 1. **B**
- 2. **B**
- 3. **C**
- 4. **D**
- 5. **A**
- 6. **B**
- 7. **C**
- 8. **B**
- 9. **A**