


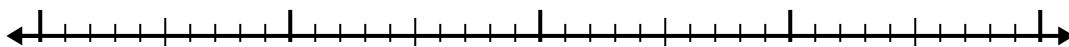


Use the number line to solve each problem.

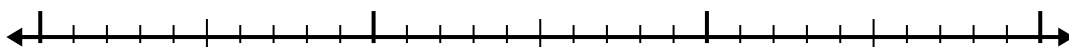
1) $2.1 + 3.4 =$




2) $2.5 + 2.1 =$




3) $6.9 + 1.2 =$




4) $6.8 + 1.3 =$



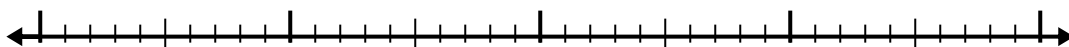
5) $7.1 + 1.8 =$



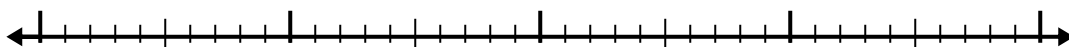
6) $3.8 + 2.1 =$



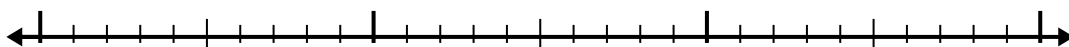
7) $7.2 + 2.1 =$



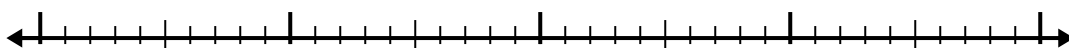
8) $6 + 1.8 =$



9) $4.5 + 1.1 =$



10) $3.3 + 2.7 =$



Answers

1. _____

2. _____

3. _____

4. _____

5. _____

6. _____

7. _____

8. _____

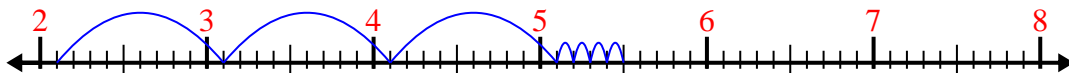
9. _____

10. _____

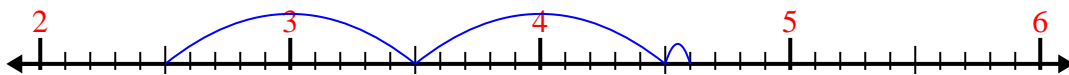


Use the number line to solve each problem.


1) $2.1 + 3.4 =$



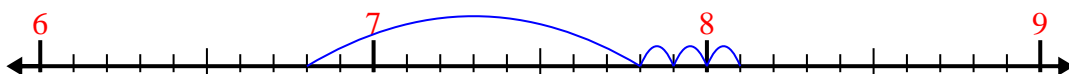
2) $2.5 + 2.1 =$



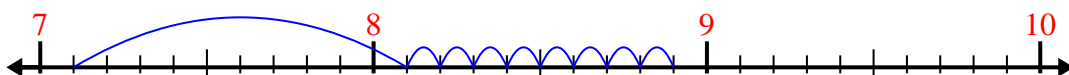
3) $6.9 + 1.2 =$



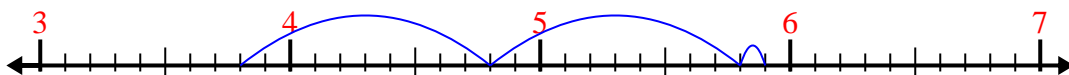
4) $6.8 + 1.3 =$



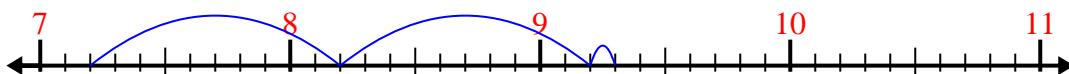
5) $7.1 + 1.8 =$



6) $3.8 + 2.1 =$



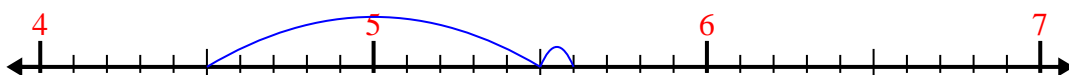
7) $7.2 + 2.1 =$



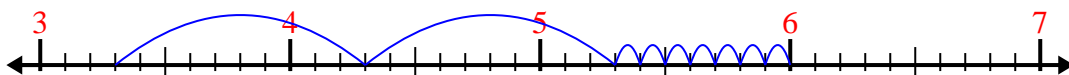
8) $6 + 1.8 =$



9) $4.5 + 1.1 =$



10) $3.3 + 2.7 =$



Answers

1. 5.5
2. 4.6
3. 8.1
4. 8.1
5. 8.9
6. 5.9
7. 9.3
8. 7.8
9. 5.6
10. 6.0