



Use the number line to solve each problem.

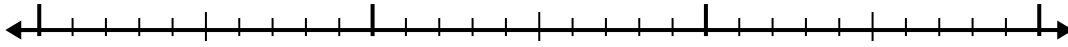
1) $2.1 + 3.4 =$



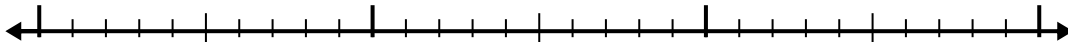
2) $2.5 + 2.1 =$



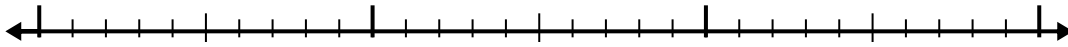
3) $6.9 + 1.2 =$




4) $6.8 + 1.3 =$




5) $7.1 + 1.8 =$




6) $3.8 + 2.1 =$



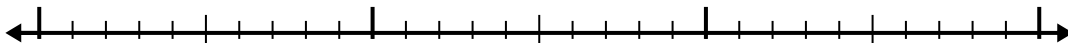
7) $7.2 + 2.1 =$



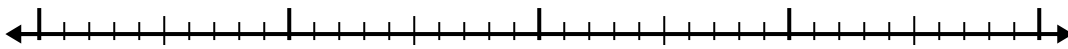
8) $6 + 1.8 =$



9) $4.5 + 1.1 =$



10) $3.3 + 2.7 =$



Answers

1. _____

2. _____

3. _____

4. _____

5. _____

6. _____

7. _____

8. _____

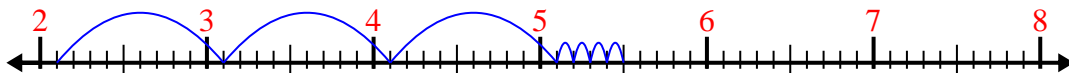
9. _____

10. _____

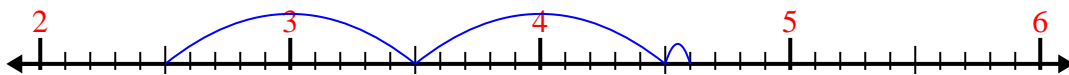


Use the number line to solve each problem.


1) $2.1 + 3.4 =$



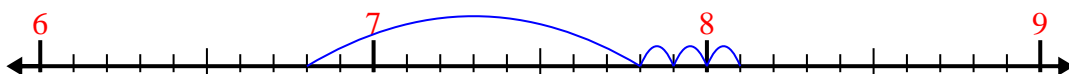
2) $2.5 + 2.1 =$



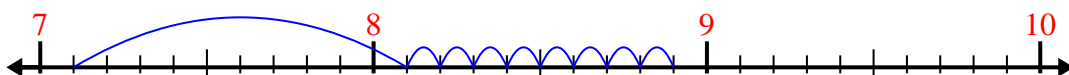
3) $6.9 + 1.2 =$



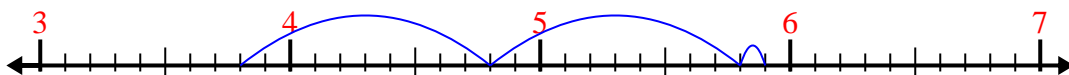
4) $6.8 + 1.3 =$



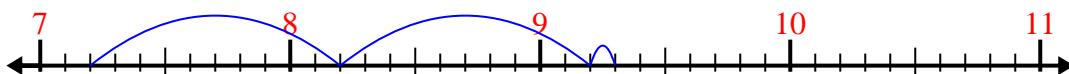
5) $7.1 + 1.8 =$



6) $3.8 + 2.1 =$



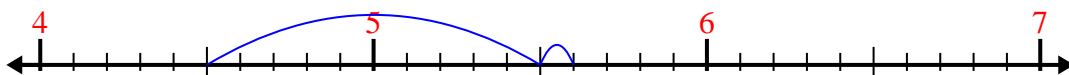
7) $7.2 + 2.1 =$



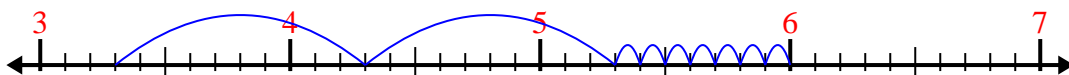
8) $6 + 1.8 =$



9) $4.5 + 1.1 =$



10) $3.3 + 2.7 =$



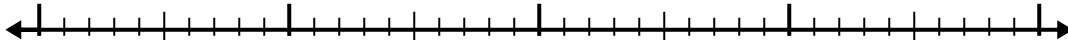
Answers

1. 5.5
2. 4.6
3. 8.1
4. 8.1
5. 8.9
6. 5.9
7. 9.3
8. 7.8
9. 5.6
10. 6.0

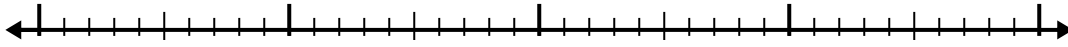


Use the number line to solve each problem.

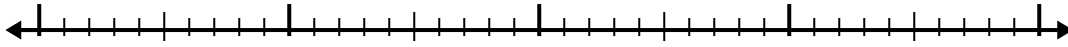
1) $6.1 + 1.7 =$



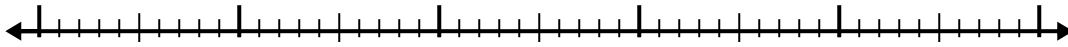
2) $2.8 + 1.3 =$




3) $5.6 + 1.3 =$



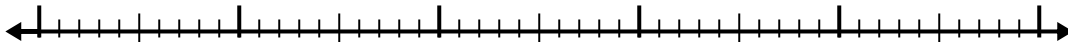
4) $7.5 + 3.7 =$



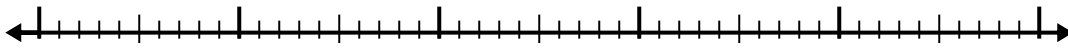
5) $7.8 + 2.9 =$



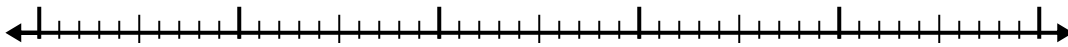
6) $3.4 + 2.5 =$



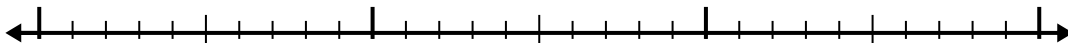
7) $6.7 + 2.7 =$



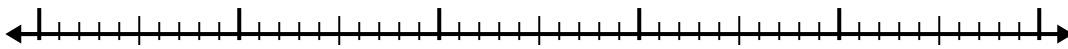
8) $2.1 + 3.3 =$



9) $1 + 1.7 =$



10) $3 + 3.1 =$



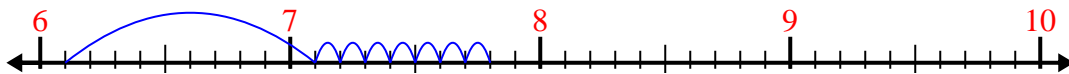
Answers

- 1. _____
- 2. _____
- 3. _____
- 4. _____
- 5. _____
- 6. _____
- 7. _____
- 8. _____
- 9. _____
- 10. _____

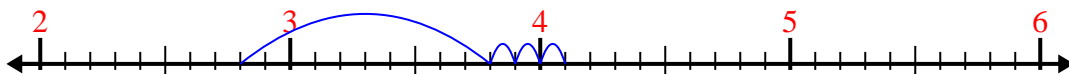


Use the number line to solve each problem.

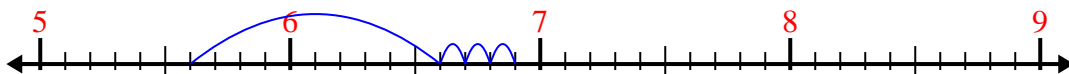
1) $6.1 + 1.7 =$



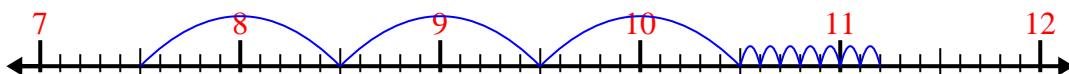
2) $2.8 + 1.3 =$



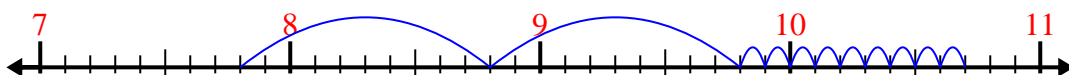
3) $5.6 + 1.3 =$



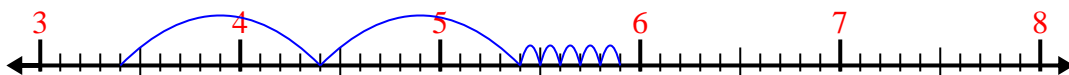
4) $7.5 + 3.7 =$



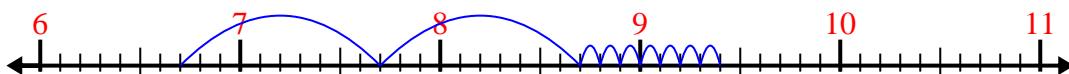
5) $7.8 + 2.9 =$



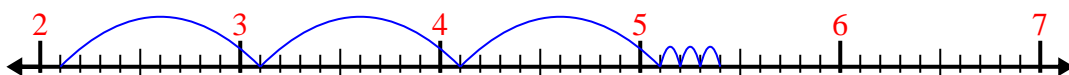
6) $3.4 + 2.5 =$



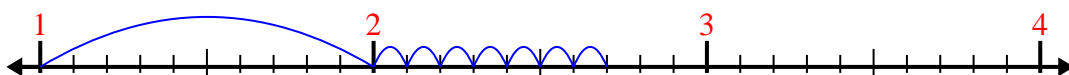
7) $6.7 + 2.7 =$




8) $2.1 + 3.3 =$



9) $1 + 1.7 =$



10) $3 + 3.1 =$



Answers

1. 7.8

2. 4.1

3. 6.9

4. 11.2

5. 10.7

6. 5.9

7. 9.4

8. 5.4

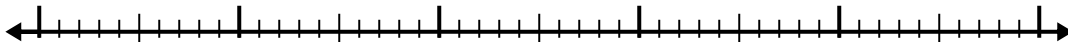
9. 2.7

10. 6.1

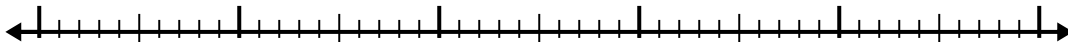


Use the number line to solve each problem.

1) $2.6 + 3.6 =$



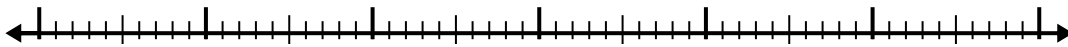
2) $3 + 2.2 =$



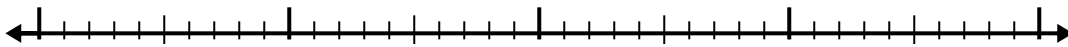
3) $1.1 + 2.2 =$



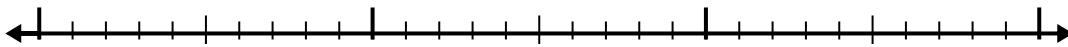
4) $3.7 + 3.9 =$



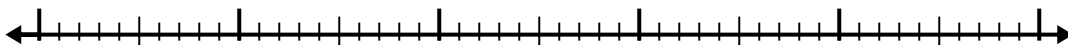
5) $8.2 + 2.2 =$



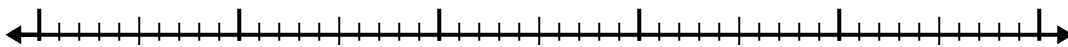
6) $5.4 + 1.8 =$



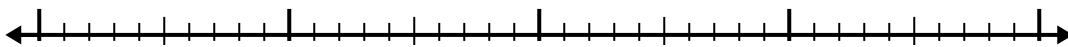
7) $2.2 + 3.6 =$



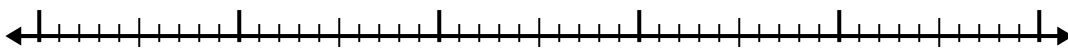
8) $5.4 + 2.8 =$



9) $3.5 + 2.2 =$



10) $1.9 + 2.2 =$



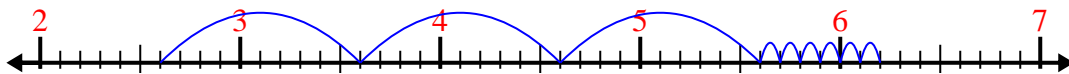
Answers

- 1. _____
- 2. _____
- 3. _____
- 4. _____
- 5. _____
- 6. _____
- 7. _____
- 8. _____
- 9. _____
- 10. _____

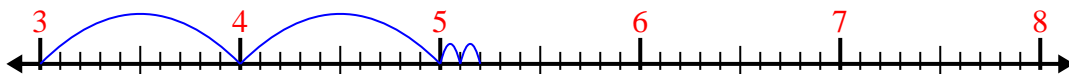


Use the number line to solve each problem.

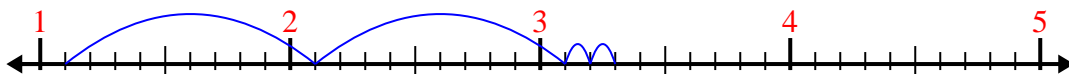
1) $2.6 + 3.6 =$



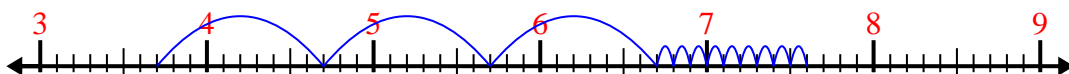
2) $3 + 2.2 =$



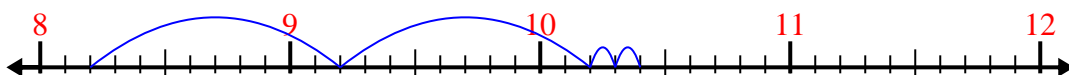
3) $1.1 + 2.2 =$



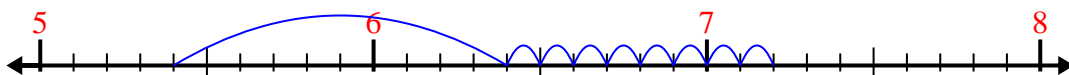
4) $3.7 + 3.9 =$



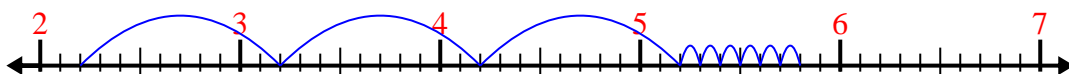
5) $8.2 + 2.2 =$



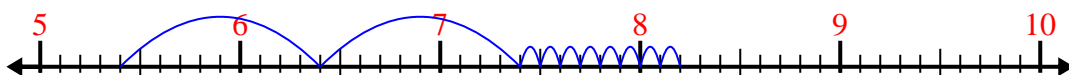
6) $5.4 + 1.8 =$



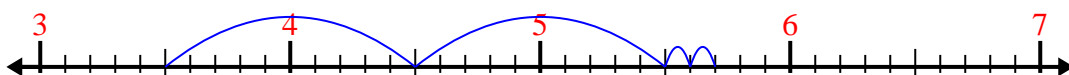
7) $2.2 + 3.6 =$



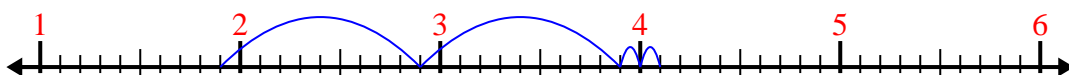
8) $5.4 + 2.8 =$



9) $3.5 + 2.2 =$



10) $1.9 + 2.2 =$



Answers

1. 6.2

2. 5.2

3. 3.3

4. 7.6

5. 10.4

6. 7.2

7. 5.8

8. 8.2


9. 5.7

10. 4.1

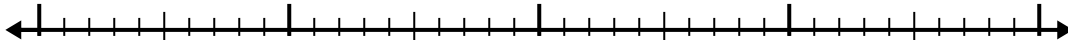


Use the number line to solve each problem.

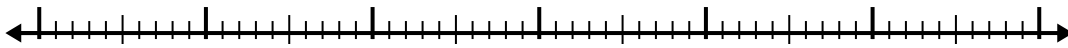
1) $2.7 + 3.1 =$



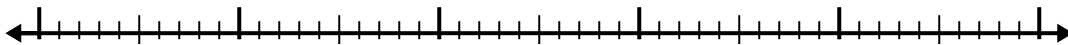
2) $5.1 + 2.3 =$




3) $7.2 + 3.1 =$



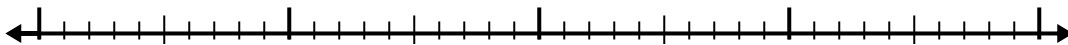
4) $3.2 + 3.7 =$



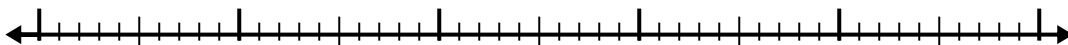
5) $7.6 + 3.6 =$




6) $1.8 + 2.7 =$



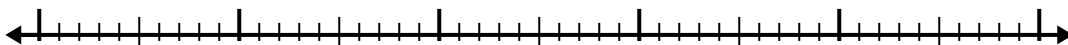
7) $1.7 + 2.4 =$



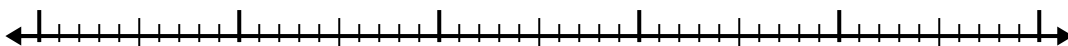
8) $8.8 + 3.6 =$



9) $8.9 + 2.6 =$



10) $5.3 + 3.9 =$



Answers

1. _____

2. _____

3. _____

4. _____

5. _____

6. _____

7. _____

8. _____

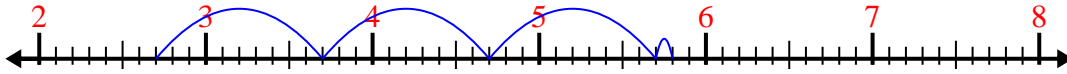
9. _____

10. _____

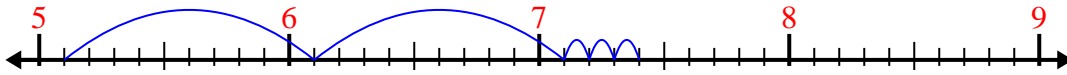


Use the number line to solve each problem.

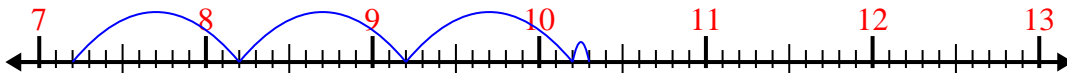
1) $2.7 + 3.1 =$



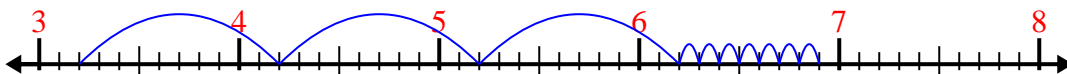
2) $5.1 + 2.3 =$



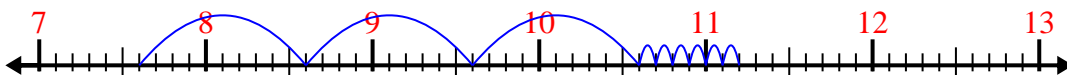
3) $7.2 + 3.1 =$



4) $3.2 + 3.7 =$



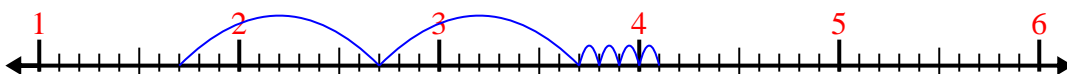
5) $7.6 + 3.6 =$



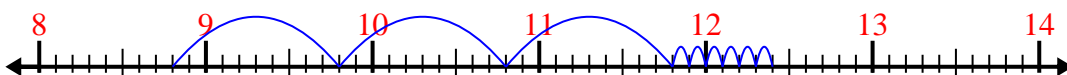
6) $1.8 + 2.7 =$



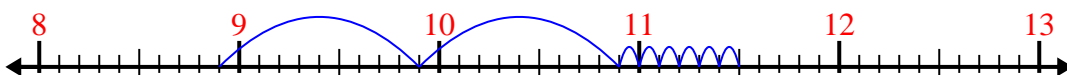
7) $1.7 + 2.4 =$



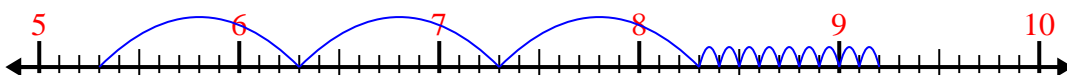
8) $8.8 + 3.6 =$



9) $8.9 + 2.6 =$



10) $5.3 + 3.9 =$



Answers

1. 5.8

2. 7.4

3. 10.3

4. 6.9

5. 11.2

6. 4.5

7. 4.1

8. 12.4

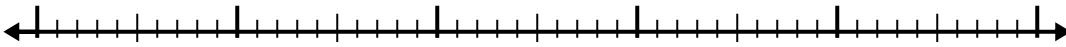
9. 11.5

10. 9.2



Use the number line to solve each problem.

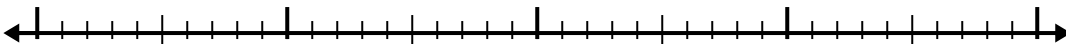
1) $4.8 + 3.8 =$



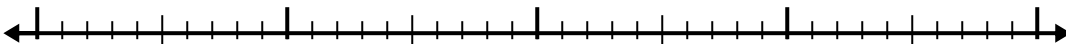
2) $6.1 + 2.7 =$



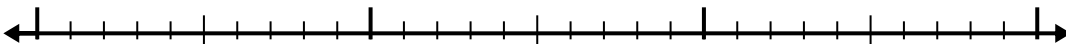
3) $5.5 + 1.3 =$



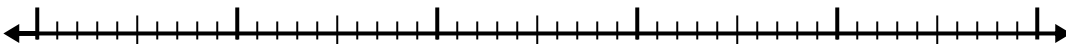
4) $2.8 + 2.4 =$



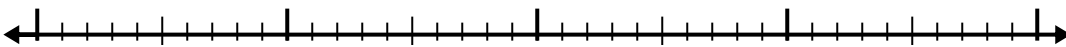
5) $1.4 + 1.3 =$




6) $4.6 + 2.4 =$



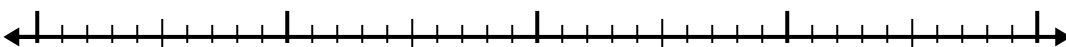
7) $8 + 2.5 =$




8) $8.5 + 3.8 =$



9) $1.5 + 2.7 =$



10) $1.7 + 1.3 =$



Answers

1. _____

2. _____

3. _____

4. _____

5. _____

6. _____

7. _____

8. _____


9. _____

10. _____

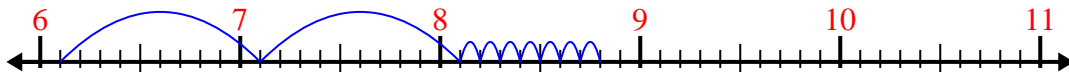


Use the number line to solve each problem.

1) $4.8 + 3.8 =$



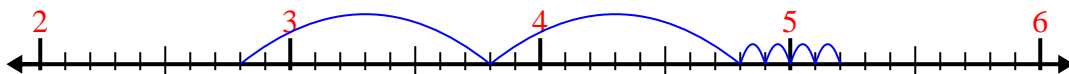
2) $6.1 + 2.7 =$



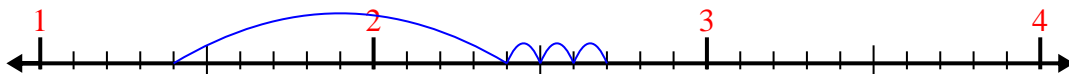
3) $5.5 + 1.3 =$



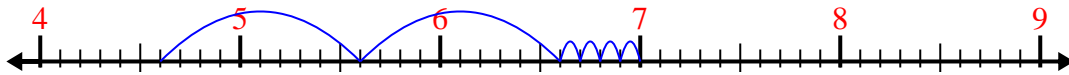
4) $2.8 + 2.4 =$



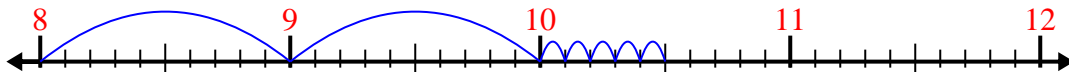
5) $1.4 + 1.3 =$



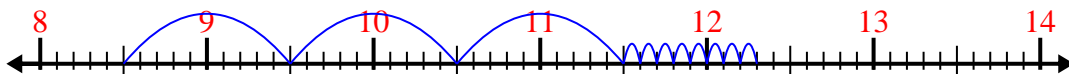
6) $4.6 + 2.4 =$



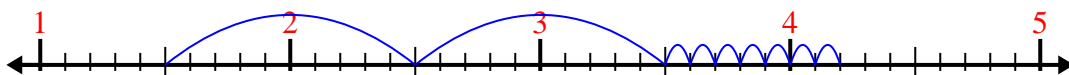
7) $8 + 2.5 =$



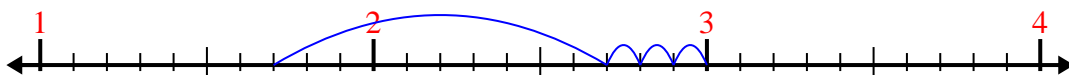
8) $8.5 + 3.8 =$



9) $1.5 + 2.7 =$



10) $1.7 + 1.3 =$



Answers

1. 8.6

2. 8.8

3. 6.8

4. 5.2

5. 2.7

6. 7.0

7. 10.5

8. 12.3

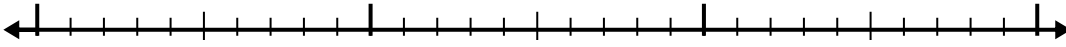
9. 4.2

10. 3.0

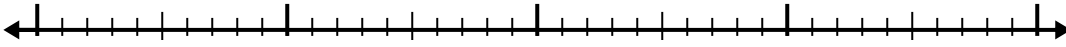


Use the number line to solve each problem.

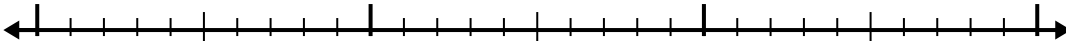
1) $1.2 + 1.3 =$



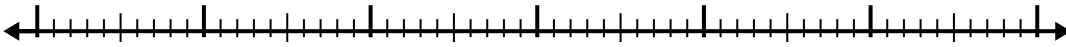
2) $8.4 + 2.4 =$



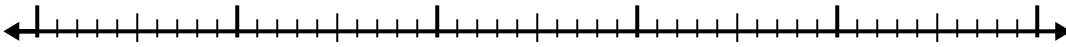
3) $2.8 + 1.7 =$



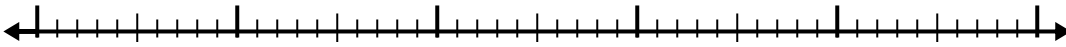
4) $6.1 + 3.8 =$



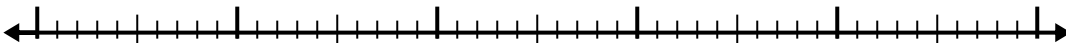
5) $1.9 + 2.5 =$



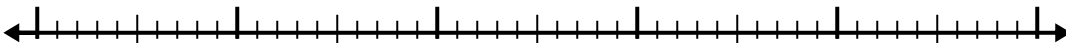
6) $7.3 + 2.4 =$



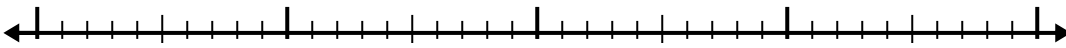
7) $8.9 + 3.7 =$



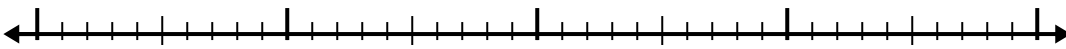
8) $3.5 + 2.7 =$



9) $6.1 + 1.6 =$



10) $4.4 + 2.1 =$



Answers

1. _____

2. _____

3. _____

4. _____

5. _____

6. _____

7. _____

8. _____

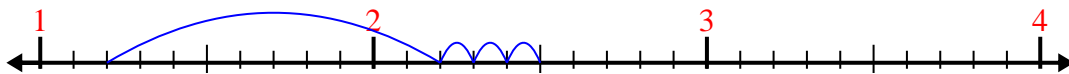
9. _____

10. _____

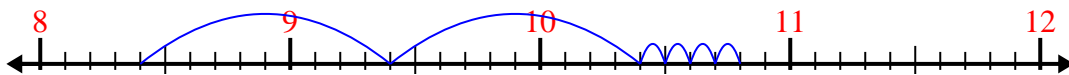


Use the number line to solve each problem.

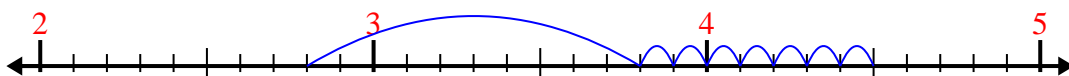
1) $1.2 + 1.3 =$



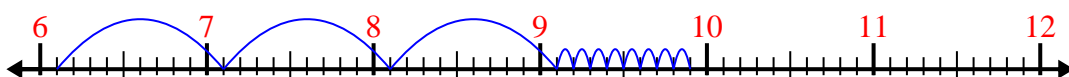
2) $8.4 + 2.4 =$




3) $2.8 + 1.7 =$



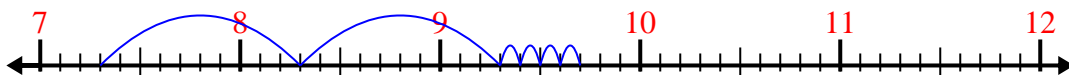
4) $6.1 + 3.8 =$




5) $1.9 + 2.5 =$



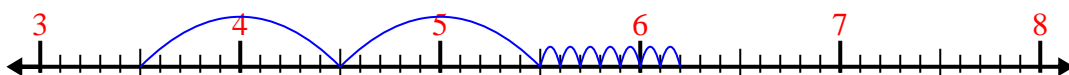
6) $7.3 + 2.4 =$



7) $8.9 + 3.7 =$



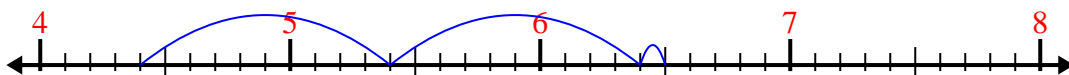
8) $3.5 + 2.7 =$



9) $6.1 + 1.6 =$



10) $4.4 + 2.1 =$



Answers

1. 2.5

2. 10.8

3. 4.5

4. 9.9

5. 4.4

6. 9.7

7. 12.6

8. 6.2


9. 7.7

10. 6.5

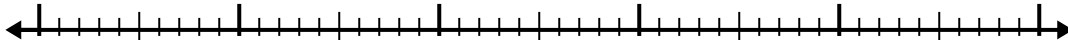


Use the number line to solve each problem.

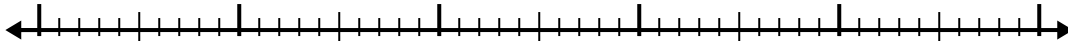
1) $7.4 + 2.2 =$



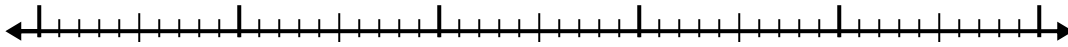
2) $5.4 + 2.3 =$




3) $4.7 + 2.9 =$



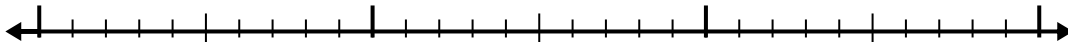
4) $4.4 + 3.7 =$




5) $2.2 + 2.3 =$




6) $3.9 + 1.3 =$



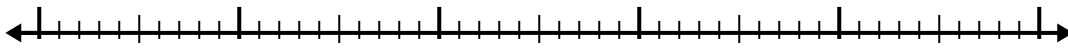
7) $1 + 3.9 =$



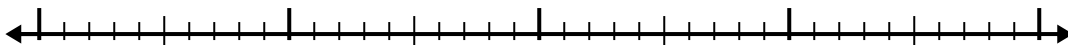
8) $5.8 + 2.1 =$



9) $6.3 + 2.3 =$



10) $7.3 + 2.9 =$



Answers

1. _____

2. _____

3. _____

4. _____

5. _____

6. _____

7. _____

8. _____

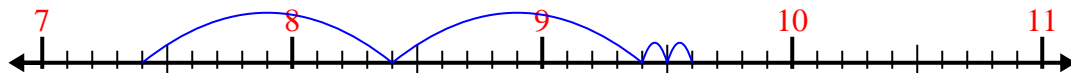
9. _____

10. _____

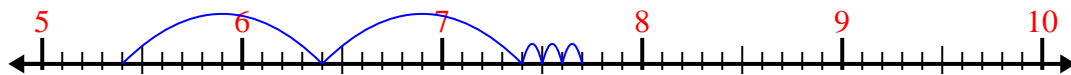


Use the number line to solve each problem.

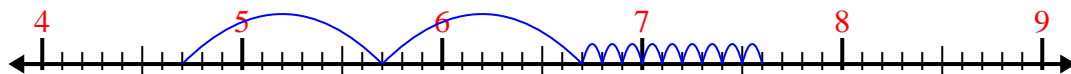
1) $7.4 + 2.2 =$




2) $5.4 + 2.3 =$



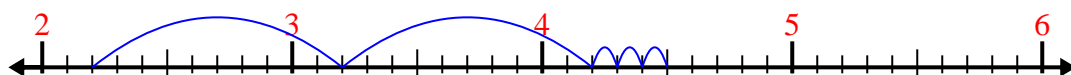
3) $4.7 + 2.9 =$



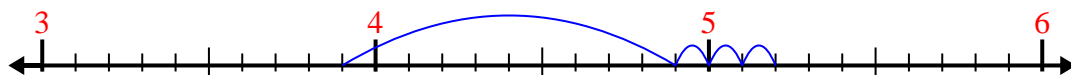
4) $4.4 + 3.7 =$



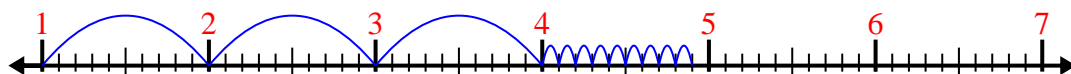
5) $2.2 + 2.3 =$



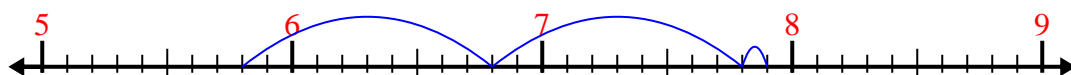
6) $3.9 + 1.3 =$



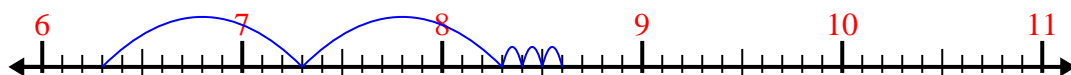
7) $1 + 3.9 =$



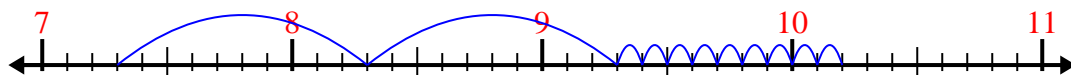
8) $5.8 + 2.1 =$



9) $6.3 + 2.3 =$



10) $7.3 + 2.9 =$



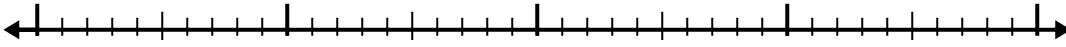
Answers

1. 9.6
2. 7.7
3. 7.6
4. 8.1
5. 4.5
6. 5.2
7. 4.9
8. 7.9
9. 8.6
10. 10.2

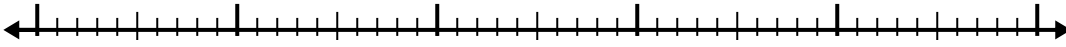


Use the number line to solve each problem.

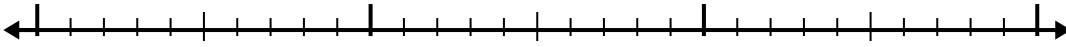
1) $4.4 + 2.6 =$



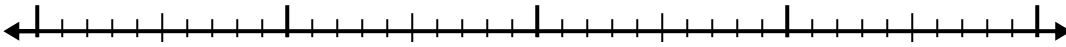
2) $3.5 + 2.7 =$



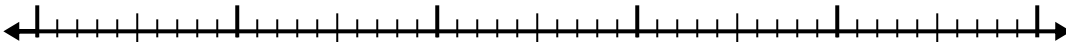
3) $1.3 + 1.2 =$



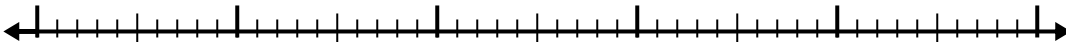
4) $3.3 + 1.9 =$



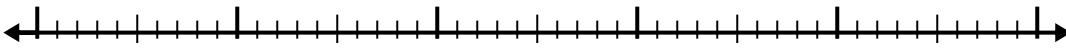
5) $8.9 + 3.4 =$



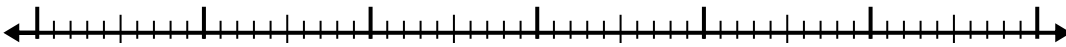
6) $8.3 + 2.7 =$



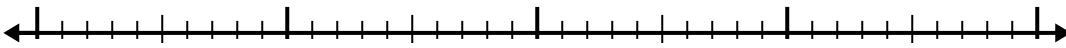
7) $5.3 + 2.7 =$



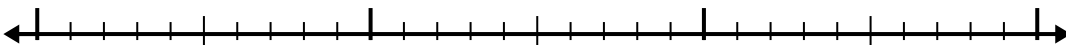
8) $1.9 + 3.1 =$



9) $8.6 + 2.3 =$



10) $4 + 1.1 =$



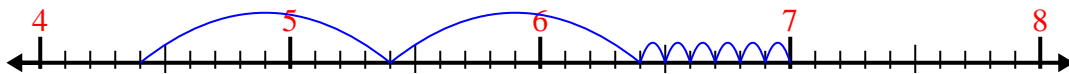
Answers

- 1. _____
- 2. _____
- 3. _____
- 4. _____
- 5. _____
- 6. _____
- 7. _____
- 8. _____
- 9. _____
- 10. _____

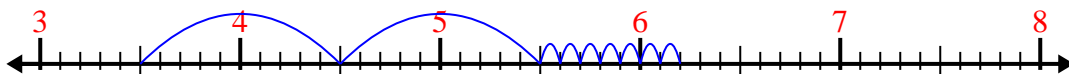


Use the number line to solve each problem.

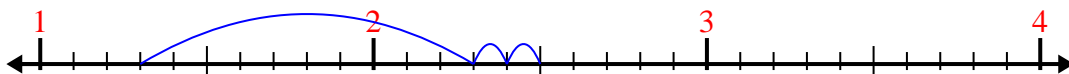
1) $4.4 + 2.6 =$



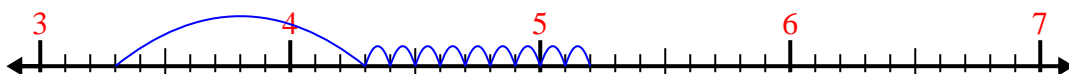
2) $3.5 + 2.7 =$




3) $1.3 + 1.2 =$



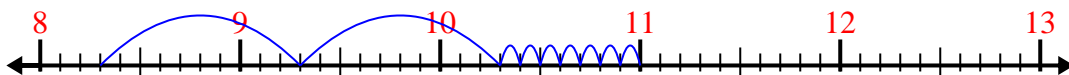
4) $3.3 + 1.9 =$



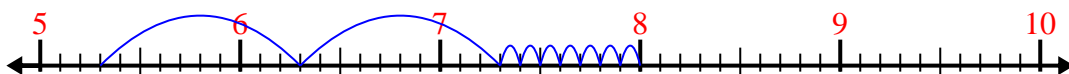
5) $8.9 + 3.4 =$



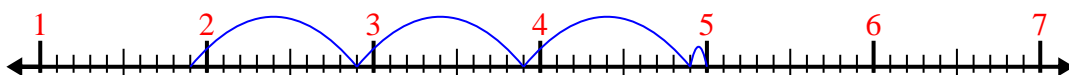
6) $8.3 + 2.7 =$



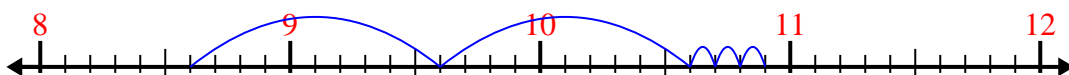
7) $5.3 + 2.7 =$



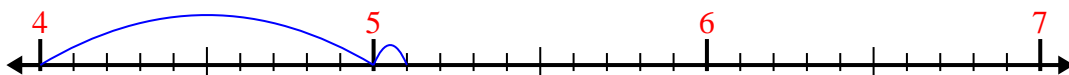
8) $1.9 + 3.1 =$



9) $8.6 + 2.3 =$



10) $4 + 1.1 =$



Answers

1. 7.0

2. 6.2

3. 2.5

4. 5.2

5. 12.3

6. 11.0

7. 8.0

8. 5.0


9. 10.9

10. 5.1



Use the number line to solve each problem.

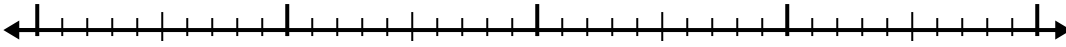
1) $6.5 + 3.2 =$



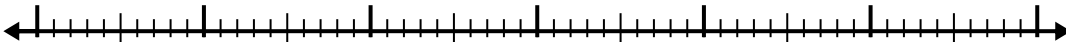
2) $5.3 + 3.8 =$



3) $3.1 + 1.1 =$



4) $8.4 + 3.2 =$




5) $5.7 + 1.2 =$



6) $2 + 2.8 =$



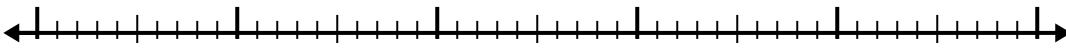
7) $4.2 + 1.8 =$



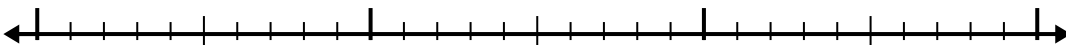
8) $6.6 + 1.4 =$



9) $4.3 + 3.9 =$



10) $1.1 + 1.4 =$



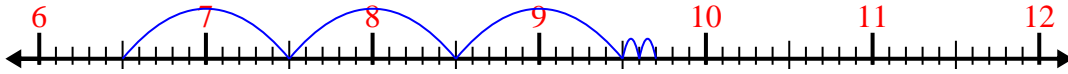
Answers

- 1. _____
- 2. _____
- 3. _____
- 4. _____
- 5. _____
- 6. _____
- 7. _____
- 8. _____
- 9. _____
- 10. _____

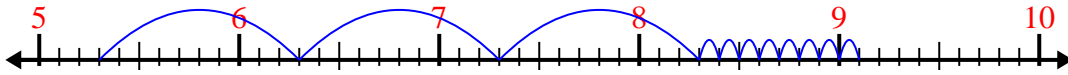


Use the number line to solve each problem.

1) $6.5 + 3.2 =$



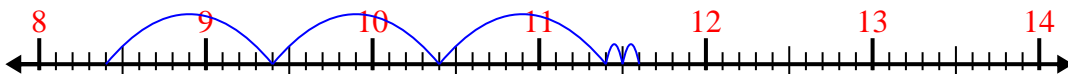
2) $5.3 + 3.8 =$



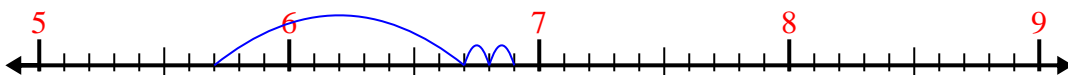
3) $3.1 + 1.1 =$



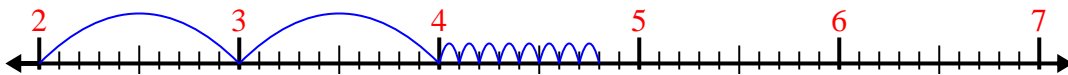
4) $8.4 + 3.2 =$



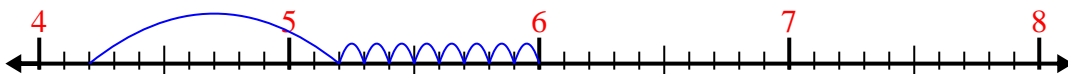
5) $5.7 + 1.2 =$



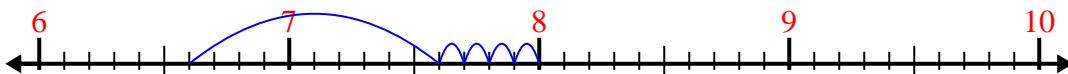
6) $2 + 2.8 =$



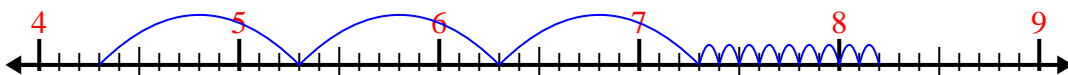
7) $4.2 + 1.8 =$



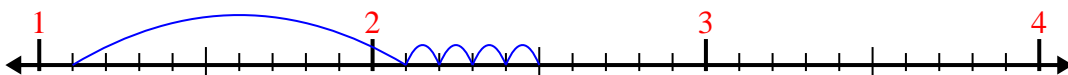
8) $6.6 + 1.4 =$



9) $4.3 + 3.9 =$



10) $1.1 + 1.4 =$



Answers

1. 9.7

2. 9.1

3. 4.2

4. 11.6

5. 6.9

6. 4.8

7. 6.0

8. 8.0

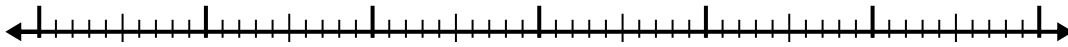
9. 8.2

10. 2.5

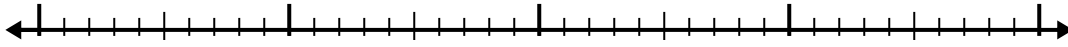


Use the number line to solve each problem.

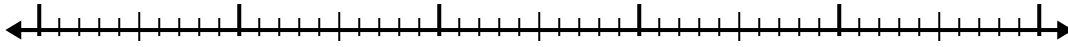
1) $5.5 + 3.6 =$



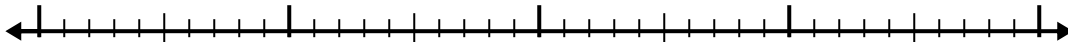
2) $6.5 + 1.6 =$




3) $3.5 + 3.2 =$



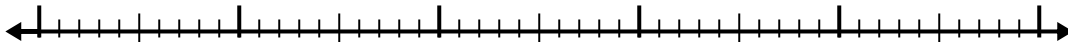
4) $7.7 + 2.6 =$




5) $3.9 + 1.9 =$




6) $5.9 + 2.3 =$



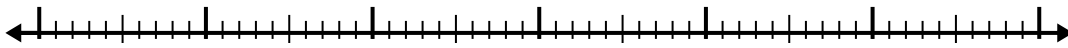
7) $4.3 + 1.6 =$



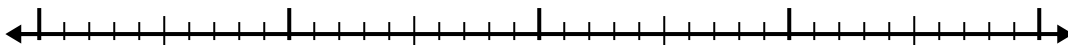
8) $8.3 + 2.9 =$



9) $7 + 3.5 =$



10) $5.6 + 2.4 =$



Answers

1. _____

2. _____

3. _____

4. _____

5. _____

6. _____

7. _____

8. _____

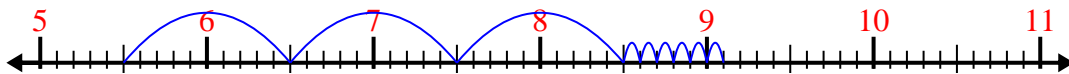
9. _____

10. _____

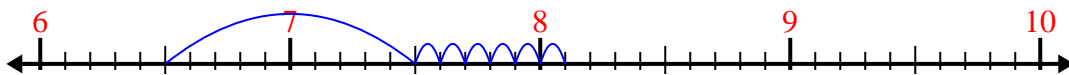


Use the number line to solve each problem.

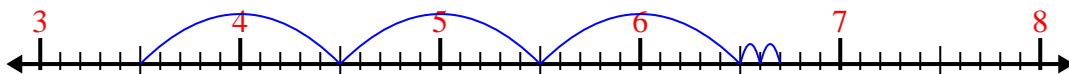
1) $5.5 + 3.6 =$



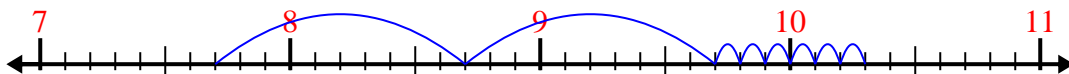
2) $6.5 + 1.6 =$



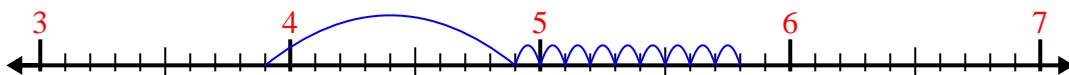
3) $3.5 + 3.2 =$



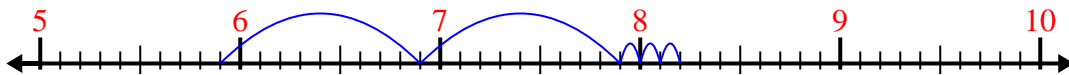
4) $7.7 + 2.6 =$



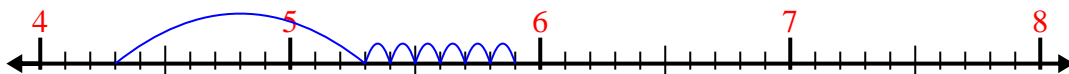
5) $3.9 + 1.9 =$



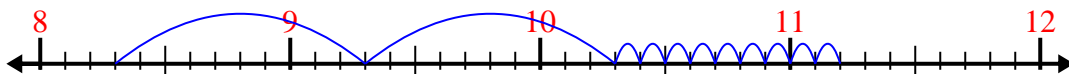
6) $5.9 + 2.3 =$



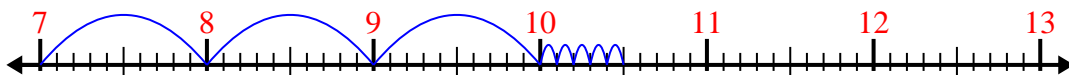
7) $4.3 + 1.6 =$



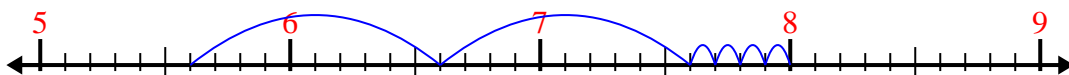
8) $8.3 + 2.9 =$



9) $7 + 3.5 =$



10) $5.6 + 2.4 =$



Answers

1. 9.1

2. 8.1

3. 6.7

4. 10.3

5. 5.8

6. 8.2

7. 5.9

8. 11.2

9. 10.5

10. 8.0