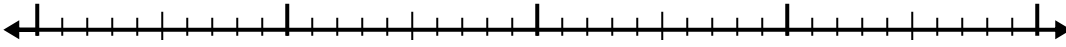


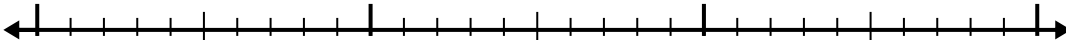


Use the number line to solve each problem.

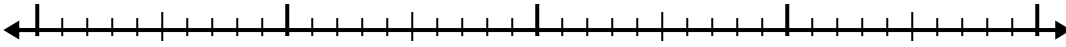
1) $6.5 + 2.7 =$



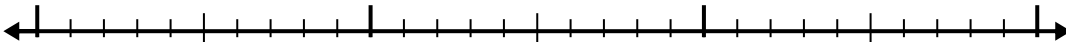
2) $2.5 + 1.7 =$



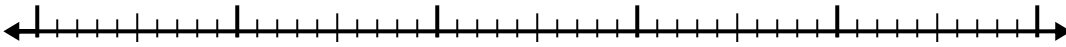
3) $1.8 + 2.7 =$



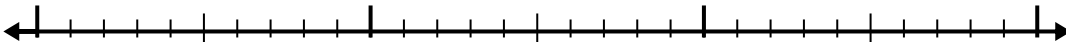
4) $3.8 + 1.6 =$



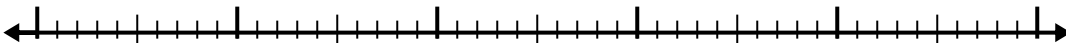
5) $3 + 2.3 =$



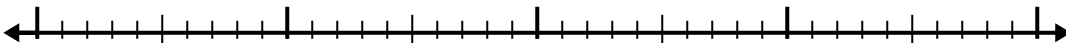
6) $3.5 + 1.9 =$



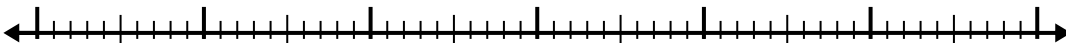
7) $6.6 + 2.2 =$



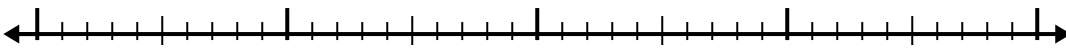
8) $2.9 + 1.6 =$



9) $6.7 + 3.2 =$



10) $6.7 + 1.6 =$



Answers

1. _____

2. _____

3. _____

4. _____

5. _____

6. _____

7. _____

8. _____

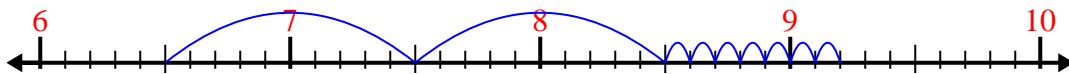
9. _____

10. _____

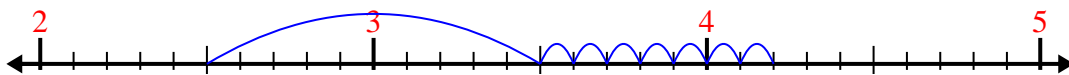


Use the number line to solve each problem.

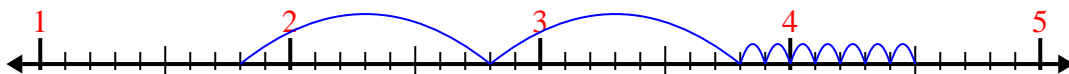
1) $6.5 + 2.7 =$



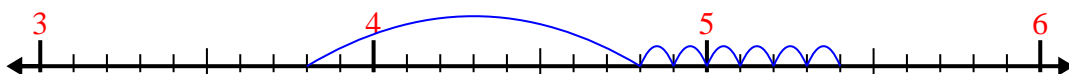
2) $2.5 + 1.7 =$




3) $1.8 + 2.7 =$



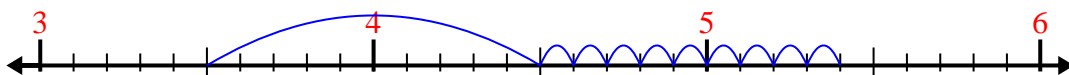
4) $3.8 + 1.6 =$



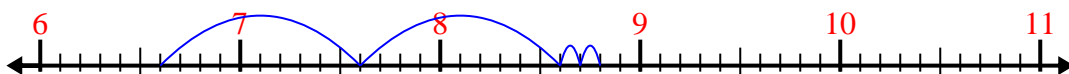
5) $3 + 2.3 =$



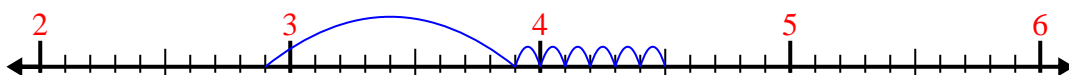
6) $3.5 + 1.9 =$



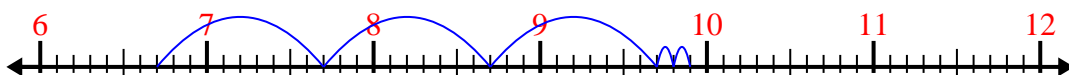
7) $6.6 + 2.2 =$



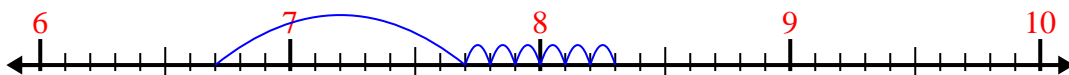
8) $2.9 + 1.6 =$



9) $6.7 + 3.2 =$



10) $6.7 + 1.6 =$



Answers

1. 9.2

2. 4.2

3. 4.5

4. 5.4

5. 5.3

6. 5.4

7. 8.8

8. 4.5

9. 9.9

10. 8.3