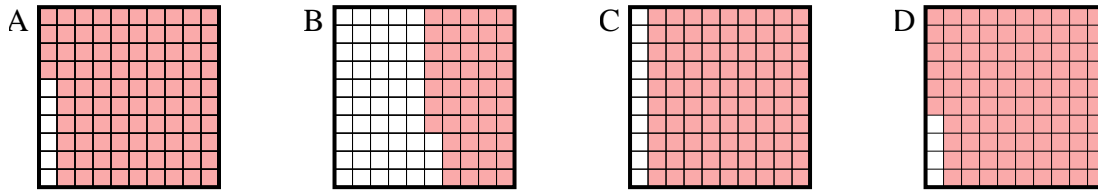




Determine which letter best answer the question.

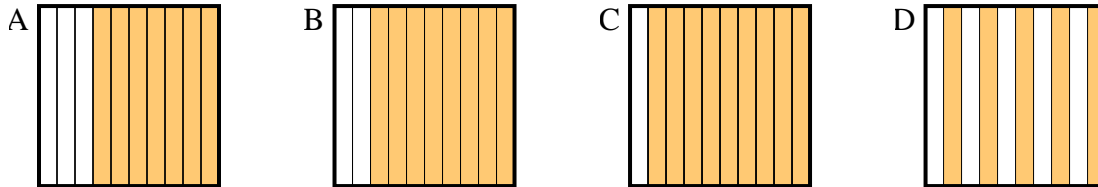
Answers

- 1) Which  $10 \times 10$  grid is shaded to represent the decimal number that, when added to 0.04, results in a total of 1.00?



1. \_\_\_\_\_

- 2) Which  $10 \times 1$  grid is shaded to represent the decimal number that, when added to 0.5, results in a total of 1.00?



2. \_\_\_\_\_

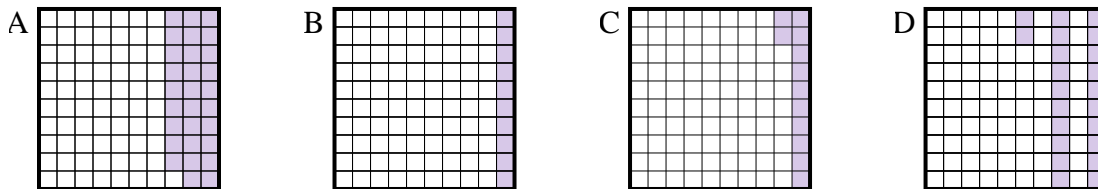
3. \_\_\_\_\_

4. \_\_\_\_\_

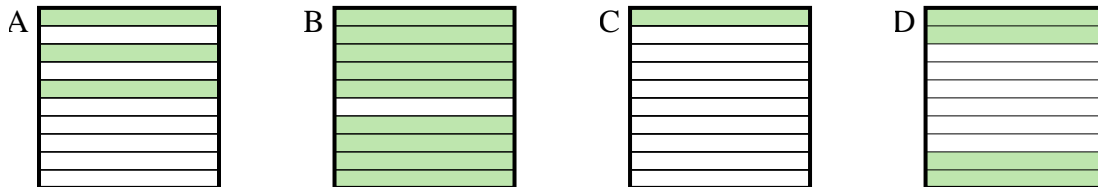
5. \_\_\_\_\_

6. \_\_\_\_\_

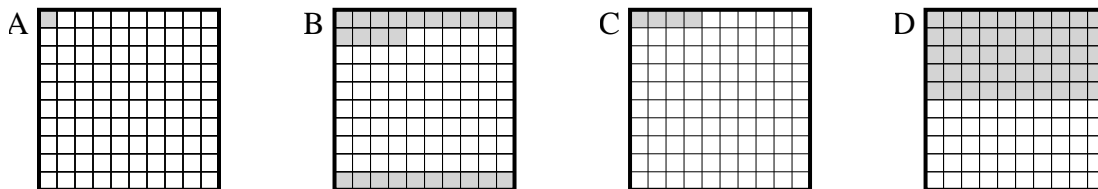
- 3) Which  $10 \times 10$  grid is shaded to represent the decimal number that, when added to 0.88, results in a total of 1.00?



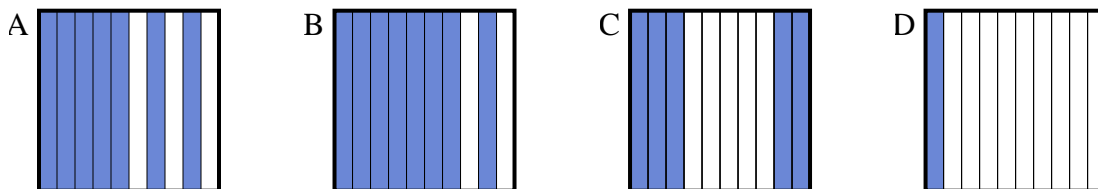
- 4) Which  $10 \times 1$  grid is shaded to represent the decimal number that, when added to 0.6, results in a total of 1.00?



- 5) Which  $10 \times 10$  grid is shaded to represent the decimal number that, when added to 0.96, results in a total of 1.00?



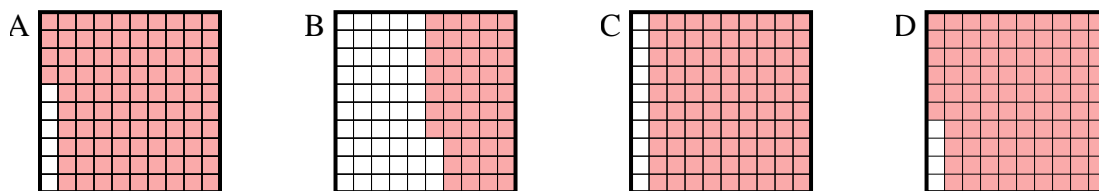
- 6) Which  $10 \times 1$  grid is shaded to represent the decimal number that, when added to 0.3, results in a total of 1.00?



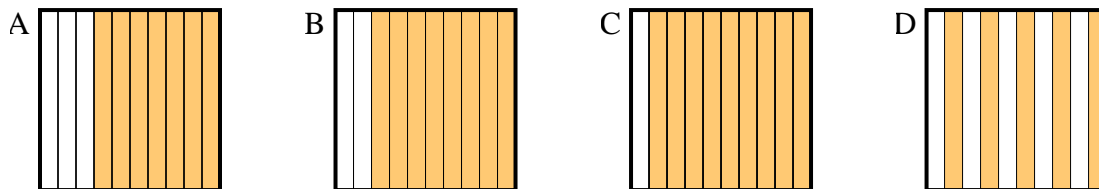


Determine which letter best answer the question.

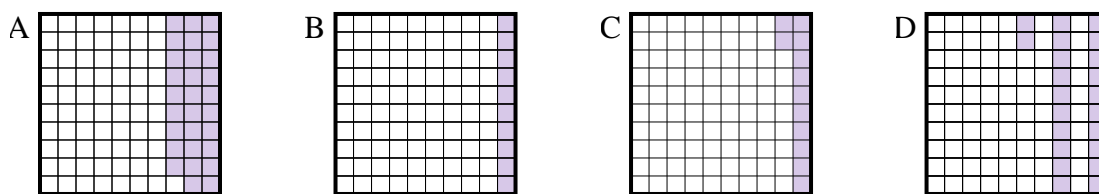
1) Which  $10 \times 10$  grid is shaded to represent the decimal number that, when added to 0.04, results in a total of 1.00?



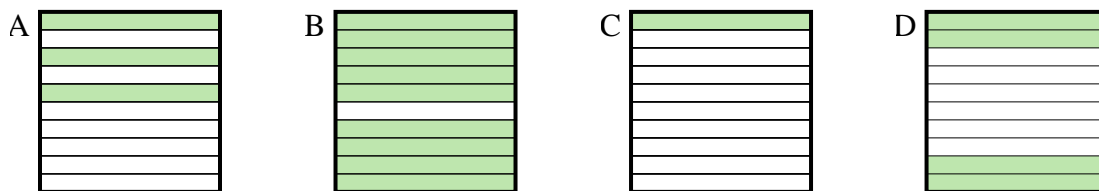
2) Which  $10 \times 1$  grid is shaded to represent the decimal number that, when added to 0.5, results in a total of 1.00?



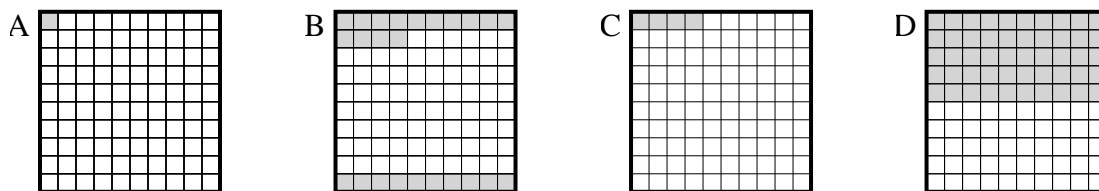
3) Which  $10 \times 10$  grid is shaded to represent the decimal number that, when added to 0.88, results in a total of 1.00?



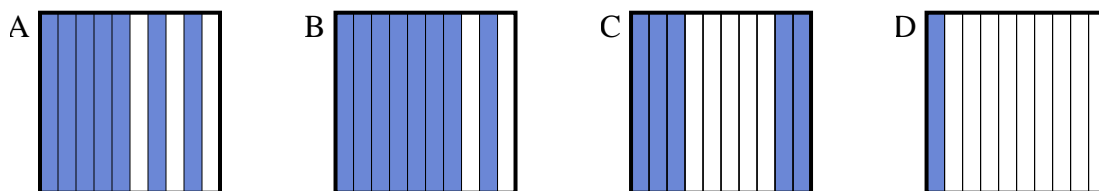
4) Which  $10 \times 1$  grid is shaded to represent the decimal number that, when added to 0.6, results in a total of 1.00?



5) Which  $10 \times 10$  grid is shaded to represent the decimal number that, when added to 0.96, results in a total of 1.00?



6) Which  $10 \times 1$  grid is shaded to represent the decimal number that, when added to 0.3, results in a total of 1.00?



Answers

1. **D**

2. **D**

3. **C**

4. **D**

5. **C**

6. **A**