



Use the block on the left to find the value of the set of blocks on the right.

Answers

1) = 1

1. \_\_\_\_\_

2) = 1

2. \_\_\_\_\_

3) = 1

3. \_\_\_\_\_

4) = 1

4. \_\_\_\_\_

5) = 1

5. \_\_\_\_\_

6) = 1

6. \_\_\_\_\_

7) = 1

7. \_\_\_\_\_

8) = 1

8. \_\_\_\_\_

9) = 1

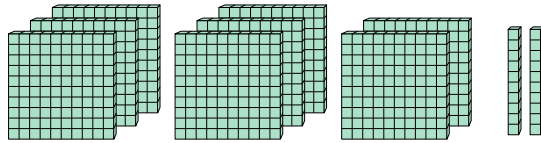
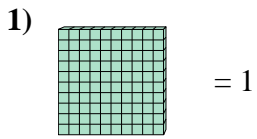
9. \_\_\_\_\_

10) = 1

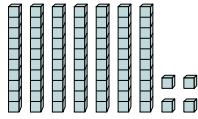
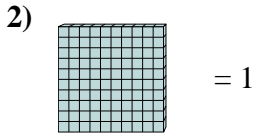
10. \_\_\_\_\_



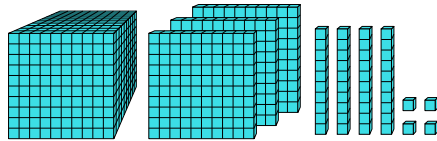
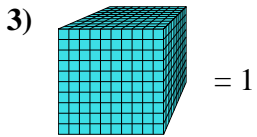
Use the block on the left to find the value of the set of blocks on the right.



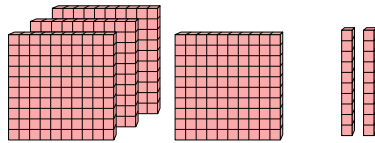
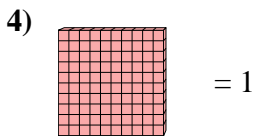
1. 8.2



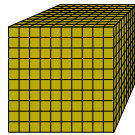
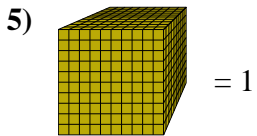
2. 0.74



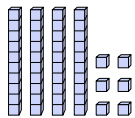
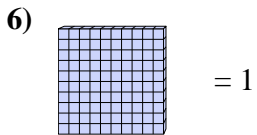
3. 1.344



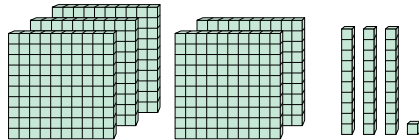
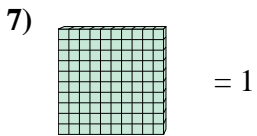
4. 4.2



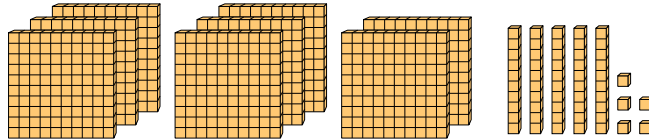
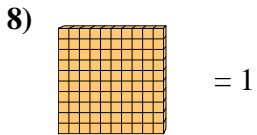
5. 1



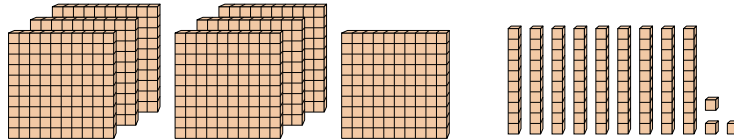
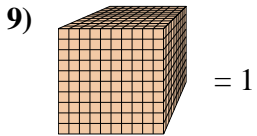
6. 0.46



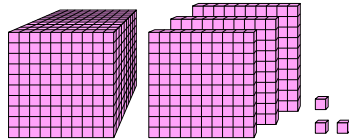
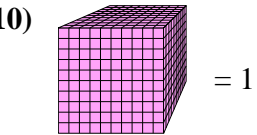
7. 5.31



8. 8.55



9. 0.793



10. 1.303

Answers