





Use the visual model to solve each problem.


1) $0.5 \times 0.7 =$




2) $0.7 \times 0.5 =$




3) $0.1 \times 0.4 =$




4) $0.7 \times 0.9 =$




5) $0.1 \times 0.7 =$




6) $0.9 \times 0.8 =$




7) $0.7 \times 0.2 =$




8) $0.8 \times 0.7 =$




9) $0.8 \times 0.2 =$




10) $0.8 \times 0.8 =$




11) $0.3 \times 0.5 =$




12) $0.6 \times 0.6 =$




13) $0.2 \times 0.2 =$



14) $0.1 \times 0.6 =$



15) $0.6 \times 0.8 =$



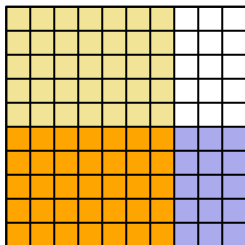
Answers

1. _____
2. _____
3. _____
4. _____
5. _____
6. _____
7. _____
8. _____
9. _____
10. _____
11. _____
12. _____
13. _____
14. _____
15. _____

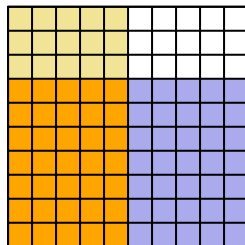


Use the visual model to solve each problem.

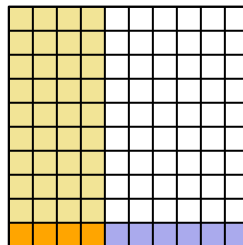
1) $0.5 \times 0.7 =$



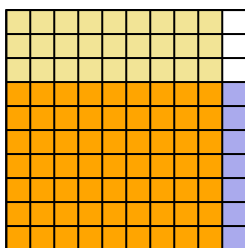
2) $0.7 \times 0.5 =$



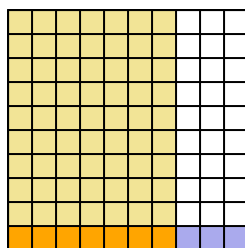
3) $0.1 \times 0.4 =$



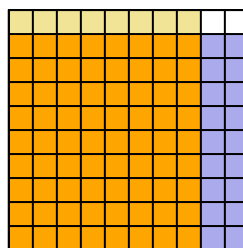
4) $0.7 \times 0.9 =$



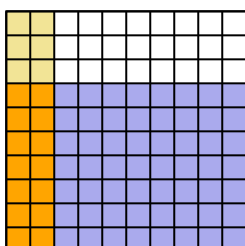
5) $0.1 \times 0.7 =$



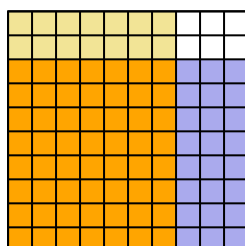
6) $0.9 \times 0.8 =$



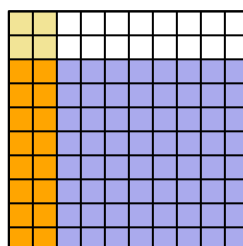
7) $0.7 \times 0.2 =$



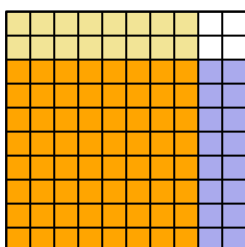
8) $0.8 \times 0.7 =$



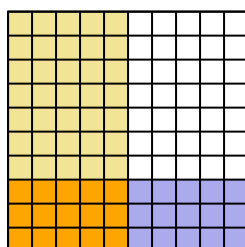
9) $0.8 \times 0.2 =$



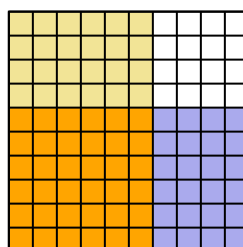
10) $0.8 \times 0.8 =$



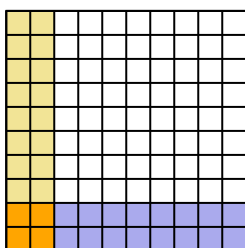
11) $0.3 \times 0.5 =$



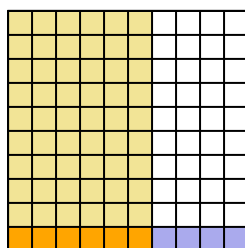
12) $0.6 \times 0.6 =$



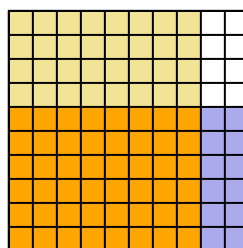
13) $0.2 \times 0.2 =$



14) $0.1 \times 0.6 =$



15) $0.6 \times 0.8 =$



Answers

1. $\frac{35}{100} = 0.35$
2. $\frac{35}{100} = 0.35$
3. $\frac{4}{100} = 0.04$
4. $\frac{63}{100} = 0.63$
5. $\frac{7}{100} = 0.07$
6. $\frac{72}{100} = 0.72$
7. $\frac{14}{100} = 0.14$
8. $\frac{56}{100} = 0.56$
9. $\frac{16}{100} = 0.16$
10. $\frac{64}{100} = 0.64$
11. $\frac{15}{100} = 0.15$
12. $\frac{36}{100} = 0.36$
13. $\frac{4}{100} = 0.04$
14. $\frac{6}{100} = 0.06$
15. $\frac{48}{100} = 0.48$