




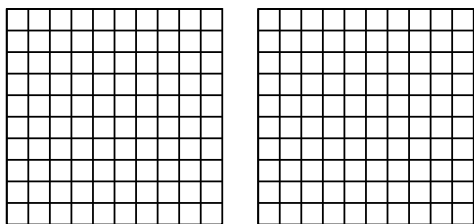
Use the visual model to solve each problem.

Answers

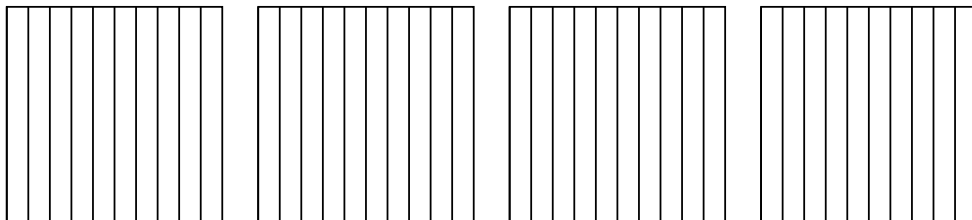
1)  $3 \times 0.35 =$



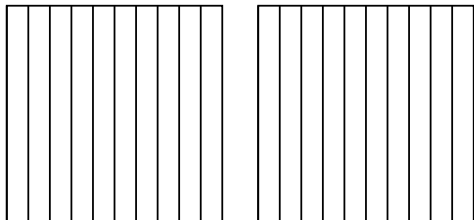
2)  $2 \times 0.41 =$



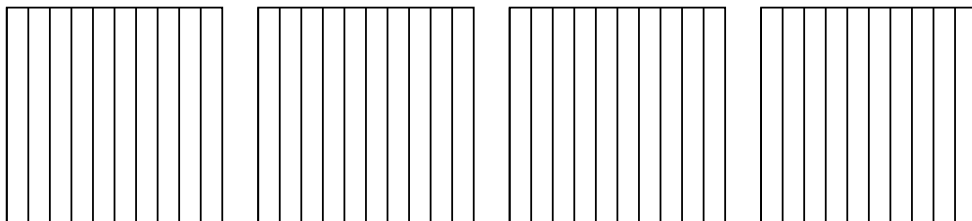
3)  $4 \times 0.8 =$



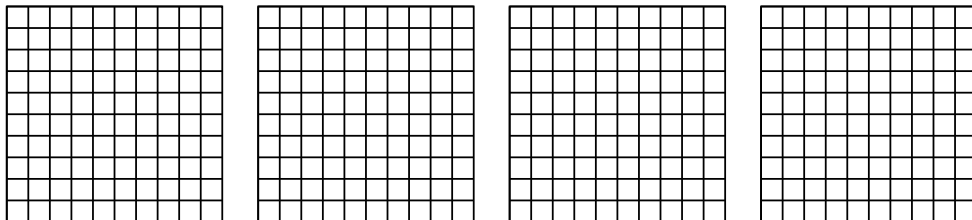
4)  $2 \times 0.5 =$



5)  $4 \times 0.8 =$



6)  $4 \times 0.68 =$

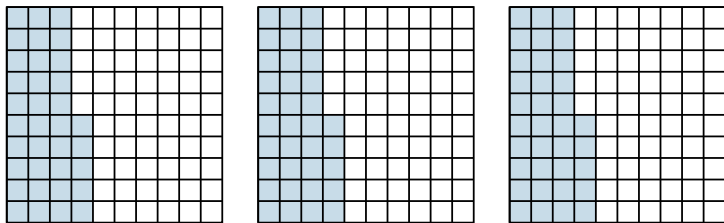


- 1. \_\_\_\_\_
- 2. \_\_\_\_\_
- 3. \_\_\_\_\_
- 4. \_\_\_\_\_
- 5. \_\_\_\_\_
- 6. \_\_\_\_\_

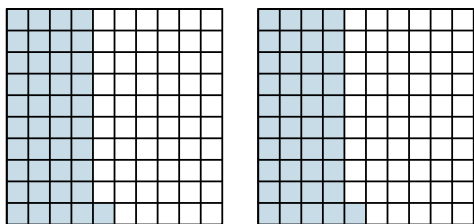


Use the visual model to solve each problem.

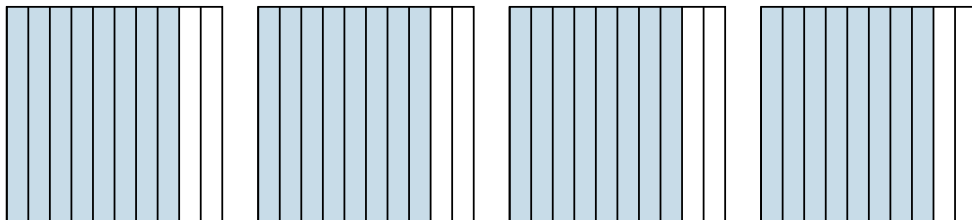
1)  $3 \times 0.35 =$



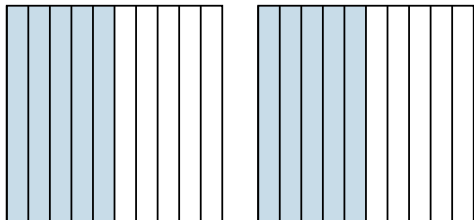
2)  $2 \times 0.41 =$



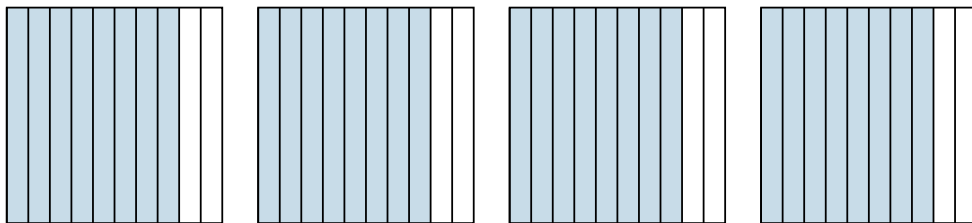
3)  $4 \times 0.8 =$



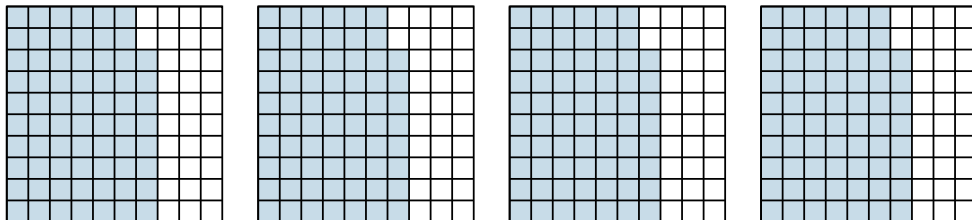
4)  $2 \times 0.5 =$



5)  $4 \times 0.8 =$



6)  $4 \times 0.68 =$



Answers

1.  $\frac{105}{100} = 1.05$

2.  $\frac{82}{100} = 0.82$

3.  $\frac{32}{10} = 3.2$

4.  $\frac{10}{10} = 1$

5.  $\frac{32}{10} = 3.2$

6.  $\frac{272}{100} = 2.72$