


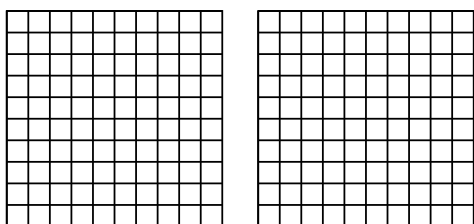


Use the visual model to solve each problem.

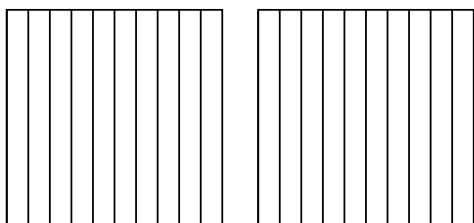
1)  $3 \times 0.18 =$



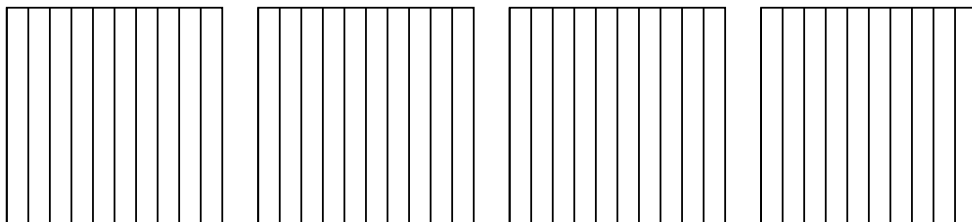
2)  $2 \times 0.53 =$



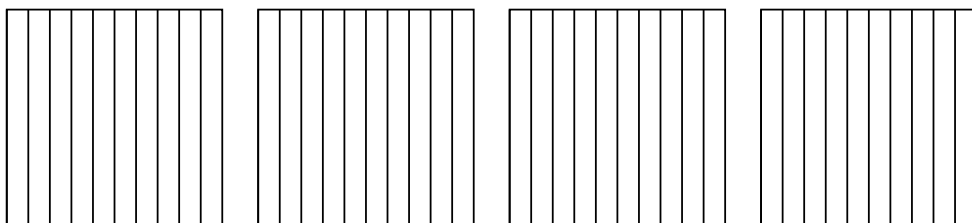
3)  $2 \times 0.4 =$



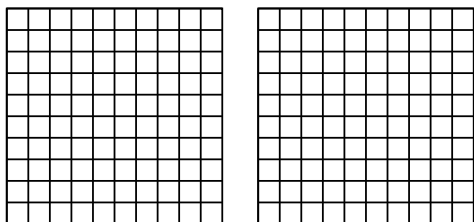
4)  $4 \times 0.7 =$



5)  $4 \times 0.8 =$



6)  $2 \times 0.38 =$



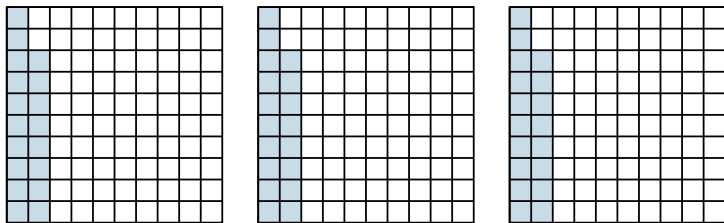
Answers

- 1. \_\_\_\_\_
- 2. \_\_\_\_\_
- 3. \_\_\_\_\_
- 4. \_\_\_\_\_
- 5. \_\_\_\_\_
- 6. \_\_\_\_\_

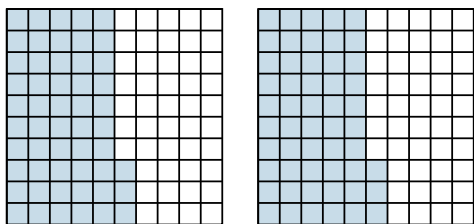


Use the visual model to solve each problem.

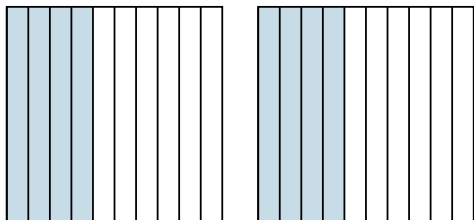
1)  $3 \times 0.18 =$



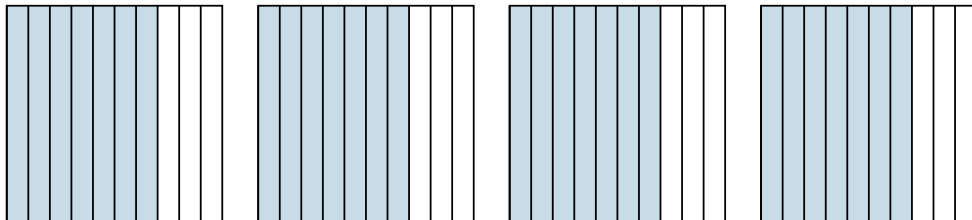
2)  $2 \times 0.53 =$



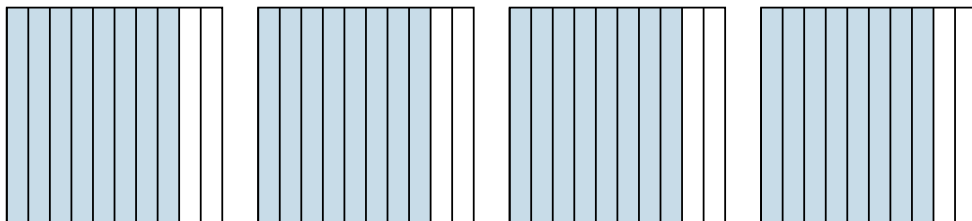
3)  $2 \times 0.4 =$



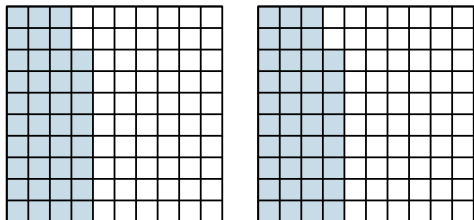
4)  $4 \times 0.7 =$



5)  $4 \times 0.8 =$



6)  $2 \times 0.38 =$



**Answers**

1.  $\frac{54}{100} = 0.54$

2.  $\frac{106}{100} = 1.06$

3.  $\frac{8}{10} = 0.8$

4.  $\frac{28}{10} = 2.8$

5.  $\frac{32}{10} = 3.2$

6.  $\frac{76}{100} = 0.76$