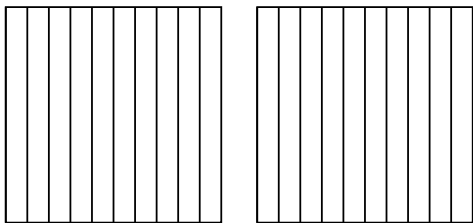




Use the visual model to solve each problem.

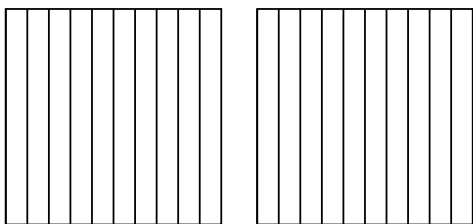
Answers

1)  $2 \times 0.9 =$




1. \_\_\_\_\_

2)  $2 \times 0.3 =$




2. \_\_\_\_\_

3)  $2 \times 0.46 =$



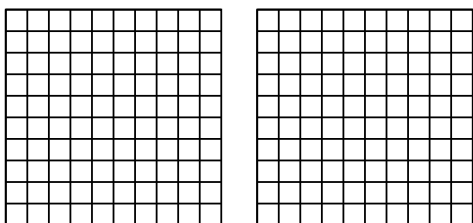
3. \_\_\_\_\_

4)  $3 \times 0.2 =$



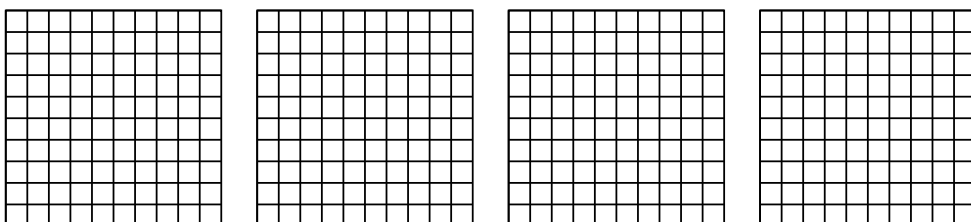
4. \_\_\_\_\_

5)  $2 \times 0.96 =$



5. \_\_\_\_\_

6)  $4 \times 0.30 =$

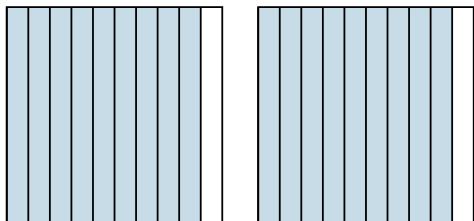


6. \_\_\_\_\_

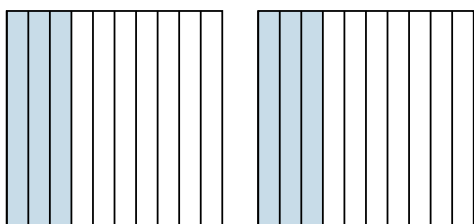


Use the visual model to solve each problem.

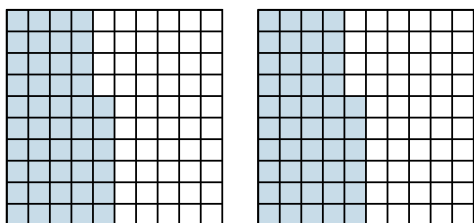
1)  $2 \times 0.9 =$




2)  $2 \times 0.3 =$



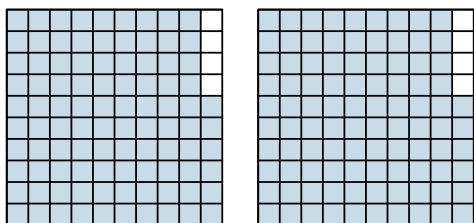
3)  $2 \times 0.46 =$



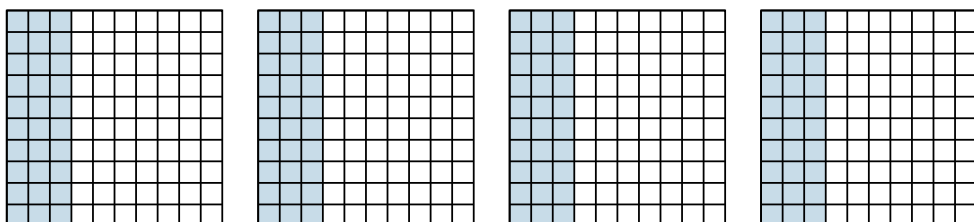
4)  $3 \times 0.2 =$



5)  $2 \times 0.96 =$



6)  $4 \times 0.30 =$



Answers

1.  $\frac{18}{10} = 1.8$

2.  $\frac{6}{10} = 0.6$

3.  $\frac{92}{100} = 0.92$

4.  $\frac{6}{10} = 0.6$

5.  $\frac{192}{100} = 1.92$

6.  $\frac{120}{100} = 1.2$