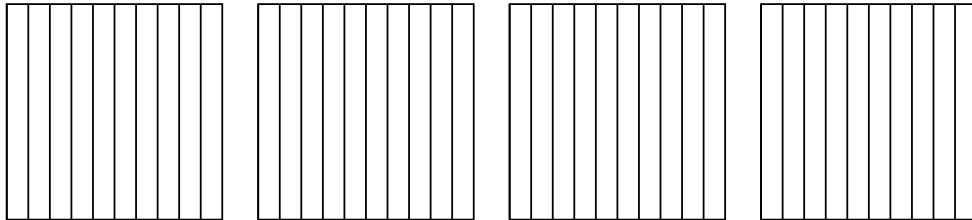


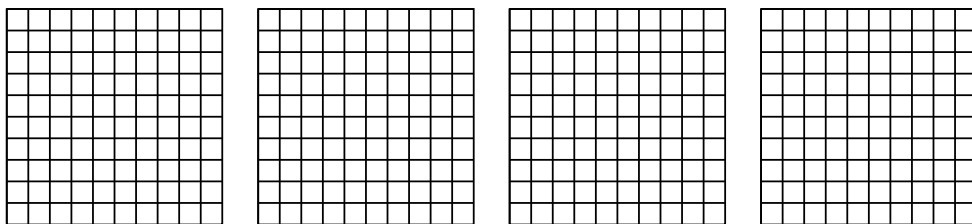


Use the visual model to solve each problem.


1)  $4 \times 0.9 =$



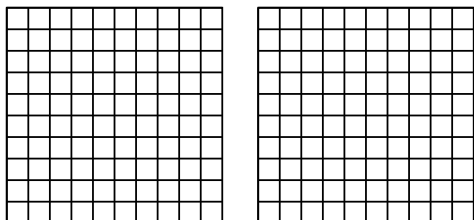
2)  $4 \times 0.39 =$



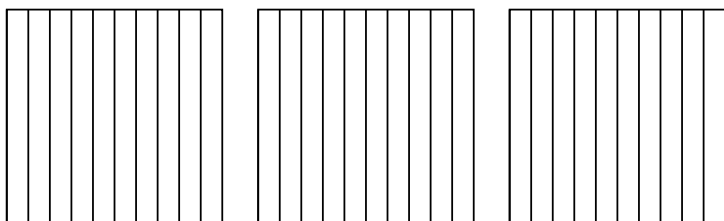
3)  $3 \times 0.54 =$



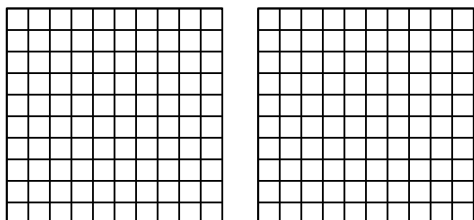
4)  $2 \times 0.79 =$



5)  $3 \times 0.2 =$



6)  $2 \times 0.23 =$



Answers

1. \_\_\_\_\_

2. \_\_\_\_\_

3. \_\_\_\_\_

4. \_\_\_\_\_

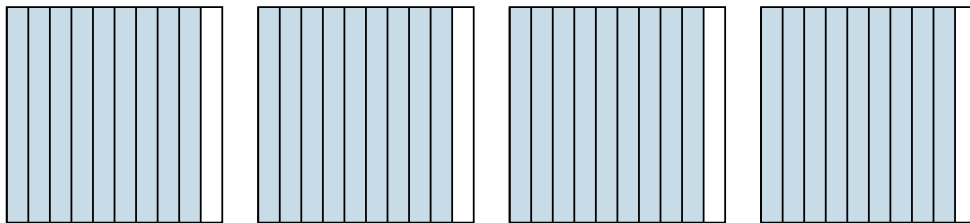
5. \_\_\_\_\_

6. \_\_\_\_\_

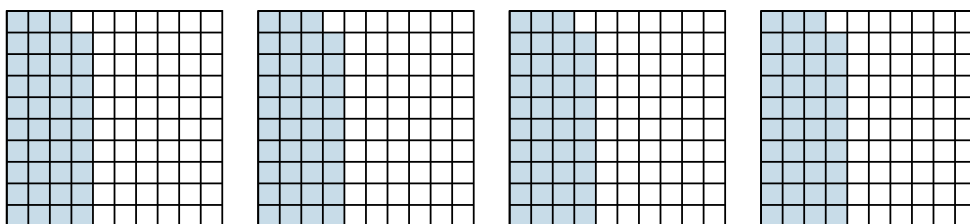


Use the visual model to solve each problem.

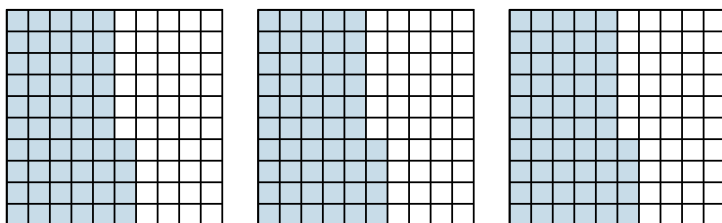
1)  $4 \times 0.9 =$



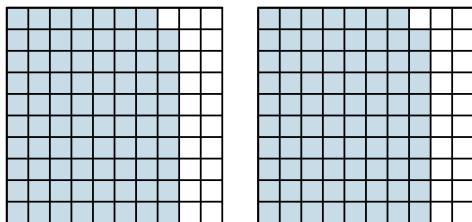
2)  $4 \times 0.39 =$



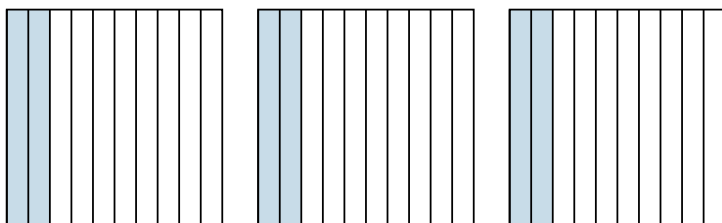
3)  $3 \times 0.54 =$



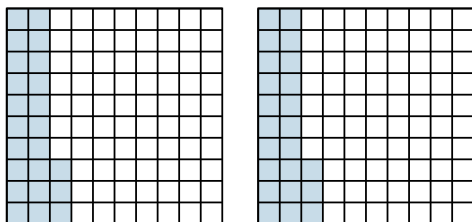
4)  $2 \times 0.79 =$



5)  $3 \times 0.2 =$



6)  $2 \times 0.23 =$



Answers

1.  $\frac{36}{10} = 3.6$

2.  $\frac{156}{100} = 1.56$

3.  $\frac{162}{100} = 1.62$

4.  $\frac{158}{100} = 1.58$

5.  $\frac{6}{10} = 0.6$

6.  $\frac{46}{100} = 0.46$