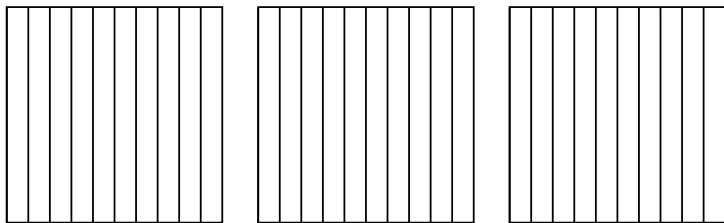




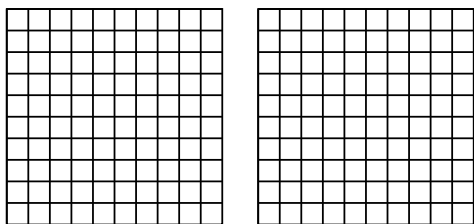
Use the visual model to solve each problem.

Answers

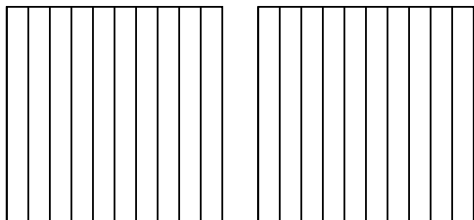
1)  $3 \times 0.7 =$



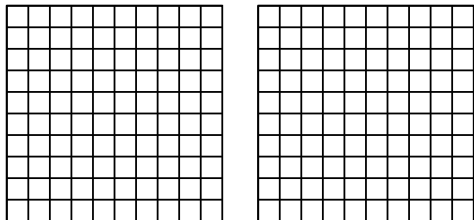
2)  $2 \times 0.68 =$



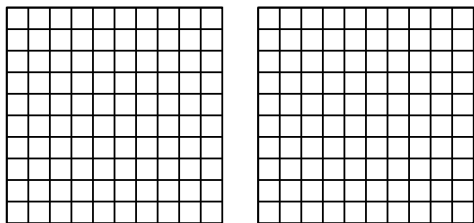
3)  $2 \times 0.4 =$



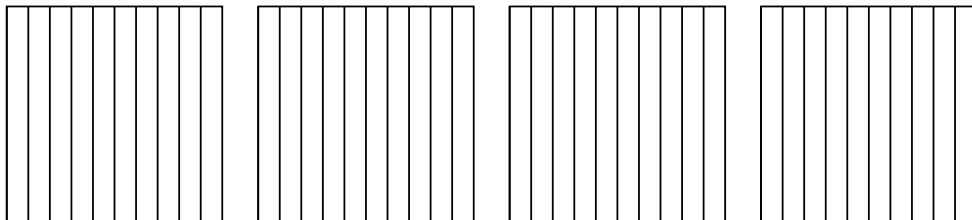
4)  $2 \times 0.81 =$



5)  $2 \times 0.25 =$



6)  $4 \times 0.8 =$



1. \_\_\_\_\_

2. \_\_\_\_\_

3. \_\_\_\_\_

4. \_\_\_\_\_

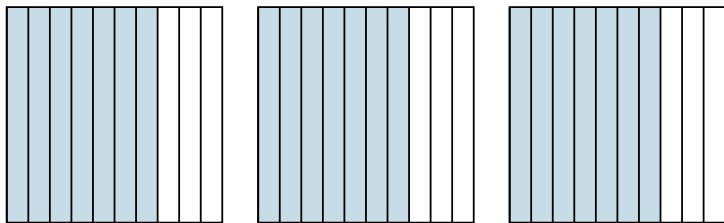
5. \_\_\_\_\_

6. \_\_\_\_\_

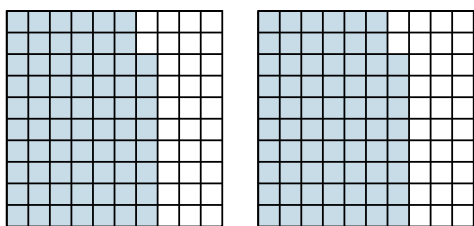


Use the visual model to solve each problem.

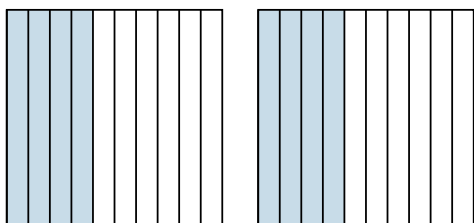
1)  $3 \times 0.7 =$



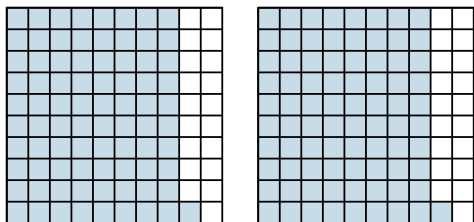
2)  $2 \times 0.68 =$



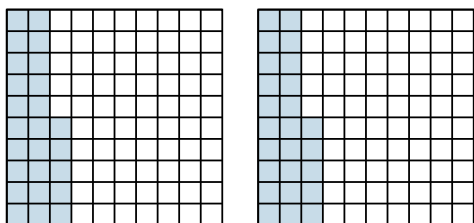
3)  $2 \times 0.4 =$



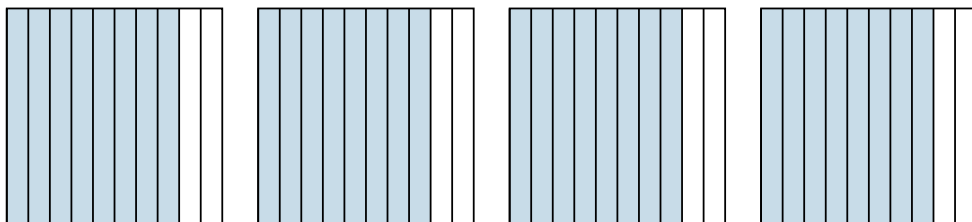
4)  $2 \times 0.81 =$



5)  $2 \times 0.25 =$



6)  $4 \times 0.8 =$



Answers

1.  $\frac{21}{10} = 2.1$

2.  $\frac{136}{100} = 1.36$

3.  $\frac{8}{10} = 0.8$

4.  $\frac{162}{100} = 1.62$

5.  $\frac{50}{100} = 0.5$

6.  $\frac{32}{10} = 3.2$