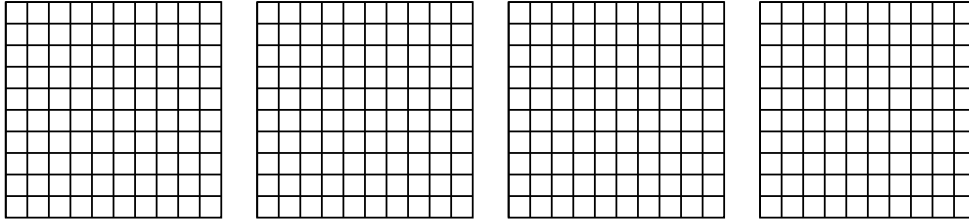


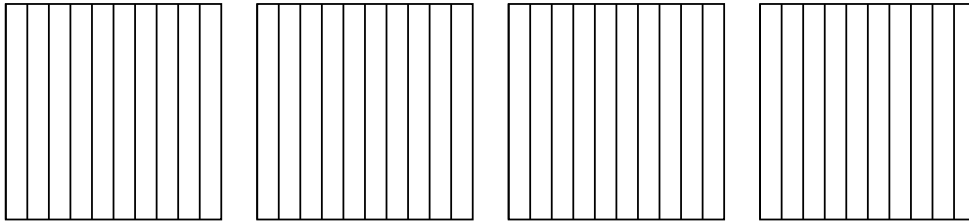


Use the visual model to solve each problem.

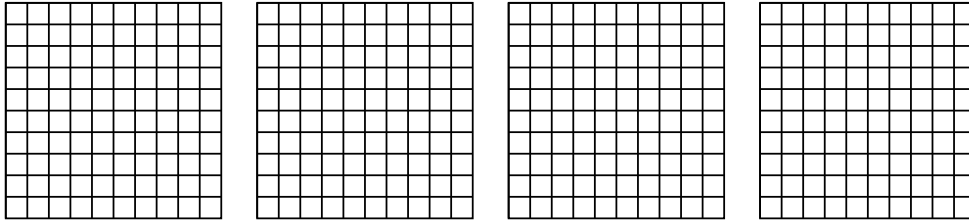
1)  $4 \times 0.51 =$



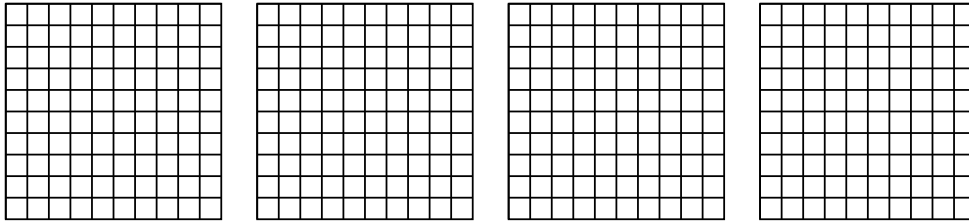
2)  $4 \times 0.2 =$



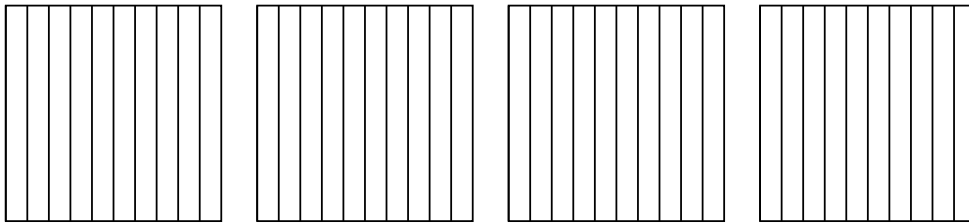
3)  $4 \times 0.74 =$



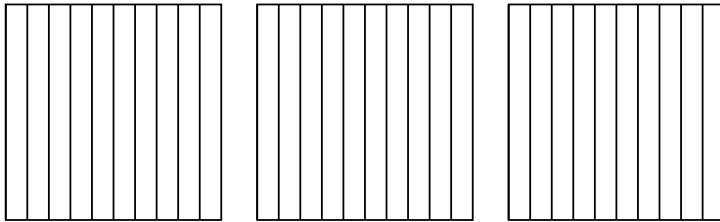
4)  $4 \times 0.68 =$



5)  $4 \times 0.6 =$



6)  $3 \times 0.3 =$



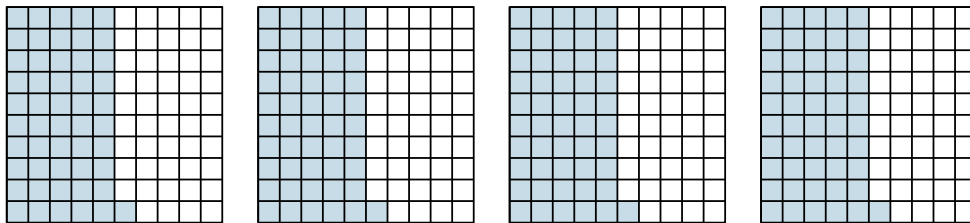
Answers

- 1. \_\_\_\_\_
- 2. \_\_\_\_\_
- 3. \_\_\_\_\_
- 4. \_\_\_\_\_
- 5. \_\_\_\_\_
- 6. \_\_\_\_\_

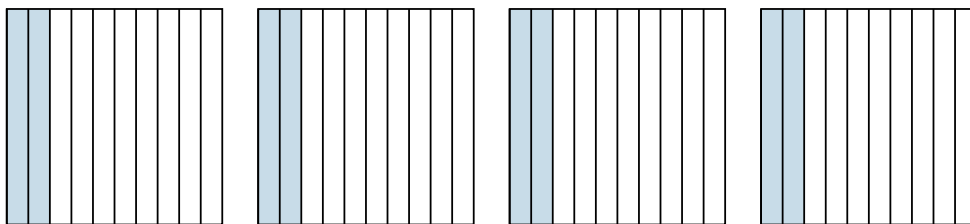


Use the visual model to solve each problem.

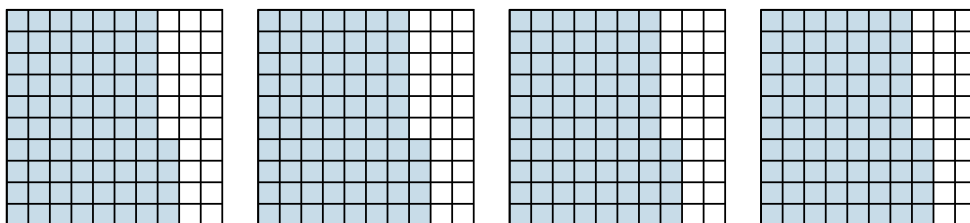
1)  $4 \times 0.51 =$



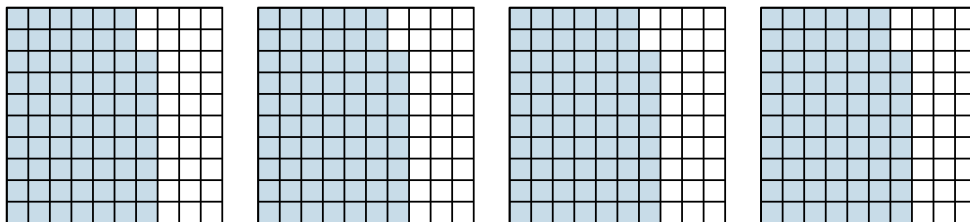
2)  $4 \times 0.2 =$



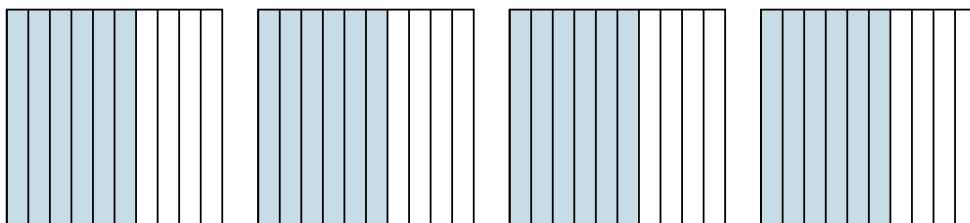
3)  $4 \times 0.74 =$




4)  $4 \times 0.68 =$



5)  $4 \times 0.6 =$



6)  $3 \times 0.3 =$



Answers

1.  $\frac{204}{100} = 2.04$

2.  $\frac{8}{10} = 0.8$

3.  $\frac{296}{100} = 2.96$

4.  $\frac{272}{100} = 2.72$

5.  $\frac{24}{10} = 2.4$

6.  $\frac{9}{10} = 0.9$