




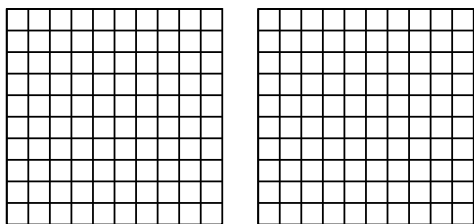
Use the visual model to solve each problem.

Answers

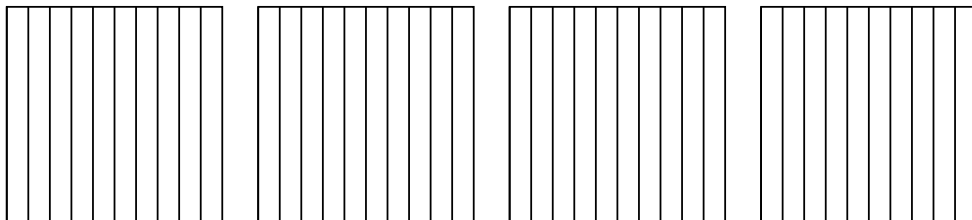
1) $3 \times 0.35 =$



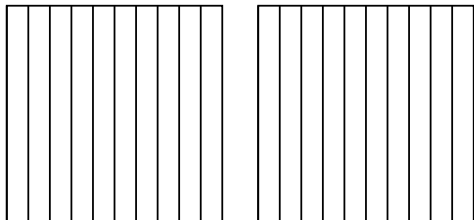
2) $2 \times 0.41 =$



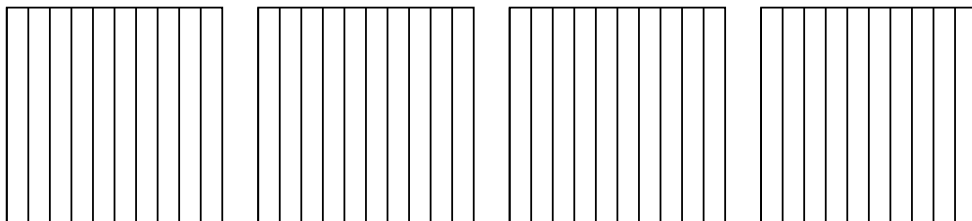
3) $4 \times 0.8 =$



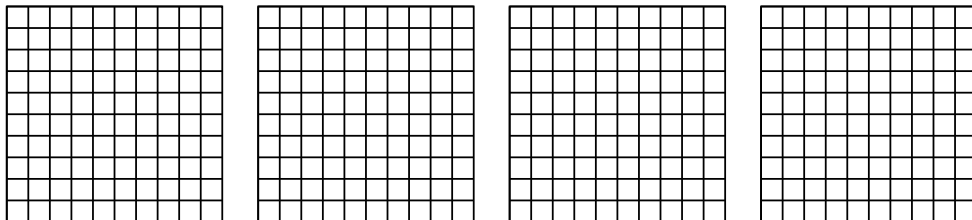
4) $2 \times 0.5 =$



5) $4 \times 0.8 =$



6) $4 \times 0.68 =$

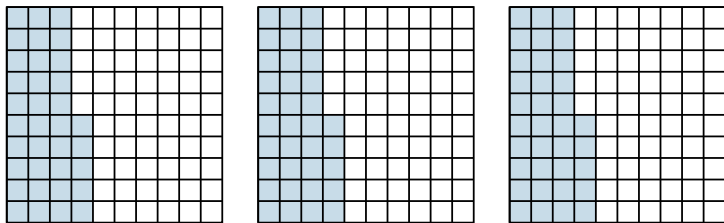


- 1. _____
- 2. _____
- 3. _____
- 4. _____
- 5. _____
- 6. _____

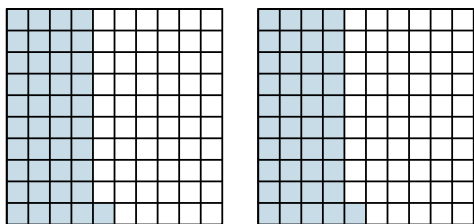


Use the visual model to solve each problem.

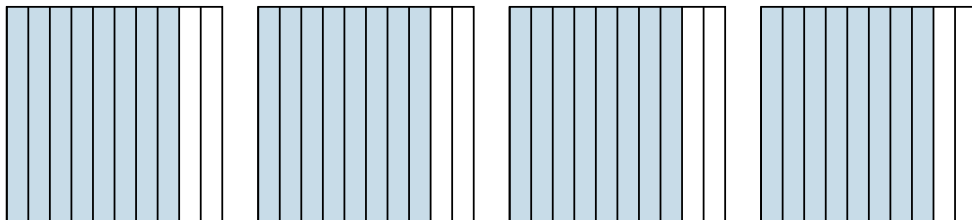
1) $3 \times 0.35 =$



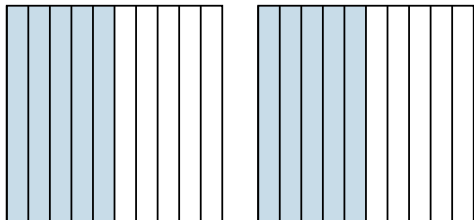
2) $2 \times 0.41 =$



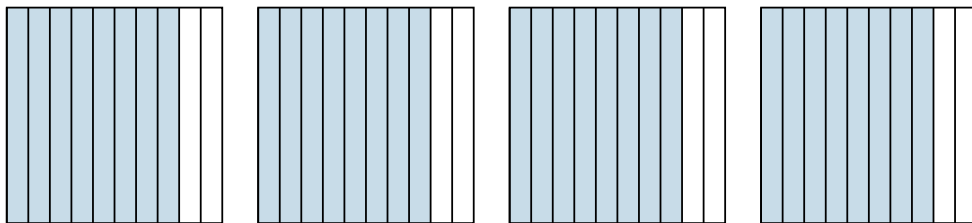
3) $4 \times 0.8 =$



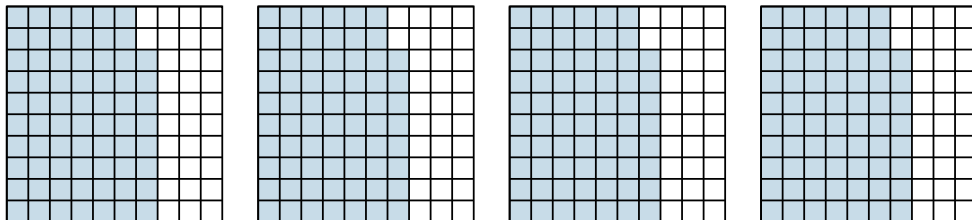
4) $2 \times 0.5 =$



5) $4 \times 0.8 =$



6) $4 \times 0.68 =$



Answers

1. $\frac{105}{100} = 1.05$

2. $\frac{82}{100} = 0.82$

3. $\frac{32}{10} = 3.2$

4. $\frac{10}{10} = 1$

5. $\frac{32}{10} = 3.2$

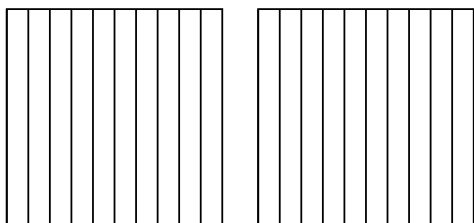
6. $\frac{272}{100} = 2.72$



Use the visual model to solve each problem.

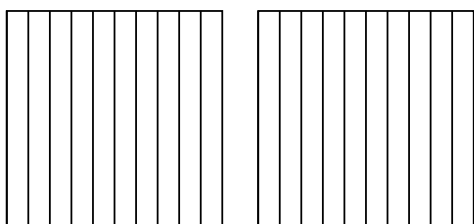
Answers

1) $2 \times 0.9 =$



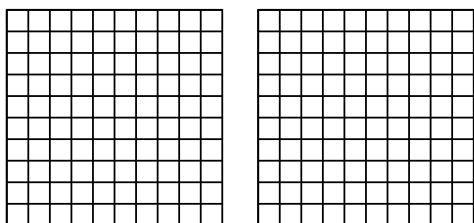
1. _____

2) $2 \times 0.3 =$




2. _____

3) $2 \times 0.46 =$



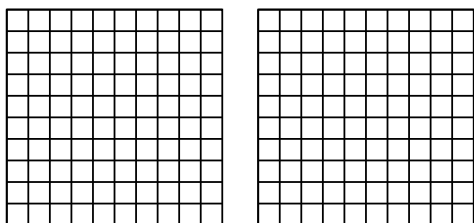
3. _____

4) $3 \times 0.2 =$



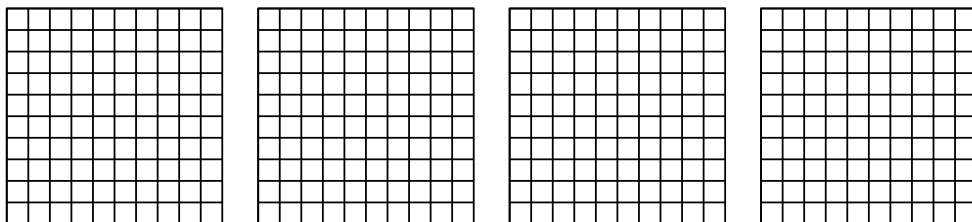
4. _____

5) $2 \times 0.96 =$



5. _____

6) $4 \times 0.30 =$

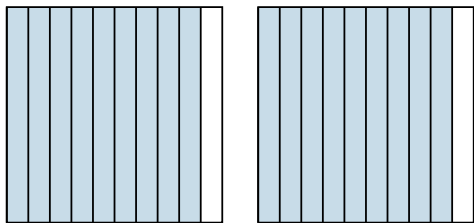


6. _____

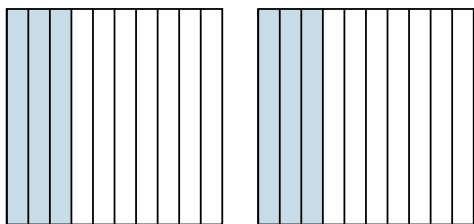


Use the visual model to solve each problem.

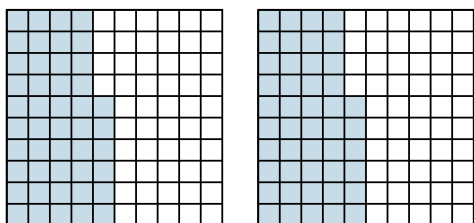
1) $2 \times 0.9 =$




2) $2 \times 0.3 =$



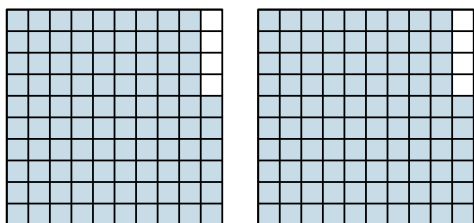
3) $2 \times 0.46 =$



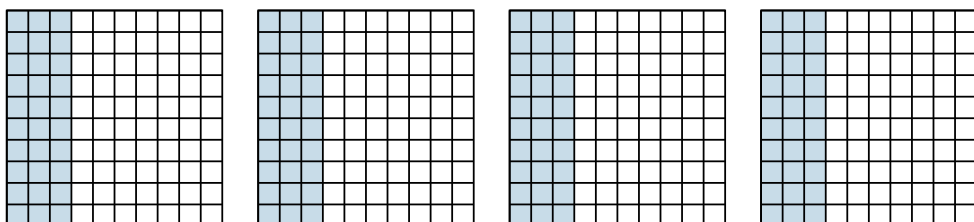
4) $3 \times 0.2 =$



5) $2 \times 0.96 =$



6) $4 \times 0.30 =$



Answers

1. $\frac{18}{10} = 1.8$

2. $\frac{6}{10} = 0.6$

3. $\frac{92}{100} = 0.92$

4. $\frac{6}{10} = 0.6$

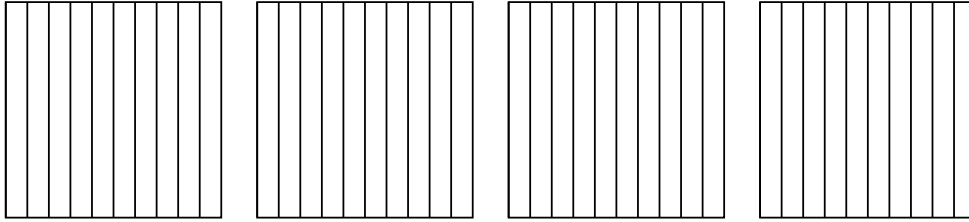
5. $\frac{192}{100} = 1.92$

6. $\frac{120}{100} = 1.2$

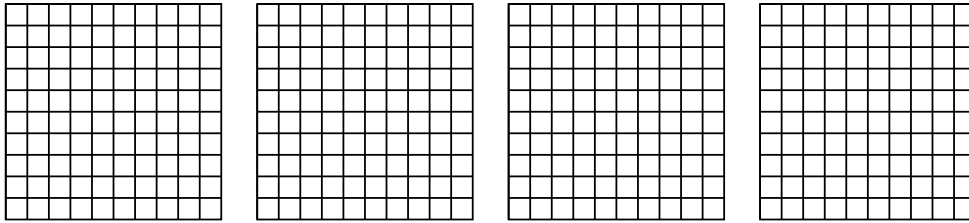


Use the visual model to solve each problem.


1) $4 \times 0.5 =$



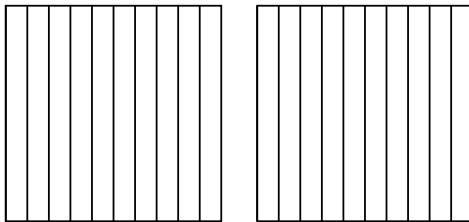
2) $4 \times 0.92 =$



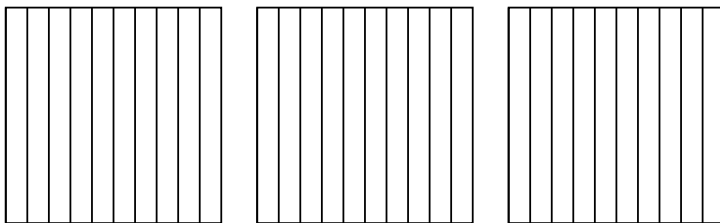
3) $3 \times 0.36 =$



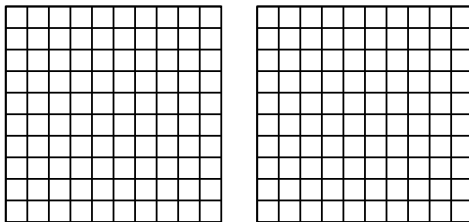
4) $2 \times 0.2 =$



5) $3 \times 0.6 =$



6) $2 \times 0.44 =$



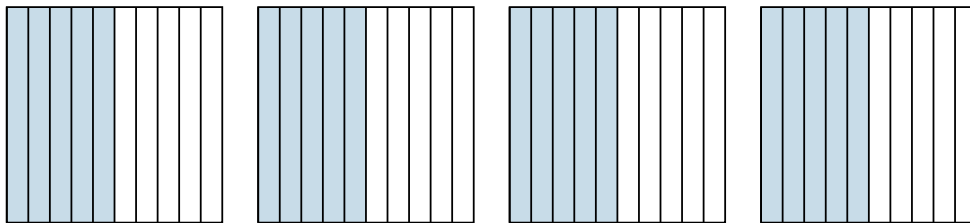
Answers

- 1. _____
- 2. _____
- 3. _____
- 4. _____
- 5. _____
- 6. _____

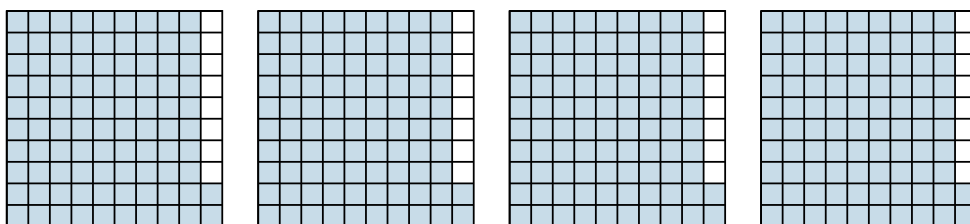


Use the visual model to solve each problem.

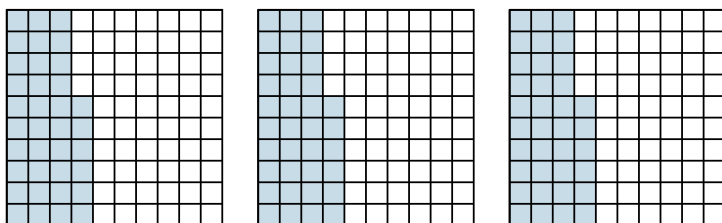
1) $4 \times 0.5 =$



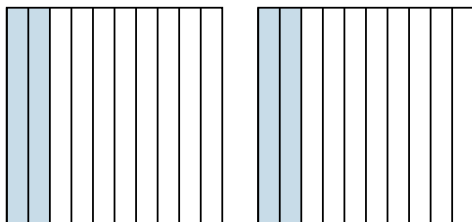
2) $4 \times 0.92 =$



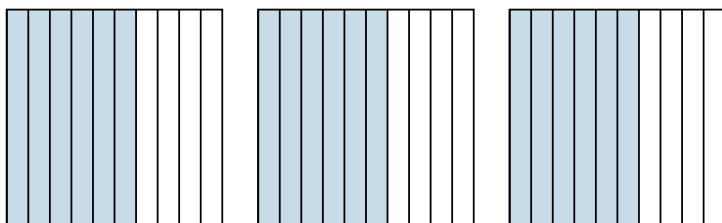
3) $3 \times 0.36 =$



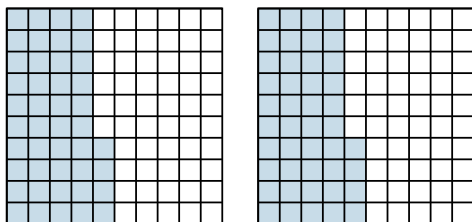
4) $2 \times 0.2 =$



5) $3 \times 0.6 =$



6) $2 \times 0.44 =$



Answers

1. $\frac{20}{10} = 2$

2. $\frac{368}{100} = 3.68$

3. $\frac{108}{100} = 1.08$

4. $\frac{4}{10} = 0.4$

5. $\frac{18}{10} = 1.8$


6. $\frac{88}{100} = 0.88$



Use the visual model to solve each problem.

Answers

1) $3 \times 0.71 =$

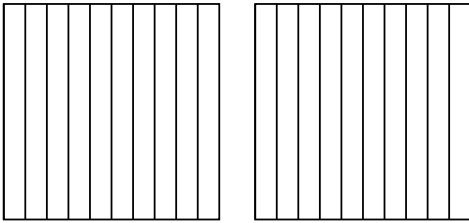


1. _____

2. _____

3. _____

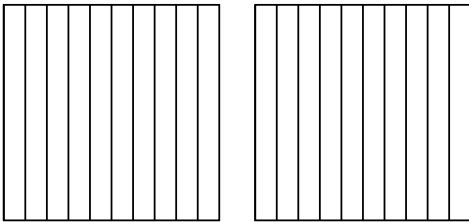
2) $2 \times 0.3 =$



4. _____

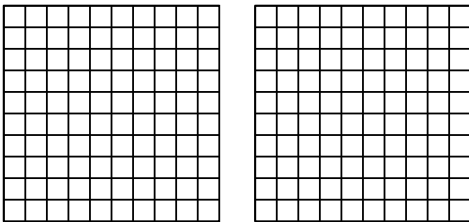
5. _____

3) $2 \times 0.4 =$




6. _____

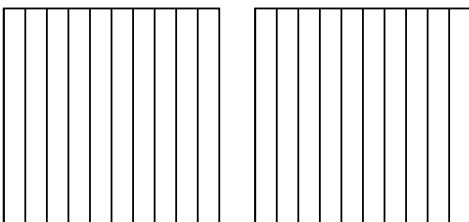
4) $2 \times 0.36 =$



5) $3 \times 0.40 =$



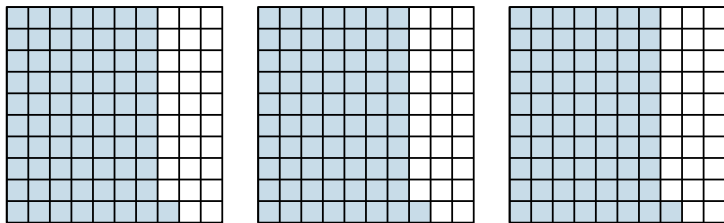
6) $2 \times 0.8 =$



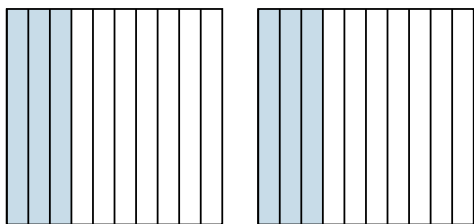


Use the visual model to solve each problem.

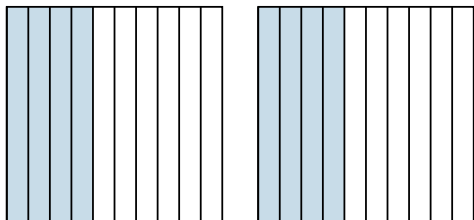
1) $3 \times 0.71 =$



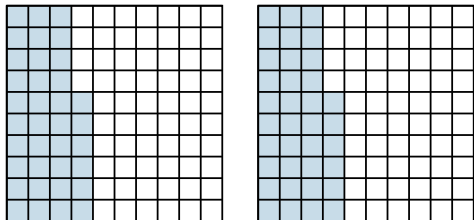
2) $2 \times 0.3 =$



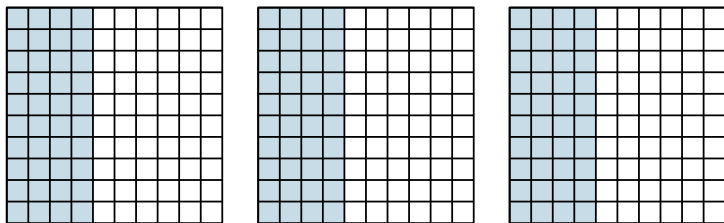
3) $2 \times 0.4 =$



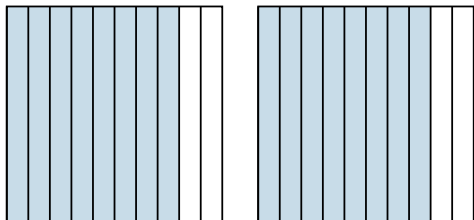
4) $2 \times 0.36 =$



5) $3 \times 0.40 =$



6) $2 \times 0.8 =$



Answers

1. $\frac{213}{100} = 2.13$

2. $\frac{6}{10} = 0.6$

3. $\frac{8}{10} = 0.8$

4. $\frac{72}{100} = 0.72$

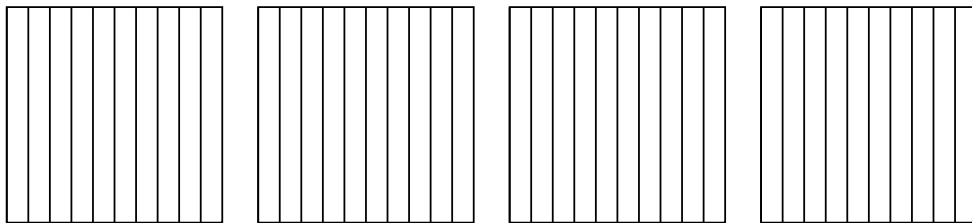
5. $\frac{120}{100} = 1.2$

6. $\frac{16}{10} = 1.6$

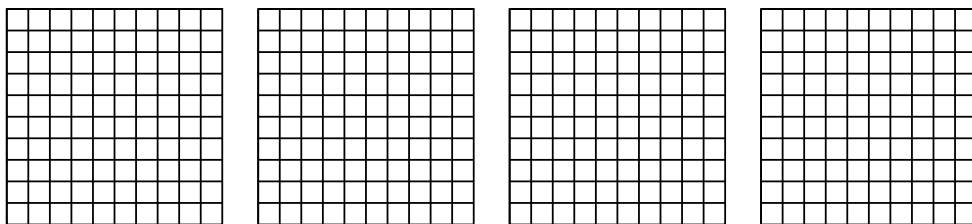


Use the visual model to solve each problem.


1) $4 \times 0.9 =$



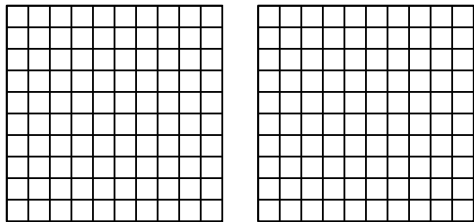
2) $4 \times 0.39 =$



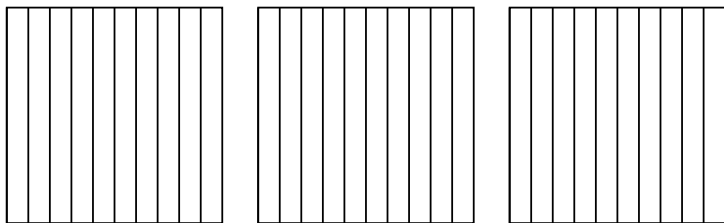
3) $3 \times 0.54 =$



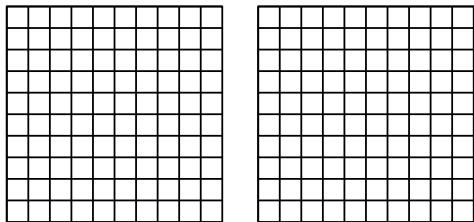
4) $2 \times 0.79 =$



5) $3 \times 0.2 =$



6) $2 \times 0.23 =$



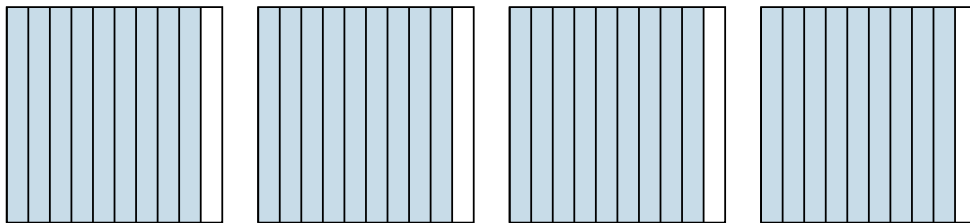
Answers

- 1. _____
- 2. _____
- 3. _____
- 4. _____
- 5. _____
- 6. _____

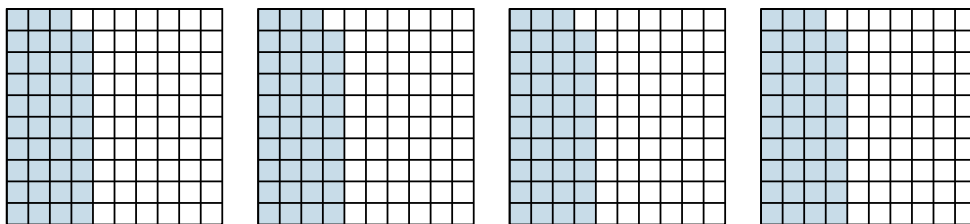


Use the visual model to solve each problem.

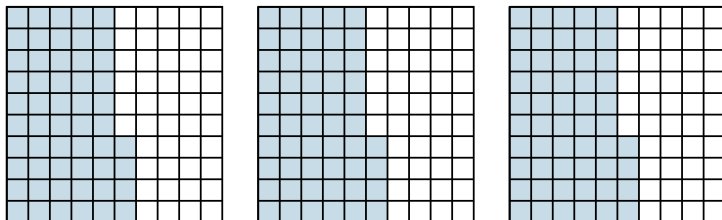
1) $4 \times 0.9 =$



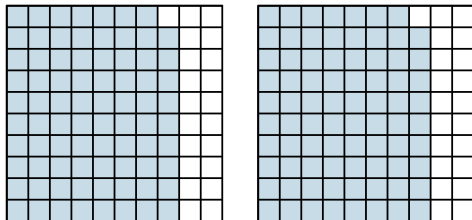
2) $4 \times 0.39 =$




3) $3 \times 0.54 =$



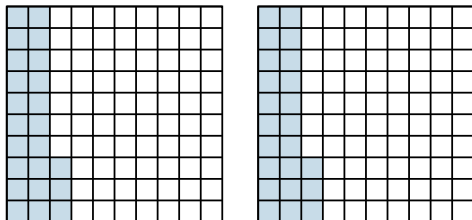
4) $2 \times 0.79 =$



5) $3 \times 0.2 =$



6) $2 \times 0.23 =$



Answers

1. $\frac{36}{10} = 3.6$

2. $\frac{156}{100} = 1.56$

3. $\frac{162}{100} = 1.62$

4. $\frac{158}{100} = 1.58$

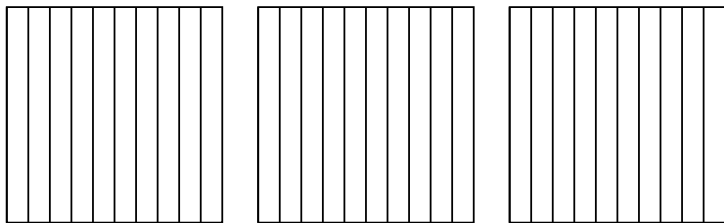
5. $\frac{6}{10} = 0.6$

6. $\frac{46}{100} = 0.46$

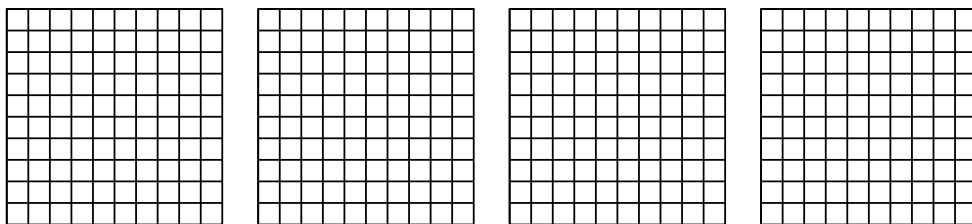


Use the visual model to solve each problem.

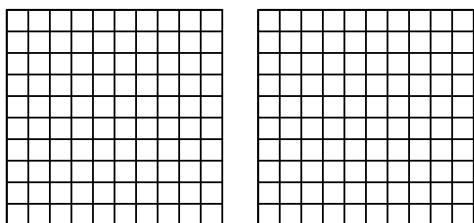
1) $3 \times 0.6 =$



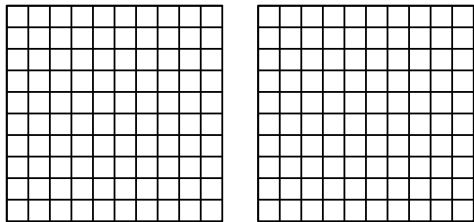
2) $4 \times 0.69 =$



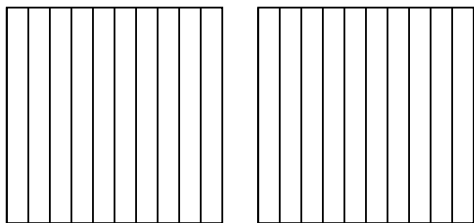
3) $2 \times 0.97 =$



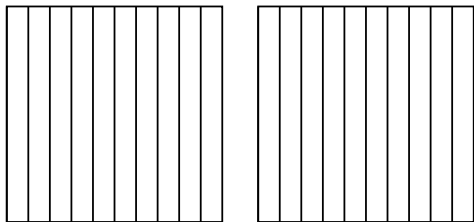
4) $2 \times 0.75 =$



5) $2 \times 0.3 =$



6) $2 \times 0.2 =$



Answers

1. _____

2. _____

3. _____

4. _____

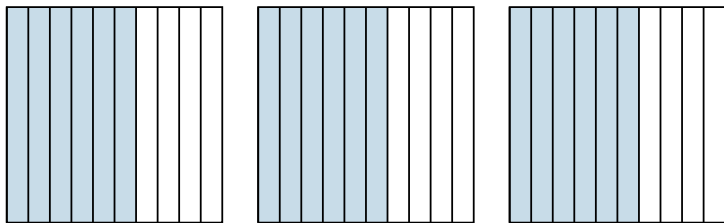
5. _____

6. _____

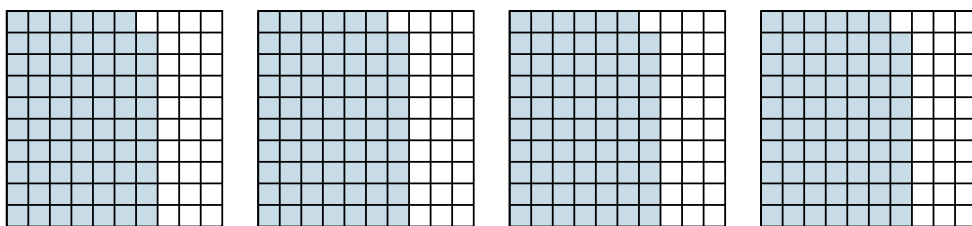


Use the visual model to solve each problem.

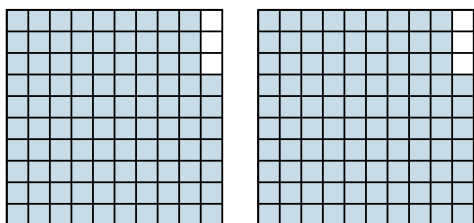
1) $3 \times 0.6 =$



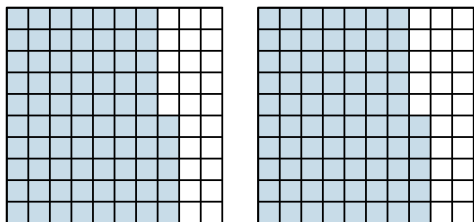
2) $4 \times 0.69 =$



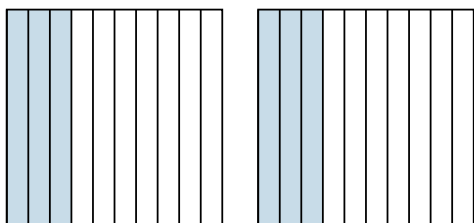
3) $2 \times 0.97 =$



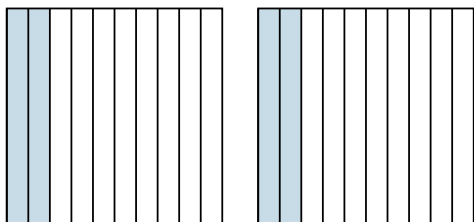
4) $2 \times 0.75 =$



5) $2 \times 0.3 =$



6) $2 \times 0.2 =$



Answers

1. $\frac{18}{10} = 1.8$

2. $\frac{276}{100} = 2.76$

3. $\frac{194}{100} = 1.94$

4. $\frac{150}{100} = 1.5$

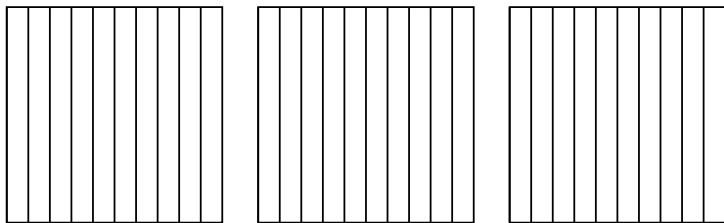
5. $\frac{6}{10} = 0.6$

6. $\frac{4}{10} = 0.4$

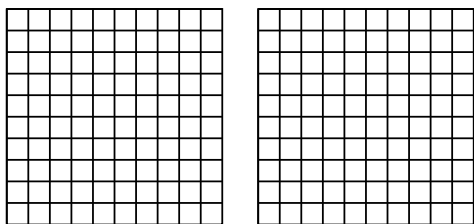


Use the visual model to solve each problem.

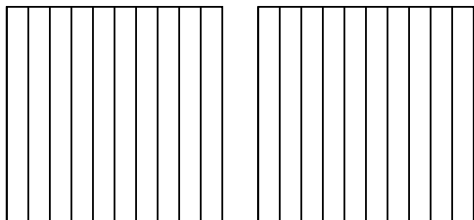
1) $3 \times 0.7 =$



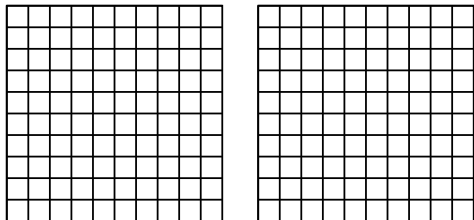
2) $2 \times 0.68 =$



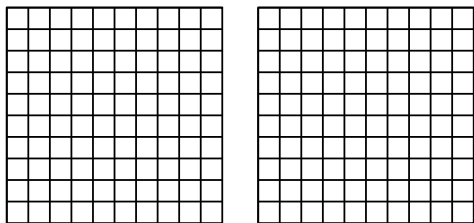
3) $2 \times 0.4 =$



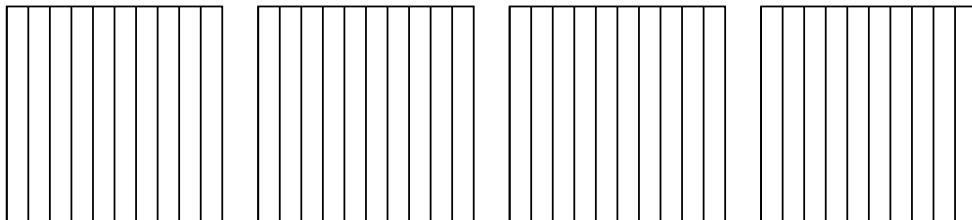
4) $2 \times 0.81 =$



5) $2 \times 0.25 =$



6) $4 \times 0.8 =$



Answers

1. _____

2. _____

3. _____

4. _____

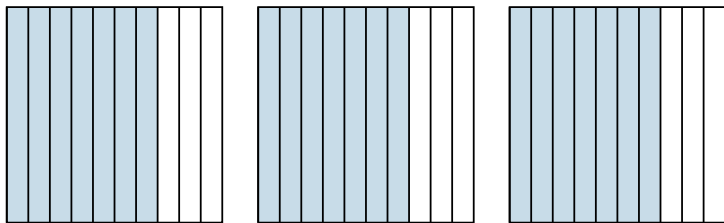
5. _____

6. _____

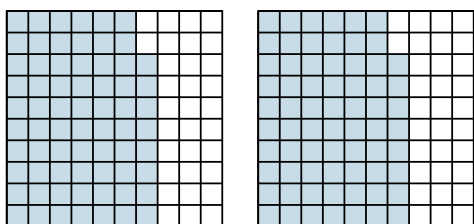


Use the visual model to solve each problem.

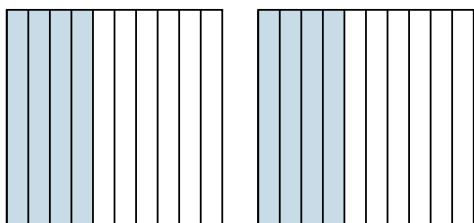
1) $3 \times 0.7 =$



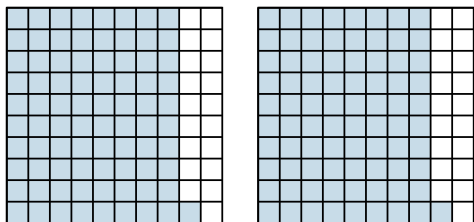
2) $2 \times 0.68 =$



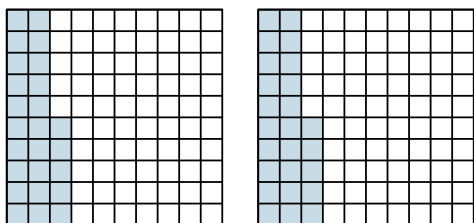
3) $2 \times 0.4 =$



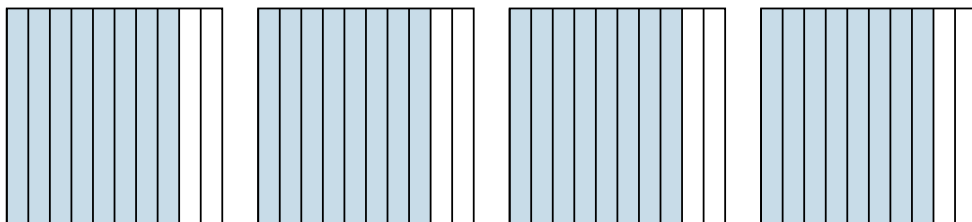
4) $2 \times 0.81 =$



5) $2 \times 0.25 =$



6) $4 \times 0.8 =$



Answers

1. $\frac{21}{10} = 2.1$

2. $\frac{136}{100} = 1.36$

3. $\frac{8}{10} = 0.8$

4. $\frac{162}{100} = 1.62$

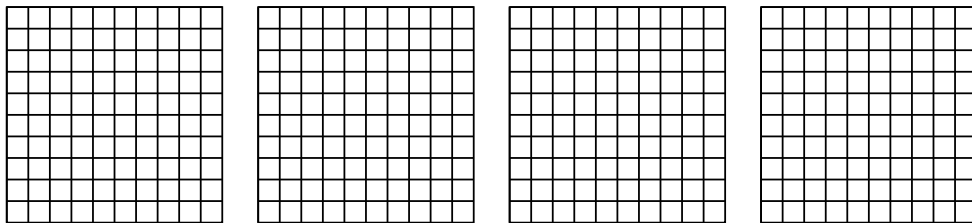
5. $\frac{50}{100} = 0.5$

6. $\frac{32}{10} = 3.2$

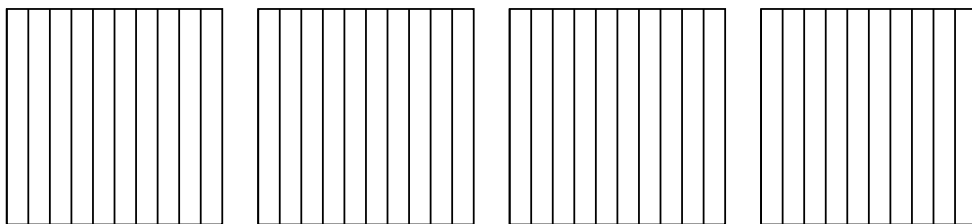


Use the visual model to solve each problem.

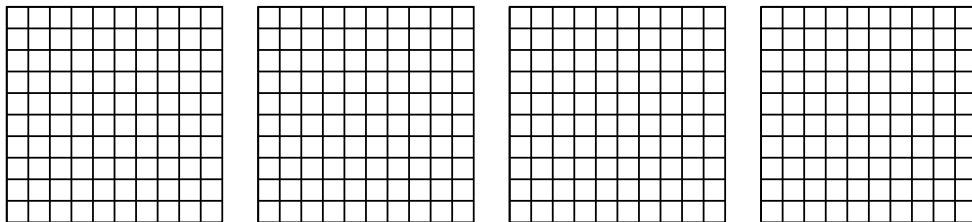
1) $4 \times 0.51 =$



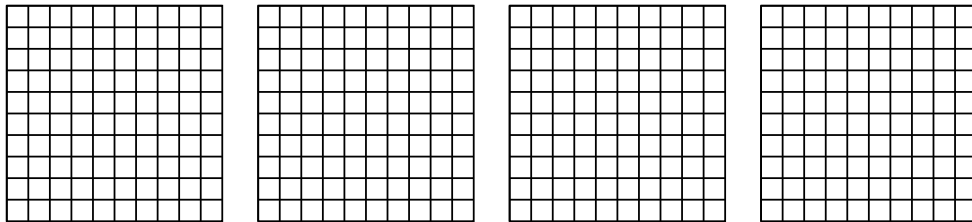
2) $4 \times 0.2 =$



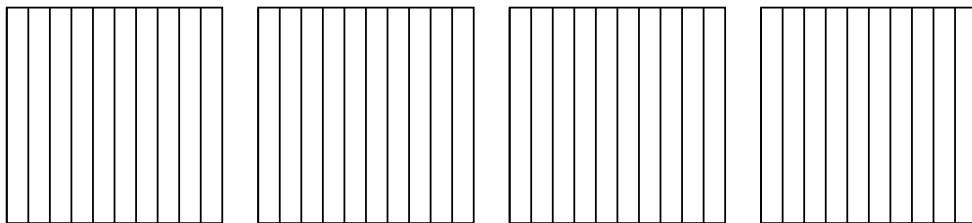
3) $4 \times 0.74 =$




4) $4 \times 0.68 =$



5) $4 \times 0.6 =$



6) $3 \times 0.3 =$



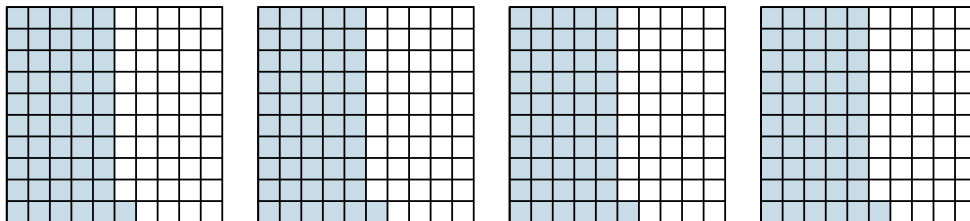
Answers

- 1. _____
- 2. _____
- 3. _____
- 4. _____
- 5. _____
- 6. _____

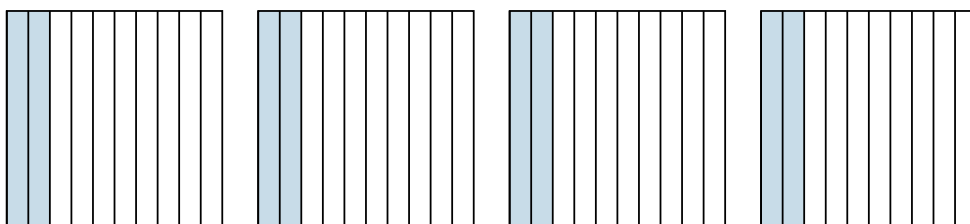


Use the visual model to solve each problem.

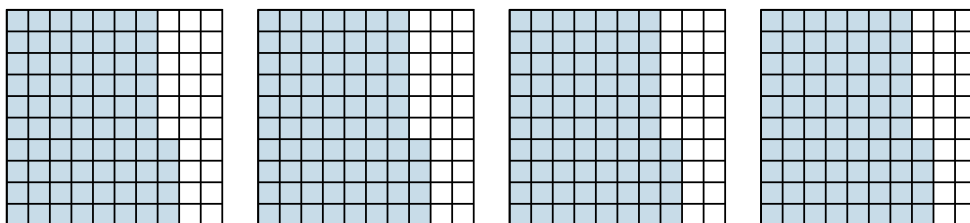
1) $4 \times 0.51 =$



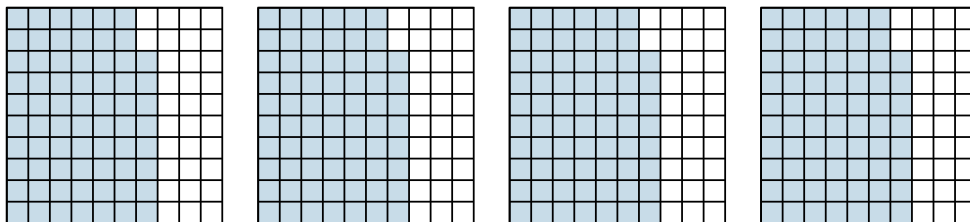
2) $4 \times 0.2 =$



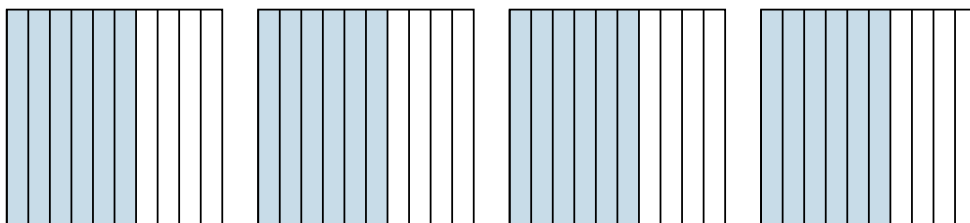
3) $4 \times 0.74 =$




4) $4 \times 0.68 =$



5) $4 \times 0.6 =$



6) $3 \times 0.3 =$



Answers

1. $\frac{204}{100} = 2.04$

2. $\frac{8}{10} = 0.8$

3. $\frac{296}{100} = 2.96$

4. $\frac{272}{100} = 2.72$

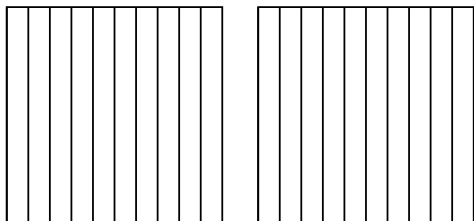
5. $\frac{24}{10} = 2.4$

6. $\frac{9}{10} = 0.9$

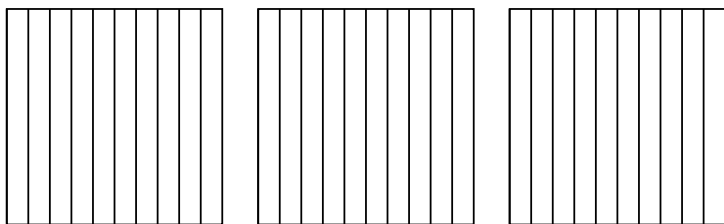


Use the visual model to solve each problem.

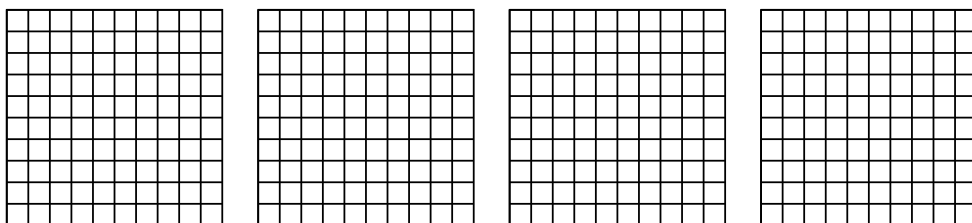
1) $2 \times 0.7 =$




2) $3 \times 0.5 =$



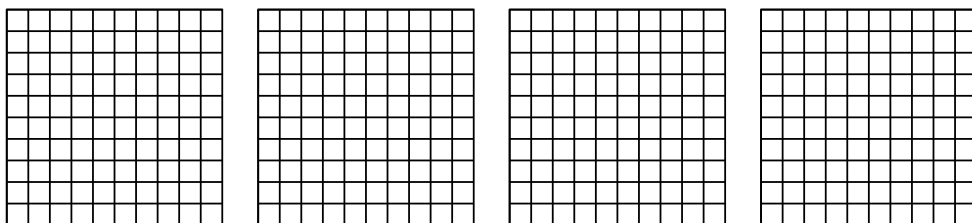
3) $4 \times 0.92 =$



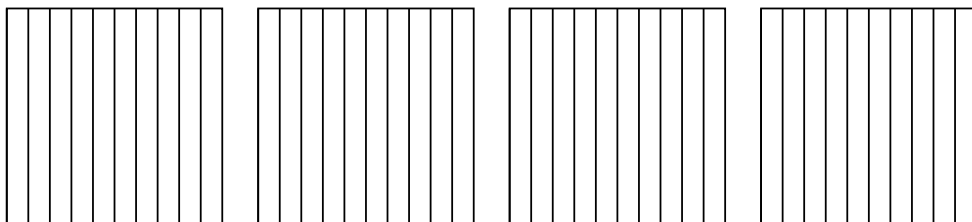
4) $3 \times 0.73 =$



5) $4 \times 0.20 =$



6) $4 \times 0.7 =$



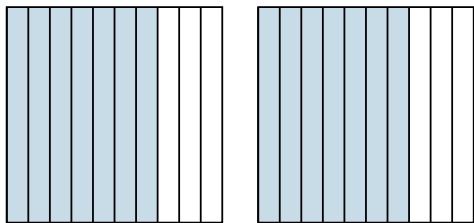
Answers

- 1. _____
- 2. _____
- 3. _____
- 4. _____
- 5. _____
- 6. _____

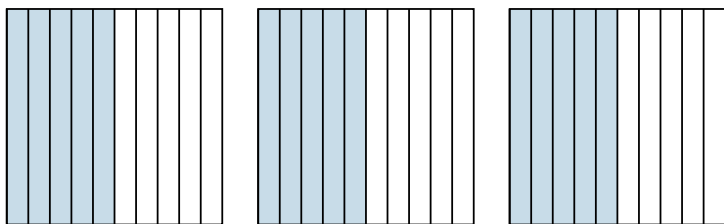


Use the visual model to solve each problem.

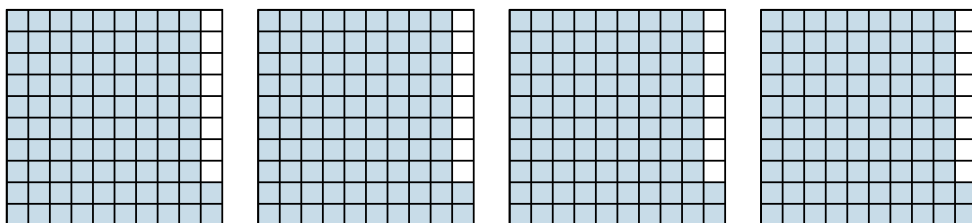
1) $2 \times 0.7 =$



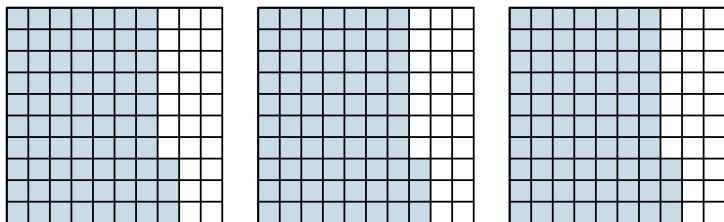
2) $3 \times 0.5 =$



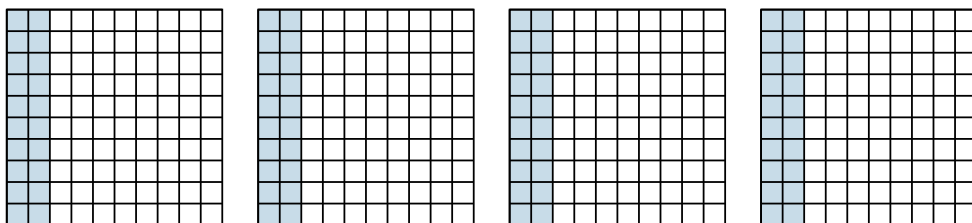
3) $4 \times 0.92 =$



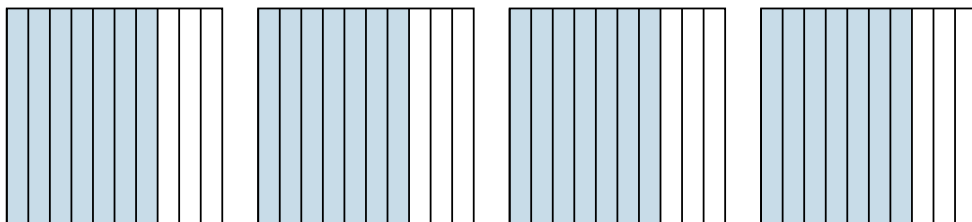
4) $3 \times 0.73 =$



5) $4 \times 0.20 =$



6) $4 \times 0.7 =$



Answers

1. $\frac{14}{10} = 1.4$

2. $\frac{15}{10} = 1.5$

3. $\frac{368}{100} = 3.68$

4. $\frac{219}{100} = 2.19$

5. $\frac{80}{100} = 0.8$


6. $\frac{28}{10} = 2.8$



Use the visual model to solve each problem.

Answers

1) $3 \times 0.18 =$

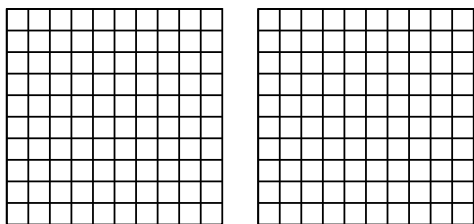


1. _____

2. _____

3. _____

2) $2 \times 0.53 =$

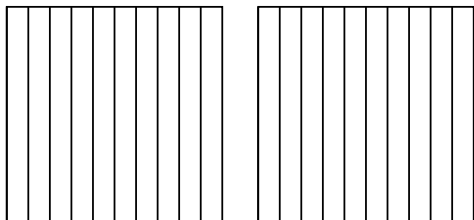


4. _____

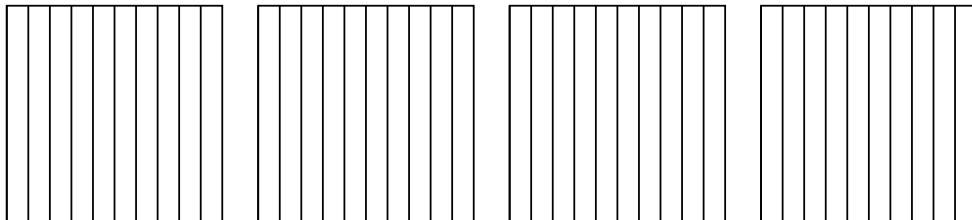
5. _____

6. _____

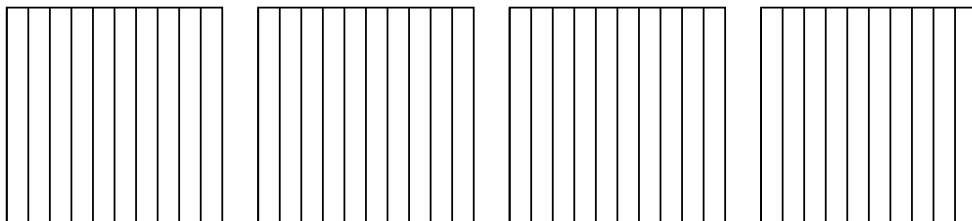
3) $2 \times 0.4 =$



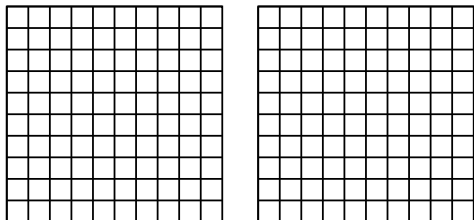
4) $4 \times 0.7 =$



5) $4 \times 0.8 =$



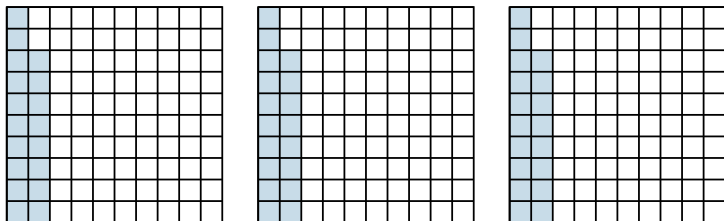
6) $2 \times 0.38 =$



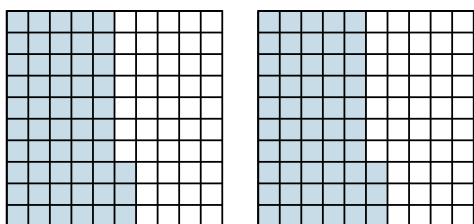


Use the visual model to solve each problem.

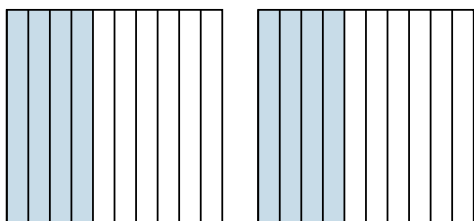
1) $3 \times 0.18 =$



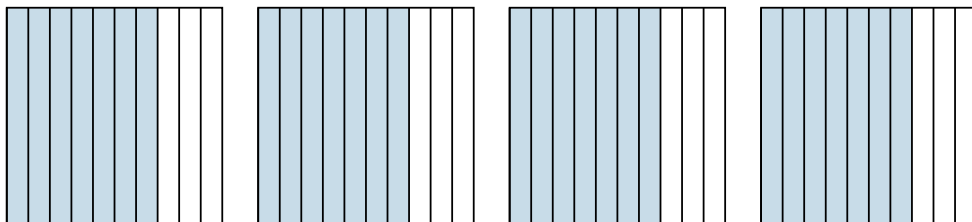
2) $2 \times 0.53 =$



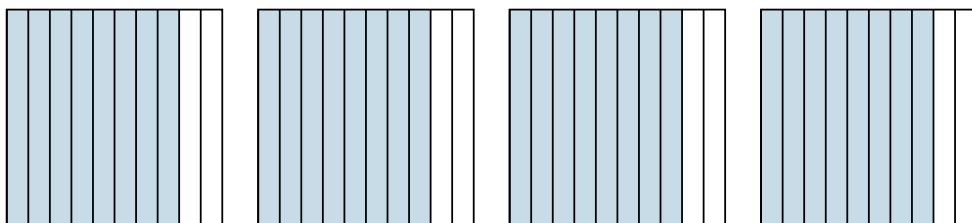
3) $2 \times 0.4 =$



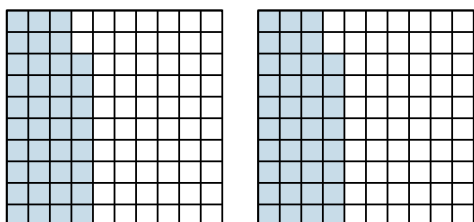
4) $4 \times 0.7 =$



5) $4 \times 0.8 =$



6) $2 \times 0.38 =$



Answers

1. $\frac{54}{100} = 0.54$

2. $\frac{106}{100} = 1.06$

3. $\frac{8}{10} = 0.8$

4. $\frac{28}{10} = 2.8$

5. $\frac{32}{10} = 3.2$

6. $\frac{76}{100} = 0.76$