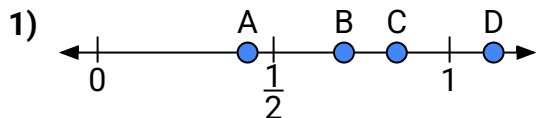
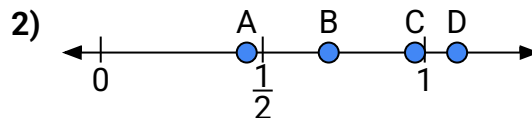




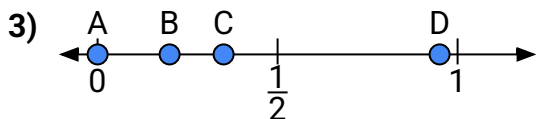
Use the number lines to answer the questions.

Answers

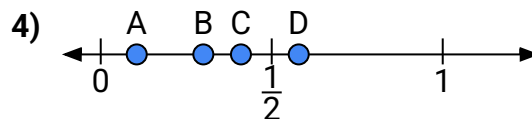
- a) Which letter best represents the location of 0.70?
b) Which letter best represents the location of 0.85?



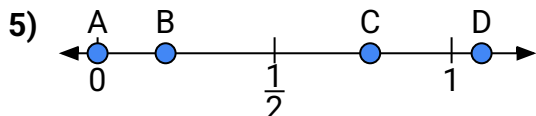
- a) Which letter best represents the location of 1.1?
b) Which letter best represents the location of 0.97?



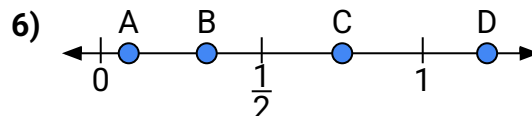
- a) Which letter best represents the location of 0.20?
b) Which letter best represents the location of 0.35?



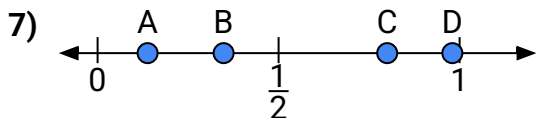
- a) Which letter best represents the location of 0.3?
b) Which letter best represents the location of 0.41?



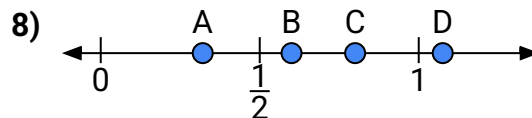
- a) Which letter best represents the location of 0.0?
b) Which letter best represents the location of 0.77?



- a) Which letter best represents the location of 1.2?
b) Which letter best represents the location of 0.75?



- a) Which letter best represents the location of 0.8?
b) Which letter best represents the location of 0.98?



- a) Which letter best represents the location of 0.60?
b) Which letter best represents the location of 0.80?

1. _____

2. _____

3. _____

4. _____

5. _____

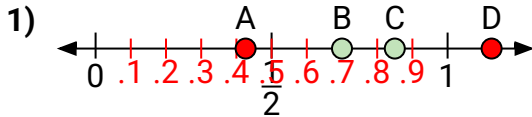
6. _____

7. _____

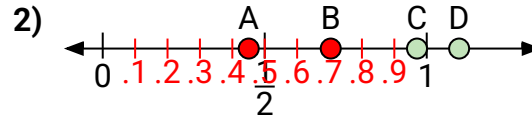
8. _____



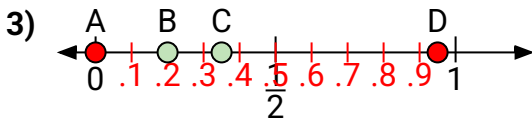
Use the number lines to answer the questions.

Answers

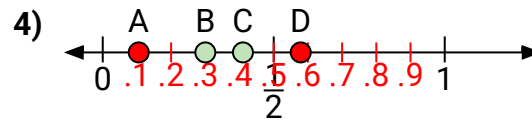
- a) Which letter best represents the location of 0.70?
b) Which letter best represents the location of 0.85?



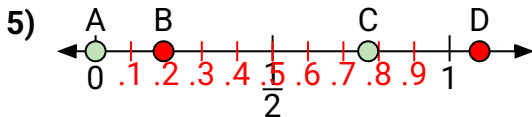
- a) Which letter best represents the location of 1.1?
b) Which letter best represents the location of 0.97?



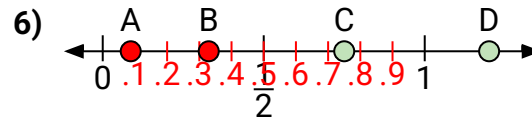
- a) Which letter best represents the location of 0.20?
b) Which letter best represents the location of 0.35?



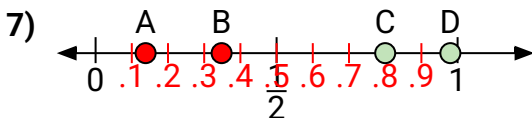
- a) Which letter best represents the location of 0.3?
b) Which letter best represents the location of 0.41?



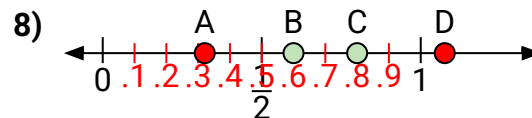
- a) Which letter best represents the location of 0.0?
b) Which letter best represents the location of 0.77?



- a) Which letter best represents the location of 1.2?
b) Which letter best represents the location of 0.75?



- a) Which letter best represents the location of 0.8?
b) Which letter best represents the location of 0.98?



- a) Which letter best represents the location of 0.60?
b) Which letter best represents the location of 0.80?

1. B C
2. D C
3. B C
4. B C
5. A C
6. D C
7. C D
8. B C