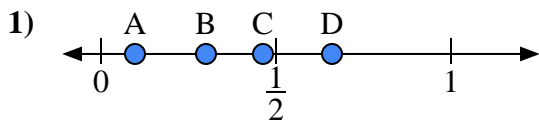


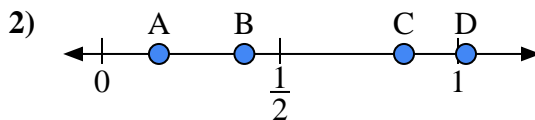


Use the number lines to answer the questions.

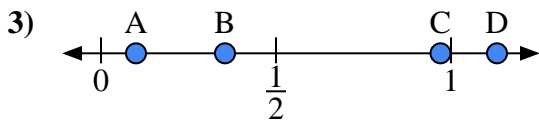
**Answers**



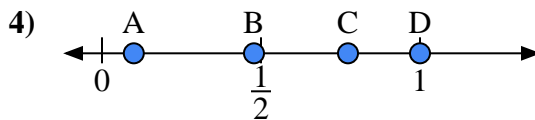
- a) Which letter best represents the location of 0.3?
- b) Which letter best represents the location of 0.66?



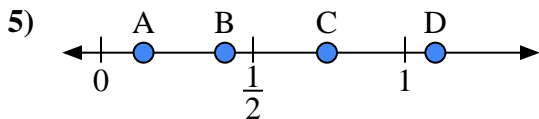
- a) Which letter best represents the location of 0.4?
- b) Which letter best represents the location of 0.16?



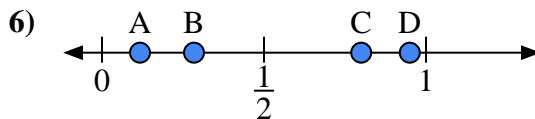
- a) Which letter best represents the location of 0.10?
- b) Which letter best represents the location of 0.97?



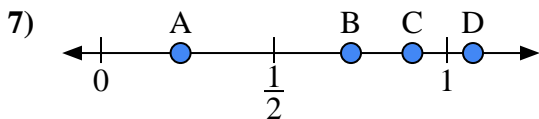
- a) Which letter best represents the location of 1.0?
- b) Which letter best represents the location of 0.10?



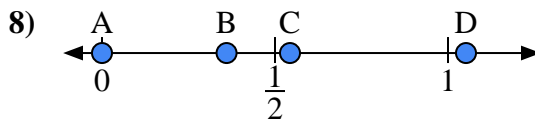
- a) Which letter best represents the location of 1.10?
- b) Which letter best represents the location of 0.14?



- a) Which letter best represents the location of 0.80?
- b) Which letter best represents the location of 0.95?



- a) Which letter best represents the location of 0.9?
- b) Which letter best represents the location of 0.23?

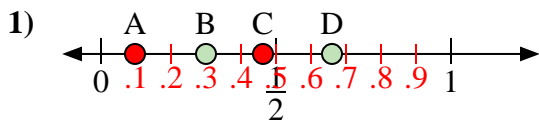


- a) Which letter best represents the location of 0.00?
- b) Which letter best represents the location of 0.36?

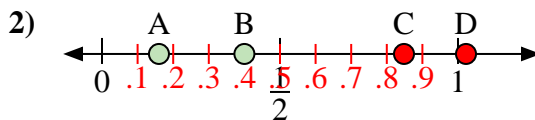
- 1. \_\_\_\_\_
- 2. \_\_\_\_\_
- 3. \_\_\_\_\_
- 4. \_\_\_\_\_
- 5. \_\_\_\_\_
- 6. \_\_\_\_\_
- 7. \_\_\_\_\_
- 8. \_\_\_\_\_



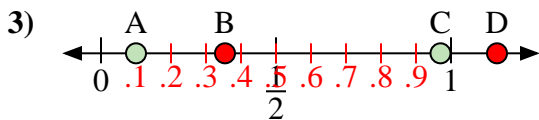
Use the number lines to answer the questions.



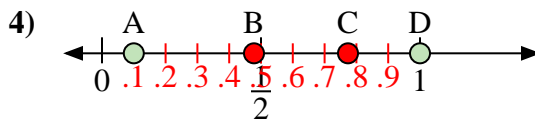
- a) Which letter best represents the location of 0.3?
- b) Which letter best represents the location of 0.66?



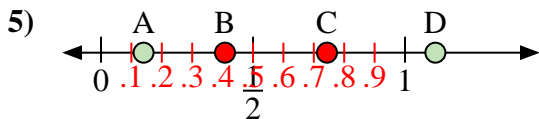
- a) Which letter best represents the location of 0.4?
- b) Which letter best represents the location of 0.16?



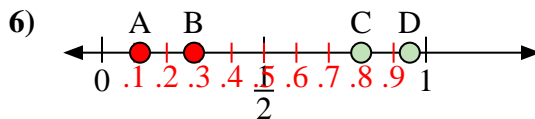
- a) Which letter best represents the location of 0.10?
- b) Which letter best represents the location of 0.97?



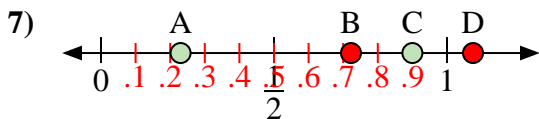
- a) Which letter best represents the location of 1.0?
- b) Which letter best represents the location of 0.10?



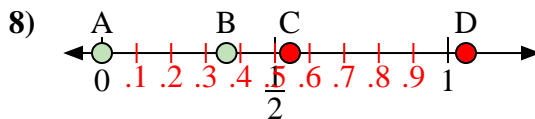
- a) Which letter best represents the location of 1.10?
- b) Which letter best represents the location of 0.14?



- a) Which letter best represents the location of 0.80?
- b) Which letter best represents the location of 0.95?



- a) Which letter best represents the location of 0.9?
- b) Which letter best represents the location of 0.23?



- a) Which letter best represents the location of 0.00?
- b) Which letter best represents the location of 0.36?

**Answers**

- 1.   B     D
- 2.   B     A
- 3.   A     C
- 4.   D     A
- 5.   D     A
- 6.   C     D
- 7.   C     A
- 8.   A     B