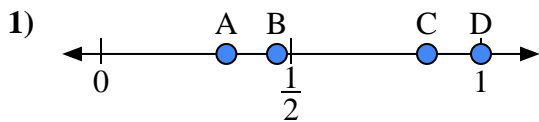


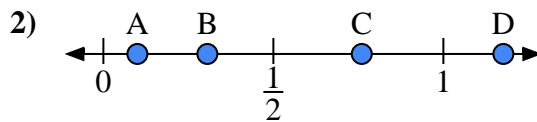


Use the number lines to answer the questions.

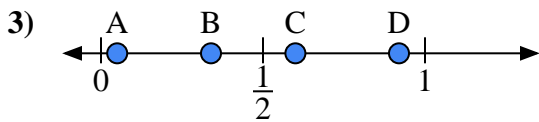
Answers



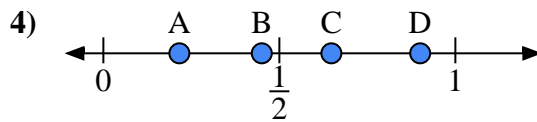
- a) Which letter best represents the location of 1.0?
- b) Which letter best represents the location of 0.33?



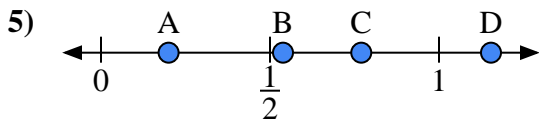
- a) Which letter best represents the location of 0.10?
- b) Which letter best represents the location of 0.76?



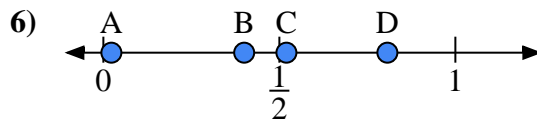
- a) Which letter best represents the location of 0.60?
- b) Which letter best represents the location of 0.05?



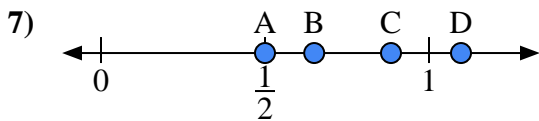
- a) Which letter best represents the location of 0.90?
- b) Which letter best represents the location of 0.45?



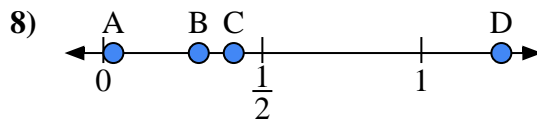
- a) Which letter best represents the location of 0.2?
- b) Which letter best represents the location of 0.77?



- a) Which letter best represents the location of 0.40?
- b) Which letter best represents the location of 0.52?



- a) Which letter best represents the location of 0.5?
- b) Which letter best represents the location of 0.65?

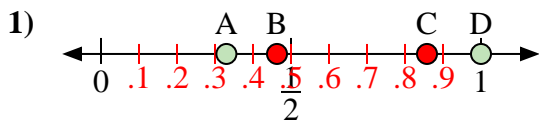


- a) Which letter best represents the location of 0.30?
- b) Which letter best represents the location of 0.41?

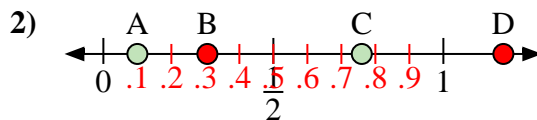
- 1. _____
- 2. _____
- 3. _____
- 4. _____
- 5. _____
- 6. _____
- 7. _____
- 8. _____



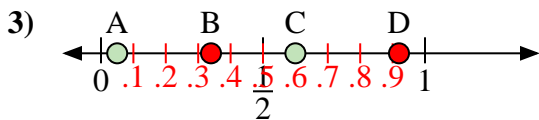
Use the number lines to answer the questions.



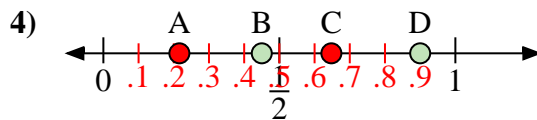
- a) Which letter best represents the location of 1.0?
- b) Which letter best represents the location of 0.33?



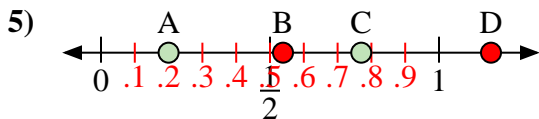
- a) Which letter best represents the location of 0.10?
- b) Which letter best represents the location of 0.76?



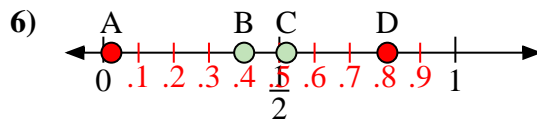
- a) Which letter best represents the location of 0.60?
- b) Which letter best represents the location of 0.05?



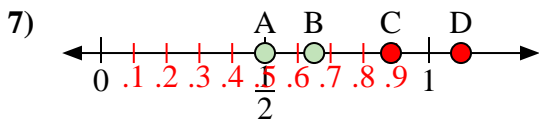
- a) Which letter best represents the location of 0.90?
- b) Which letter best represents the location of 0.45?



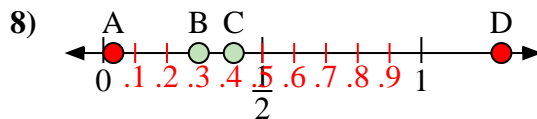
- a) Which letter best represents the location of 0.2?
- b) Which letter best represents the location of 0.77?



- a) Which letter best represents the location of 0.40?
- b) Which letter best represents the location of 0.52?



- a) Which letter best represents the location of 0.5?
- b) Which letter best represents the location of 0.65?



- a) Which letter best represents the location of 0.30?
- b) Which letter best represents the location of 0.41?

Answers

- 1. D A
- 2. A C
- 3. C A
- 4. D B
- 5. A C
- 6. B C
- 7. A B
- 8. B C