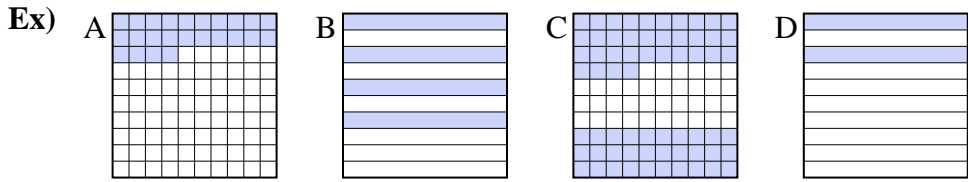




Put the boxes in order from least to greatest based on the shaded amount.

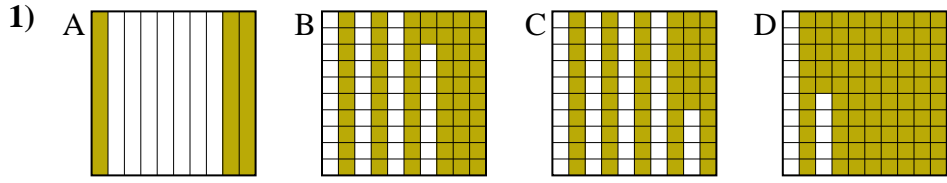
Answers



small 0.2 - D
0.24 - A
0.4 - B
 large 0.64 - C

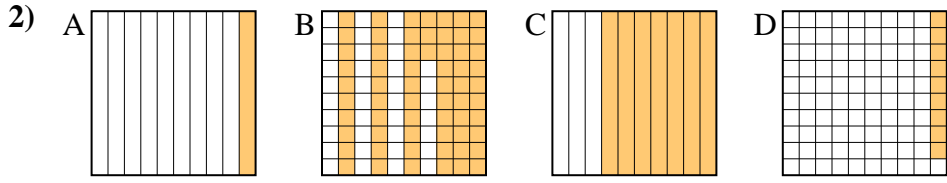
Ex. D,A,B,C

1. _____
2. _____
3. _____
4. _____
5. _____
6. _____
7. _____
8. _____



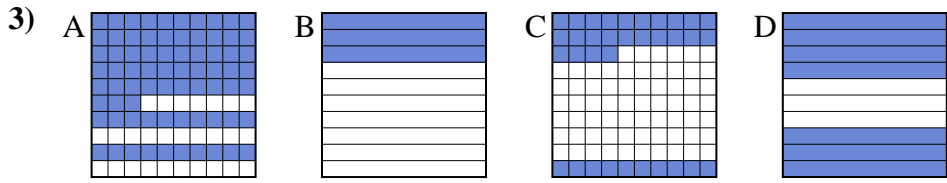
small _____

 large _____



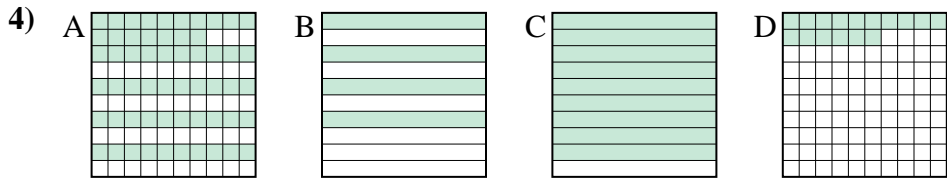
small _____

 large _____



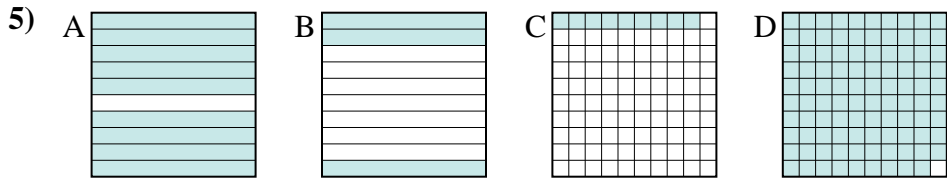
small _____

 large _____



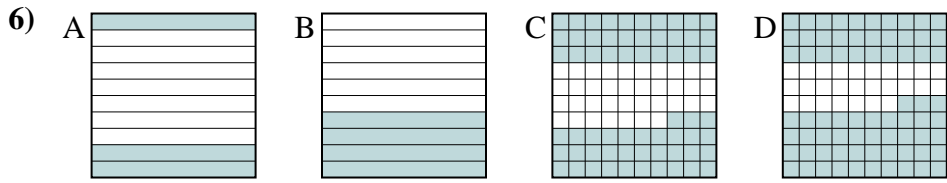
small _____

 large _____



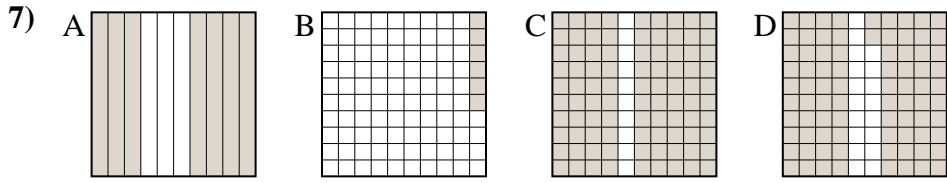
small _____

 large _____



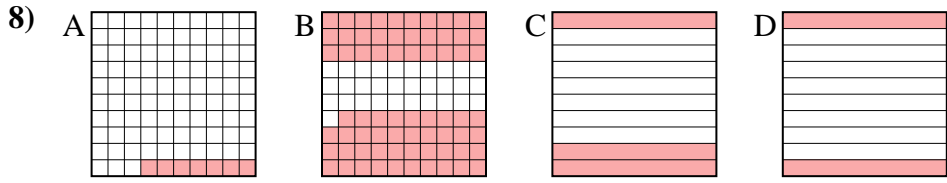
small _____

 large _____



small _____

 large _____



small _____

 large _____



Put the boxes in order from least to greatest based on the shaded amount.

Ex) A B C D

small $\frac{0.2}{0.24} - D$
 $\frac{0.4}{0.64} - C$

large $\frac{0.24}{0.64} - A$

1) A B C D

small $\frac{0.3}{0.56} - A$
 $\frac{0.62}{0.85} - B$

large $\frac{0.34}{0.85} - D$

2) A B C D

small $\frac{0.09}{0.1} - D$
 $\frac{0.63}{0.7} - B$

large $\frac{0.09}{0.7} - A$

3) A B C D

small $\frac{0.3}{0.34} - B$
 $\frac{0.7}{0.73} - D$

large $\frac{0.34}{0.73} - C$

4) A B C D

small $\frac{0.16}{0.4} - D$
 $\frac{0.57}{0.9} - A$

large $\frac{0.16}{0.9} - B$

5) A B C D

small $\frac{0.09}{0.3} - C$
 $\frac{0.9}{0.99} - A$

large $\frac{0.09}{0.99} - B$

6) A B C D

small $\frac{0.3}{0.4} - A$
 $\frac{0.63}{0.73} - C$

large $\frac{0.3}{0.73} - D$

7) A B C D

small $\frac{0.06}{0.7} - B$
 $\frac{0.82}{0.9} - D$

large $\frac{0.06}{0.9} - A$

8) A B C D

small $\frac{0.07}{0.2} - A$
 $\frac{0.3}{0.69} - B$

large $\frac{0.07}{0.69} - D$

Answers

- Ex. D,A,B,C
1. A,C,B,D
2. D,A,B,C
3. B,C,D,A
4. D,B,A,C
5. C,B,A,D
6. A,B,C,D
7. B,A,D,C
8. A,D,C,B