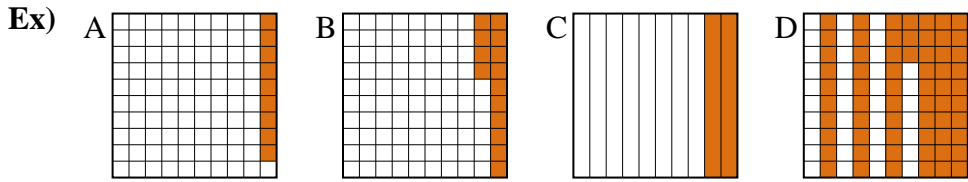




Put the boxes in order from least to greatest based on the shaded amount.

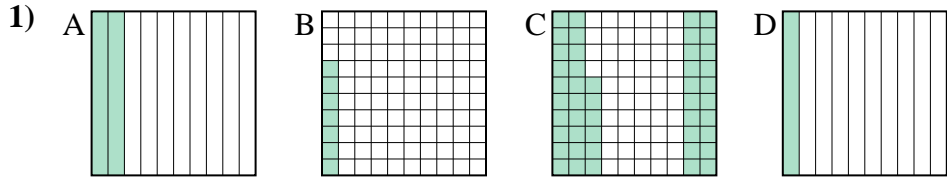
Answers



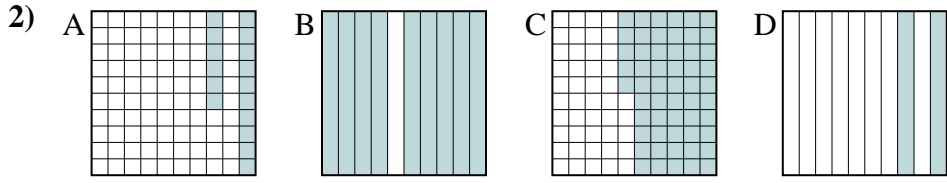
small 0.09 - A
0.14 - B
0.2 - C
 large 0.63 - D

Ex. A,B,C,D

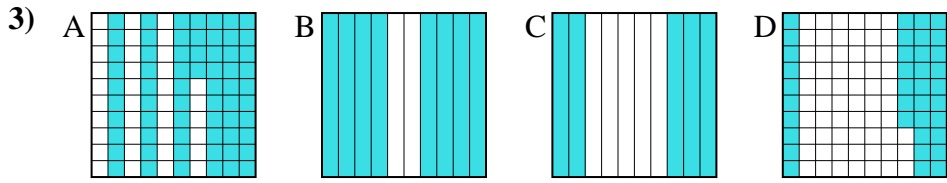
1. _____
2. _____
3. _____
4. _____
5. _____
6. _____
7. _____
8. _____



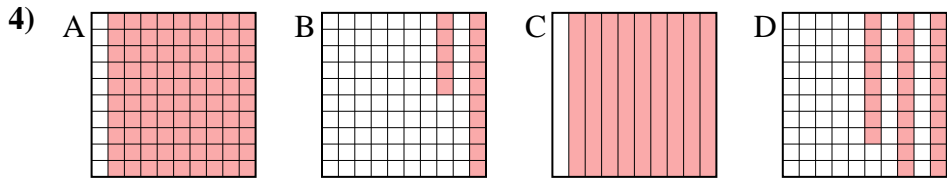
small _____
 large _____



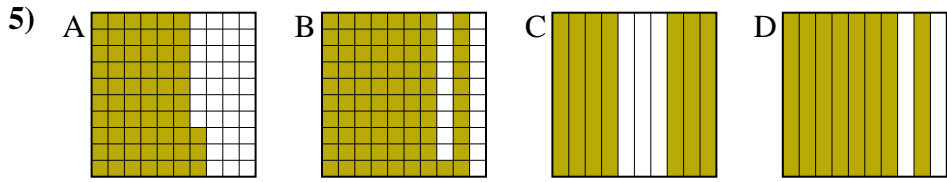
small _____
 large _____



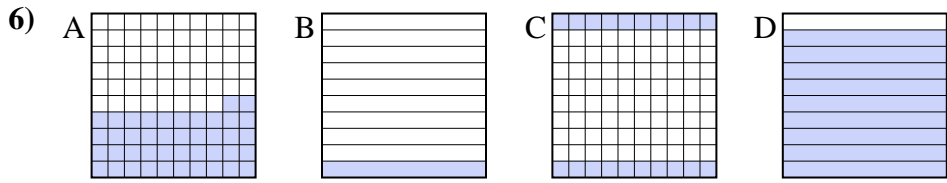
small _____
 large _____



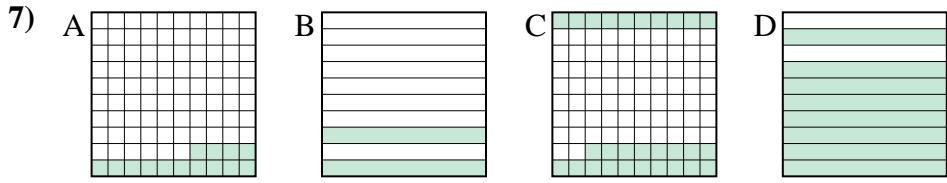
small _____
 large _____



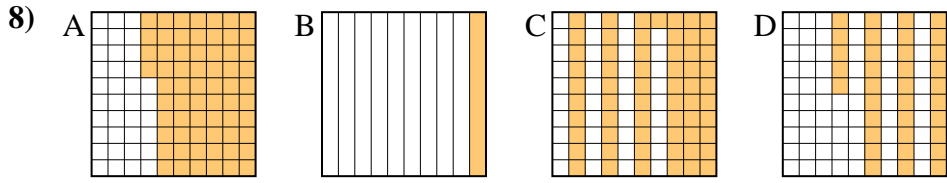
small _____
 large _____



small _____
 large _____



small _____
 large _____



small _____
 large _____



Put the boxes in order from least to greatest based on the shaded amount.

Ex) A B C D small $\frac{0.09 - A}{0.14 - B}$
large $\frac{0.2 - C}{0.63 - D}$

1) A B C D small $\frac{0.07 - B}{0.1 - D}$
large $\frac{0.2 - A}{0.46 - C}$

2) A B C D small $\frac{0.16 - A}{0.2 - D}$
large $\frac{0.55 - C}{0.9 - B}$

3) A B C D small $\frac{0.37 - D}{0.5 - C}$
large $\frac{0.64 - A}{0.8 - B}$

4) A B C D small $\frac{0.15 - B}{0.28 - D}$
large $\frac{0.9 - A}{0.9 - A}$

5) A B C D small $\frac{0.63 - A}{0.7 - C}$
large $\frac{0.8 - D}{0.81 - B}$

6) A B C D small $\frac{0.1 - B}{0.2 - C}$
large $\frac{0.42 - A}{0.9 - D}$

7) A B C D small $\frac{0.14 - A}{0.2 - B}$
large $\frac{0.28 - C}{0.8 - D}$

8) A B C D small $\frac{0.1 - B}{0.35 - D}$
large $\frac{0.61 - C}{0.64 - A}$

Answers

- Ex. A,B,C,D
1. B,D,A,C
2. A,D,C,B
3. D,C,A,B
4. B,D,A,A
5. A,C,D,B
6. B,C,A,D
7. A,B,C,D
8. B,D,C,A