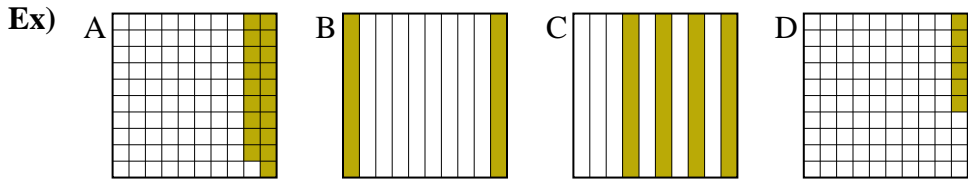




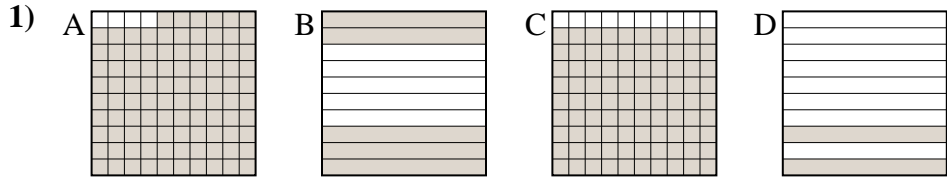
Put the boxes in order from least to greatest based on the shaded amount.

Answers



small 0.06 - D
0.19 - A
0.2 - B
 large 0.4 - C

Ex. D,A,B,C



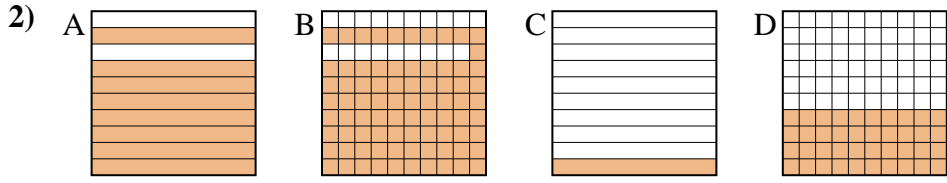
small _____

 large _____

1. _____

2. _____

3. _____

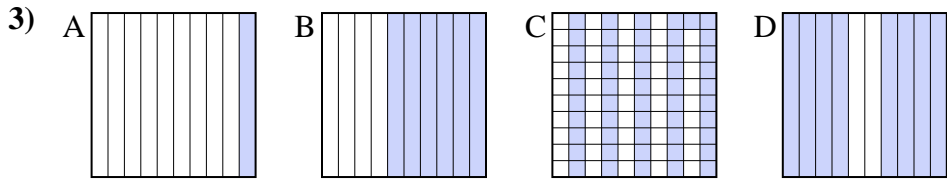


small _____

 large _____

4. _____

5. _____



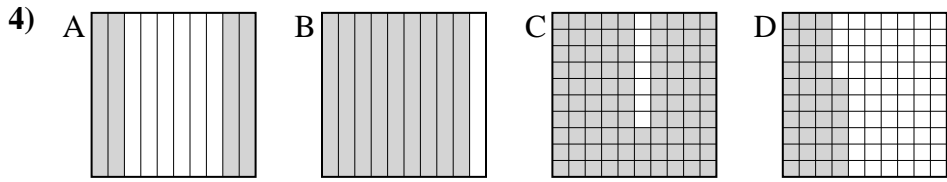
small _____

 large _____

6. _____

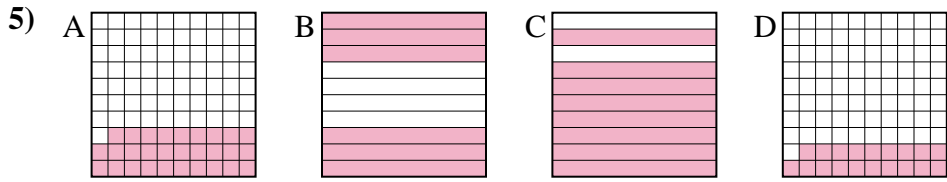
7. _____

8. _____



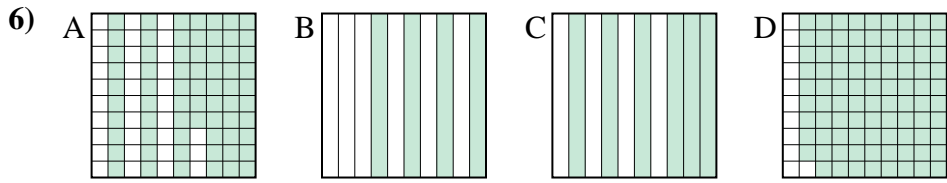
small _____

 large _____



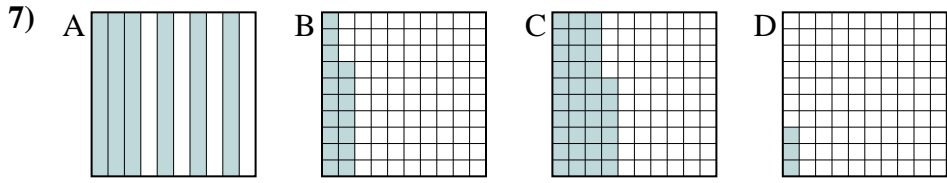
small _____

 large _____



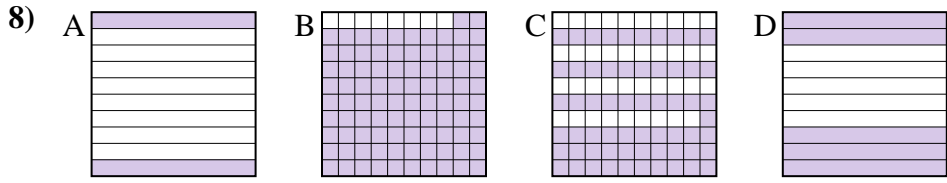
small _____

 large _____



small _____

 large _____



small _____

 large _____



Put the boxes in order from least to greatest based on the shaded amount.

Ex) A B C D small $\frac{0.06 - D}{0.19 - A}$
large $\frac{0.2 - B}{0.4 - C}$

1) A B C D small $\frac{0.2 - D}{0.5 - B}$
large $\frac{0.9 - C}{0.96 - A}$

2) A B C D small $\frac{0.1 - C}{0.4 - D}$
large $\frac{0.8 - A}{0.81 - B}$

3) A B C D small $\frac{0.1 - A}{0.51 - C}$
large $\frac{0.6 - B}{0.8 - D}$

4) A B C D small $\frac{0.36 - D}{0.4 - A}$
large $\frac{0.9 - B}{0.93 - C}$

5) A B C D small $\frac{0.19 - D}{0.29 - A}$
large $\frac{0.6 - B}{0.8 - C}$

6) A B C D small $\frac{0.4 - B}{0.6 - C}$
large $\frac{0.67 - A}{0.89 - D}$

7) A B C D small $\frac{0.03 - D}{0.17 - B}$
large $\frac{0.36 - C}{0.6 - A}$

8) A B C D small $\frac{0.2 - A}{0.5 - D}$
large $\frac{0.61 - C}{0.92 - B}$

Answers

- Ex. D,A,B,C
1. D,B,C,A
2. C,D,A,B
3. A,C,B,D
4. D,A,B,C
5. D,A,B,C
6. B,C,A,D
7. D,B,C,A
8. A,D,C,B