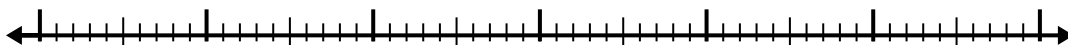


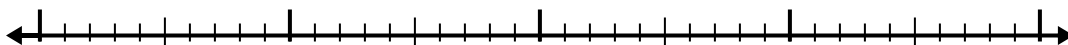


Use the number line to solve each problem.


1) $5.5 - 3.4 =$




2) $4.6 - 2.1 =$



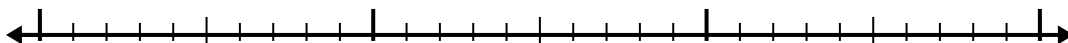
3) $8.1 - 1.2 =$



4) $8.1 - 1.3 =$



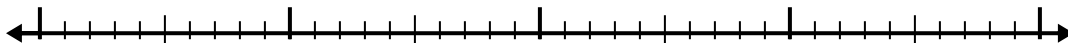
5) $8.9 - 1.8 =$



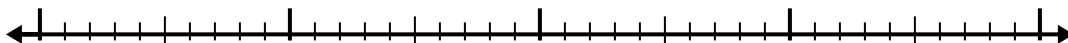
6) $5.9 - 2.1 =$



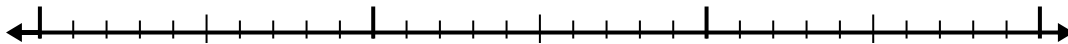
7) $9.3 - 2.1 =$



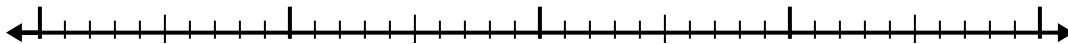
8) $7.8 - 1.8 =$



9) $5.6 - 1.1 =$



10) $6 - 2.7 =$



Answers

1. _____

2. _____

3. _____

4. _____

5. _____

6. _____

7. _____

8. _____

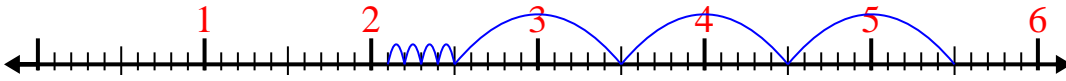
9. _____

10. _____

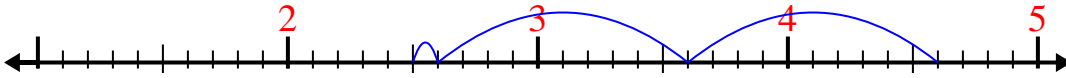


Use the number line to solve each problem.

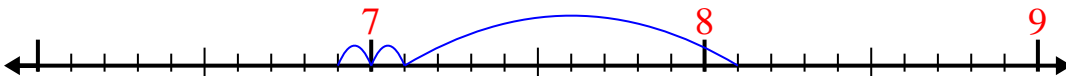
1) $5.5 - 3.4 =$




2) $4.6 - 2.1 =$



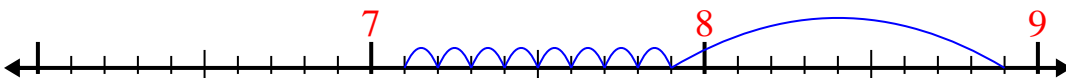
3) $8.1 - 1.2 =$



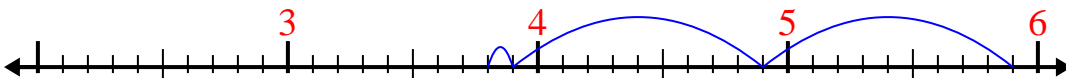
4) $8.1 - 1.3 =$



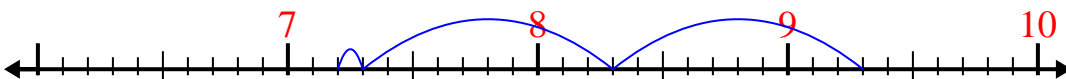
5) $8.9 - 1.8 =$



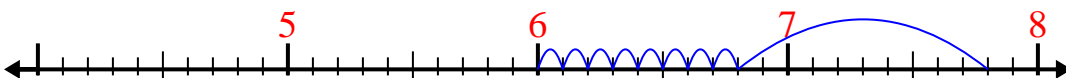
6) $5.9 - 2.1 =$



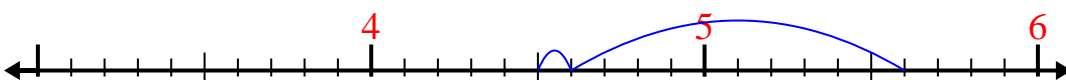
7) $9.3 - 2.1 =$



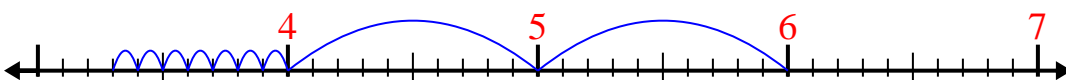
8) $7.8 - 1.8 =$



9) $5.6 - 1.1 =$



10) $6 - 2.7 =$

Answers1. 2.12. 2.53. 6.94. 6.85. 7.16. 3.87. 7.28. 69. 4.510. 3.3