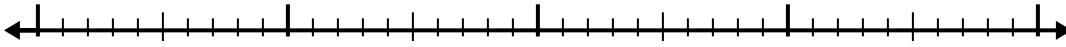


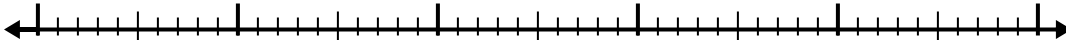


Use the number line to solve each problem.

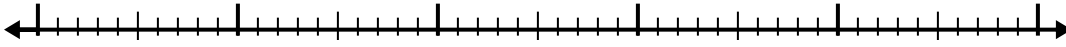
1) $9.6 - 2.2 =$



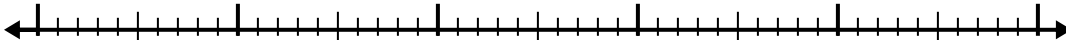
2) $7.7 - 2.3 =$



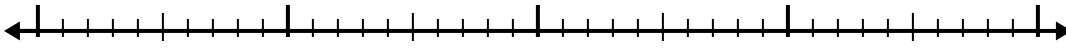
3) $7.6 - 2.9 =$



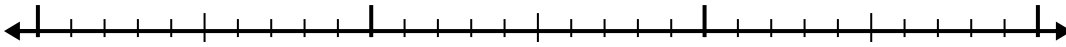
4) $8.1 - 3.7 =$



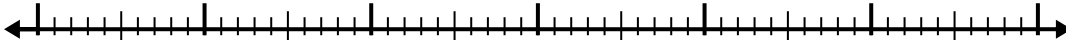
5) $4.5 - 2.3 =$



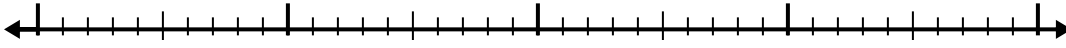
6) $5.2 - 1.3 =$



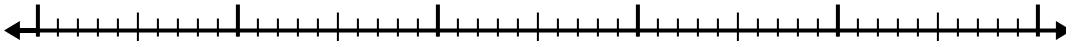
7) $4.9 - 3.9 =$



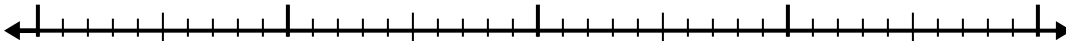
8) $7.9 - 2.1 =$



9) $8.6 - 2.3 =$



10) $10.2 - 2.9 =$



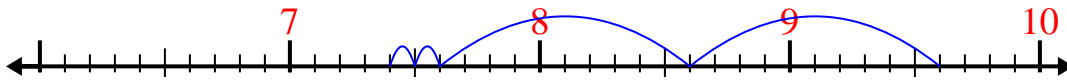
Answers

- 1. _____
- 2. _____
- 3. _____
- 4. _____
- 5. _____
- 6. _____
- 7. _____
- 8. _____
- 9. _____
- 10. _____

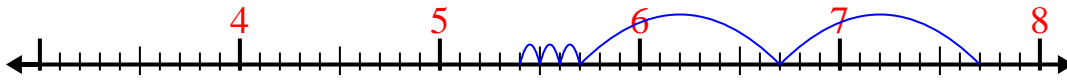


Use the number line to solve each problem.

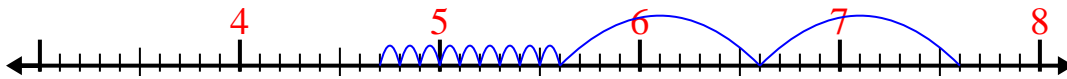
1) $9.6 - 2.2 =$



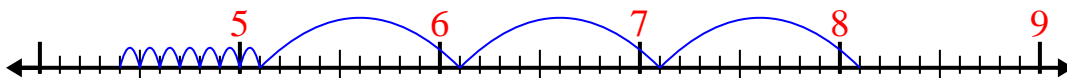
2) $7.7 - 2.3 =$



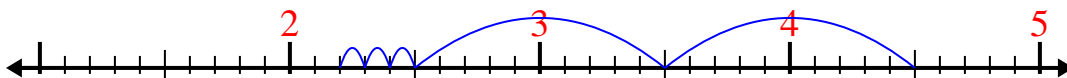
3) $7.6 - 2.9 =$



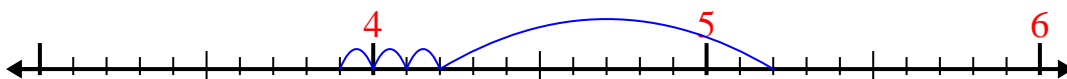
4) $8.1 - 3.7 =$



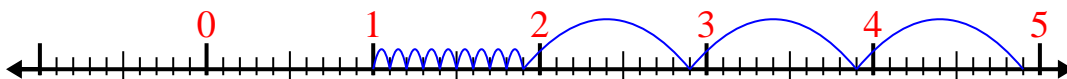
5) $4.5 - 2.3 =$



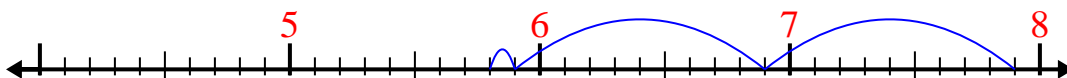
6) $5.2 - 1.3 =$



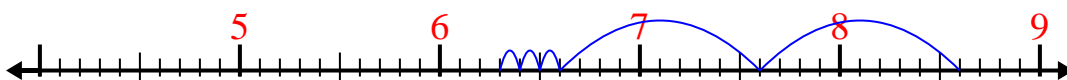
7) $4.9 - 3.9 =$



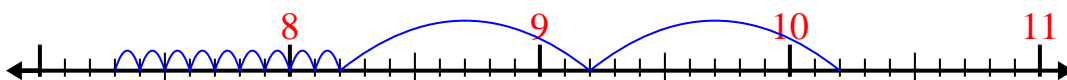
8) $7.9 - 2.1 =$



9) $8.6 - 2.3 =$



10) $10.2 - 2.9 =$

Answers1. 7.42. 5.43. 4.74. 4.45. 2.26. 3.97. 18. 5.89. 6.310. 7.3