


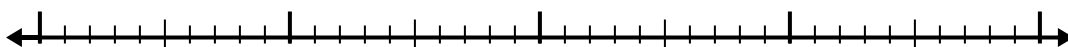


Use the number line to solve each problem.


1)  $5.5 - 3.4 =$




2)  $4.6 - 2.1 =$



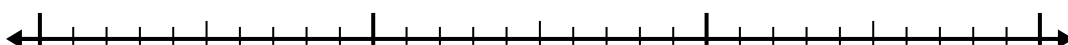
3)  $8.1 - 1.2 =$



4)  $8.1 - 1.3 =$



5)  $8.9 - 1.8 =$



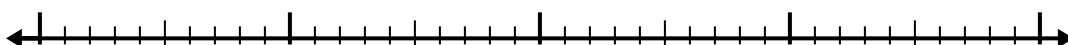
6)  $5.9 - 2.1 =$




7)  $9.3 - 2.1 =$



8)  $7.8 - 1.8 =$



9)  $5.6 - 1.1 =$



10)  $6 - 2.7 =$



Answers

1. \_\_\_\_\_

2. \_\_\_\_\_

3. \_\_\_\_\_

4. \_\_\_\_\_

5. \_\_\_\_\_

6. \_\_\_\_\_

7. \_\_\_\_\_

8. \_\_\_\_\_

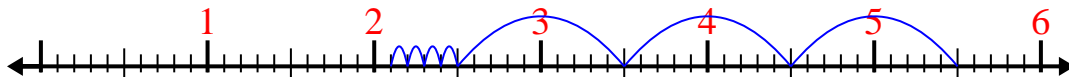
9. \_\_\_\_\_

10. \_\_\_\_\_

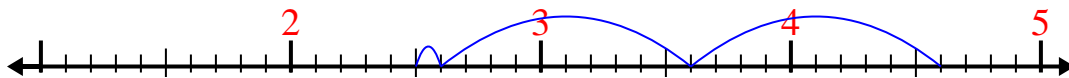


Use the number line to solve each problem.

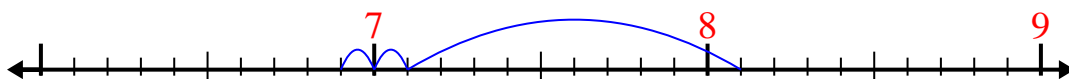
1)  $5.5 - 3.4 =$



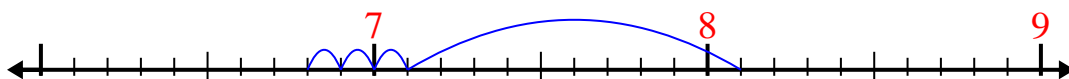
2)  $4.6 - 2.1 =$



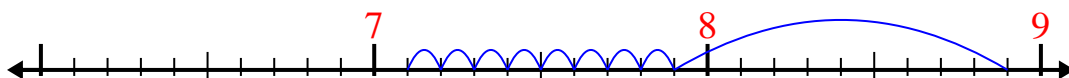
3)  $8.1 - 1.2 =$



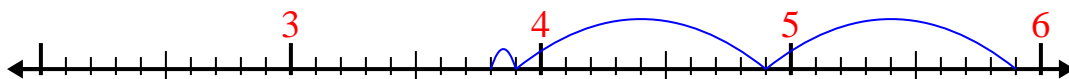
4)  $8.1 - 1.3 =$



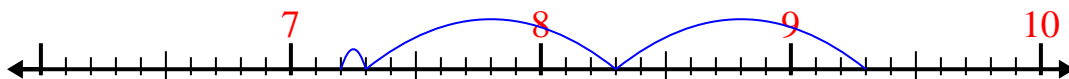
5)  $8.9 - 1.8 =$



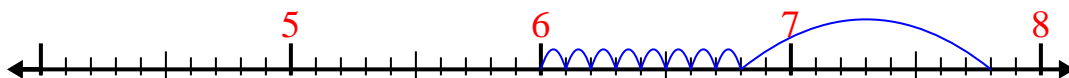
6)  $5.9 - 2.1 =$



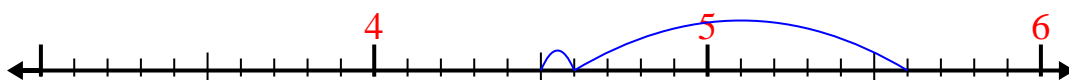
7)  $9.3 - 2.1 =$



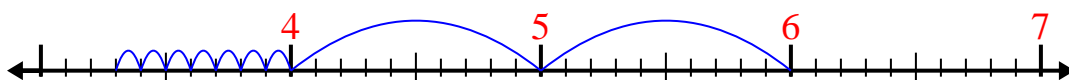
8)  $7.8 - 1.8 =$



9)  $5.6 - 1.1 =$



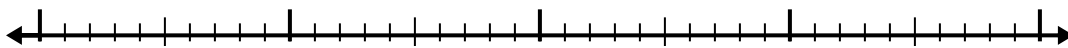
10)  $6 - 2.7 =$

Answers1. 2.12. 2.53. 6.94. 6.85. 7.16. 3.87. 7.28. 69. 4.510. 3.3

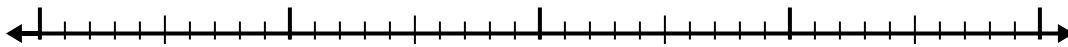


Use the number line to solve each problem.


1)  $7.8 - 1.7 =$



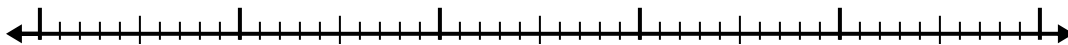
2)  $4.1 - 1.3 =$



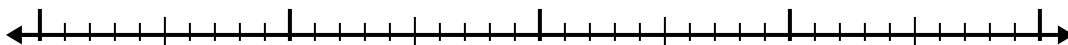
3)  $6.9 - 1.3 =$



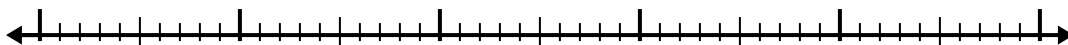
4)  $11.2 - 3.7 =$



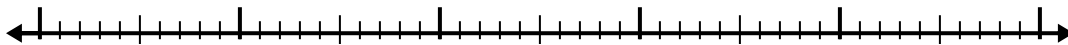
5)  $10.7 - 2.9 =$



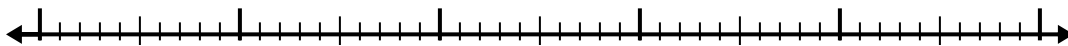
6)  $5.9 - 2.5 =$



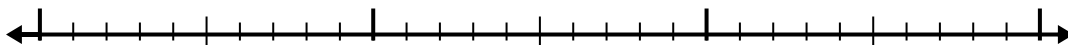
7)  $9.4 - 2.7 =$



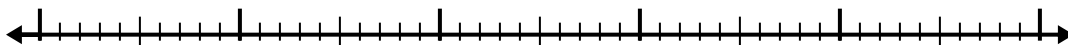
8)  $5.4 - 3.3 =$



9)  $2.7 - 1.7 =$



10)  $6.1 - 3.1 =$



Answers

1. \_\_\_\_\_

2. \_\_\_\_\_

3. \_\_\_\_\_

4. \_\_\_\_\_

5. \_\_\_\_\_

6. \_\_\_\_\_

7. \_\_\_\_\_

8. \_\_\_\_\_

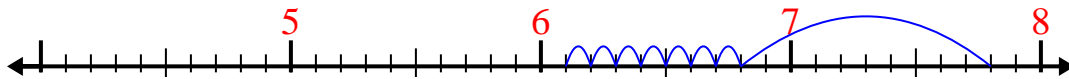
9. \_\_\_\_\_

10. \_\_\_\_\_

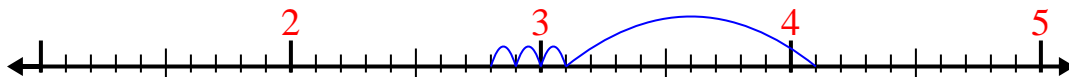


Use the number line to solve each problem.

1)  $7.8 - 1.7 =$



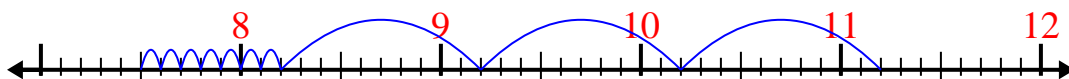
2)  $4.1 - 1.3 =$



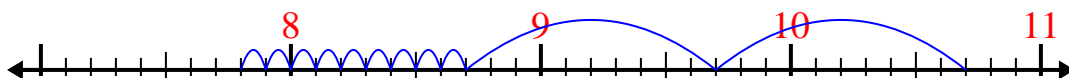
3)  $6.9 - 1.3 =$



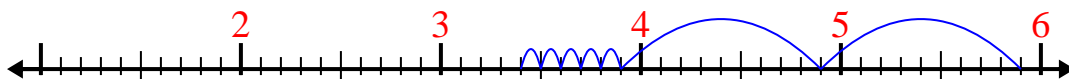
4)  $11.2 - 3.7 =$



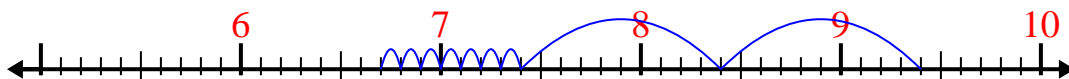
5)  $10.7 - 2.9 =$



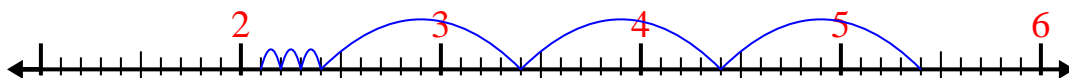
6)  $5.9 - 2.5 =$



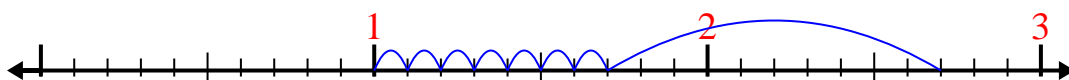
7)  $9.4 - 2.7 =$



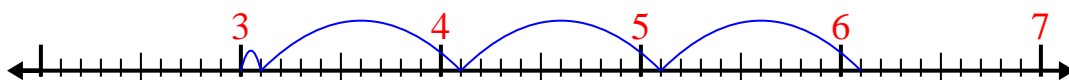
8)  $5.4 - 3.3 =$



9)  $2.7 - 1.7 =$



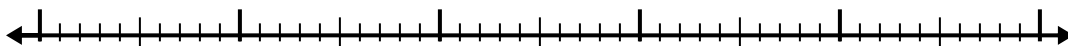
10)  $6.1 - 3.1 =$

Answers1. 6.12. 2.83. 5.64. 7.55. 7.86. 3.47. 6.78. 2.19. 110. 3

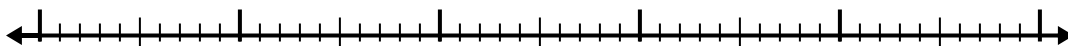


Use the number line to solve each problem.

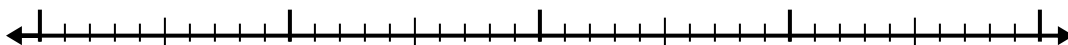
1)  $6.2 - 3.6 =$



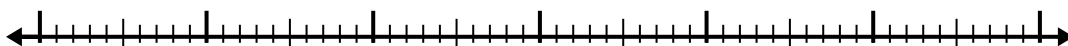
2)  $5.2 - 2.2 =$



3)  $3.3 - 2.2 =$



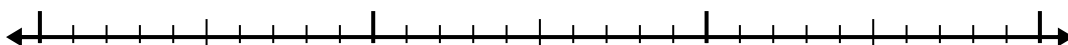
4)  $7.6 - 3.9 =$



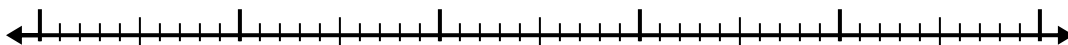
5)  $10.4 - 2.2 =$



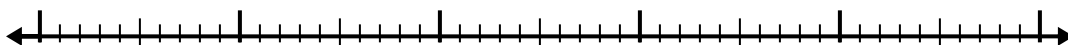
6)  $7.2 - 1.8 =$



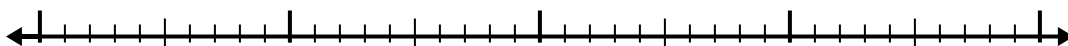
7)  $5.8 - 3.6 =$



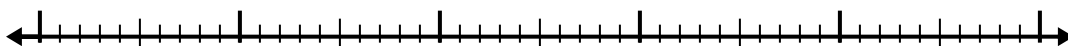
8)  $8.2 - 2.8 =$



9)  $5.7 - 2.2 =$



10)  $4.1 - 2.2 =$



Answers

1. \_\_\_\_\_

2. \_\_\_\_\_

3. \_\_\_\_\_

4. \_\_\_\_\_

5. \_\_\_\_\_

6. \_\_\_\_\_

7. \_\_\_\_\_

8. \_\_\_\_\_

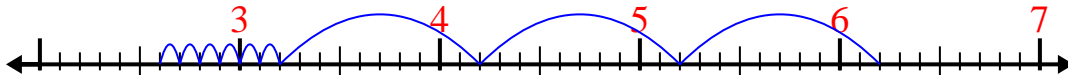
9. \_\_\_\_\_

10. \_\_\_\_\_

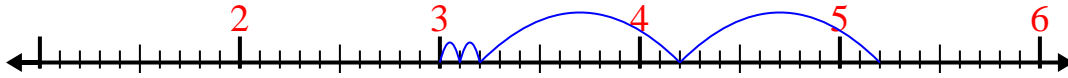


Use the number line to solve each problem.

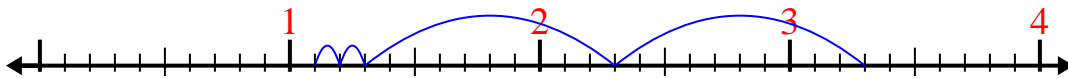
1)  $6.2 - 3.6 =$



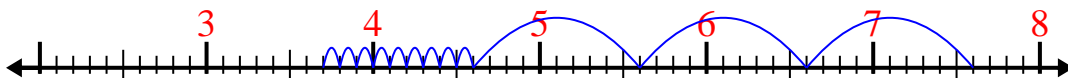
2)  $5.2 - 2.2 =$



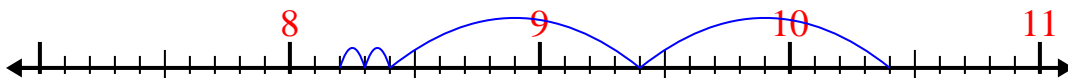
3)  $3.3 - 2.2 =$



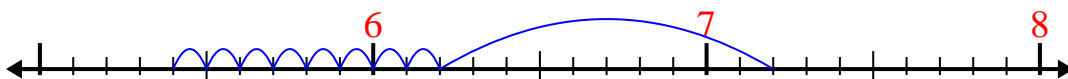
4)  $7.6 - 3.9 =$



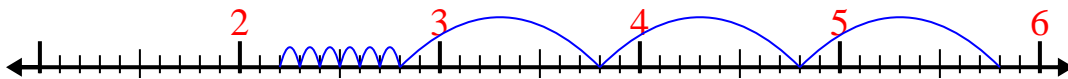
5)  $10.4 - 2.2 =$



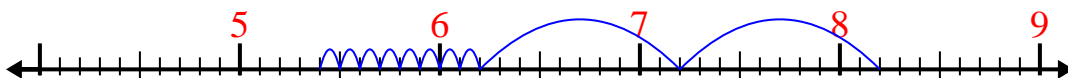
6)  $7.2 - 1.8 =$



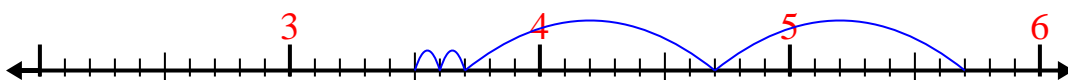
7)  $5.8 - 3.6 =$



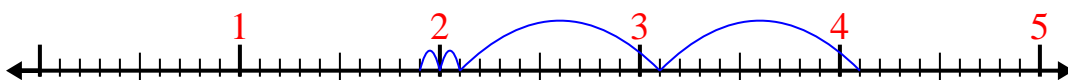
8)  $8.2 - 2.8 =$



9)  $5.7 - 2.2 =$




10)  $4.1 - 2.2 =$

Answers1. 2.62. 33. 1.14. 3.75. 8.26. 5.47. 2.28. 5.49. 3.510. 1.9

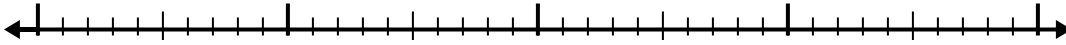


Use the number line to solve each problem.


1)  $5.8 - 3.1 =$



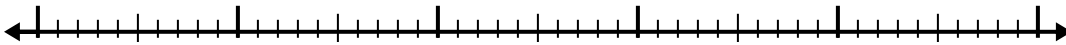
2)  $7.4 - 2.3 =$




3)  $10.3 - 3.1 =$



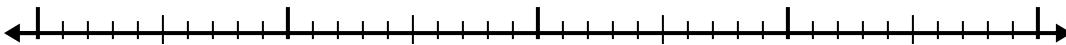
4)  $6.9 - 3.7 =$



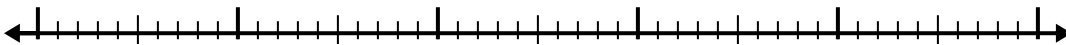
5)  $11.2 - 3.6 =$




6)  $4.5 - 2.7 =$



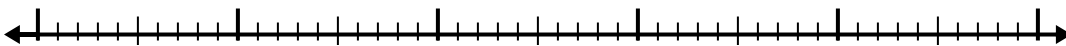
7)  $4.1 - 2.4 =$



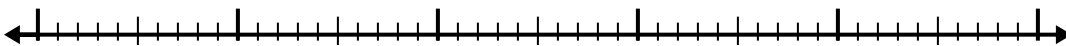
8)  $12.4 - 3.6 =$



9)  $11.5 - 2.6 =$



10)  $9.2 - 3.9 =$



Answers

1. \_\_\_\_\_

2. \_\_\_\_\_

3. \_\_\_\_\_

4. \_\_\_\_\_

5. \_\_\_\_\_

6. \_\_\_\_\_

7. \_\_\_\_\_

8. \_\_\_\_\_

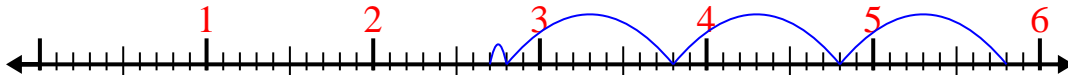
9. \_\_\_\_\_

10. \_\_\_\_\_

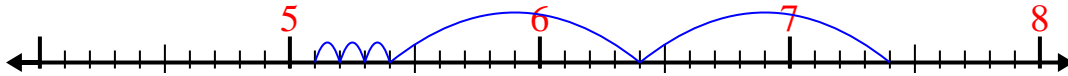


Use the number line to solve each problem.

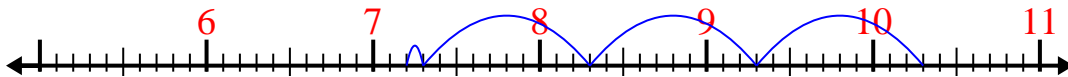
1)  $5.8 - 3.1 =$



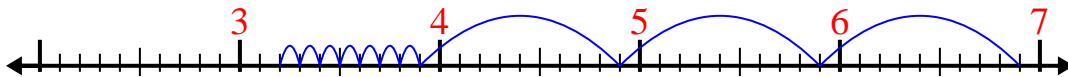
2)  $7.4 - 2.3 =$



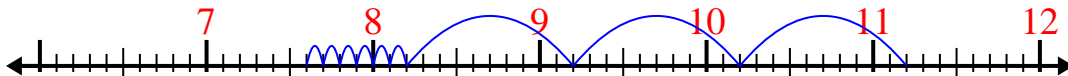
3)  $10.3 - 3.1 =$



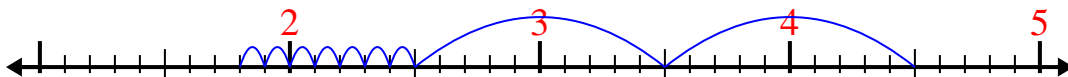
4)  $6.9 - 3.7 =$




5)  $11.2 - 3.6 =$



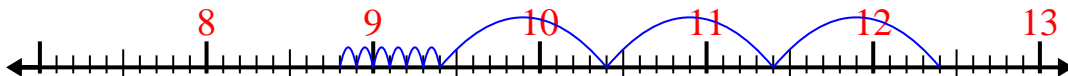
6)  $4.5 - 2.7 =$



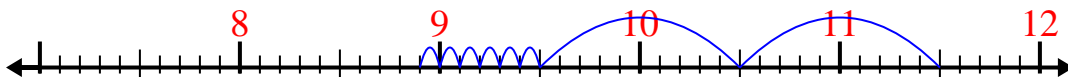
7)  $4.1 - 2.4 =$



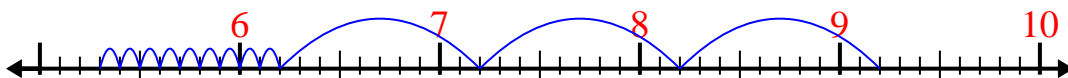
8)  $12.4 - 3.6 =$



9)  $11.5 - 2.6 =$



10)  $9.2 - 3.9 =$

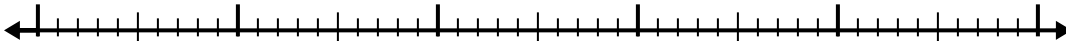
Answers1. 2.72. 5.13. 7.24. 3.25. 7.66. 1.87. 1.78. 8.89. 8.910. 5.3



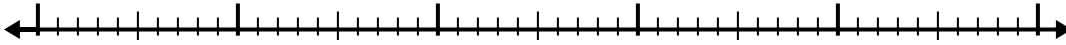


Use the number line to solve each problem.

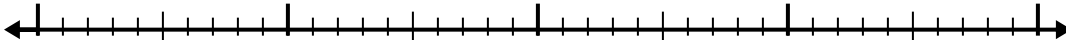
1)  $8.6 - 3.8 =$



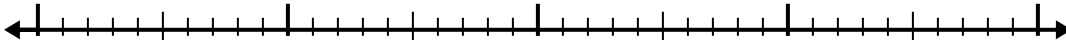
2)  $8.8 - 2.7 =$



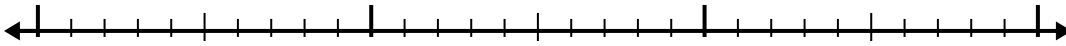
3)  $6.8 - 1.3 =$



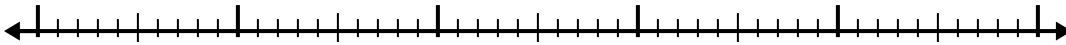
4)  $5.2 - 2.4 =$



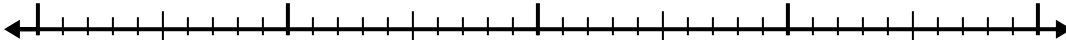
5)  $2.7 - 1.3 =$




6)  $7 - 2.4 =$



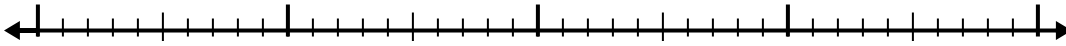
7)  $10.5 - 2.5 =$



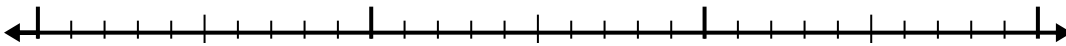
8)  $12.3 - 3.8 =$



9)  $4.2 - 2.7 =$



10)  $3 - 1.3 =$



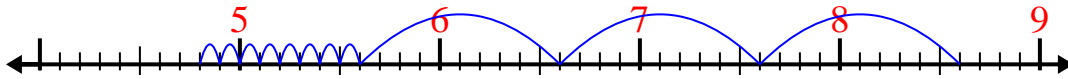
Answers

- 1. \_\_\_\_\_
- 2. \_\_\_\_\_
- 3. \_\_\_\_\_
- 4. \_\_\_\_\_
- 5. \_\_\_\_\_
- 6. \_\_\_\_\_
- 7. \_\_\_\_\_
- 8. \_\_\_\_\_
- 9. \_\_\_\_\_
- 10. \_\_\_\_\_

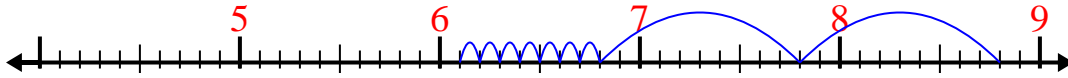


Use the number line to solve each problem.

1)  $8.6 - 3.8 =$



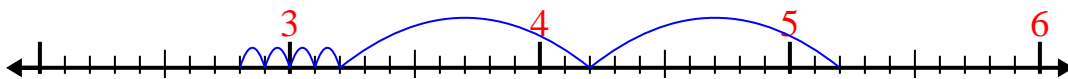
2)  $8.8 - 2.7 =$



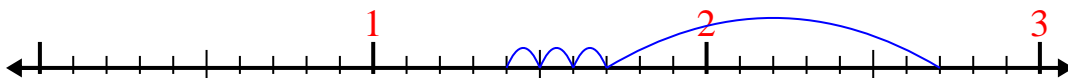
3)  $6.8 - 1.3 =$



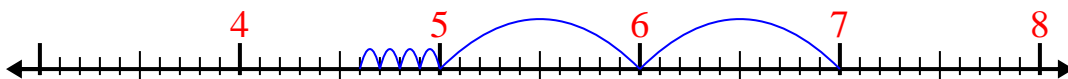
4)  $5.2 - 2.4 =$



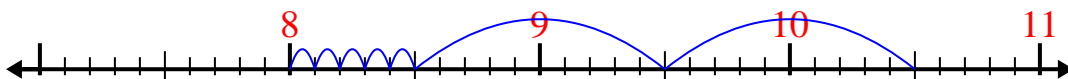
5)  $2.7 - 1.3 =$



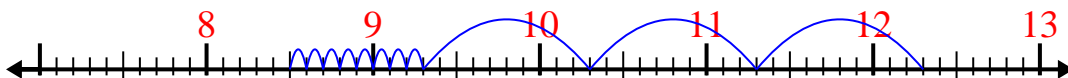
6)  $7 - 2.4 =$



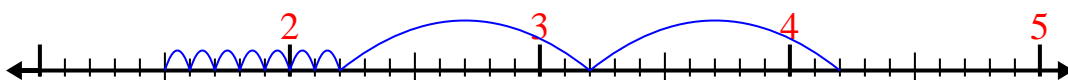
7)  $10.5 - 2.5 =$



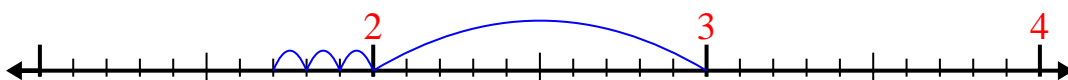
8)  $12.3 - 3.8 =$



9)  $4.2 - 2.7 =$



10)  $3 - 1.3 =$



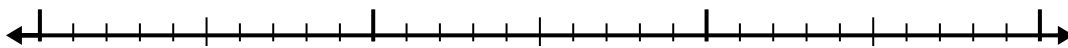
Answers

1. 4.8
2. 6.1
3. 5.5
4. 2.8
5. 1.4
6. 4.6
7. 8
8. 8.5
9. 1.5
10. 1.7

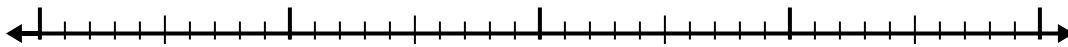


Use the number line to solve each problem.

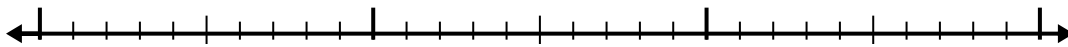
1)  $2.5 - 1.3 =$




2)  $10.8 - 2.4 =$



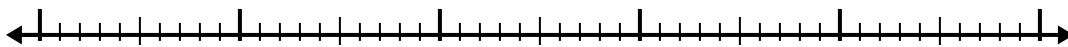
3)  $4.5 - 1.7 =$



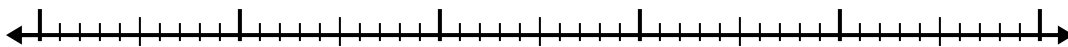
4)  $9.9 - 3.8 =$



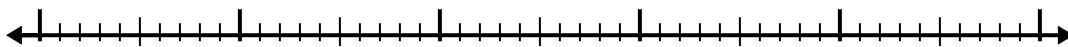
5)  $4.4 - 2.5 =$



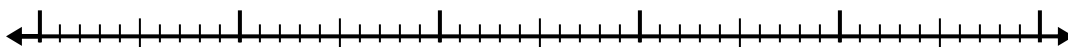
6)  $9.7 - 2.4 =$




7)  $12.6 - 3.7 =$




8)  $6.2 - 2.7 =$



9)  $7.7 - 1.6 =$



10)  $6.5 - 2.1 =$



Answers

1. \_\_\_\_\_

2. \_\_\_\_\_

3. \_\_\_\_\_

4. \_\_\_\_\_

5. \_\_\_\_\_

6. \_\_\_\_\_

7. \_\_\_\_\_

8. \_\_\_\_\_

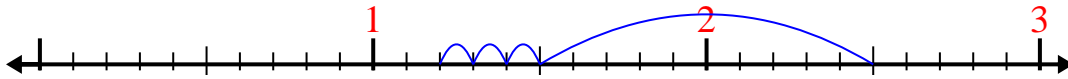
9. \_\_\_\_\_

10. \_\_\_\_\_

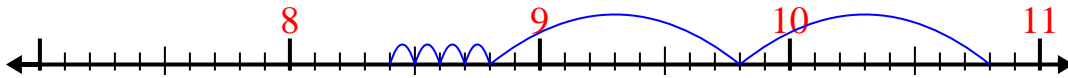


Use the number line to solve each problem.

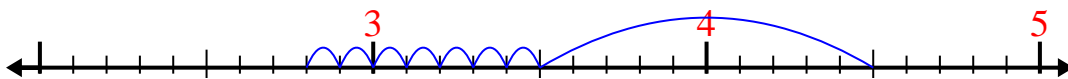
1)  $2.5 - 1.3 =$



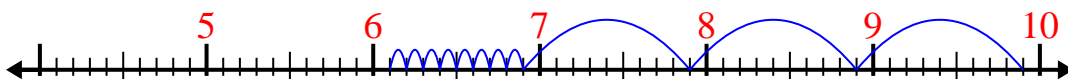
2)  $10.8 - 2.4 =$



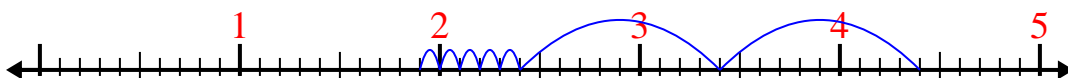
3)  $4.5 - 1.7 =$



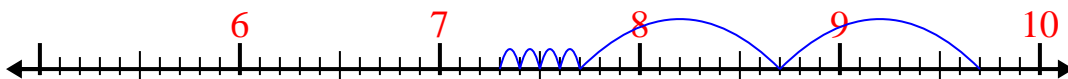
4)  $9.9 - 3.8 =$



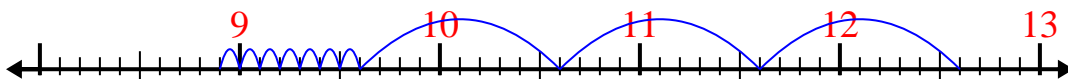
5)  $4.4 - 2.5 =$



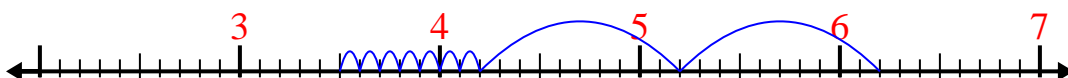
6)  $9.7 - 2.4 =$



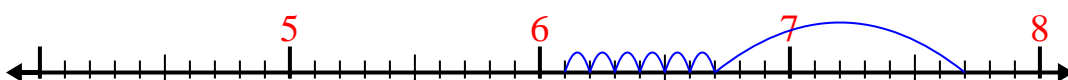
7)  $12.6 - 3.7 =$



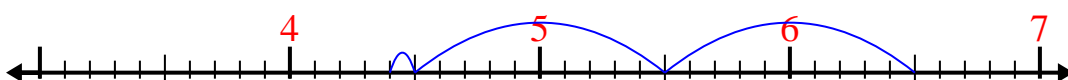
8)  $6.2 - 2.7 =$



9)  $7.7 - 1.6 =$



10)  $6.5 - 2.1 =$



Answers

1. 1.2

2. 8.4

3. 2.8

4. 6.1

5. 1.9

6. 7.3

7. 8.9

8. 3.5

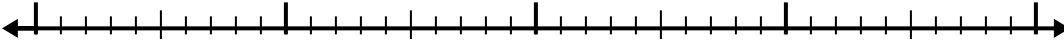
9. 6.1

10. 4.4

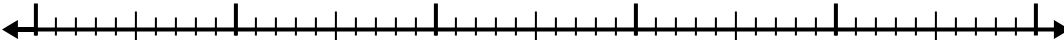


Use the number line to solve each problem.

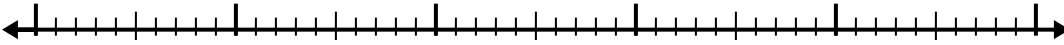
1)  $9.6 - 2.2 =$



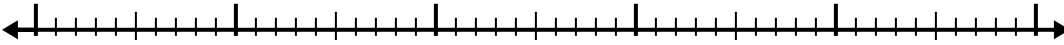
2)  $7.7 - 2.3 =$



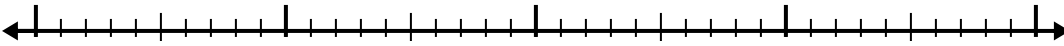
3)  $7.6 - 2.9 =$



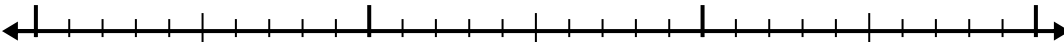
4)  $8.1 - 3.7 =$



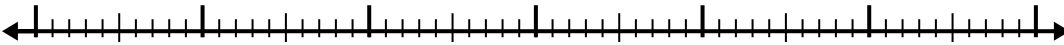
5)  $4.5 - 2.3 =$



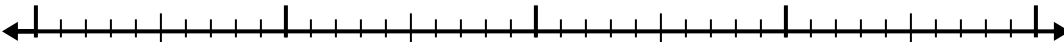
6)  $5.2 - 1.3 =$



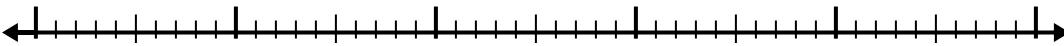
7)  $4.9 - 3.9 =$



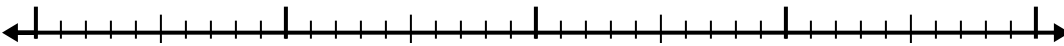
8)  $7.9 - 2.1 =$



9)  $8.6 - 2.3 =$



10)  $10.2 - 2.9 =$



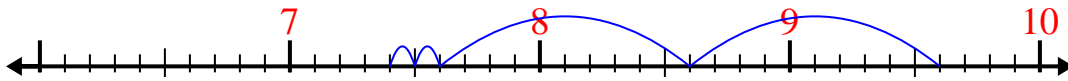
Answers

- 1. \_\_\_\_\_
- 2. \_\_\_\_\_
- 3. \_\_\_\_\_
- 4. \_\_\_\_\_
- 5. \_\_\_\_\_
- 6. \_\_\_\_\_
- 7. \_\_\_\_\_
- 8. \_\_\_\_\_
- 9. \_\_\_\_\_
- 10. \_\_\_\_\_

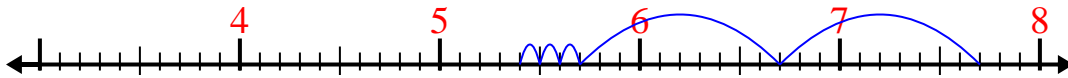


Use the number line to solve each problem.

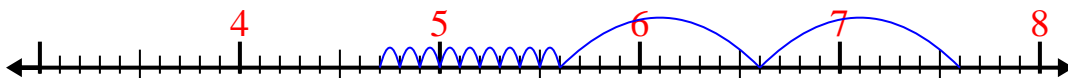
1)  $9.6 - 2.2 =$



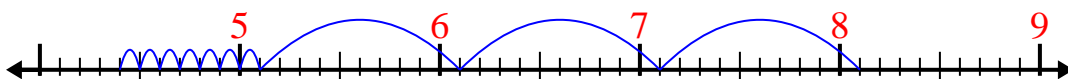
2)  $7.7 - 2.3 =$



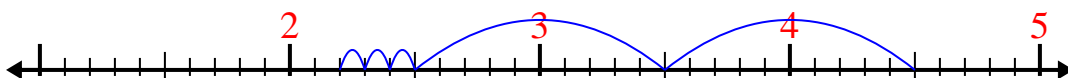
3)  $7.6 - 2.9 =$



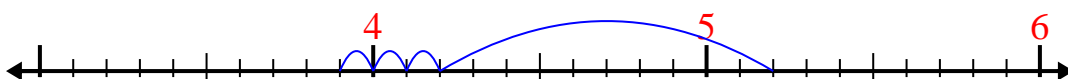
4)  $8.1 - 3.7 =$



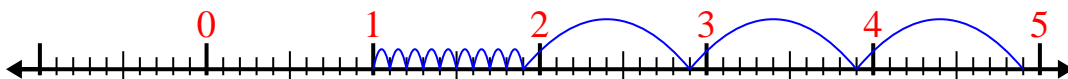
5)  $4.5 - 2.3 =$



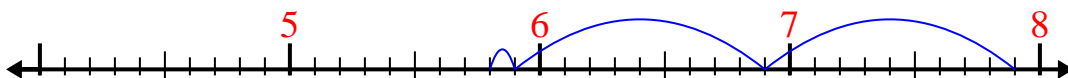
6)  $5.2 - 1.3 =$



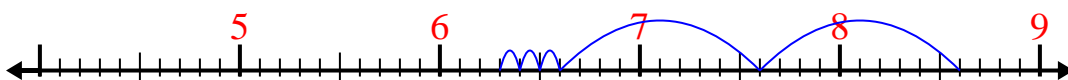
7)  $4.9 - 3.9 =$



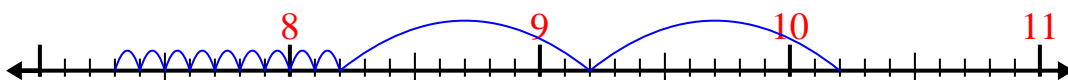
8)  $7.9 - 2.1 =$



9)  $8.6 - 2.3 =$



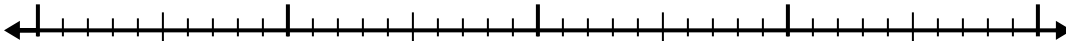
10)  $10.2 - 2.9 =$

Answers1. 7.42. 5.43. 4.74. 4.45. 2.26. 3.97. 18. 5.89. 6.310. 7.3

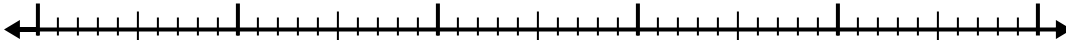


Use the number line to solve each problem.

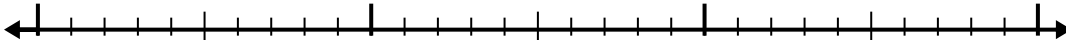
1)  $7 - 2.6 =$



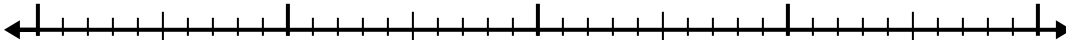
2)  $6.2 - 2.7 =$



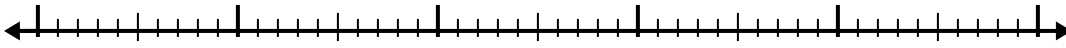
3)  $2.5 - 1.2 =$



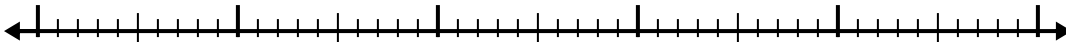
4)  $5.2 - 1.9 =$



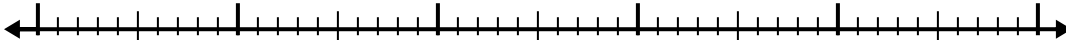
5)  $12.3 - 3.4 =$




6)  $11 - 2.7 =$



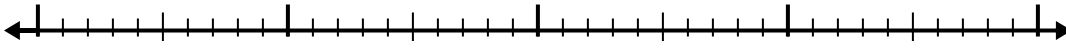
7)  $8 - 2.7 =$



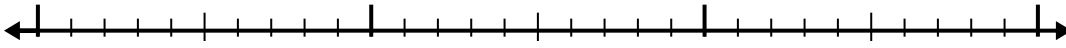
8)  $5 - 3.1 =$



9)  $10.9 - 2.3 =$



10)  $5.1 - 1.1 =$



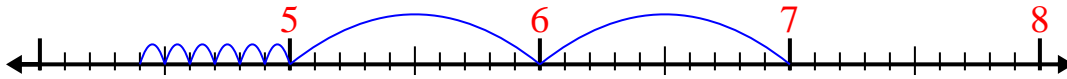
Answers

- 1. \_\_\_\_\_
- 2. \_\_\_\_\_
- 3. \_\_\_\_\_
- 4. \_\_\_\_\_
- 5. \_\_\_\_\_
- 6. \_\_\_\_\_
- 7. \_\_\_\_\_
- 8. \_\_\_\_\_
- 9. \_\_\_\_\_
- 10. \_\_\_\_\_

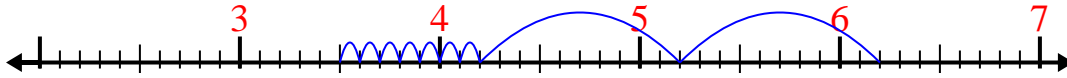


Use the number line to solve each problem.

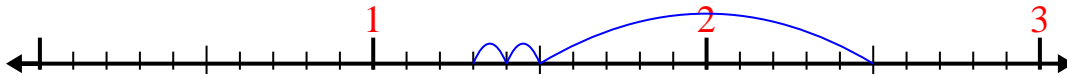
1)  $7 - 2.6 =$



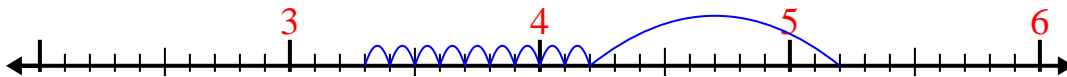
2)  $6.2 - 2.7 =$



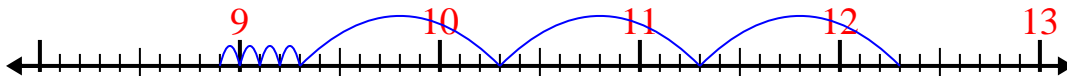
3)  $2.5 - 1.2 =$



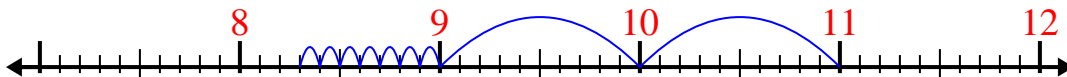
4)  $5.2 - 1.9 =$



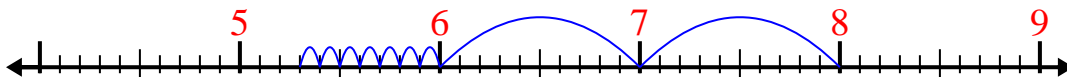
5)  $12.3 - 3.4 =$



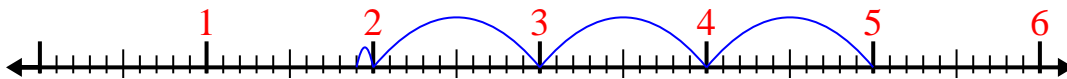
6)  $11 - 2.7 =$



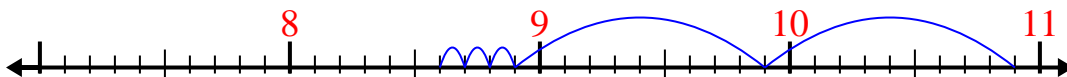
7)  $8 - 2.7 =$



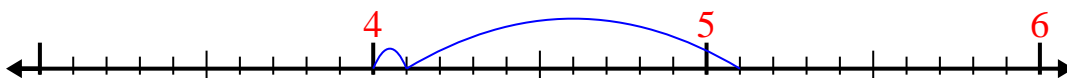
8)  $5 - 3.1 =$



9)  $10.9 - 2.3 =$



10)  $5.1 - 1.1 =$


Answers1. 4.42. 3.53. 1.34. 3.35. 8.96. 8.37. 5.38. 1.99. 8.610. 4



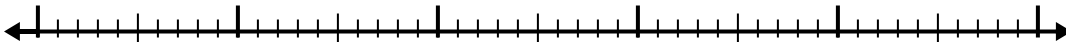


Use the number line to solve each problem.

1)  $9.7 - 3.2 =$



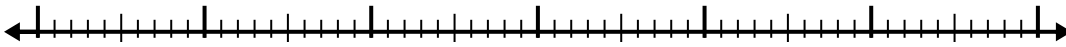
2)  $9.1 - 3.8 =$



3)  $4.2 - 1.1 =$



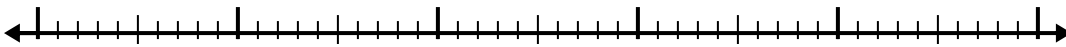
4)  $11.6 - 3.2 =$



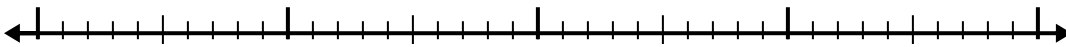
5)  $6.9 - 1.2 =$



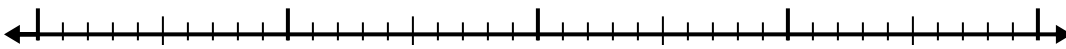
6)  $4.8 - 2.8 =$



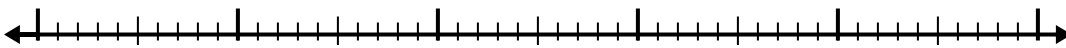
7)  $6 - 1.8 =$



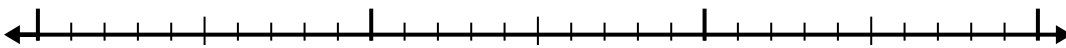
8)  $8 - 1.4 =$



9)  $8.2 - 3.9 =$



10)  $2.5 - 1.4 =$



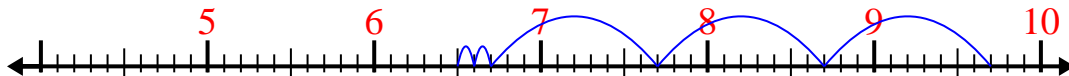
Answers

- 1. \_\_\_\_\_
- 2. \_\_\_\_\_
- 3. \_\_\_\_\_
- 4. \_\_\_\_\_
- 5. \_\_\_\_\_
- 6. \_\_\_\_\_
- 7. \_\_\_\_\_
- 8. \_\_\_\_\_
- 9. \_\_\_\_\_
- 10. \_\_\_\_\_

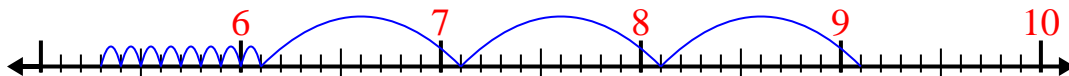


Use the number line to solve each problem.

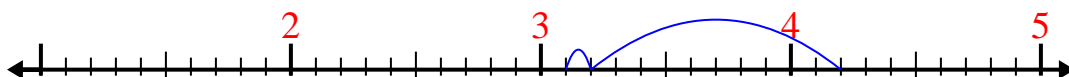
1)  $9.7 - 3.2 =$



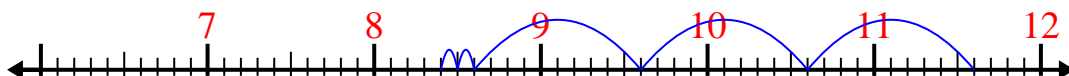
2)  $9.1 - 3.8 =$



3)  $4.2 - 1.1 =$



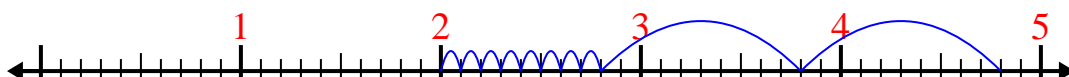
4)  $11.6 - 3.2 =$



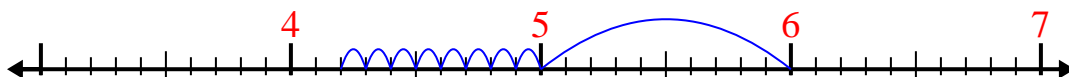
5)  $6.9 - 1.2 =$



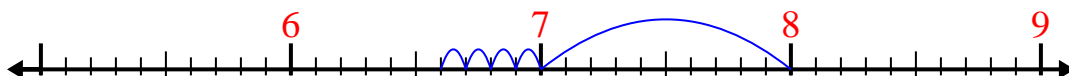
6)  $4.8 - 2.8 =$



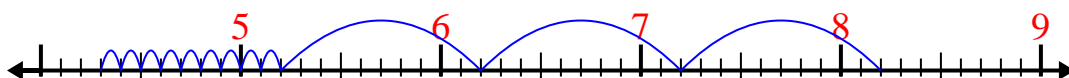
7)  $6 - 1.8 =$



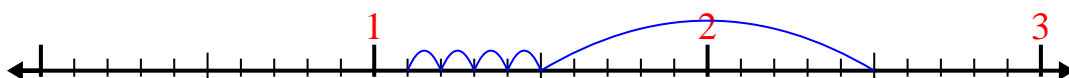
8)  $8 - 1.4 =$



9)  $8.2 - 3.9 =$



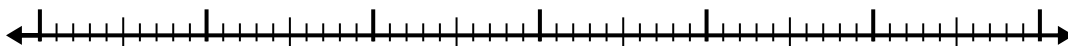
10)  $2.5 - 1.4 =$

Answers1. 6.52. 5.33. 3.14. 8.45. 5.76. 27. 4.28. 6.69. 4.310. 1.1

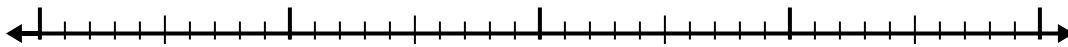


Use the number line to solve each problem.

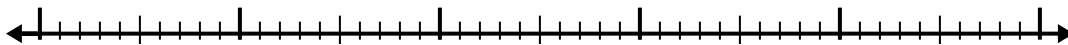
1)  $9.1 - 3.6 =$



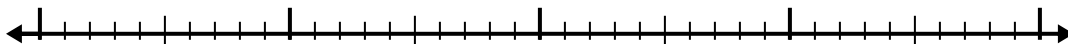
2)  $8.1 - 1.6 =$



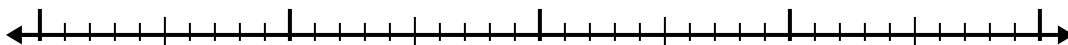
3)  $6.7 - 3.2 =$



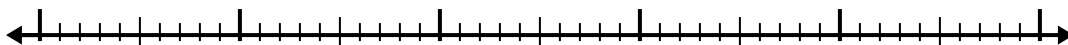
4)  $10.3 - 2.6 =$



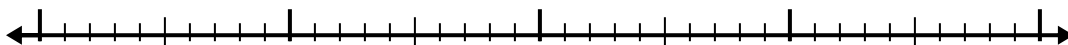
5)  $5.8 - 1.9 =$




6)  $8.2 - 2.3 =$




7)  $5.9 - 1.6 =$



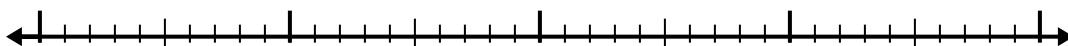
8)  $11.2 - 2.9 =$



9)  $10.5 - 3.5 =$



10)  $8 - 2.4 =$



Answers

1. \_\_\_\_\_

2. \_\_\_\_\_

3. \_\_\_\_\_

4. \_\_\_\_\_

5. \_\_\_\_\_

6. \_\_\_\_\_

7. \_\_\_\_\_

8. \_\_\_\_\_

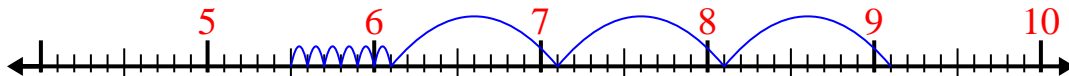
9. \_\_\_\_\_

10. \_\_\_\_\_

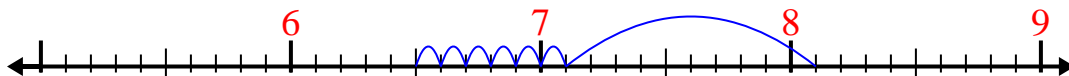


Use the number line to solve each problem.

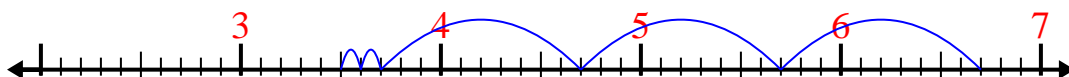
1)  $9.1 - 3.6 =$



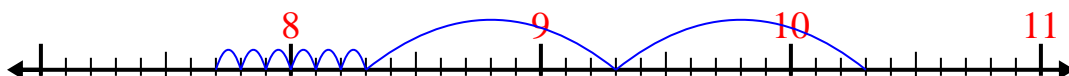
2)  $8.1 - 1.6 =$



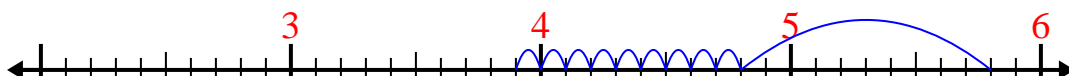
3)  $6.7 - 3.2 =$



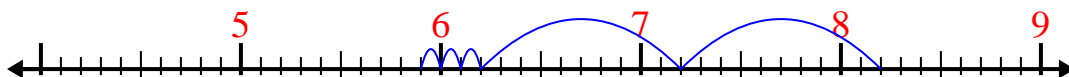
4)  $10.3 - 2.6 =$



5)  $5.8 - 1.9 =$



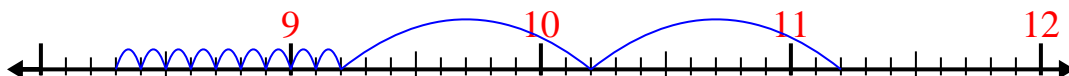
6)  $8.2 - 2.3 =$



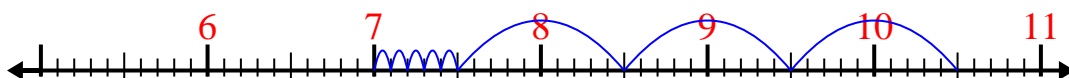
7)  $5.9 - 1.6 =$



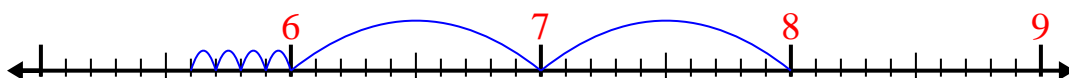
8)  $11.2 - 2.9 =$



9)  $10.5 - 3.5 =$



10)  $8 - 2.4 =$

Answers1. 5.52. 6.53. 3.54. 7.75. 3.96. 5.97. 4.38. 8.39. 710. 5.6