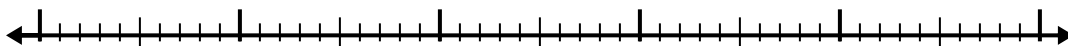


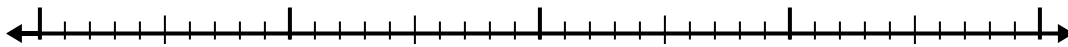


Use the number line to solve each problem.

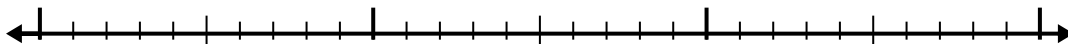
1) $7.3 - 2.8 =$



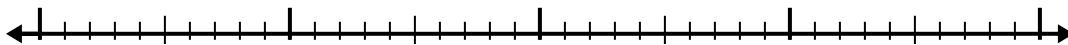
2) $2.5 - 1.2 =$



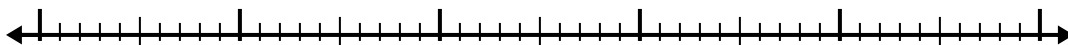
3) $2.3 - 1.1 =$



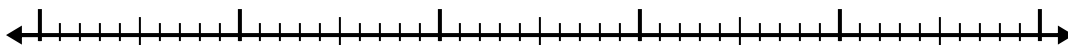
4) $9.1 - 2.4 =$



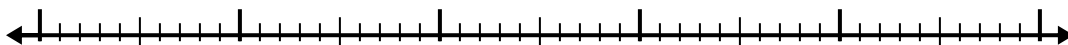
5) $5.8 - 3.3 =$



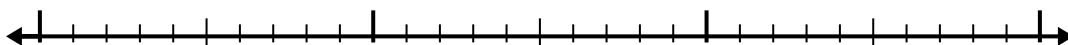
6) $9 - 2.2 =$



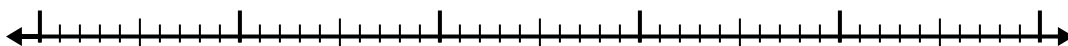
7) $5.5 - 2.4 =$



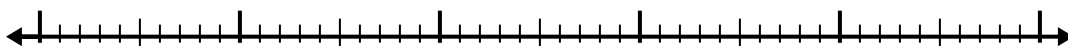
8) $4.7 - 1.9 =$



9) $9.5 - 3.8 =$



10) $11 - 3.7 =$



Answers

1. _____

2. _____

3. _____

4. _____

5. _____

6. _____

7. _____

8. _____

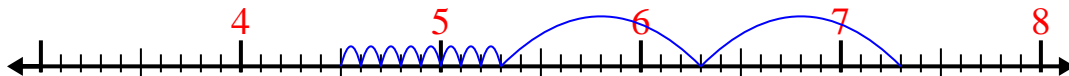
9. _____

10. _____



Use the number line to solve each problem.

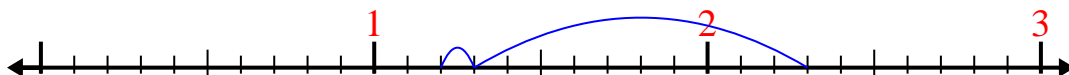
1) $7.3 - 2.8 =$



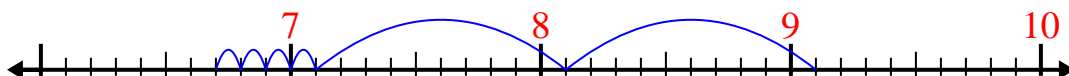
2) $2.5 - 1.2 =$



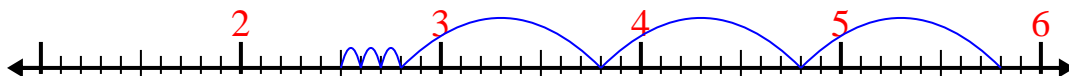
3) $2.3 - 1.1 =$



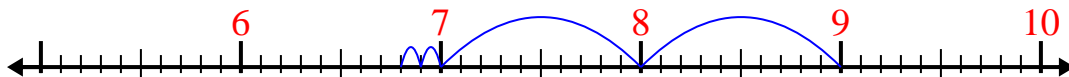
4) $9.1 - 2.4 =$



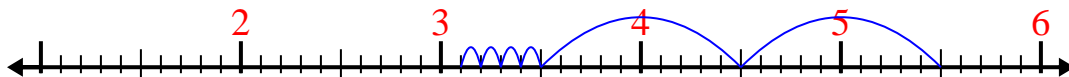
5) $5.8 - 3.3 =$



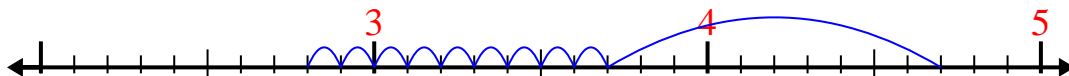
6) $9 - 2.2 =$



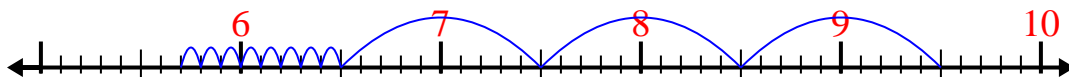
7) $5.5 - 2.4 =$



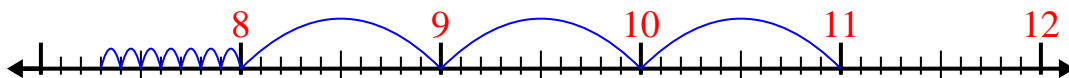
8) $4.7 - 1.9 =$



9) $9.5 - 3.8 =$



10) $11 - 3.7 =$

Answers1. 4.52. 1.33. 1.24. 6.75. 2.56. 6.87. 3.18. 2.89. 5.710. 7.3