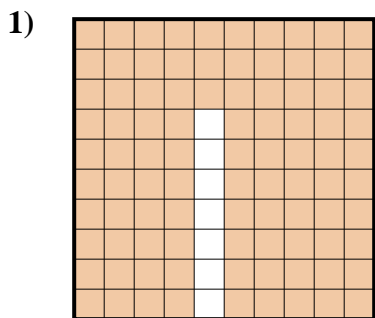


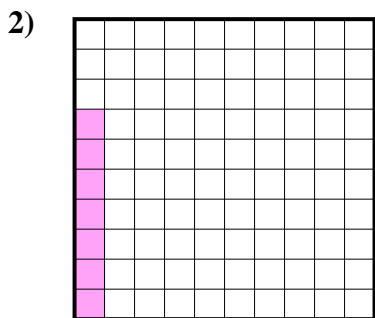


Determine which letter best represents the amount shaded of the whole.

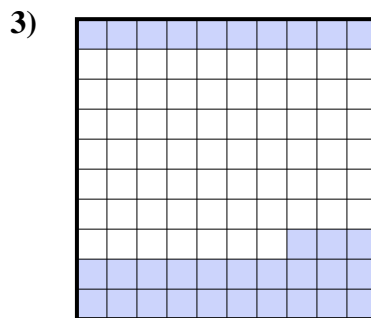
Answers



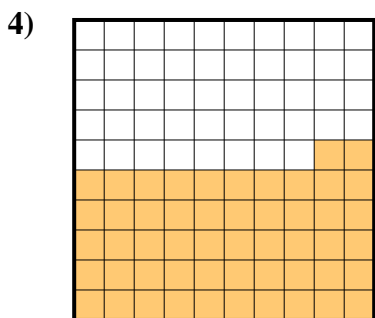
- A. 0.93
- B. 0.093
- C. 93
- D. 930.0



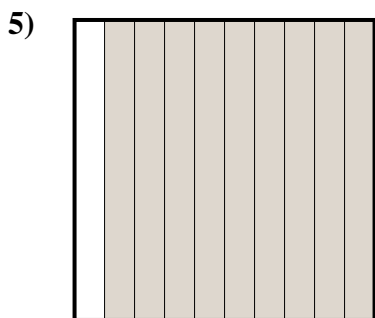
- A. 70.00
- B. 0.07
- C. 7
- D. 70.0



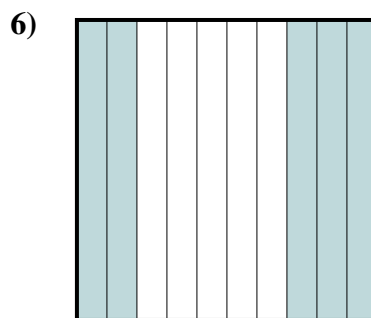
- A. 330.00
- B. 0.33
- C. 0.033
- D. 330.0



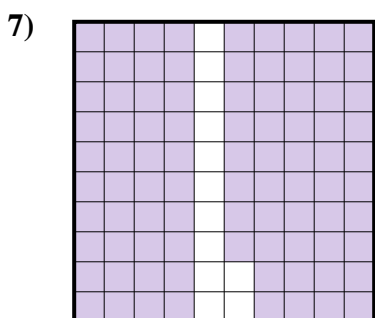
- A. 520.00
- B. 0.52
- C. 52
- D. 520.0




- A. 900.00
- B. 0.9
- C. 0.09
- D. 90




- A. 5
- B. 0.5
- C. 50
- D. 500.0



- A. 880.00
- B. 0.88
- C. 88
- D. 0.088



- A. 30
- B. 0.3
- C. 300.00
- D. 3



- A. 400.0
- B. 0.4
- C. 400.00
- D. 4

1. \_\_\_\_\_

2. \_\_\_\_\_

3. \_\_\_\_\_

4. \_\_\_\_\_

5. \_\_\_\_\_

6. \_\_\_\_\_

7. \_\_\_\_\_

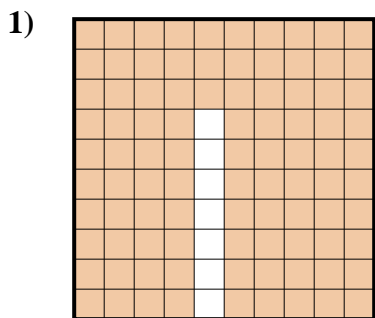
8. \_\_\_\_\_

9. \_\_\_\_\_

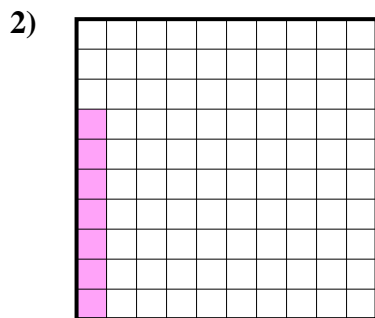


Determine which letter best represents the amount shaded of the whole.

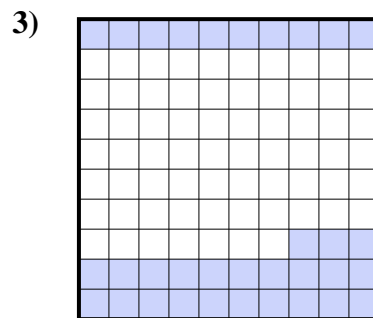
Answers



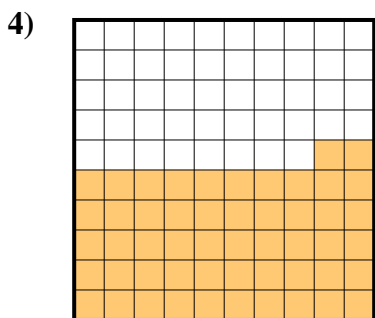
- A. 0.93
- B. 0.093
- C. 93
- D. 930.0



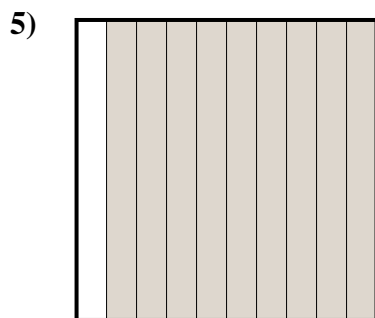
- A. 70.00
- B. 0.07
- C. 7
- D. 70.0



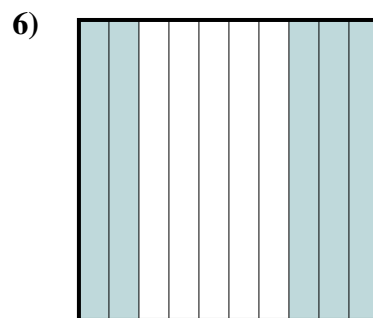
- A. 330.00
- B. 0.33
- C. 0.033
- D. 330.0



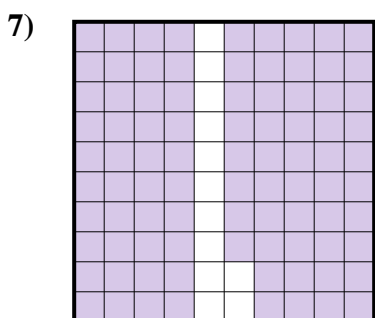
- A. 520.00
- B. 0.52
- C. 52
- D. 520.0




- A. 900.00
- B. 0.9
- C. 0.09
- D. 90




- A. 5
- B. 0.5
- C. 50
- D. 500.0



- A. 880.00
- B. 0.88
- C. 88
- D. 0.088



- A. 30
- B. 0.3
- C. 300.00
- D. 3



- A. 400.0
- B. 0.4
- C. 400.00
- D. 4

- 1.     **A**
- 2.     **B**
- 3.     **B**
- 4.     **B**
- 5.     **B**
- 6.     **B**
- 7.     **B**
- 8.     **B**
- 9.     **B**