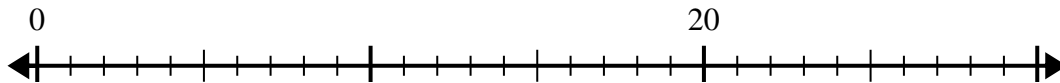




Use the number line to solve the division problem.

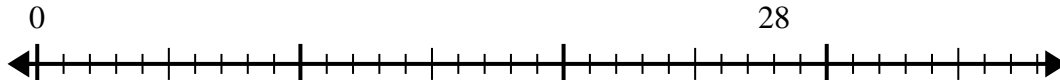
**Answers**

1)  $20 \div 5 =$



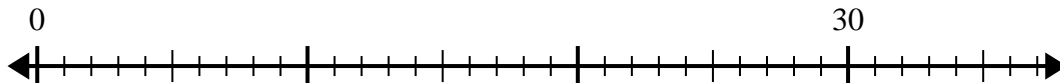
1. \_\_\_\_\_

2)  $28 \div 4 =$



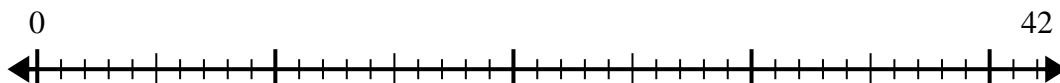
2. \_\_\_\_\_

3)  $30 \div 6 =$



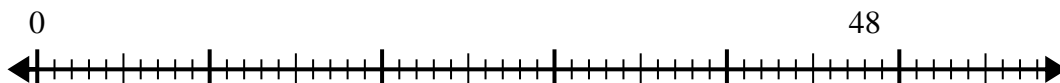
3. \_\_\_\_\_

4)  $42 \div 6 =$



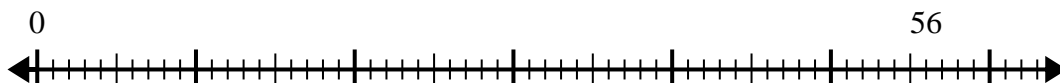
4. \_\_\_\_\_

5)  $48 \div 6 =$



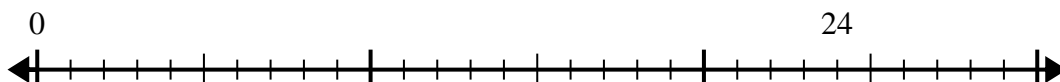
5. \_\_\_\_\_

6)  $56 \div 8 =$



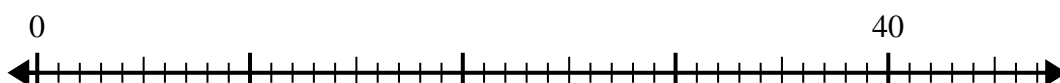
6. \_\_\_\_\_

7)  $24 \div 6 =$



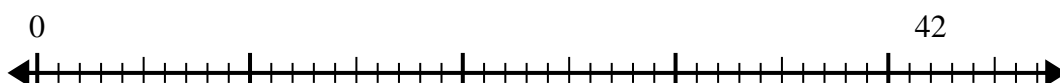
7. \_\_\_\_\_

8)  $40 \div 8 =$



8. \_\_\_\_\_

9)  $42 \div 7 =$



9. \_\_\_\_\_

10)  $32 \div 4 =$

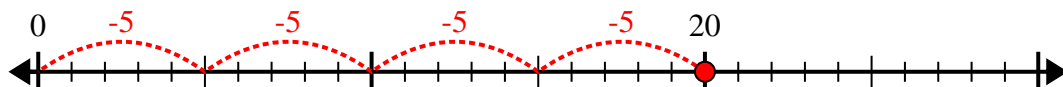


10. \_\_\_\_\_

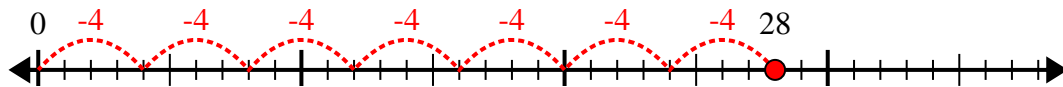


Use the number line to solve the division problem.

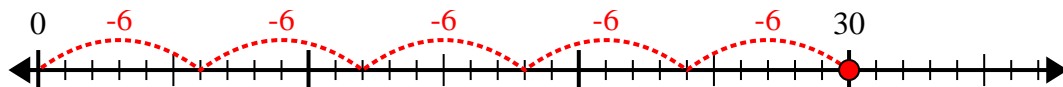
1)  $20 \div 5 =$



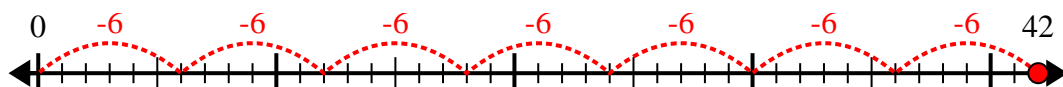
2)  $28 \div 4 =$



3)  $30 \div 6 =$



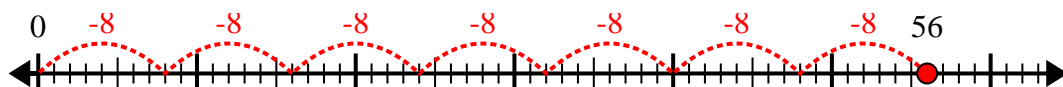
4)  $42 \div 6 =$



5)  $48 \div 6 =$



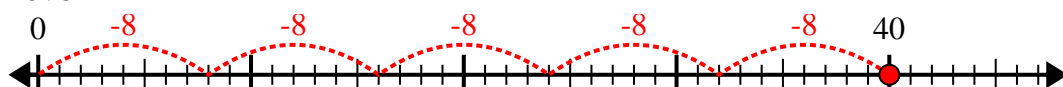
6)  $56 \div 8 =$



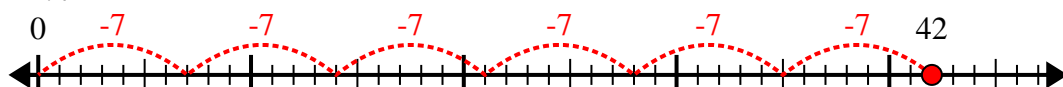
7)  $24 \div 6 =$



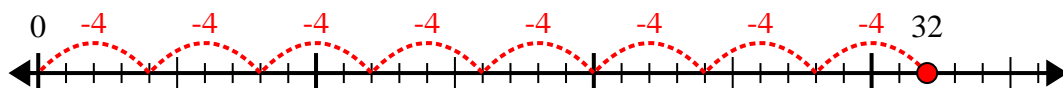
8)  $40 \div 8 =$



9)  $42 \div 7 =$



10)  $32 \div 4 =$



Answers

1. 4

2. 7

3. 5

4. 7

5. 8

6. 7

7. 4

8. 5

9. 6

10. 8