

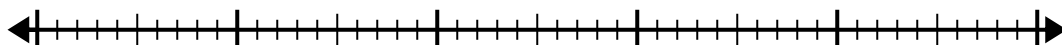


Use the number line to solve the division problem.

1) $40 \div 5 =$

0

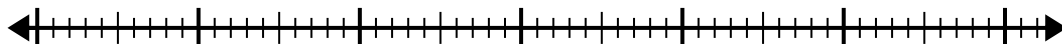
40



2) $56 \div 8 =$

0

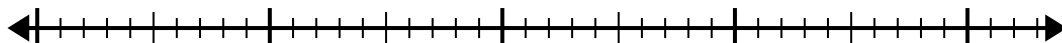
56



3) $35 \div 5 =$

0

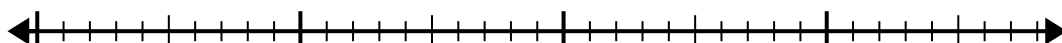
35



4) $32 \div 4 =$

0

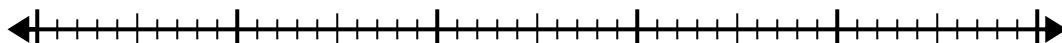
32



5) $48 \div 6 =$

0

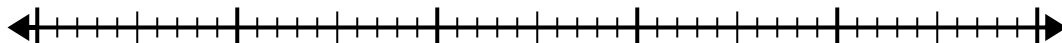
48



6) $48 \div 8 =$

0

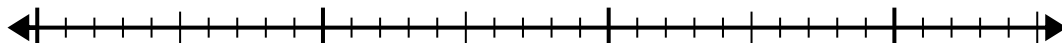
48



7) $30 \div 6 =$

0

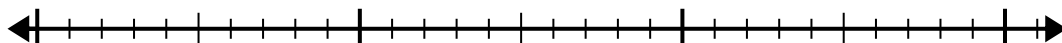
30



8) $30 \div 5 =$

0

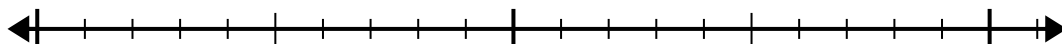
30



9) $20 \div 5 =$

0

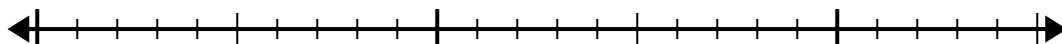
20



10) $24 \div 6 =$

0

24

**Answers**

1. _____

2. _____

3. _____

4. _____

5. _____

6. _____

7. _____

8. _____

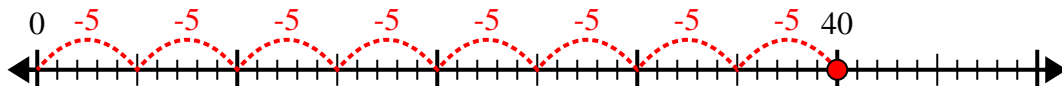
9. _____

10. _____

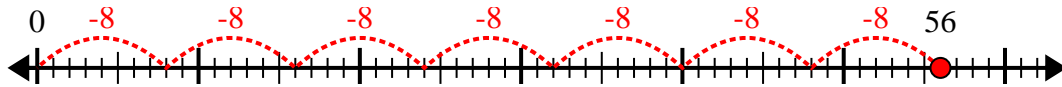


Use the number line to solve the division problem.

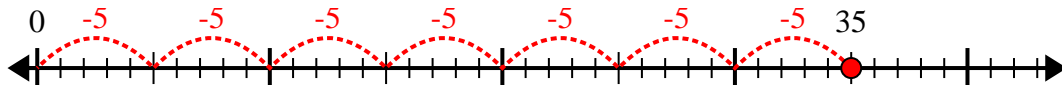
1) $40 \div 5 =$



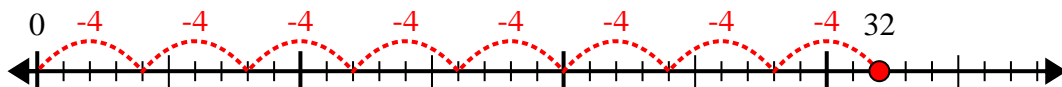
2) $56 \div 8 =$



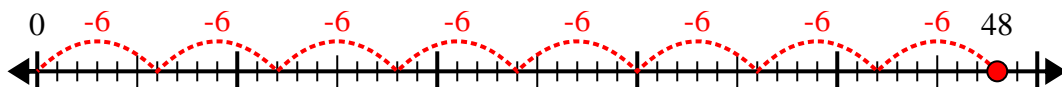
3) $35 \div 5 =$



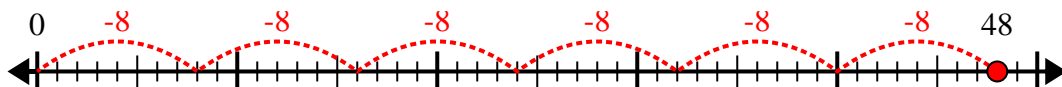
4) $32 \div 4 =$



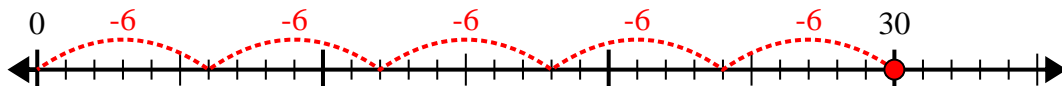
5) $48 \div 6 =$



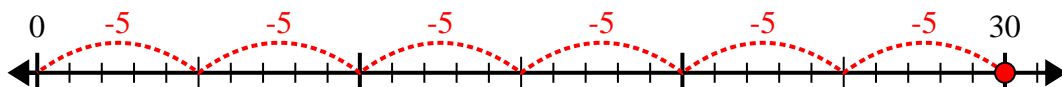
6) $48 \div 8 =$



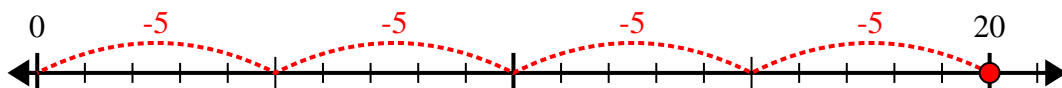
7) $30 \div 6 =$



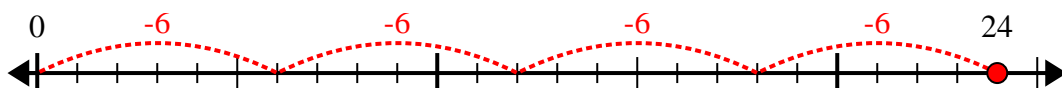
8) $30 \div 5 =$



9) $20 \div 5 =$



10) $24 \div 6 =$



Answers

1. 8

2. 7

3. 7

4. 8

5. 8

6. 6

7. 5

8. 6

9. 4

10. 4