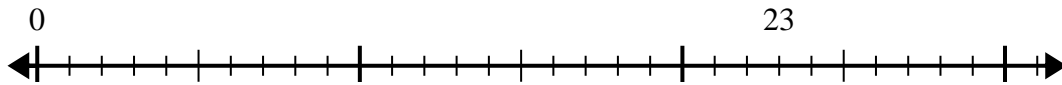


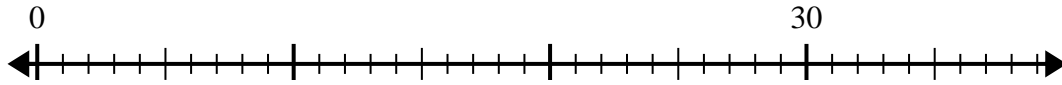


Use the number line to solve the division problem.

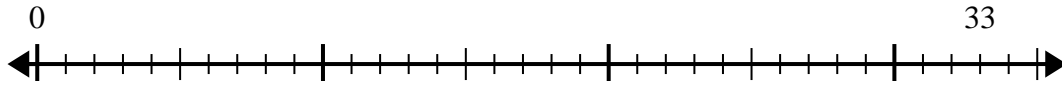
1) $23 \div 5 =$



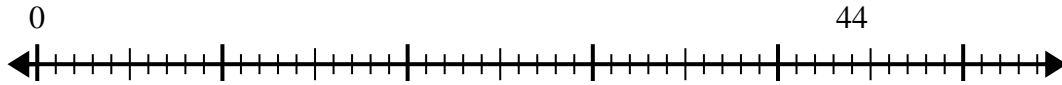
2) $30 \div 4 =$



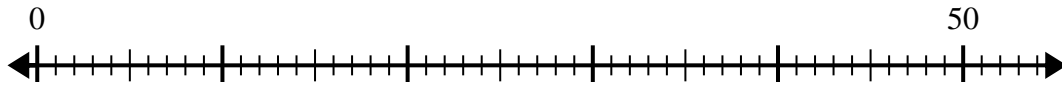
3) $33 \div 6 =$



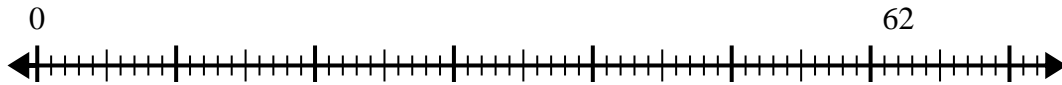
4) $44 \div 6 =$



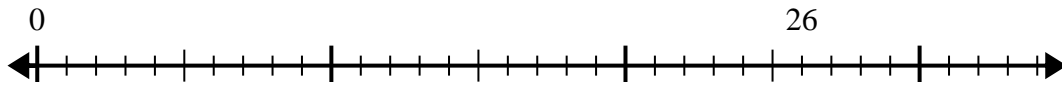
5) $50 \div 6 =$



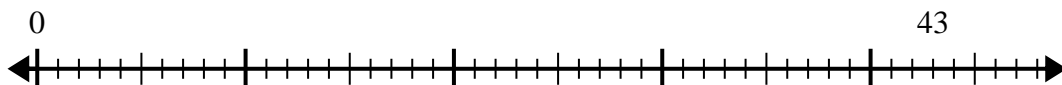
6) $62 \div 8 =$



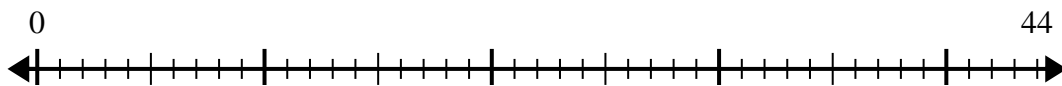
7) $26 \div 6 =$



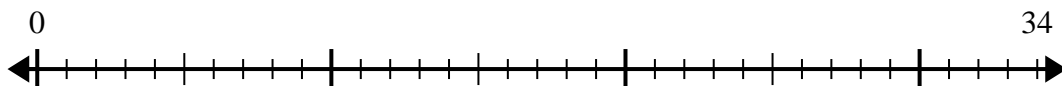
8) $43 \div 8 =$



9) $44 \div 7 =$



10) $34 \div 4 =$



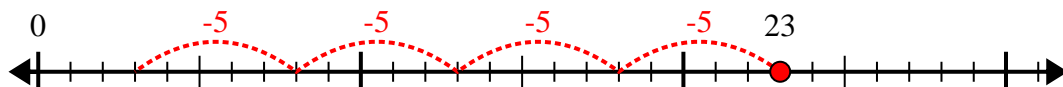
Answers

- 1. _____
- 2. _____
- 3. _____
- 4. _____
- 5. _____
- 6. _____
- 7. _____
- 8. _____
- 9. _____
- 10. _____

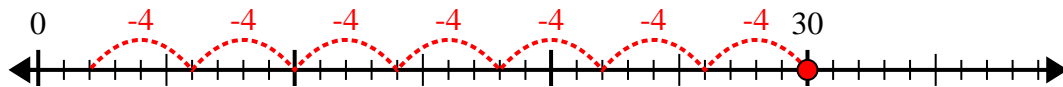


Use the number line to solve the division problem.

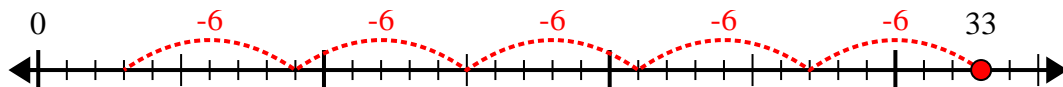
1) $23 \div 5 =$



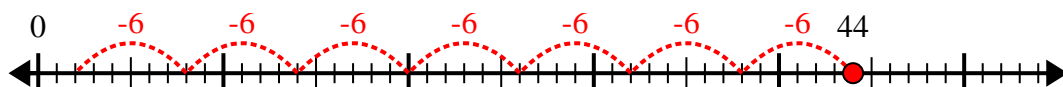
2) $30 \div 4 =$



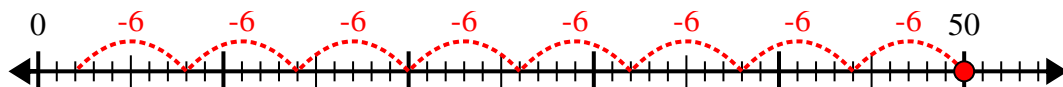
3) $33 \div 6 =$



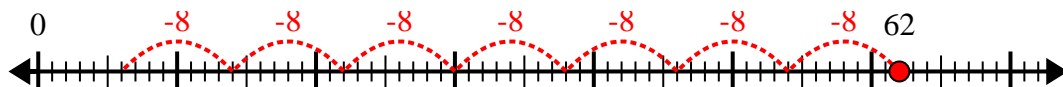
4) $44 \div 6 =$



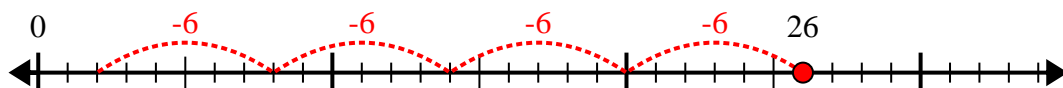
5) $50 \div 6 =$



6) $62 \div 8 =$



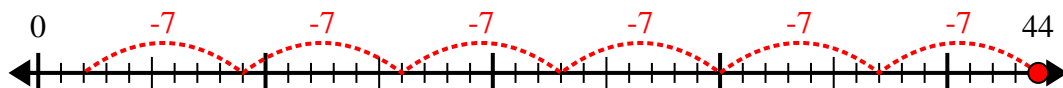
7) $26 \div 6 =$



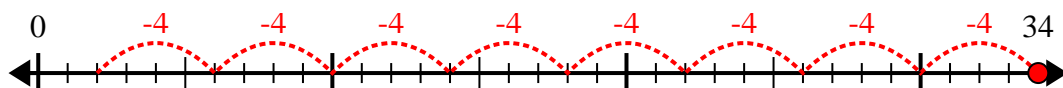
8) $43 \div 8 =$



9) $44 \div 7 =$



10) $34 \div 4 =$



Answers

1. 4r3

2. 7r2

3. 5r3

4. 7r2

5. 8r2

6. 7r6

7. 4r2

8. 5r3

9. 6r2

10. 8r2