

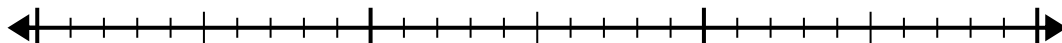


Use the number line to solve the division problem.

1)  $27 \div 4 =$

0

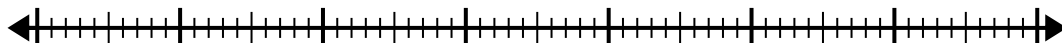
27



2)  $62 \div 8 =$

0

62



3)  $36 \div 5 =$

0

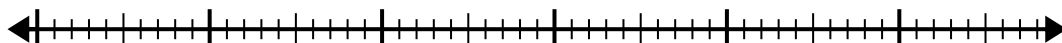
36



4)  $50 \div 8 =$

0

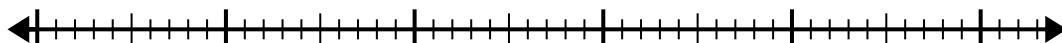
50



5)  $43 \div 6 =$

0

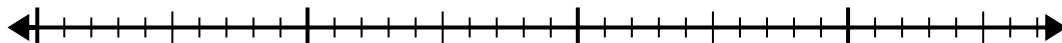
43



6)  $29 \div 6 =$

0

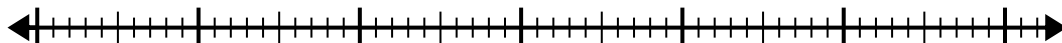
29



7)  $52 \div 6 =$

0

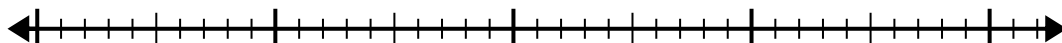
52



8)  $33 \div 5 =$

0

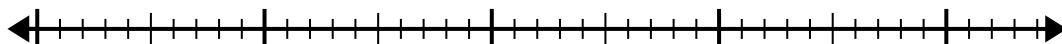
33



9)  $34 \div 7 =$

0

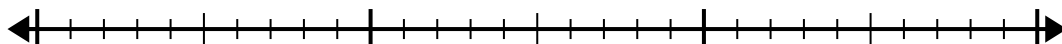
34



10)  $29 \div 4 =$

0

29



Answers

1. \_\_\_\_\_

2. \_\_\_\_\_

3. \_\_\_\_\_

4. \_\_\_\_\_

5. \_\_\_\_\_

6. \_\_\_\_\_

7. \_\_\_\_\_

8. \_\_\_\_\_

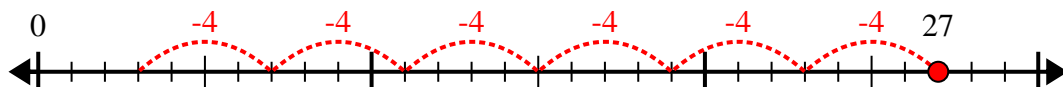
9. \_\_\_\_\_

10. \_\_\_\_\_

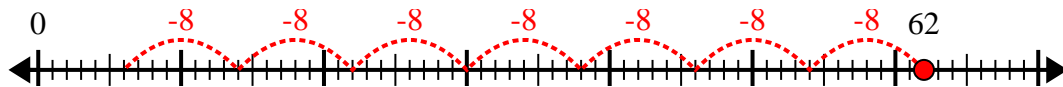


Use the number line to solve the division problem.

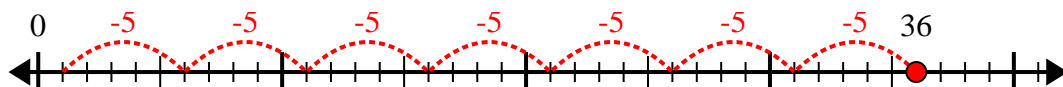
1)  $27 \div 4 =$



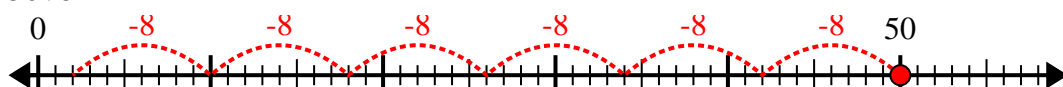
2)  $62 \div 8 =$



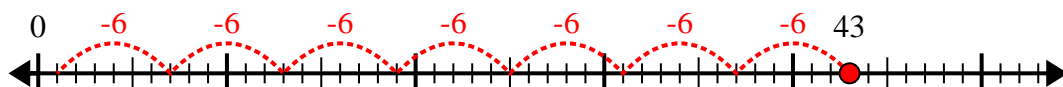
3)  $36 \div 5 =$



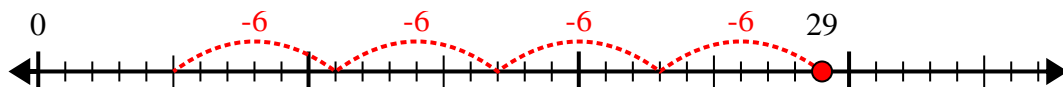
4)  $50 \div 8 =$



5)  $43 \div 6 =$



6)  $29 \div 6 =$



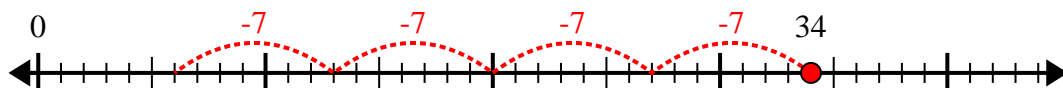
7)  $52 \div 6 =$



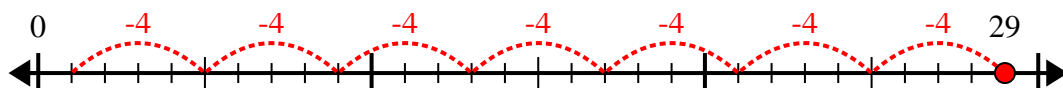
8)  $33 \div 5 =$



9)  $34 \div 7 =$



10)  $29 \div 4 =$



Answers

1. 6r3

2. 7r6

3. 7r1

4. 6r2

5. 7r1

6. 4r5

7. 8r4

8. 6r3

9. 4r6

10. 7r1