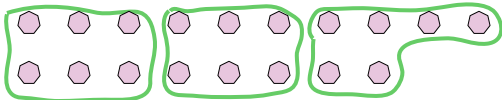
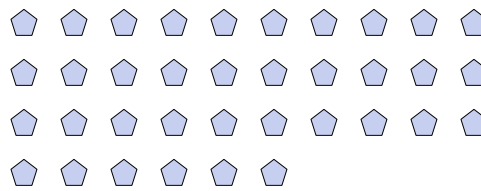
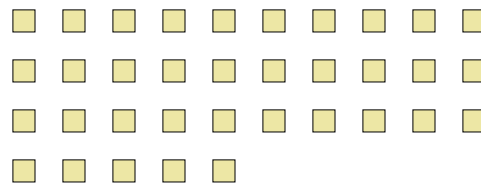
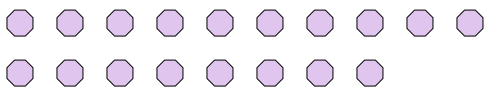

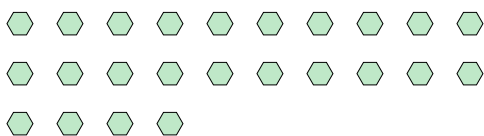






Use the shapes provided to answer the questions.

Answers**Ex)** How many groups of 6 can you make with the 18 shapes below?**1)** How many groups of 3 can you make with the 36 shapes below?**2)** How many groups of 4 can you make with the 16 shapes below?**3)** How many groups of 5 can you make with the 35 shapes below?**4)** How many groups of 3 can you make with the 6 shapes below?**5)** How many groups of 4 can you make with the 28 shapes below?**6)** How many groups of 6 can you make with the 18 shapes below?**7)** How many groups of 9 can you make with the 27 shapes below?**8)** How many groups of 8 can you make with the 24 shapes below?**9)** How many groups of 3 can you make with the 33 shapes below?**10)** How many groups of 7 can you make with the 14 shapes below?**11)** How many groups of 7 can you make with the 35 shapes below?Ex. 31. 122. 43. 74. 25. 76. 37. 38. 39. 1110. 211. 5