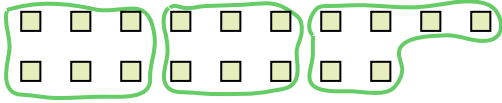





Use the shapes provided to answer the questions.

Ex) How many groups of 6 can you make with the 18 shapes below?




1) How many groups of 3 can you make with the 30 shapes below?




Answers

Ex. 3

2) How many groups of 4 can you make with the 28 shapes below?



3) How many groups of 2 can you make with the 40 shapes below?



1. _____

2. _____

3. _____

4. _____

5. _____

6. _____

7. _____

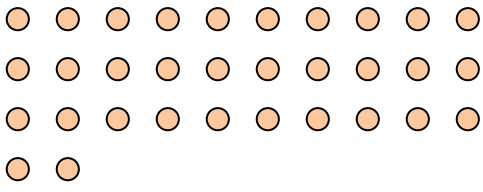
8. _____

9. _____

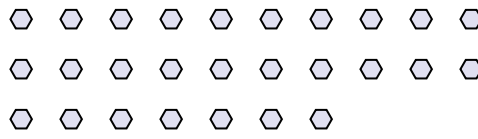
10. _____

11. _____

4) How many groups of 4 can you make with the 32 shapes below?




5) How many groups of 9 can you make with the 27 shapes below?




6) How many groups of 6 can you make with the 36 shapes below?



7) How many groups of 3 can you make with the 36 shapes below?




8) How many groups of 6 can you make with the 36 shapes below?



9) How many groups of 4 can you make with the 36 shapes below?



10) How many groups of 2 can you make with the 38 shapes below?



11) How many groups of 7 can you make with the 14 shapes below?



