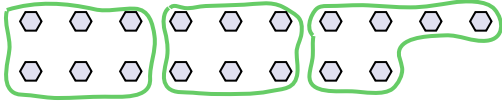


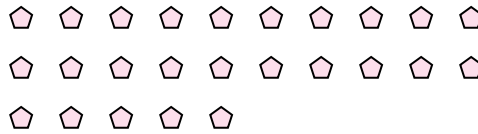


Use the shapes provided to answer the questions.

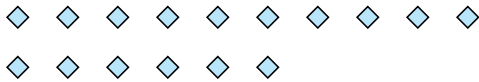
- Ex) How many groups of 6 can you make with the 18 shapes below?



- 1) How many groups of 5 can you make with the 25 shapes below?




- 2) How many groups of 4 can you make with the 16 shapes below?




- 3) How many groups of 2 can you make with the 14 shapes below?



- 4) How many groups of 4 can you make with the 28 shapes below?



- 5) How many groups of 9 can you make with the 36 shapes below?



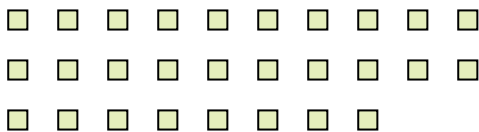
- 6) How many groups of 9 can you make with the 27 shapes below?




- 7) How many groups of 6 can you make with the 30 shapes below?



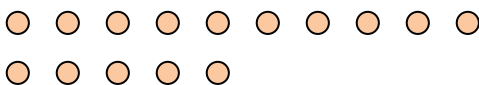
- 8) How many groups of 2 can you make with the 28 shapes below?




- 9) How many groups of 9 can you make with the 27 shapes below?



- 10) How many groups of 5 can you make with the 15 shapes below?



- 11) How many groups of 4 can you make with the 36 shapes below?

**Answers**Ex. 31. 52. 43. 74. 75. 46. 37. 58. 149. 310. 311. 9