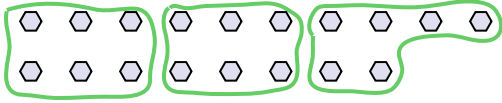




Use the shapes provided to answer the questions.

Ex) How many groups of 6 can you make with the 18 shapes below?



1) How many groups of 3 can you make with the 27 shapes below?



Answers

Ex. 3

1. 9

2. 11

3. 3

4. 2

5. 3

6. 10

7. 4

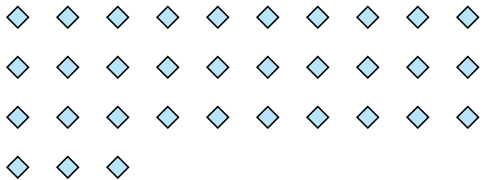
8. 4

9. 4


10. 3

11. 3


2) How many groups of 3 can you make with the 33 shapes below?



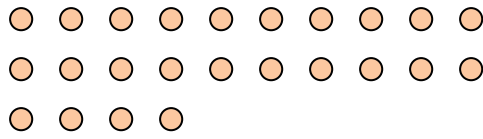
3) How many groups of 7 can you make with the 21 shapes below?




4) How many groups of 7 can you make with the 14 shapes below?




5) How many groups of 8 can you make with the 24 shapes below?




6) How many groups of 4 can you make with the 40 shapes below?



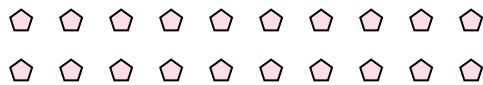
7) How many groups of 8 can you make with the 32 shapes below?



8) How many groups of 7 can you make with the 28 shapes below?



9) How many groups of 5 can you make with the 20 shapes below?



10) How many groups of 4 can you make with the 12 shapes below?



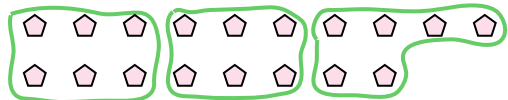
11) How many groups of 7 can you make with the 21 shapes below?



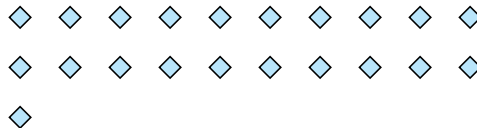


Use the shapes provided to answer the questions.

Ex) How many groups of 6 can you make with the 18 shapes below?



1) How many groups of 7 can you make with the 21 shapes below?



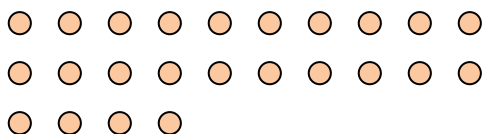
2) How many groups of 3 can you make with the 6 shapes below?



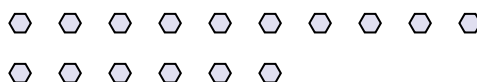
3) How many groups of 6 can you make with the 18 shapes below?



4) How many groups of 8 can you make with the 24 shapes below?




5) How many groups of 8 can you make with the 16 shapes below?



6) How many groups of 4 can you make with the 16 shapes below?



7) How many groups of 7 can you make with the 35 shapes below?



8) How many groups of 3 can you make with the 15 shapes below?



9) How many groups of 2 can you make with the 18 shapes below?



10) How many groups of 4 can you make with the 8 shapes below?



11) How many groups of 7 can you make with the 14 shapes below?



Answers

Ex. 3

1. 3

2. 2

3. 3

4. 3

5. 2

6. 4

7. 5

8. 5

9. 9

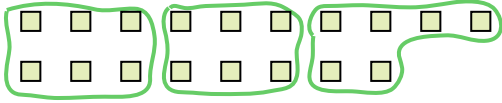
10. 2

11. 2




Use the shapes provided to answer the questions.

Ex) How many groups of 6 can you make with the 18 shapes below?




1) How many groups of 3 can you make with the 30 shapes below?




Answers

Ex. 3

2) How many groups of 4 can you make with the 28 shapes below?



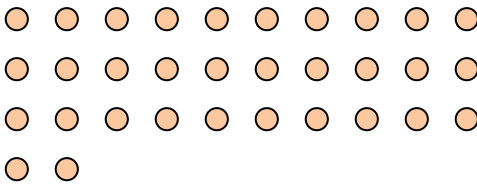
3) How many groups of 2 can you make with the 40 shapes below?



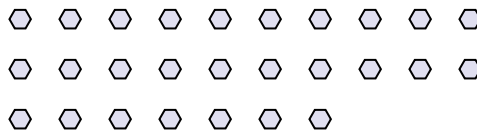
1. _____

2. _____

4) How many groups of 4 can you make with the 32 shapes below?



5) How many groups of 9 can you make with the 27 shapes below?



3. _____

4. _____

5. _____

6. _____

7. _____

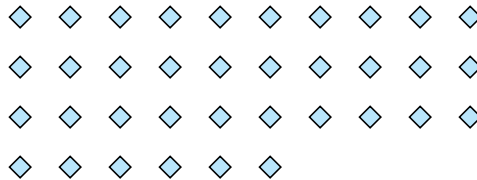
8. _____

9. _____

6) How many groups of 6 can you make with the 36 shapes below?




7) How many groups of 3 can you make with the 36 shapes below?



10. _____

11. _____

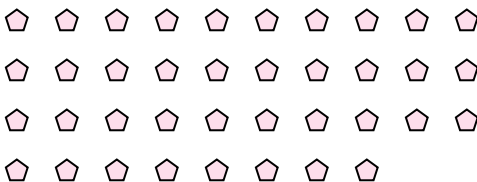
8) How many groups of 6 can you make with the 36 shapes below?



9) How many groups of 4 can you make with the 36 shapes below?



10) How many groups of 2 can you make with the 38 shapes below?



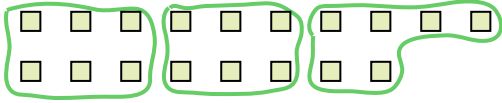
11) How many groups of 7 can you make with the 14 shapes below?






Use the shapes provided to answer the questions.

Ex) How many groups of 6 can you make with the 18 shapes below?




1) How many groups of 3 can you make with the 30 shapes below?




Answers

Ex. 3

2) How many groups of 4 can you make with the 28 shapes below?



3) How many groups of 2 can you make with the 40 shapes below?



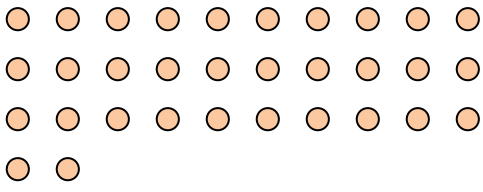
1. 10

2. 7

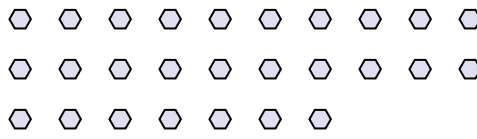
3. 20

4. 8

4) How many groups of 4 can you make with the 32 shapes below?



5) How many groups of 9 can you make with the 27 shapes below?



5. 3

6. 6


7. 12

8. 6

6) How many groups of 6 can you make with the 36 shapes below?



7) How many groups of 3 can you make with the 36 shapes below?




9. 9

10. 19

11. 2


8) How many groups of 6 can you make with the 36 shapes below?



9) How many groups of 4 can you make with the 36 shapes below?



10) How many groups of 2 can you make with the 38 shapes below?




11) How many groups of 7 can you make with the 14 shapes below?





Use the shapes provided to answer the questions.

Ex) How many groups of 6 can you make with the 18 shapes below?



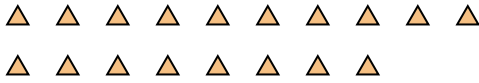
1) How many groups of 3 can you make with the 9 shapes below?



Answers

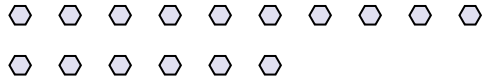
Ex. 3

2) How many groups of 6 can you make with the 18 shapes below?



1. 3

3) How many groups of 8 can you make with the 16 shapes below?



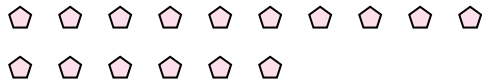
2. 3

4) How many groups of 4 can you make with the 8 shapes below?



3. 2

5) How many groups of 8 can you make with the 16 shapes below?



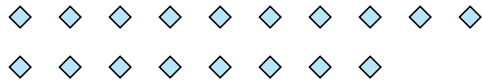
4. 2

6) How many groups of 2 can you make with the 24 shapes below?




5. 2

7) How many groups of 2 can you make with the 18 shapes below?



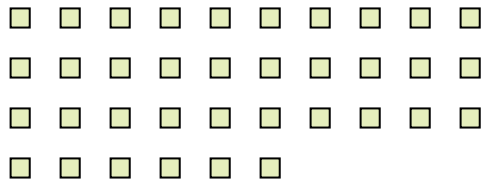
6. 12

8) How many groups of 9 can you make with the 27 shapes below?



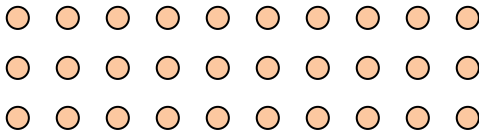
7. 9

9) How many groups of 9 can you make with the 36 shapes below?



8. 3

10) How many groups of 6 can you make with the 30 shapes below?



9. 4

11) How many groups of 3 can you make with the 39 shapes below?



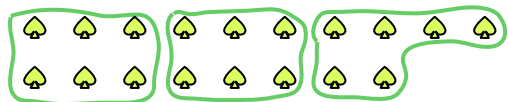
10. 5

11. 13



Use the shapes provided to answer the questions.

Ex) How many groups of 6 can you make with the 18 shapes below?



1) How many groups of 5 can you make with the 40 shapes below?




2) How many groups of 7 can you make with the 21 shapes below?



3) How many groups of 6 can you make with the 12 shapes below?



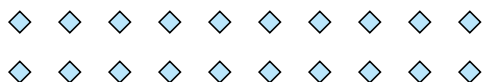
4) How many groups of 3 can you make with the 24 shapes below?



5) How many groups of 2 can you make with the 4 shapes below?




6) How many groups of 5 can you make with the 20 shapes below?



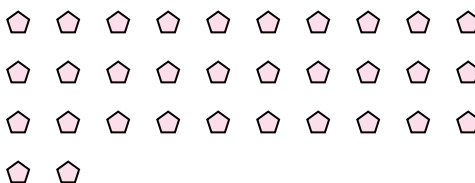
7) How many groups of 9 can you make with the 18 shapes below?



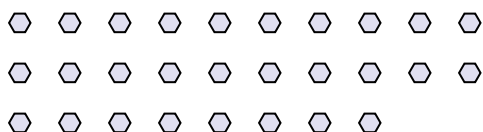
8) How many groups of 9 can you make with the 36 shapes below?



9) How many groups of 2 can you make with the 32 shapes below?



10) How many groups of 2 can you make with the 28 shapes below?



11) How many groups of 8 can you make with the 24 shapes below?



Answers

Ex. 3

1. 8

2. 3

3. 2

4. 8

5. 2

6. 4

7. 2

8. 4

9. 16


10. 14

11. 3



Use the shapes provided to answer the questions.

Ex) How many groups of 6 can you make with the 18 shapes below?



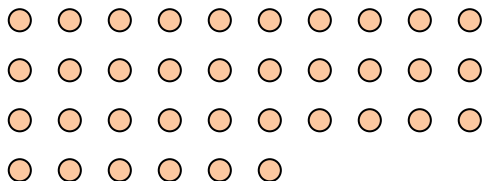
1) How many groups of 2 can you make with the 26 shapes below?




Answers

Ex. 3

2) How many groups of 9 can you make with the 36 shapes below?

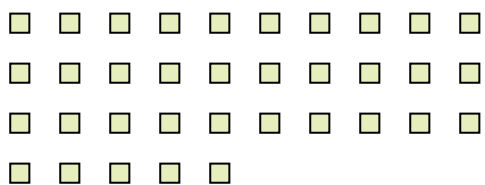


3) How many groups of 3 can you make with the 24 shapes below?

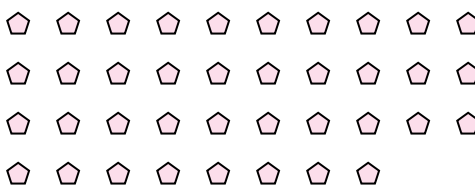


1. 13

4) How many groups of 7 can you make with the 35 shapes below?

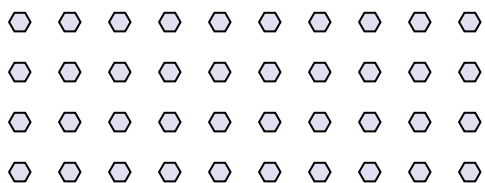


5) How many groups of 2 can you make with the 38 shapes below?




2. 4

6) How many groups of 8 can you make with the 40 shapes below?




7) How many groups of 9 can you make with the 36 shapes below?



3. 8

8) How many groups of 4 can you make with the 40 shapes below?



9) How many groups of 7 can you make with the 35 shapes below?




4. 5

10) How many groups of 5 can you make with the 10 shapes below?



11) How many groups of 9 can you make with the 27 shapes below?



5. 19

6. 5

7. 4

8. 10

9. 5

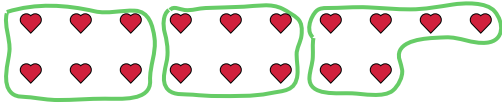
10. 2

11. 3

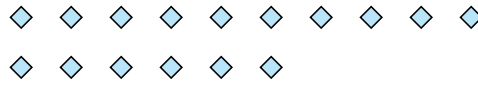


Use the shapes provided to answer the questions.

Ex) How many groups of 6 can you make with the 18 shapes below?




1) How many groups of 8 can you make with the 16 shapes below?



Answers

Ex. 3

2) How many groups of 6 can you make with the 36 shapes below?



3) How many groups of 5 can you make with the 25 shapes below?



1. _____

2. _____

3. _____

4. _____

5. _____

6. _____

7. _____

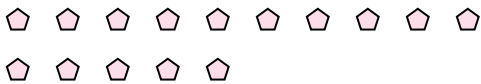
8. _____

9. _____

10. _____

11. _____

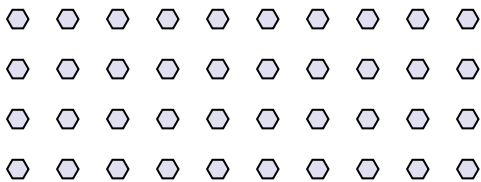
4) How many groups of 5 can you make with the 15 shapes below?



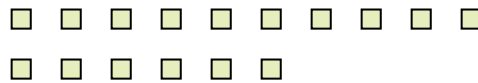
5) How many groups of 3 can you make with the 6 shapes below?




6) How many groups of 4 can you make with the 40 shapes below?




7) How many groups of 2 can you make with the 16 shapes below?



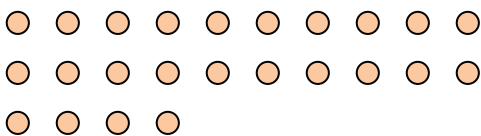
8) How many groups of 6 can you make with the 30 shapes below?




9) How many groups of 7 can you make with the 21 shapes below?



10) How many groups of 8 can you make with the 24 shapes below?




11) How many groups of 2 can you make with the 22 shapes below?



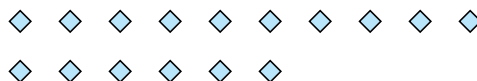


Use the shapes provided to answer the questions.


Ex) How many groups of 6 can you make with the 18 shapes below?



1) How many groups of 8 can you make with the 16 shapes below?



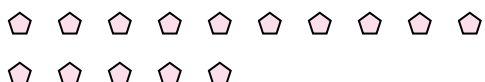
2) How many groups of 6 can you make with the 36 shapes below?



3) How many groups of 5 can you make with the 25 shapes below?




4) How many groups of 5 can you make with the 15 shapes below?



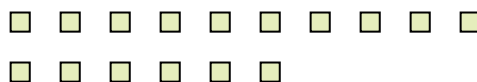
5) How many groups of 3 can you make with the 6 shapes below?




6) How many groups of 4 can you make with the 40 shapes below?




7) How many groups of 2 can you make with the 16 shapes below?



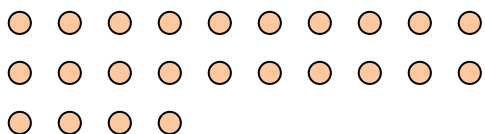
8) How many groups of 6 can you make with the 30 shapes below?




9) How many groups of 7 can you make with the 21 shapes below?



10) How many groups of 8 can you make with the 24 shapes below?



11) How many groups of 2 can you make with the 22 shapes below?



Answers

Ex. 3

1. 2

2. 6

3. 5

4. 3

5. 2

6. 10

7. 8

8. 5

9. 3

10. 3

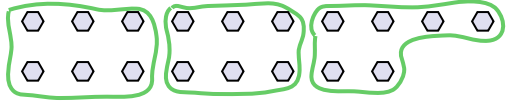
11. 11



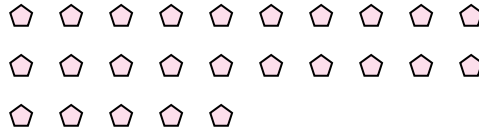
Use the shapes provided to answer the questions.

Answers

Ex) How many groups of 6 can you make with the 18 shapes below?

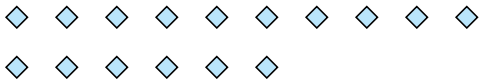


1) How many groups of 5 can you make with the 25 shapes below?



Ex. 3

2) How many groups of 4 can you make with the 16 shapes below?




3) How many groups of 2 can you make with the 14 shapes below?




1. _____

2. _____

4) How many groups of 4 can you make with the 28 shapes below?



5) How many groups of 9 can you make with the 36 shapes below?



3. _____

4. _____

5. _____

6. _____

7. _____

8. _____

9. _____

6) How many groups of 9 can you make with the 27 shapes below?



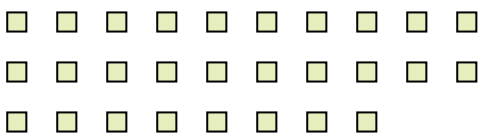
7) How many groups of 6 can you make with the 30 shapes below?




10. _____

11. _____

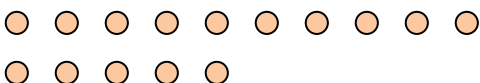
8) How many groups of 2 can you make with the 28 shapes below?




9) How many groups of 9 can you make with the 27 shapes below?



10) How many groups of 5 can you make with the 15 shapes below?



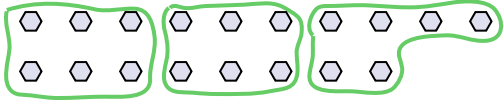
11) How many groups of 4 can you make with the 36 shapes below?



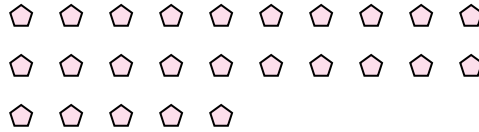


Use the shapes provided to answer the questions.

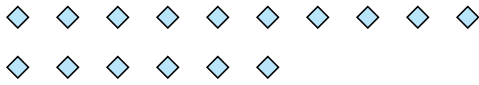
Ex) How many groups of 6 can you make with the 18 shapes below?



1) How many groups of 5 can you make with the 25 shapes below?




2) How many groups of 4 can you make with the 16 shapes below?




3) How many groups of 2 can you make with the 14 shapes below?



4) How many groups of 4 can you make with the 28 shapes below?



5) How many groups of 9 can you make with the 36 shapes below?



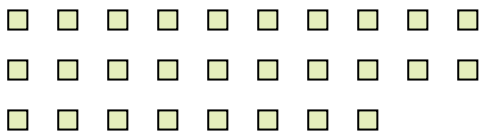
6) How many groups of 9 can you make with the 27 shapes below?




7) How many groups of 6 can you make with the 30 shapes below?



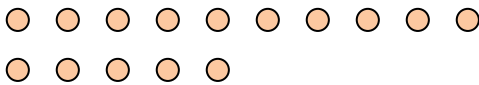
8) How many groups of 2 can you make with the 28 shapes below?




9) How many groups of 9 can you make with the 27 shapes below?



10) How many groups of 5 can you make with the 15 shapes below?



11) How many groups of 4 can you make with the 36 shapes below?



Answers

Ex. 3

1. 5

2. 4

3. 7

4. 7

5. 4

6. 3

7. 5

8. 14

9. 3

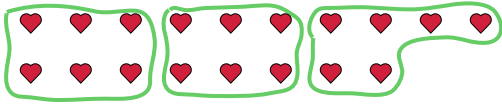
10. 3

11. 9

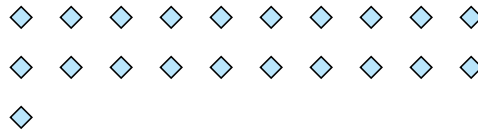


Use the shapes provided to answer the questions.

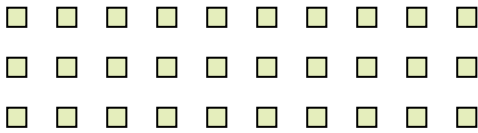
Ex) How many groups of 6 can you make with the 18 shapes below?



1) How many groups of 7 can you make with the 21 shapes below?




2) How many groups of 6 can you make with the 30 shapes below?



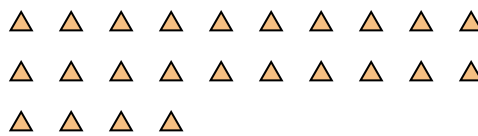
3) How many groups of 4 can you make with the 28 shapes below?



4) How many groups of 9 can you make with the 27 shapes below?



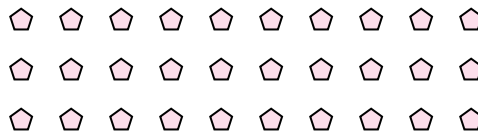
5) How many groups of 6 can you make with the 24 shapes below?



6) How many groups of 3 can you make with the 30 shapes below?



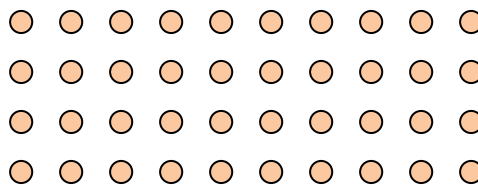
7) How many groups of 5 can you make with the 30 shapes below?



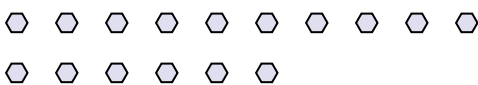
8) How many groups of 7 can you make with the 14 shapes below?




9) How many groups of 5 can you make with the 40 shapes below?



10) How many groups of 2 can you make with the 16 shapes below?



11) How many groups of 5 can you make with the 30 shapes below?



Answers

Ex. 3

1. 3

2. 5

3. 7

4. 3

5. 4

6. 10

7. 6

8. 2

9. 8

10. 8

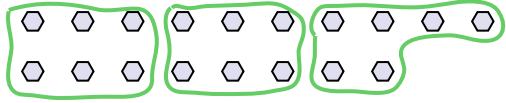
11. 6



Use the shapes provided to answer the questions.

Answers

Ex) How many groups of 6 can you make with the 18 shapes below?

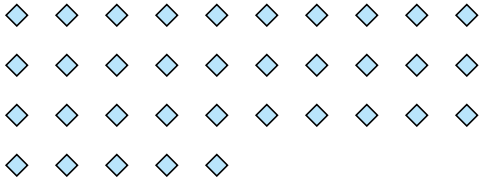


1) How many groups of 6 can you make with the 12 shapes below?



Ex. 3

2) How many groups of 7 can you make with the 35 shapes below?




3) How many groups of 4 can you make with the 8 shapes below?



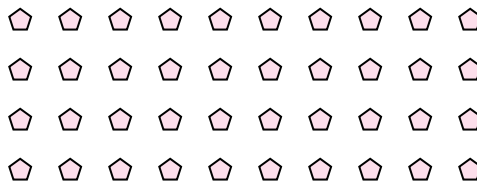
1. _____

2. _____

4) How many groups of 8 can you make with the 24 shapes below?



5) How many groups of 4 can you make with the 40 shapes below?



3. _____


4. _____

5. _____

6. _____

7. _____

6) How many groups of 6 can you make with the 36 shapes below?



7) How many groups of 5 can you make with the 10 shapes below?




8. _____

9. _____

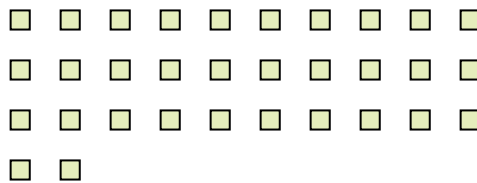
10. _____

11. _____

8) How many groups of 9 can you make with the 27 shapes below?



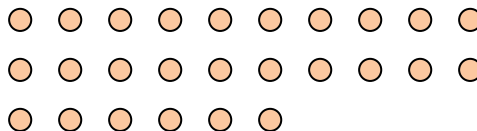
9) How many groups of 8 can you make with the 32 shapes below?



10) How many groups of 6 can you make with the 18 shapes below?



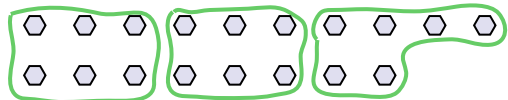
11) How many groups of 2 can you make with the 26 shapes below?





Use the shapes provided to answer the questions.

Ex) How many groups of 6 can you make with the 18 shapes below?




1) How many groups of 6 can you make with the 12 shapes below?



Answers

Ex. 3

2) How many groups of 7 can you make with the 35 shapes below?




3) How many groups of 4 can you make with the 8 shapes below?

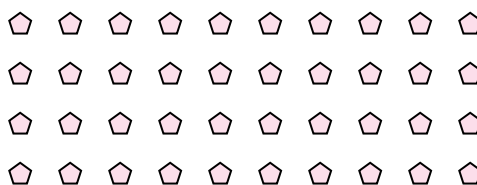


1. 2

4) How many groups of 8 can you make with the 24 shapes below?




5) How many groups of 4 can you make with the 40 shapes below?



2. 5

6) How many groups of 6 can you make with the 36 shapes below?




7) How many groups of 5 can you make with the 10 shapes below?

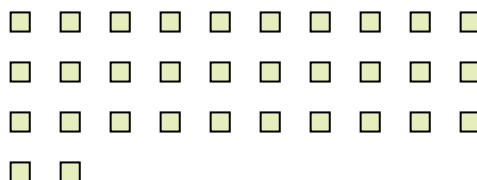


3. 2

8) How many groups of 9 can you make with the 27 shapes below?



9) How many groups of 8 can you make with the 32 shapes below?

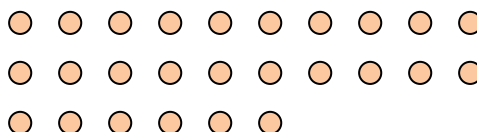


4. 3

10) How many groups of 6 can you make with the 18 shapes below?



11) How many groups of 2 can you make with the 26 shapes below?



5. 10

6. 6

7. 2

8. 3

9. 4

10. 3

11. 13