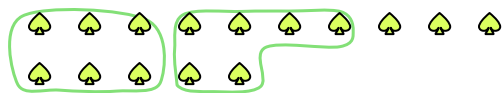




Use the shapes provided to answer the questions.

Answers

Ex) There are 15 shapes below. How many groups of 6 can you make with them? How many will you have left over?



1) There are 30 shapes below. How many groups of 5 can you make with them? How many will you have left over?



Ex. 2 3

1. _____

2. _____

3. _____

4. _____

5. _____

6. _____

7. _____

8. _____

9. _____

2) There are 15 shapes below. How many groups of 7 can you make with them? How many will you have left over?



3) There are 11 shapes below. How many groups of 6 can you make with them? How many will you have left over?



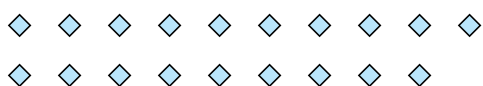
4) There are 16 shapes below. How many groups of 3 can you make with them? How many will you have left over?



5) There are 11 shapes below. How many groups of 2 can you make with them? How many will you have left over?




6) There are 19 shapes below. How many groups of 5 can you make with them? How many will you have left over?



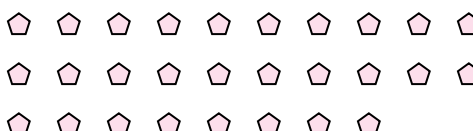
7) There are 13 shapes below. How many groups of 9 can you make with them? How many will you have left over?



8) There are 27 shapes below. How many groups of 9 can you make with them? How many will you have left over?



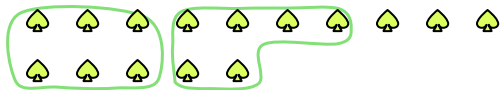
9) There are 28 shapes below. How many groups of 2 can you make with them? How many will you have left over?






Use the shapes provided to answer the questions.

Ex) There are 15 shapes below. How many groups of 6 can you make with them? How many will you have left over?



1) There are 30 shapes below. How many groups of 5 can you make with them? How many will you have left over?



2) There are 15 shapes below. How many groups of 7 can you make with them? How many will you have left over?



3) There are 11 shapes below. How many groups of 6 can you make with them? How many will you have left over?



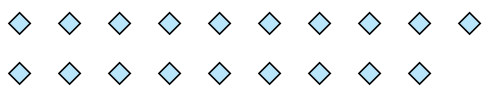
4) There are 16 shapes below. How many groups of 3 can you make with them? How many will you have left over?



5) There are 11 shapes below. How many groups of 2 can you make with them? How many will you have left over?




6) There are 19 shapes below. How many groups of 5 can you make with them? How many will you have left over?



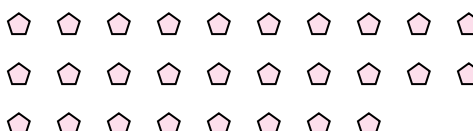
7) There are 13 shapes below. How many groups of 9 can you make with them? How many will you have left over?



8) There are 27 shapes below. How many groups of 9 can you make with them? How many will you have left over?



9) There are 28 shapes below. How many groups of 2 can you make with them? How many will you have left over?



Answers

Ex. 2 3

1. 6 0

2. 2 1

3. 1 5

4. 5 1

5. 5 1

6. 3 4

7. 1 4

8. 3 0

9. 14 0