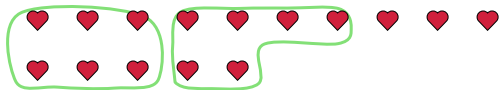


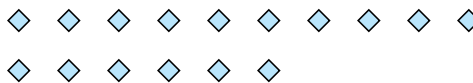


Use the shapes provided to answer the questions.

Ex) There are 15 shapes below. How many groups of 6 can you make with them? How many will you have left over?



1) There are 16 shapes below. How many groups of 7 can you make with them? How many will you have left over?



Answers

Ex. 2 3

1. _____

2. _____

3. _____

4. _____

5. _____

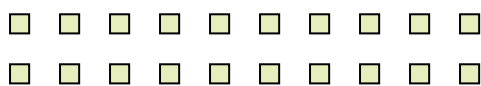
6. _____

7. _____

8. _____

9. _____

2) There are 20 shapes below. How many groups of 6 can you make with them? How many will you have left over?



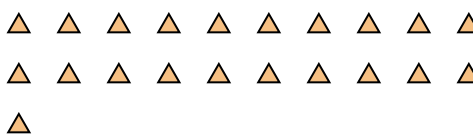
3) There are 21 shapes below. How many groups of 4 can you make with them? How many will you have left over?



4) There are 11 shapes below. How many groups of 9 can you make with them? How many will you have left over?



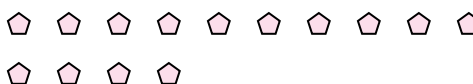
5) There are 21 shapes below. How many groups of 6 can you make with them? How many will you have left over?



6) There are 12 shapes below. How many groups of 3 can you make with them? How many will you have left over?



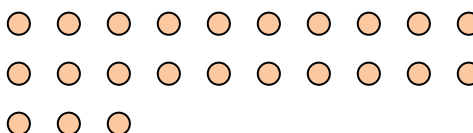
7) There are 14 shapes below. How many groups of 5 can you make with them? How many will you have left over?



8) There are 12 shapes below. How many groups of 7 can you make with them? How many will you have left over?



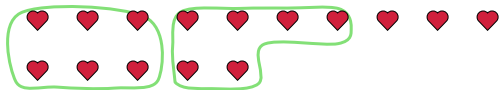
9) There are 23 shapes below. How many groups of 5 can you make with them? How many will you have left over?



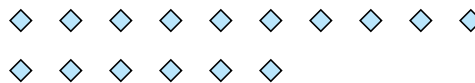


Use the shapes provided to answer the questions.

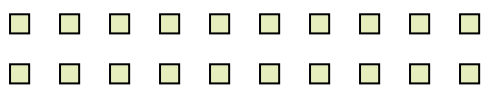
Ex) There are 15 shapes below. How many groups of 6 can you make with them? How many will you have left over?



1) There are 16 shapes below. How many groups of 7 can you make with them? How many will you have left over?



2) There are 20 shapes below. How many groups of 6 can you make with them? How many will you have left over?



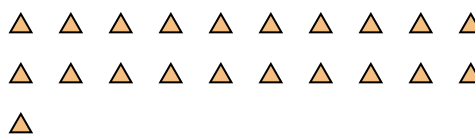
3) There are 21 shapes below. How many groups of 4 can you make with them? How many will you have left over?



4) There are 11 shapes below. How many groups of 9 can you make with them? How many will you have left over?



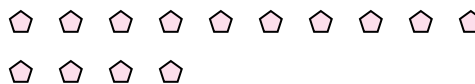
5) There are 21 shapes below. How many groups of 6 can you make with them? How many will you have left over?



6) There are 12 shapes below. How many groups of 3 can you make with them? How many will you have left over?



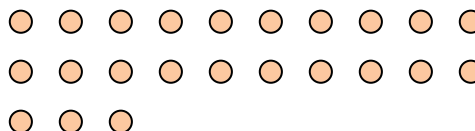
7) There are 14 shapes below. How many groups of 5 can you make with them? How many will you have left over?



8) There are 12 shapes below. How many groups of 7 can you make with them? How many will you have left over?



9) There are 23 shapes below. How many groups of 5 can you make with them? How many will you have left over?



Answers

Ex. 2 3

1. 2 2

2. 3 2

3. 5 1

4. 1 2

5. 3 3

6. 4 0

7. 2 4

8. 1 5

9. 4 3