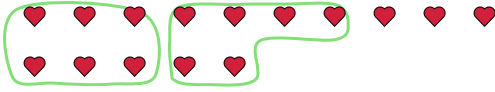




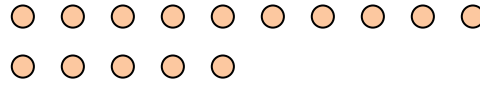
Use the shapes provided to answer the questions.

**Answers**

Ex) There are 15 shapes below. How many groups of 6 can you make with them? How many will you have left over?



1) There are 15 shapes below. How many groups of 3 can you make with them? How many will you have left over?

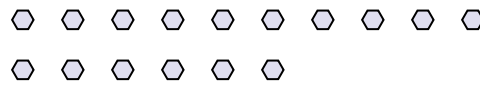


Ex. 2 3

2) There are 17 shapes below. How many groups of 8 can you make with them? How many will you have left over?



3) There are 16 shapes below. How many groups of 3 can you make with them? How many will you have left over?



1. \_\_\_\_\_

2. \_\_\_\_\_

3. \_\_\_\_\_

4. \_\_\_\_\_

5. \_\_\_\_\_


6. \_\_\_\_\_

7. \_\_\_\_\_

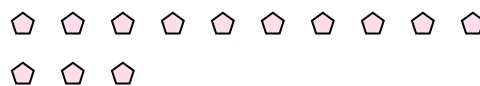
8. \_\_\_\_\_

9. \_\_\_\_\_


4) There are 25 shapes below. How many groups of 4 can you make with them? How many will you have left over?



5) There are 13 shapes below. How many groups of 9 can you make with them? How many will you have left over?



6) There are 30 shapes below. How many groups of 4 can you make with them? How many will you have left over?



7) There are 29 shapes below. How many groups of 4 can you make with them? How many will you have left over?



8) There are 12 shapes below. How many groups of 7 can you make with them? How many will you have left over?



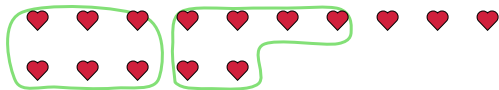
9) There are 15 shapes below. How many groups of 6 can you make with them? How many will you have left over?



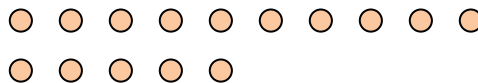


Use the shapes provided to answer the questions.

Ex) There are 15 shapes below. How many groups of 6 can you make with them? How many will you have left over?



1) There are 15 shapes below. How many groups of 3 can you make with them? How many will you have left over?



**Answers**

Ex. 2 3

1. 5 0

2. 2 1

3. 5 1

4. 6 1

5. 1 4

6. 7 2

7. 7 1

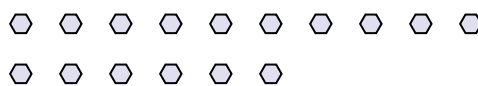
8. 1 5

9. 2 3


2) There are 17 shapes below. How many groups of 8 can you make with them? How many will you have left over?



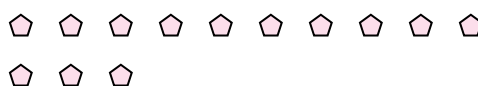
3) There are 16 shapes below. How many groups of 3 can you make with them? How many will you have left over?



4) There are 25 shapes below. How many groups of 4 can you make with them? How many will you have left over?



5) There are 13 shapes below. How many groups of 9 can you make with them? How many will you have left over?



6) There are 30 shapes below. How many groups of 4 can you make with them? How many will you have left over?



7) There are 29 shapes below. How many groups of 4 can you make with them? How many will you have left over?



8) There are 12 shapes below. How many groups of 7 can you make with them? How many will you have left over?



9) There are 15 shapes below. How many groups of 6 can you make with them? How many will you have left over?

