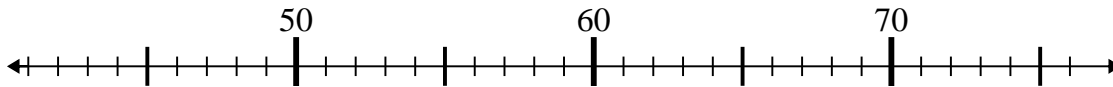


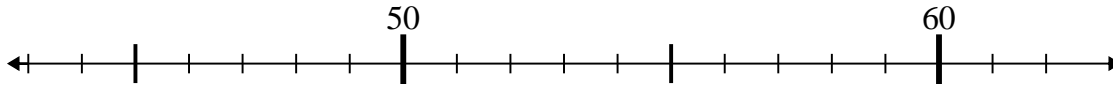


Use the numberlines to solve each problem.

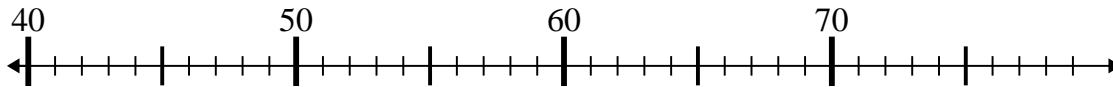
1) $52 - 10 =$



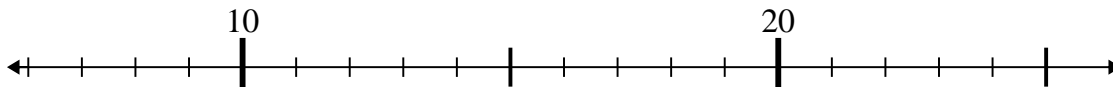
2) $60 - 1 =$



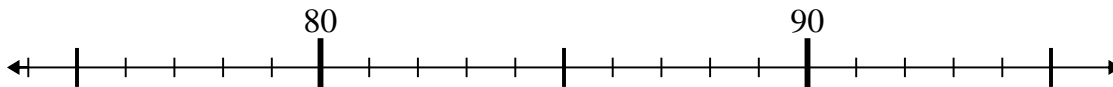
3) $58 - 6 =$



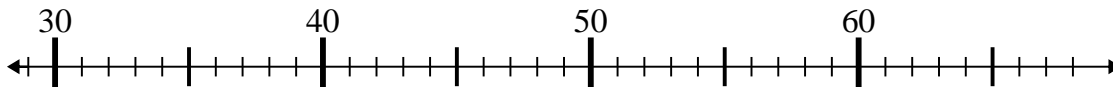
4) $13 - 1 =$



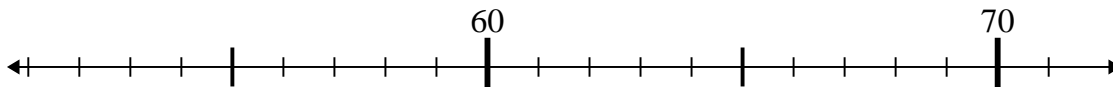
5) $86 + 9 =$



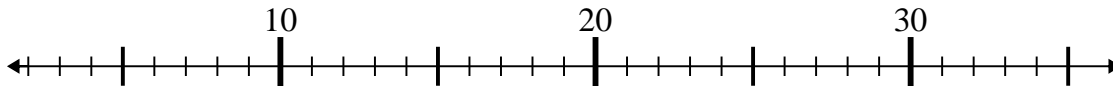
6) $31 + 26 =$



7) $55 + 2 =$



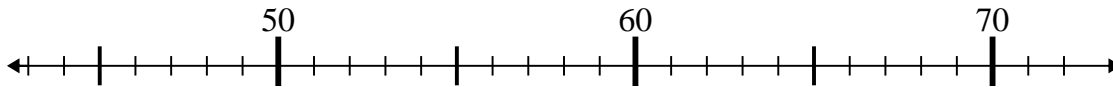
8) $35 - 18 =$



9) $76 - 24 =$



10) $46 + 15 =$



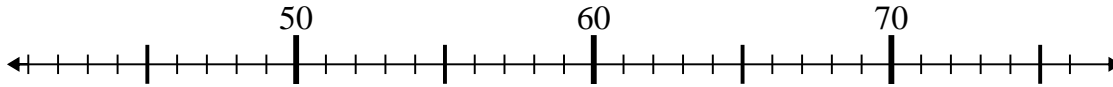
Answers

1. _____
2. _____
3. _____
4. _____
5. _____
6. _____
7. _____
8. _____
9. _____
10. _____

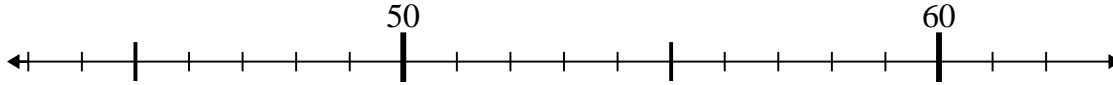


Use the numberlines to solve each problem.

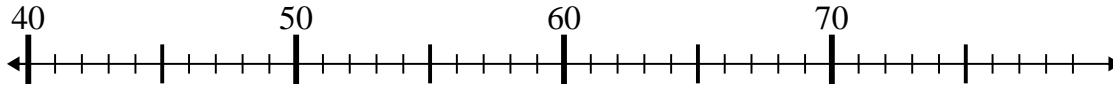
1) $52 - 10 =$



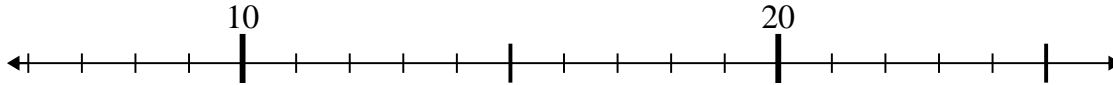
2) $60 - 1 =$



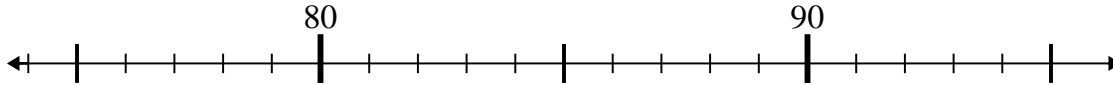
3) $58 - 6 =$



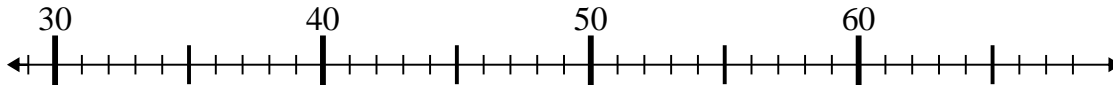
4) $13 - 1 =$



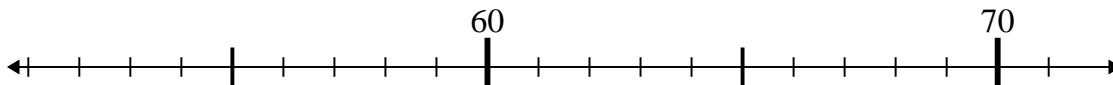
5) $86 + 9 =$



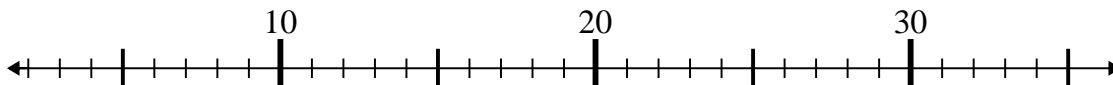
6) $31 + 26 =$



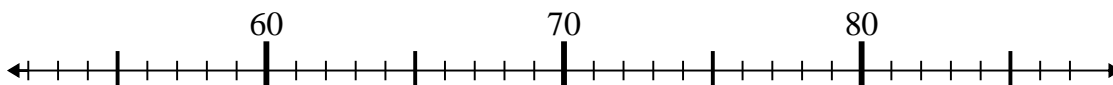
7) $55 + 2 =$



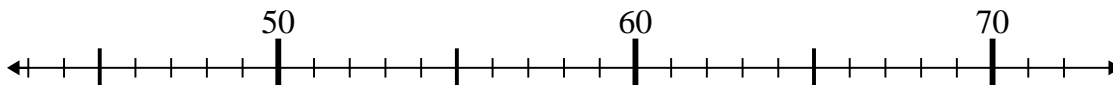
8) $35 - 18 =$



9) $76 - 24 =$



10) $46 + 15 =$



Answers

1. 42

2. 59

3. 52

4. 12

5. 95

6. 57

7. 57

8. 17

9. 52

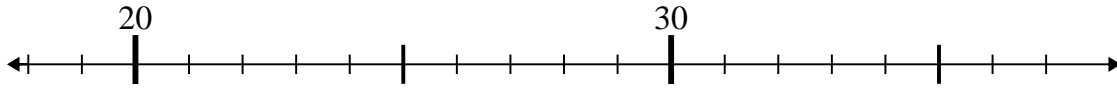
10. 61



Use the numberlines to solve each problem.

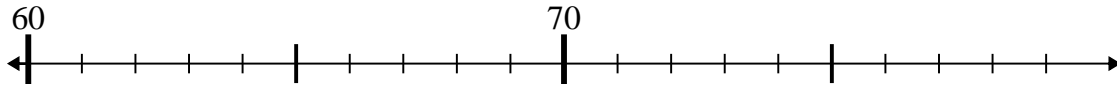
Answers

1) $23 - 4 =$



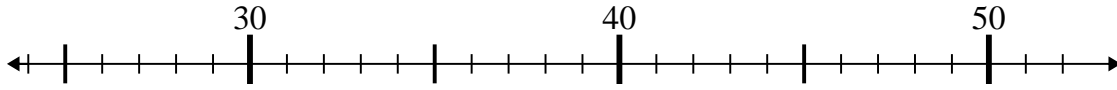
1. _____

2) $73 - 6 =$



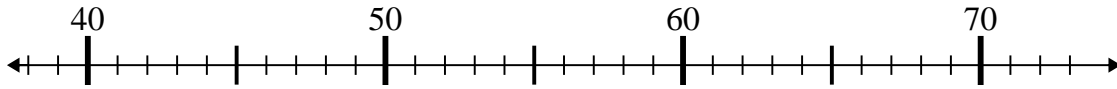
2. _____

3) $44 + 2 =$



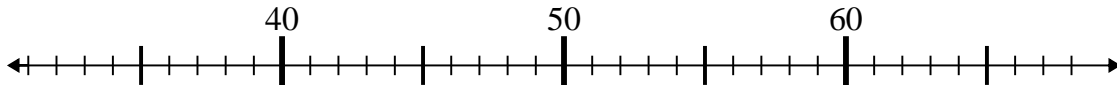
3. _____

4) $42 + 1 =$



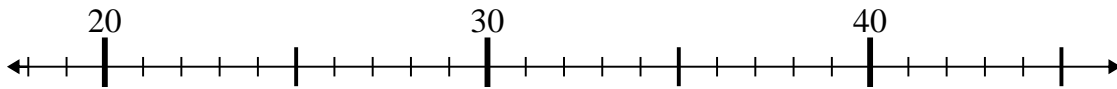
4. _____

5) $40 + 13 =$



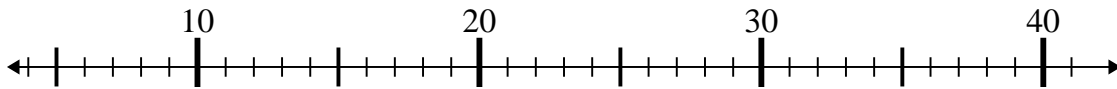
5. _____

6) $26 + 0 =$



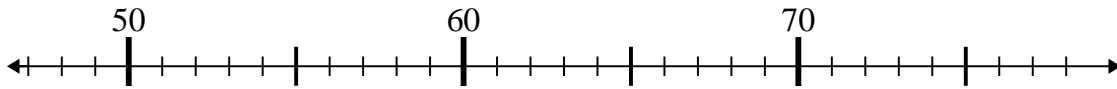
6. _____

7) $36 - 27 =$



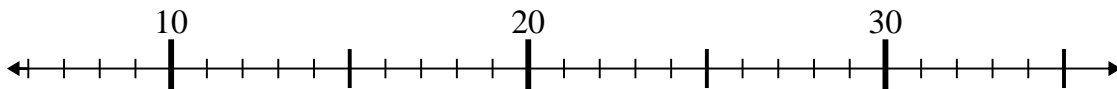
7. _____

8) $54 - 5 =$



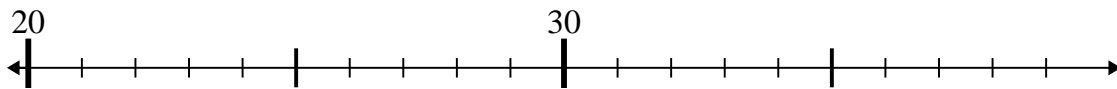
8. _____

9) $10 + 1 =$



9. _____

10) $24 + 1 =$

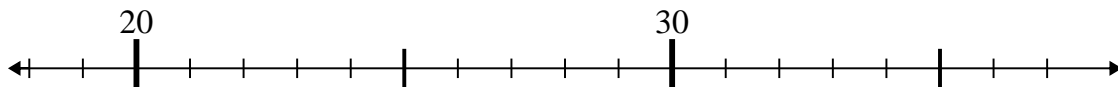


10. _____

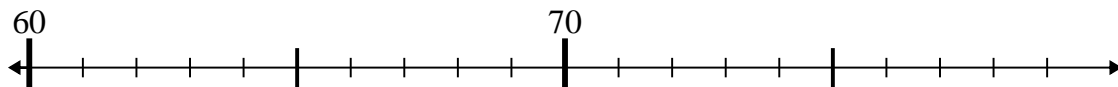


Use the numberlines to solve each problem.

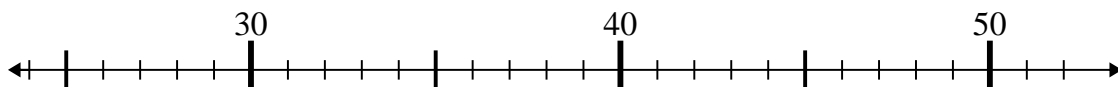
1) $23 - 4 =$



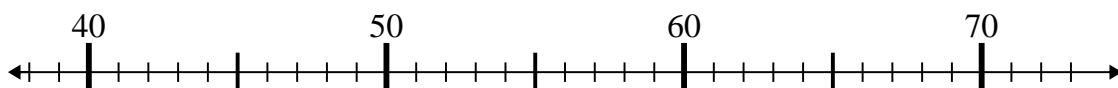
2) $73 - 6 =$



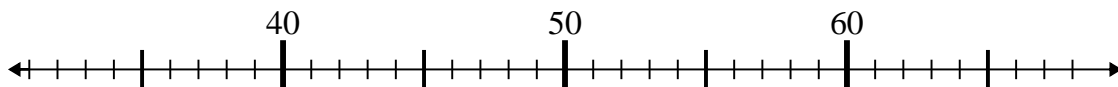
3) $44 + 2 =$



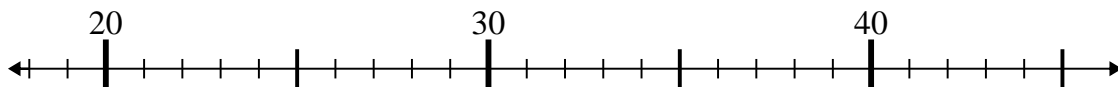
4) $42 + 1 =$



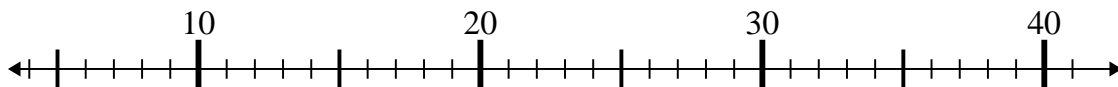
5) $40 + 13 =$



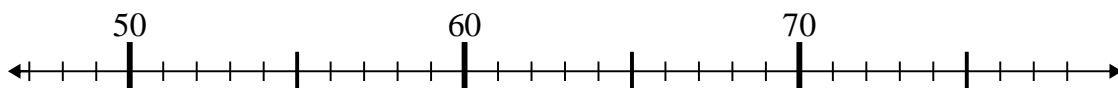
6) $26 + 0 =$



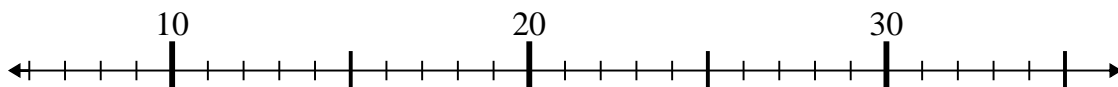
7) $36 - 27 =$



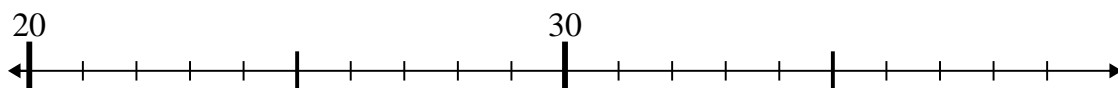
8) $54 - 5 =$



9) $10 + 1 =$



10) $24 + 1 =$



Answers

1. 19

2. 67

3. 46

4. 43

5. 53

6. 26

7. 9

8. 49

9. 11

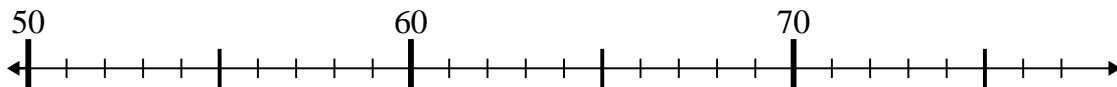
10. 25



Use the numberlines to solve each problem.

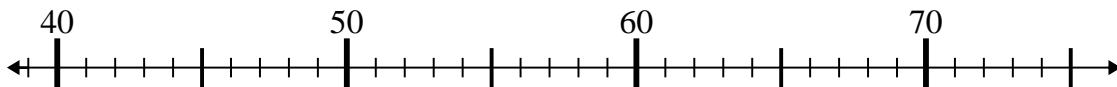
Answers

1) $70 - 16 =$



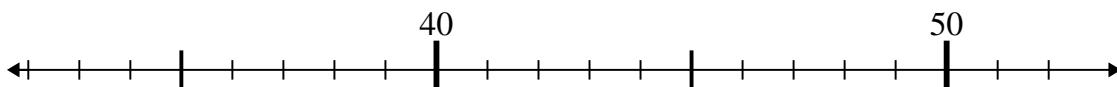
1. _____

2) $39 + 6 =$



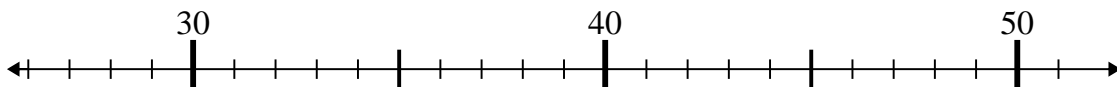
2. _____

3) $46 + 3 =$



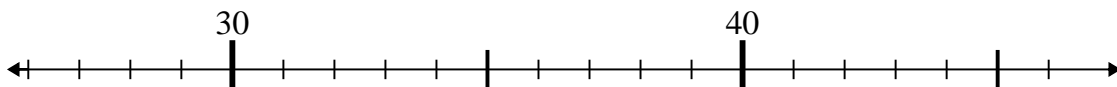
3. _____

4) $31 + 8 =$



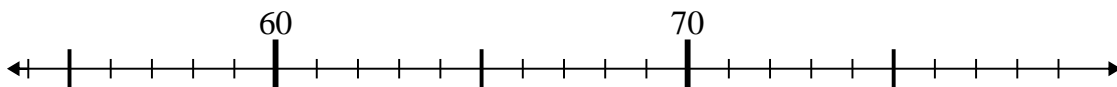
4. _____

5) $36 - 1 =$



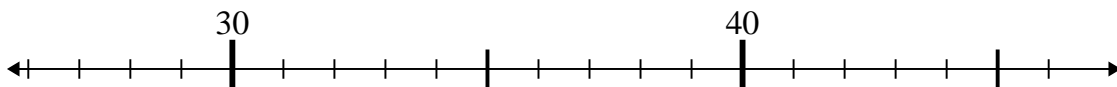
5. _____

6) $70 + 8 =$



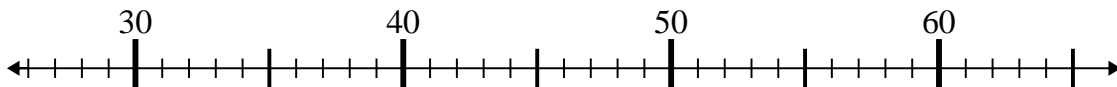
6. _____

7) $46 - 1 =$



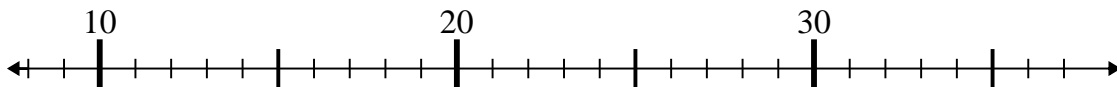
7. _____

8) $27 + 8 =$



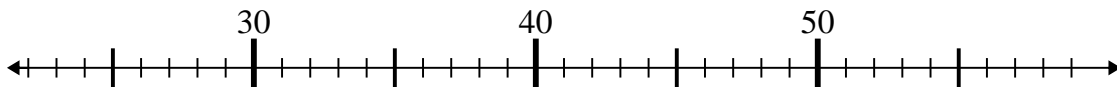
8. _____

9) $18 + 1 =$



9. _____

10) $25 + 3 =$

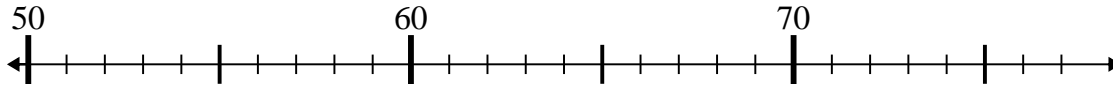


10. _____

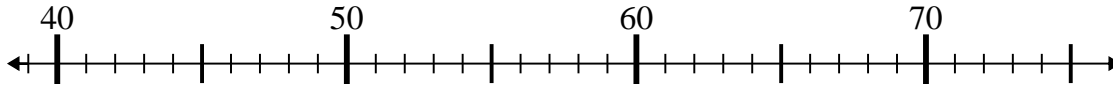


Use the numberlines to solve each problem.

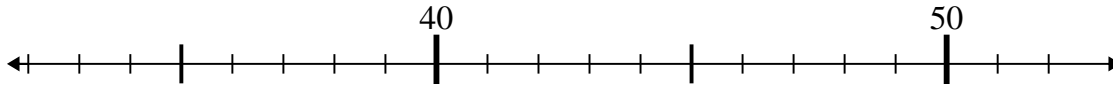
1) $70 - 16 =$



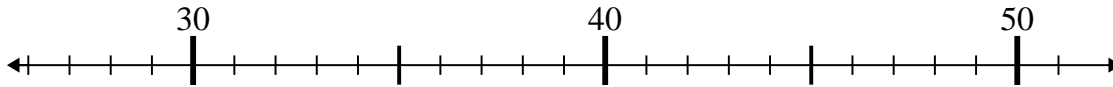
2) $39 + 6 =$



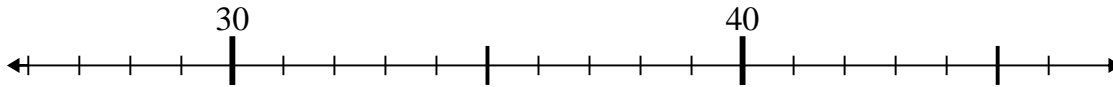
3) $46 + 3 =$



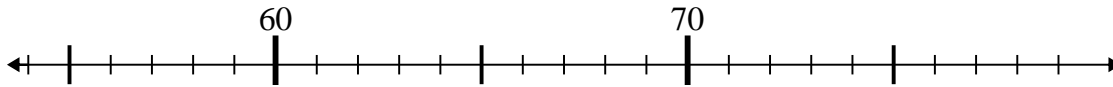
4) $31 + 8 =$



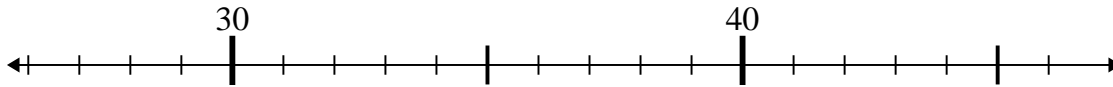
5) $36 - 1 =$



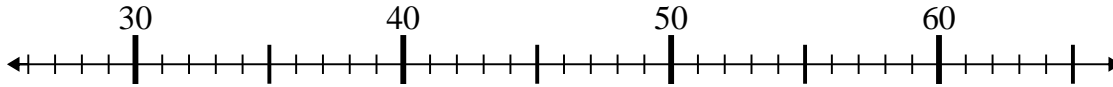
6) $70 + 8 =$



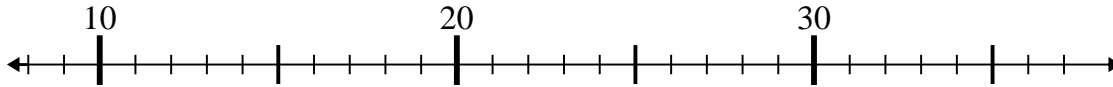
7) $46 - 1 =$



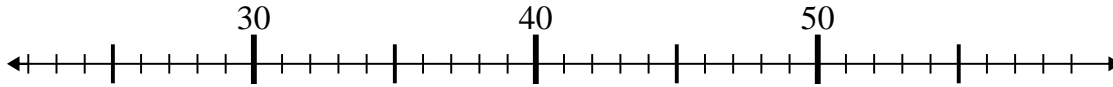
8) $27 + 8 =$



9) $18 + 1 =$



10) $25 + 3 =$



Answers

1. 54

2. 45

3. 49

4. 39

5. 35

6. 78

7. 45

8. 35

9. 19

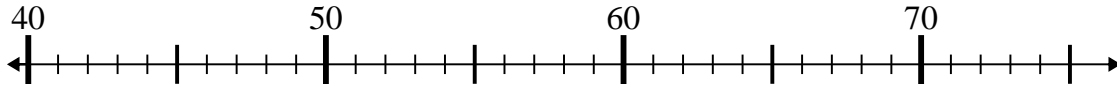
10. 28



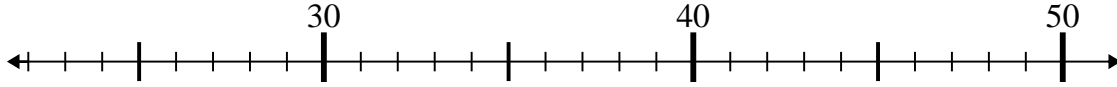
Use the numberlines to solve each problem.

Answers

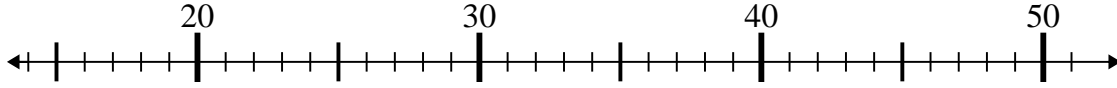
1) $46 - 5 =$



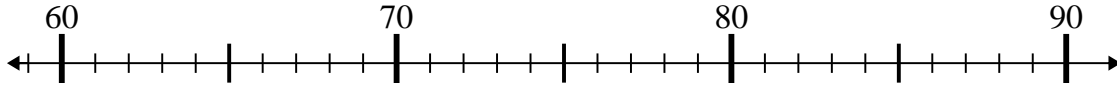
2) $22 + 19 =$



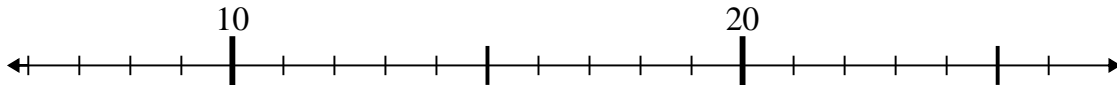
3) $21 + 25 =$



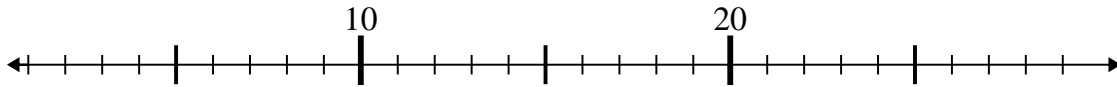
4) $73 + 15 =$



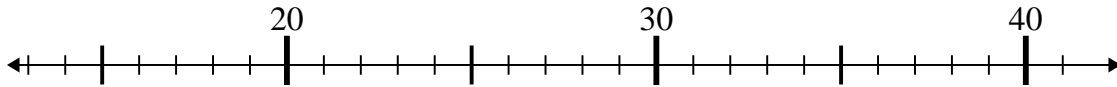
5) $11 + 2 =$



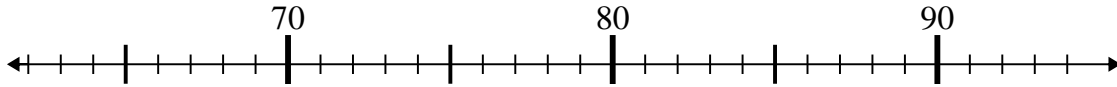
6) $5 + 1 =$



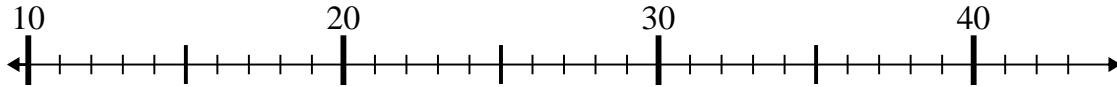
7) $23 + 4 =$



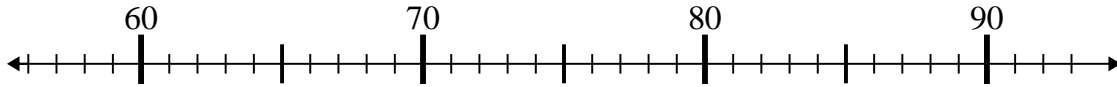
8) $82 - 14 =$



9) $22 - 10 =$



10) $65 + 1 =$

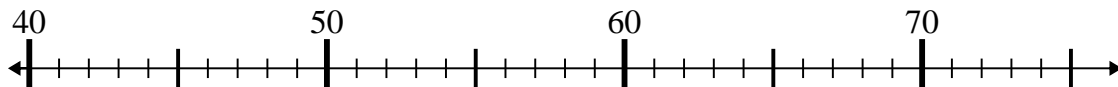


1. _____
2. _____
3. _____
4. _____
5. _____
6. _____
7. _____
8. _____
9. _____
10. _____

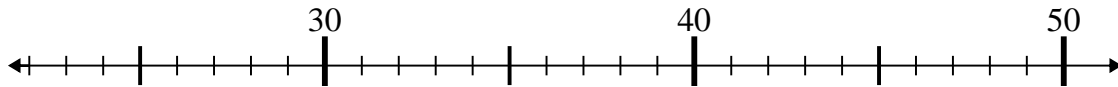


Use the numberlines to solve each problem.

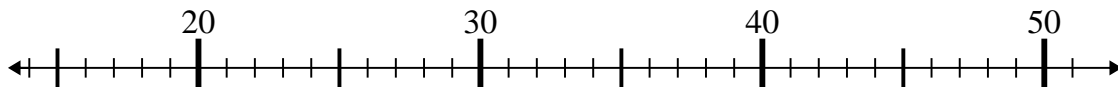
1) $46 - 5 =$



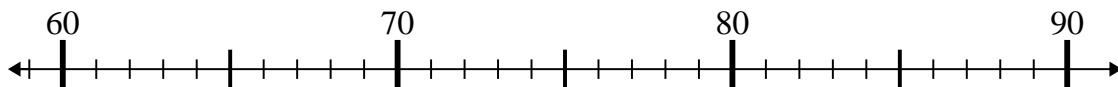
2) $22 + 19 =$



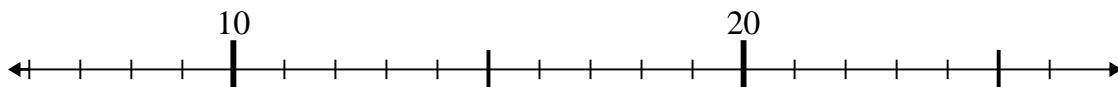
3) $21 + 25 =$



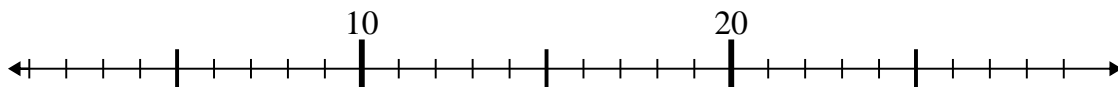
4) $73 + 15 =$



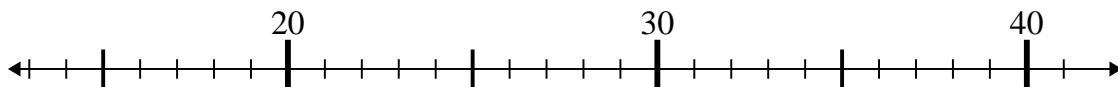
5) $11 + 2 =$



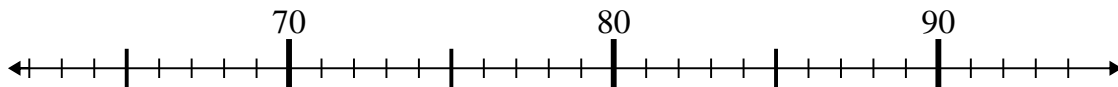
6) $5 + 1 =$



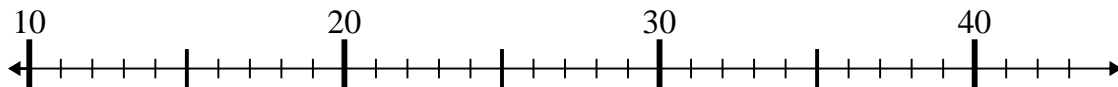
7) $23 + 4 =$



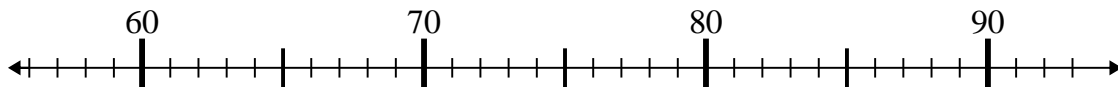
8) $82 - 14 =$



9) $22 - 10 =$



10) $65 + 1 =$



Answers

1. 41

2. 41

3. 46

4. 88

5. 13

6. 6

7. 27

8. 68

9. 12

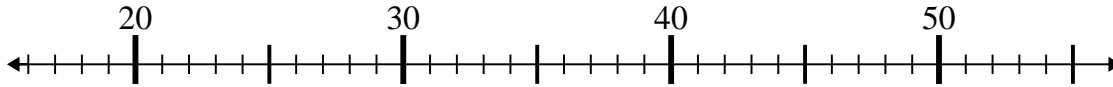
10. 66



Use the numberlines to solve each problem.

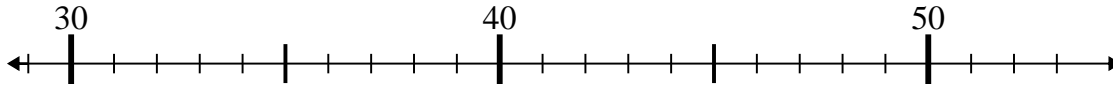
Answers

1) $26 - 4 =$



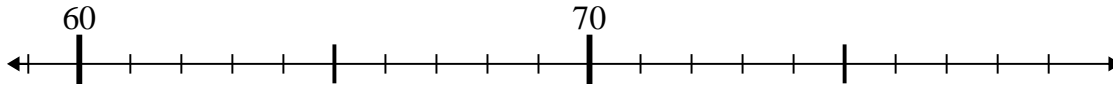
1. _____

2) $45 - 2 =$



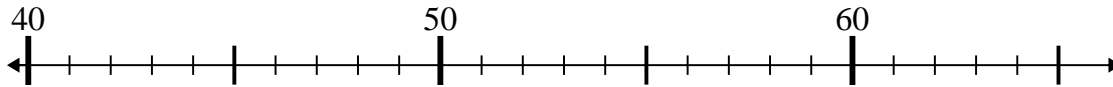
2. _____

3) $62 + 14 =$



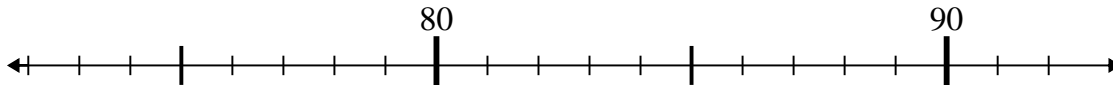
3. _____

4) $51 - 7 =$



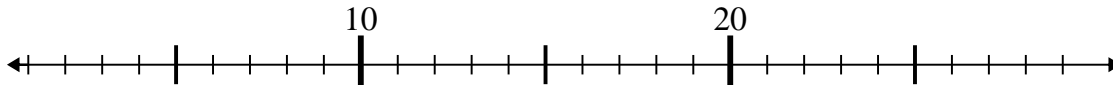
4. _____

5) $76 + 1 =$



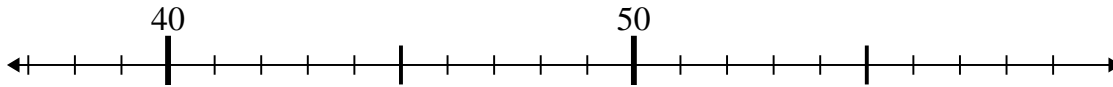
5. _____

6) $27 - 21 =$



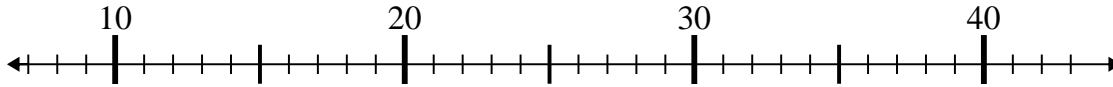
6. _____

7) $55 - 15 =$



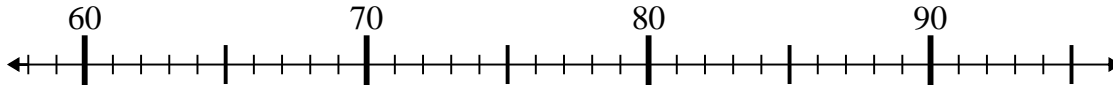
7. _____

8) $31 - 17 =$



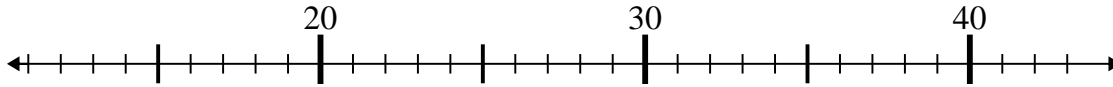
8. _____

9) $66 + 9 =$



9. _____

10) $27 + 15 =$

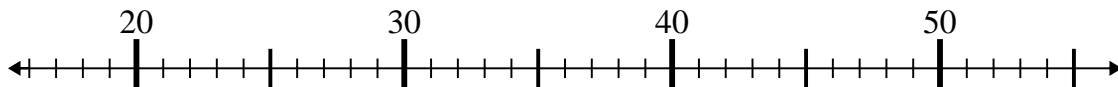


10. _____

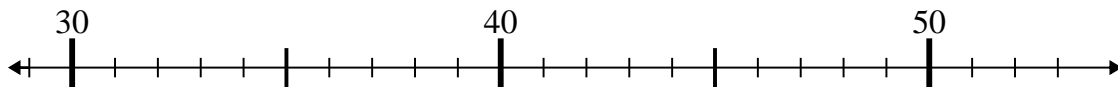


Use the numberlines to solve each problem.

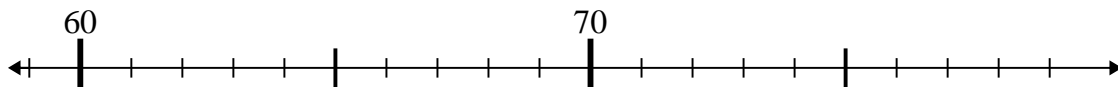
1) $26 - 4 =$



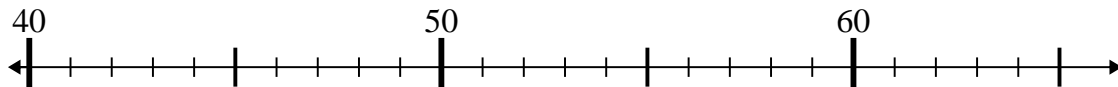
2) $45 - 2 =$



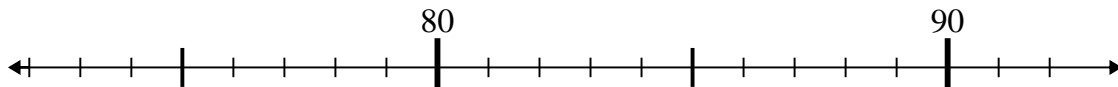
3) $62 + 14 =$



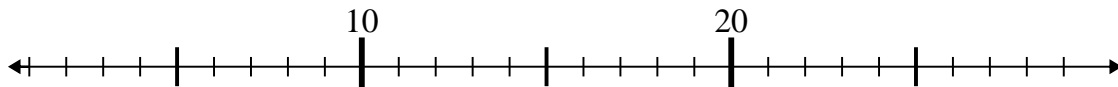
4) $51 - 7 =$



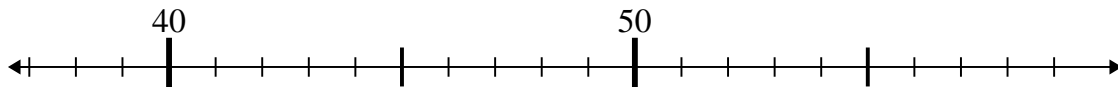
5) $76 + 1 =$



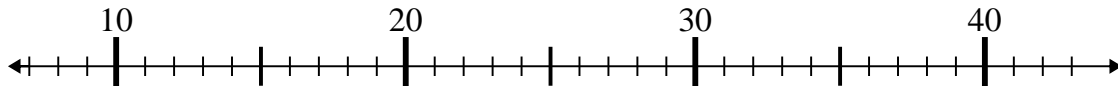
6) $27 - 21 =$



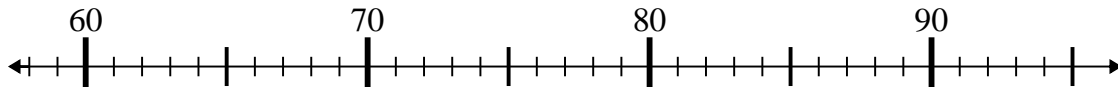
7) $55 - 15 =$



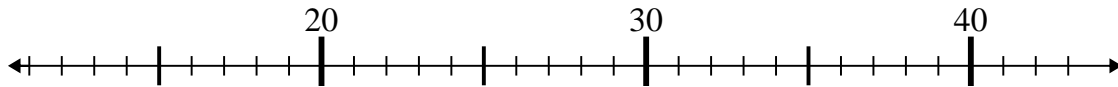
8) $31 - 17 =$



9) $66 + 9 =$



10) $27 + 15 =$



Answers

1. 22

2. 43

3. 76

4. 44

5. 77

6. 6

7. 40

8. 14

9. 75

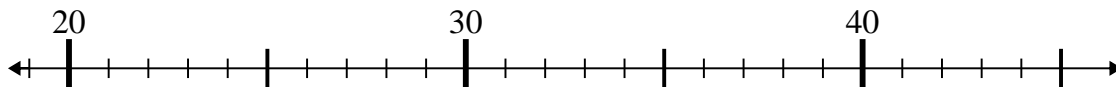
10. 42



Use the numberlines to solve each problem.

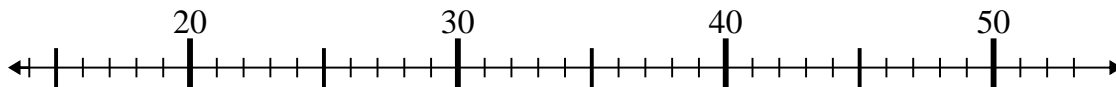
Answers

1) $29 + 7 =$



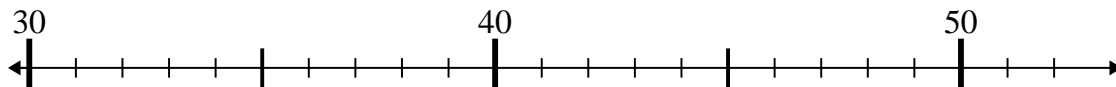
1. _____

2) $36 - 6 =$



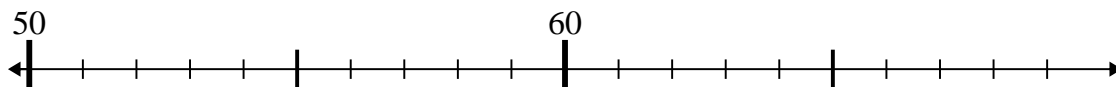
2. _____

3) $50 - 1 =$



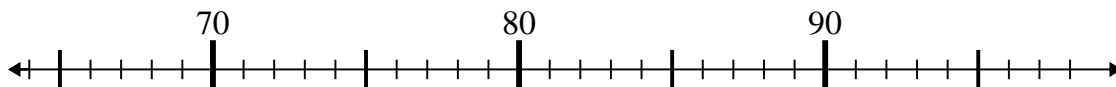
3. _____

4) $68 - 6 =$



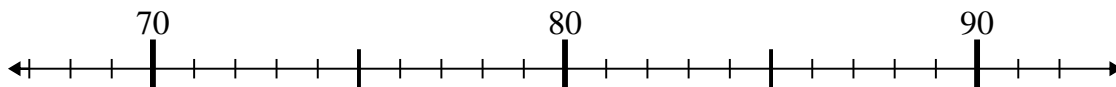
4. _____

5) $71 + 11 =$



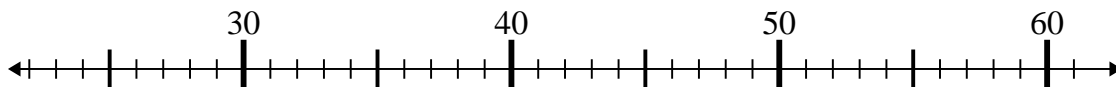
5. _____

6) $68 + 4 =$



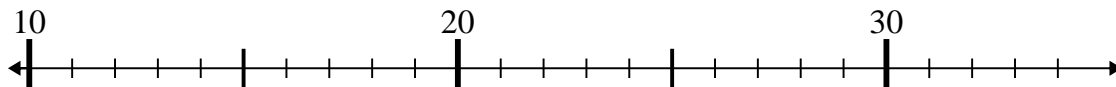
6. _____

7) $35 - 9 =$



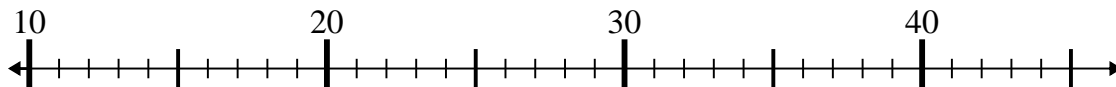
7. _____

8) $34 + 0 =$



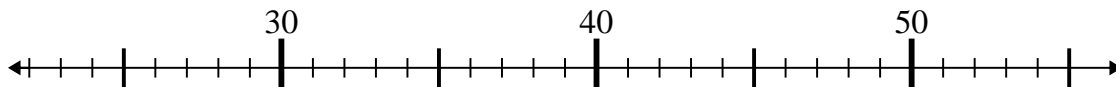
8. _____

9) $42 - 21 =$



9. _____

10) $45 - 3 =$

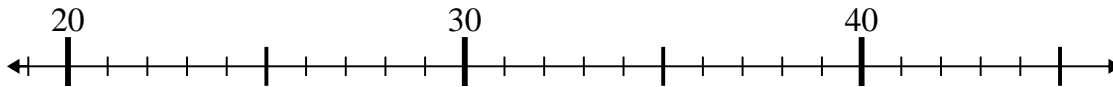


10. _____

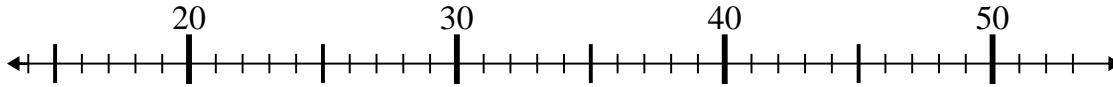


Use the numberlines to solve each problem.

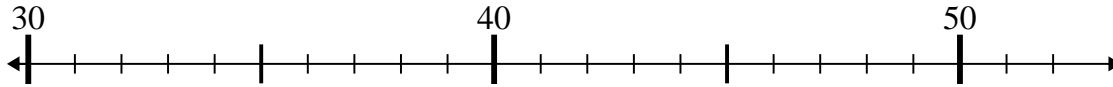
1) $29 + 7 =$



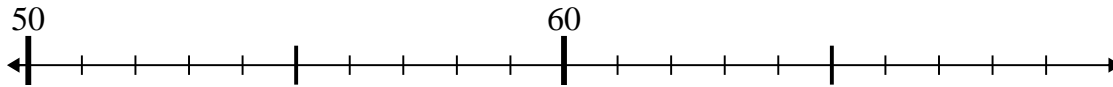
2) $36 - 6 =$



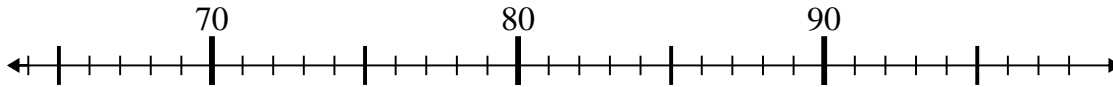
3) $50 - 1 =$



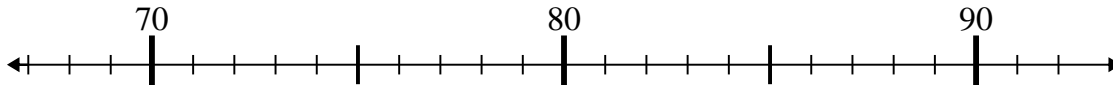
4) $68 - 6 =$



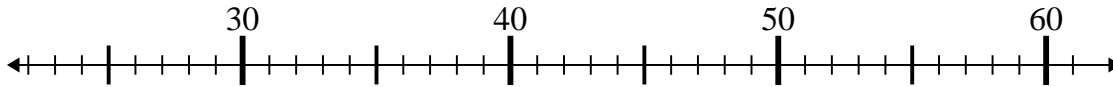
5) $71 + 11 =$



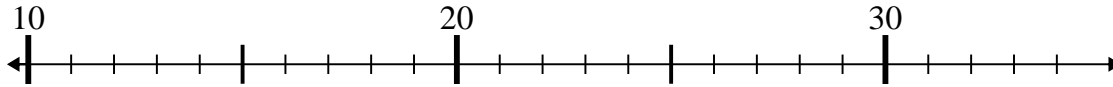
6) $68 + 4 =$



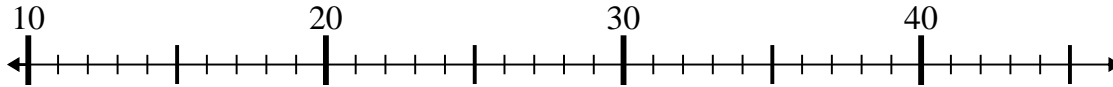
7) $35 - 9 =$



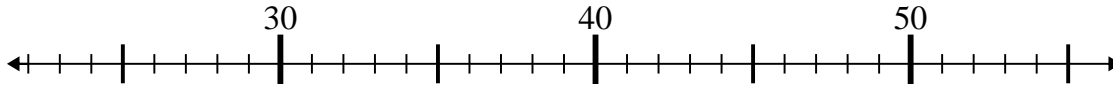
8) $34 + 0 =$



9) $42 - 21 =$



10) $45 - 3 =$



Answers

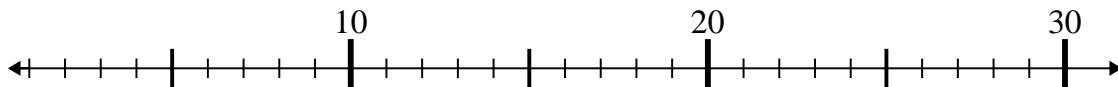
1. 36
2. 30
3. 49
4. 62
5. 82
6. 72
7. 26
8. 34
9. 21
10. 42



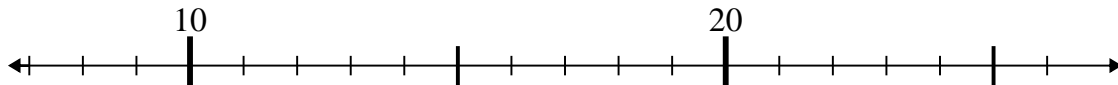
Use the numberlines to solve each problem.

Answers

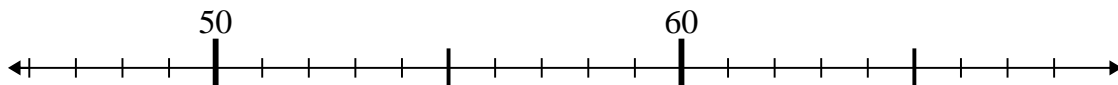
1) $3 + 17 =$



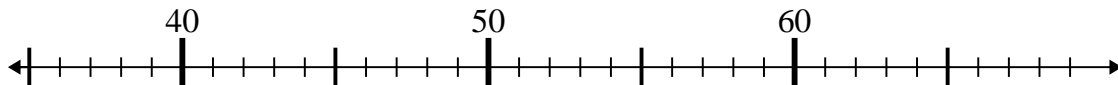
2) $14 + 9 =$



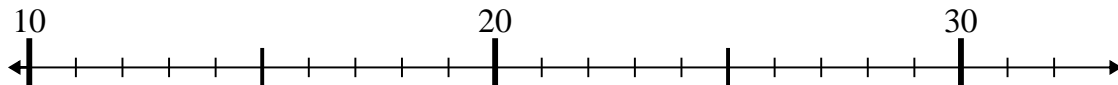
3) $59 - 8 =$



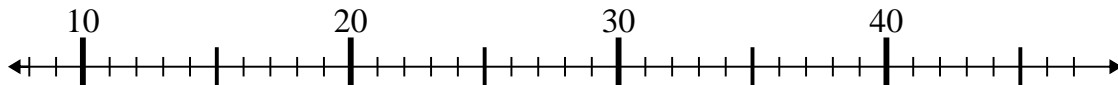
4) $43 - 5 =$



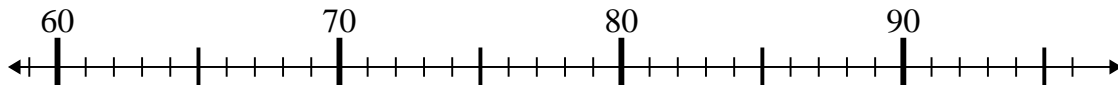
5) $26 - 14 =$



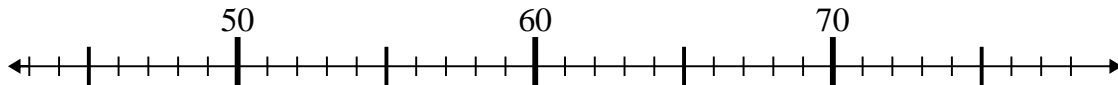
6) $15 + 23 =$



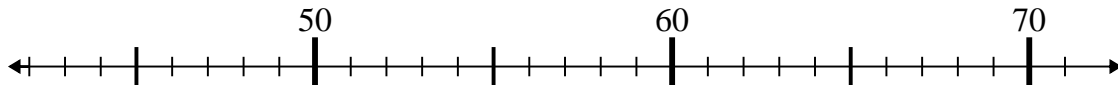
7) $91 + 2 =$



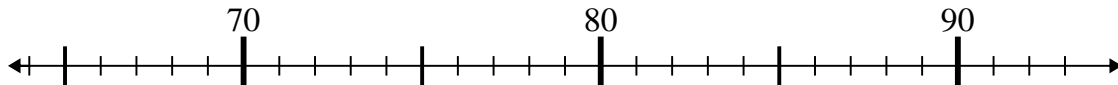
8) $47 + 1 =$



9) $71 - 8 =$



10) $72 + 16 =$

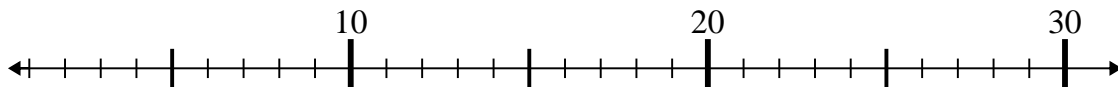


1. _____
2. _____
3. _____
4. _____
5. _____
6. _____
7. _____
8. _____
9. _____
10. _____

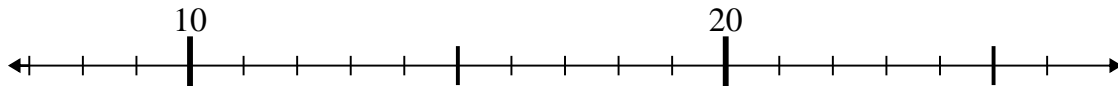


Use the numberlines to solve each problem.

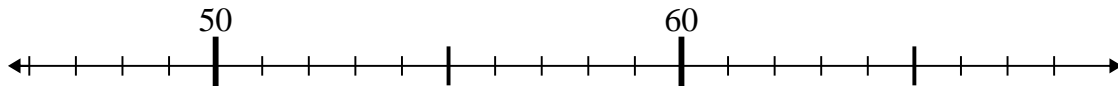
1) $3 + 17 =$



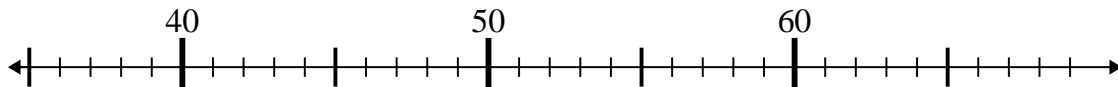
2) $14 + 9 =$



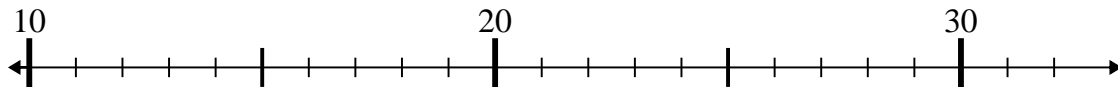
3) $59 - 8 =$



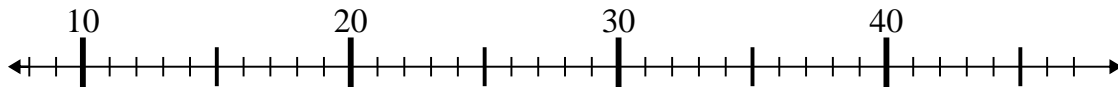
4) $43 - 5 =$



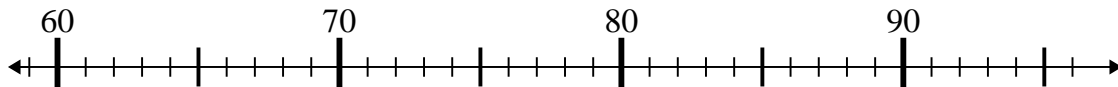
5) $26 - 14 =$



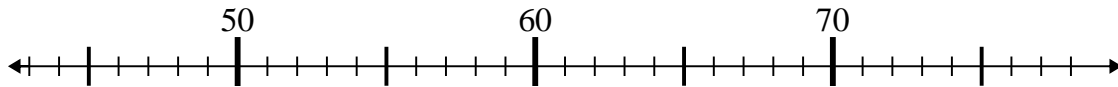
6) $15 + 23 =$



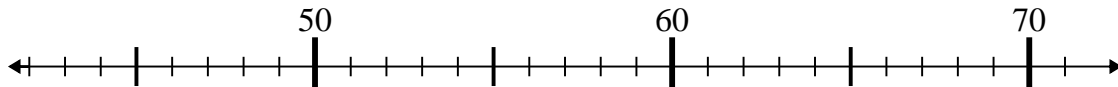
7) $91 + 2 =$



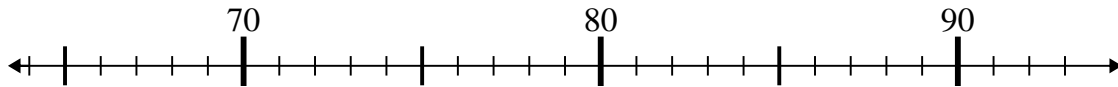
8) $47 + 1 =$



9) $71 - 8 =$



10) $72 + 16 =$



Answers

1. 20

2. 23

3. 51

4. 38

5. 12

6. 38

7. 93

8. 48

9. 63

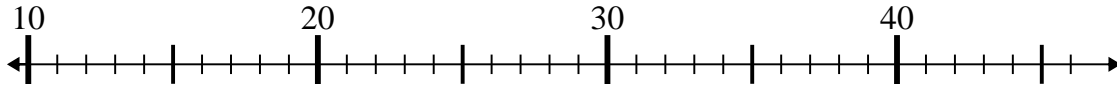
10. 88



Use the numberlines to solve each problem.

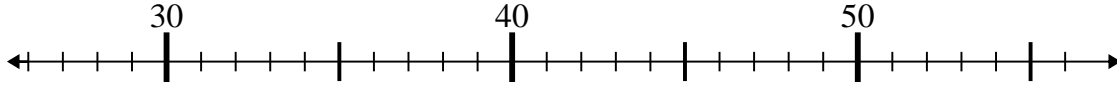
Answers

1) $24 - 11 =$



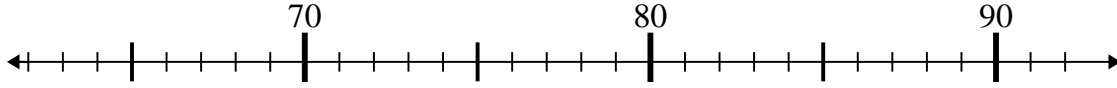
1. _____

2) $29 + 6 =$



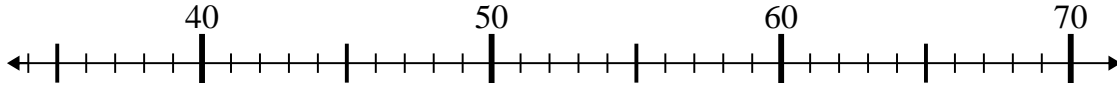
2. _____

3) $72 + 7 =$



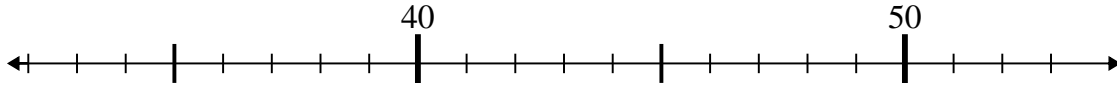
3. _____

4) $41 + 16 =$



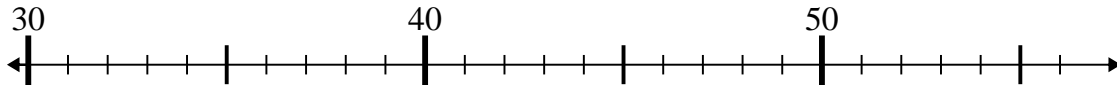
4. _____

5) $51 - 3 =$



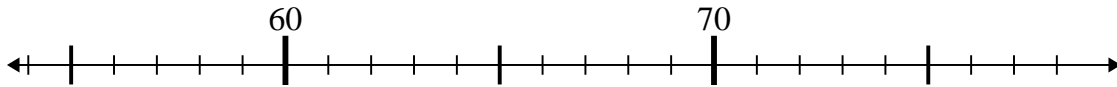
5. _____

6) $35 - 0 =$



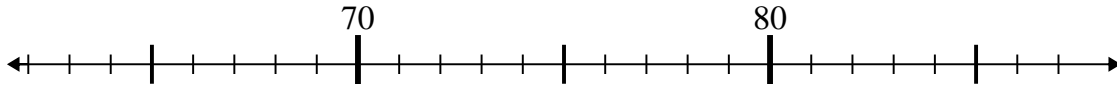
6. _____

7) $65 + 10 =$



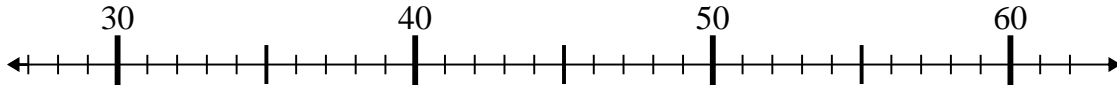
7. _____

8) $65 + 14 =$



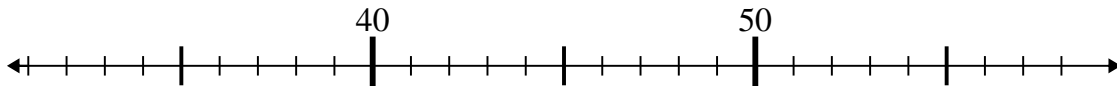
8. _____

9) $57 - 16 =$



9. _____

10) $58 - 19 =$

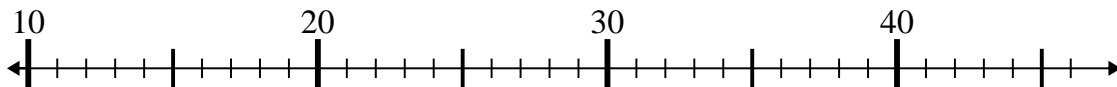


10. _____

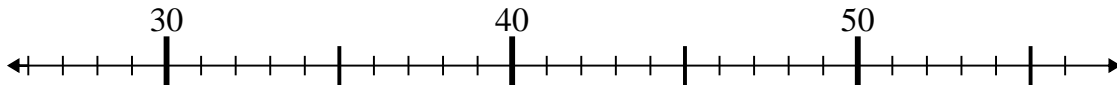


Use the numberlines to solve each problem.

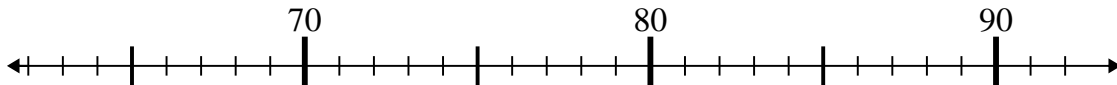
1) $24 - 11 =$



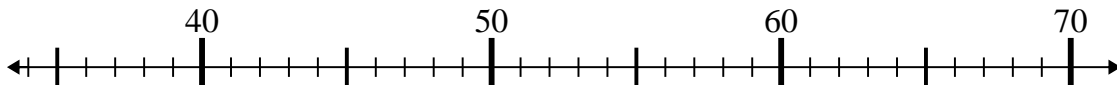
2) $29 + 6 =$



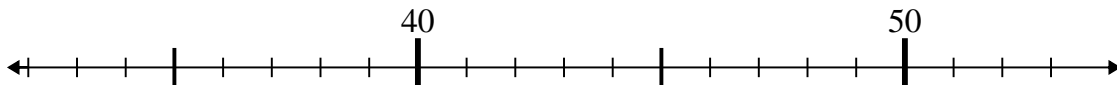
3) $72 + 7 =$



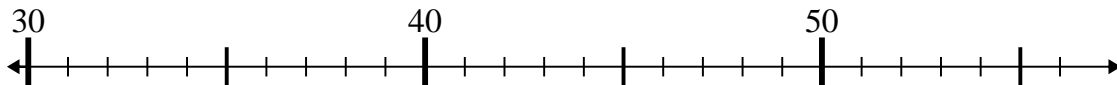
4) $41 + 16 =$



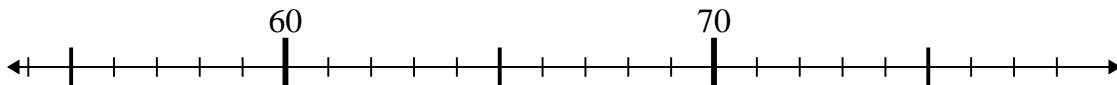
5) $51 - 3 =$



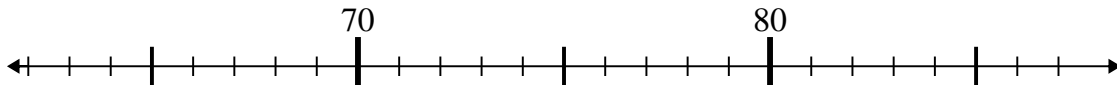
6) $35 - 0 =$



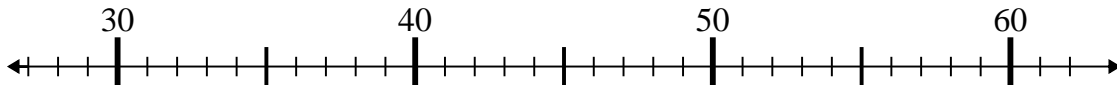
7) $65 + 10 =$



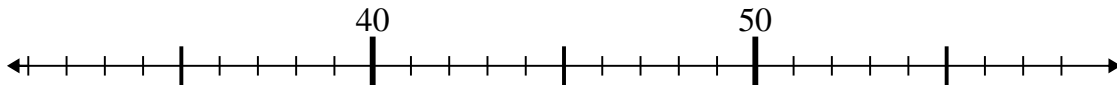
8) $65 + 14 =$



9) $57 - 16 =$



10) $58 - 19 =$



Answers

1. **13**

2. **35**

3. **79**

4. **57**

5. **48**

6. **35**

7. **75**

8. **79**

9. **41**

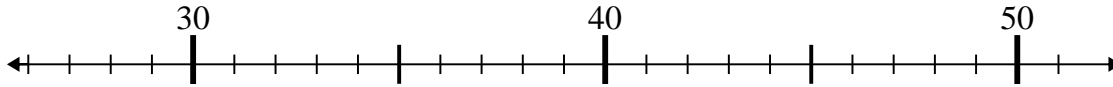
10. **39**



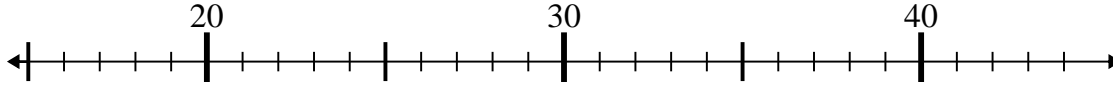
Use the numberlines to solve each problem.

Answers

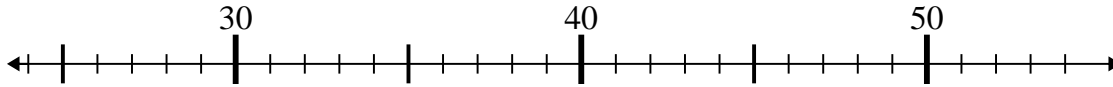
1) $32 - 5 =$



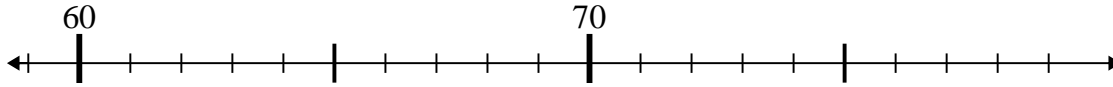
2) $16 + 7 =$



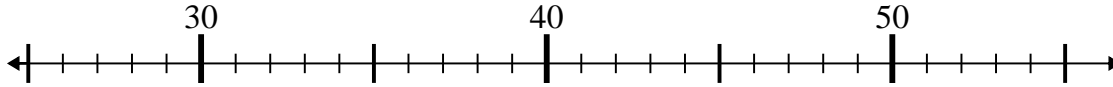
3) $25 + 12 =$



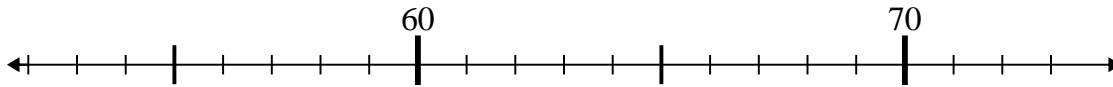
4) $75 - 14 =$



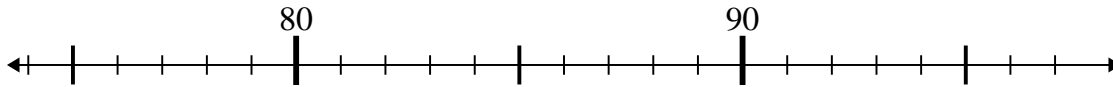
5) $28 + 26 =$



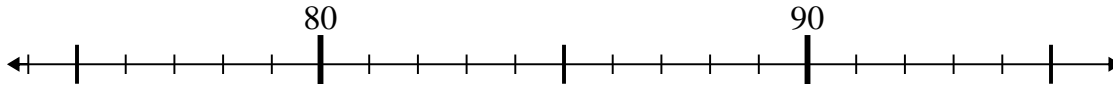
6) $65 - 10 =$



7) $81 - 2 =$



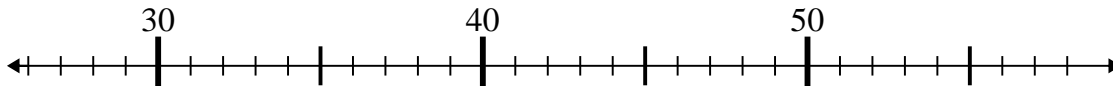
8) $95 - 8 =$



9) $48 - 11 =$



10) $32 + 18 =$

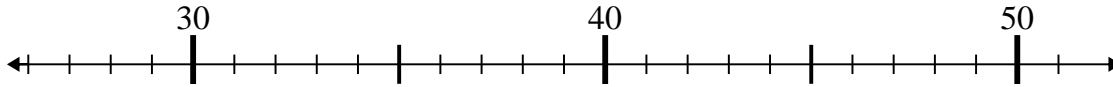


1. _____
2. _____
3. _____
4. _____
5. _____
6. _____
7. _____
8. _____
9. _____
10. _____

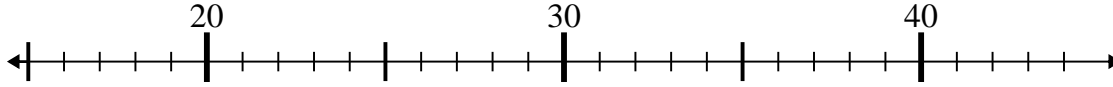


Use the numberlines to solve each problem.

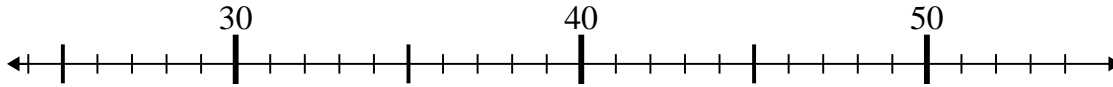
1) $32 - 5 =$



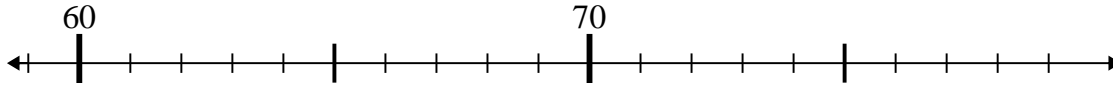
2) $16 + 7 =$



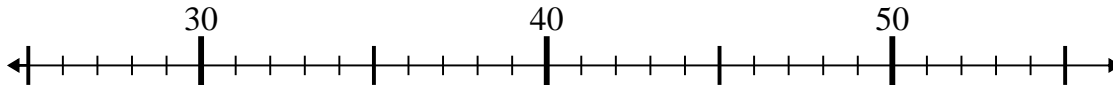
3) $25 + 12 =$



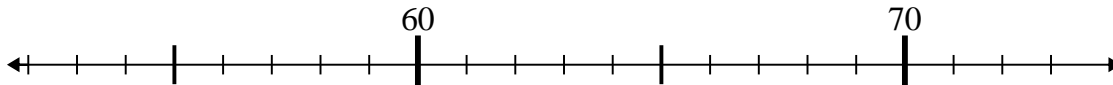
4) $75 - 14 =$



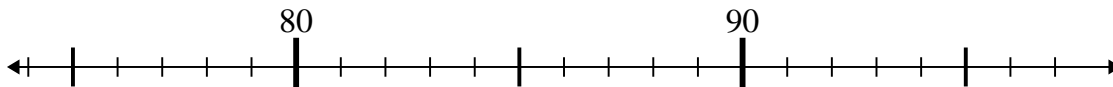
5) $28 + 26 =$



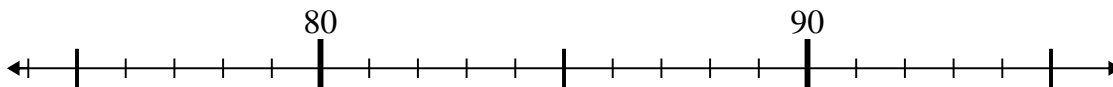
6) $65 - 10 =$



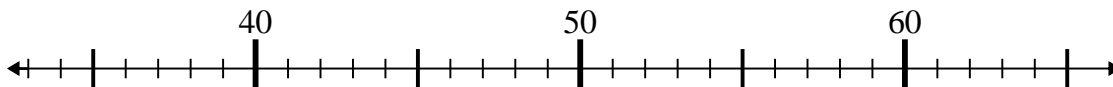
7) $81 - 2 =$



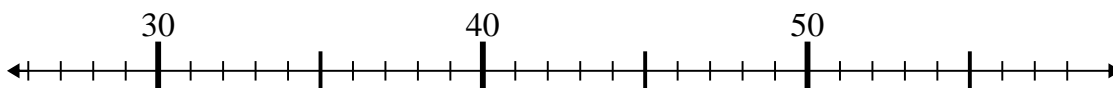
8) $95 - 8 =$



9) $48 - 11 =$



10) $32 + 18 =$



Answers

1. 27

2. 23

3. 37

4. 61

5. 54

6. 55

7. 79

8. 87

9. 37

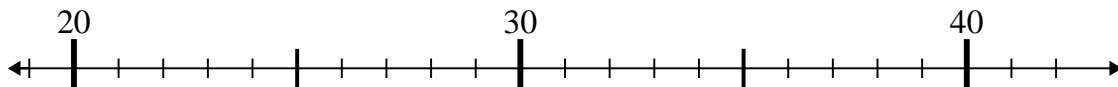
10. 50



Use the numberlines to solve each problem.

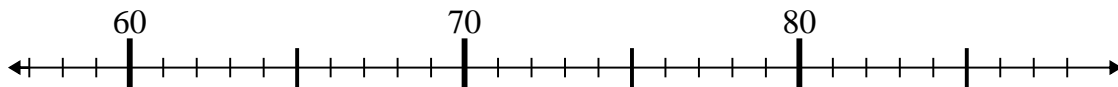
Answers

1) $31 + 4 =$



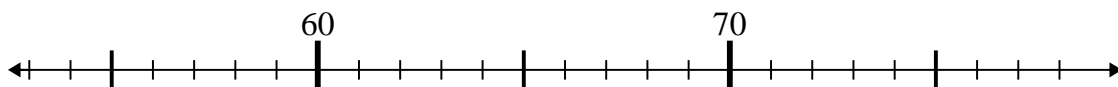
1. _____

2) $76 - 18 =$



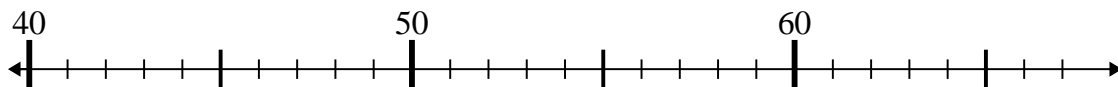
2. _____

3) $57 + 5 =$



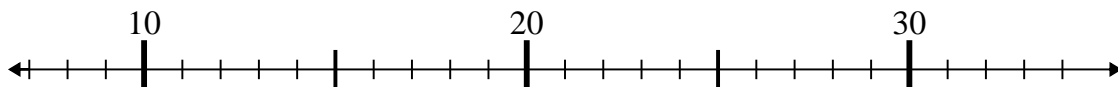
3. _____

4) $40 + 8 =$



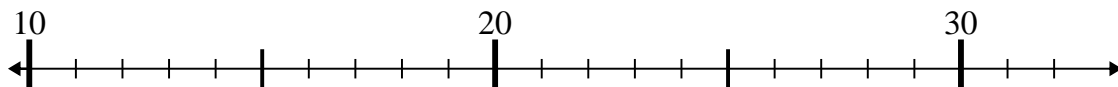
4. _____

5) $8 + 20 =$



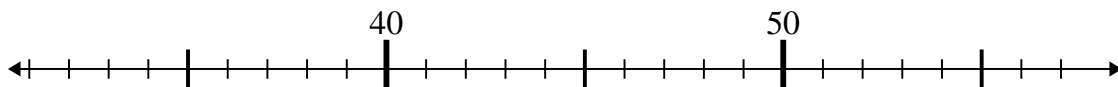
5. _____

6) $13 + 4 =$



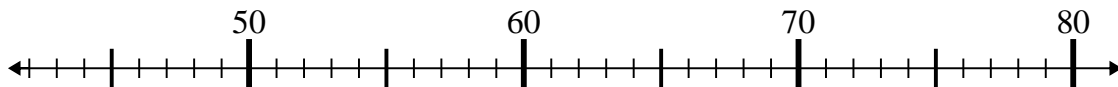
6. _____

7) $56 - 18 =$



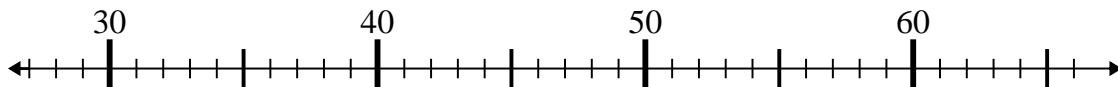
7. _____

8) $61 - 13 =$



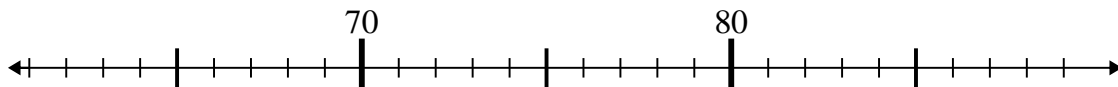
8. _____

9) $40 + 16 =$



9. _____

10) $78 + 3 =$

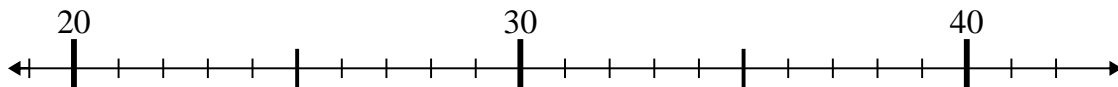


10. _____

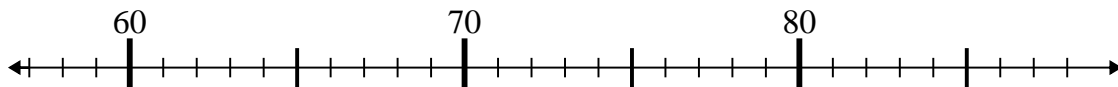


Use the numberlines to solve each problem.

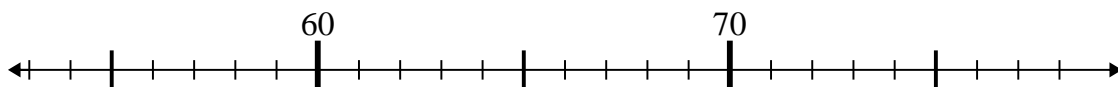
1) $31 + 4 =$



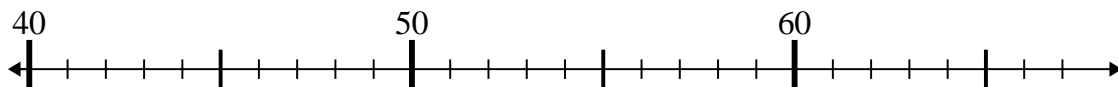
2) $76 - 18 =$



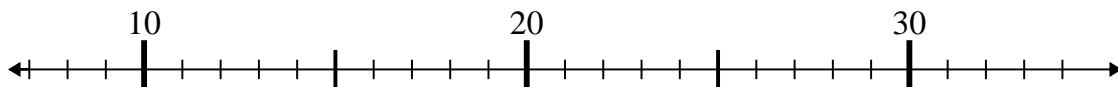
3) $57 + 5 =$



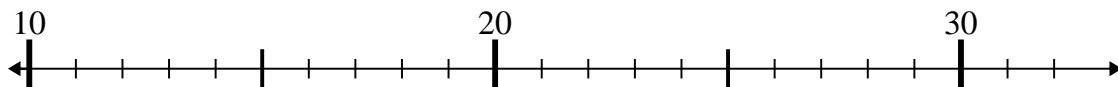
4) $40 + 8 =$



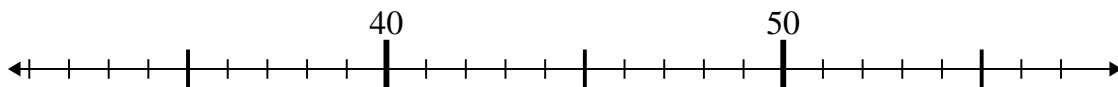
5) $8 + 20 =$



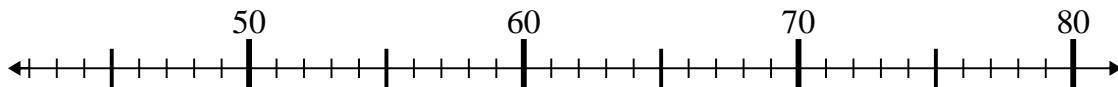
6) $13 + 4 =$



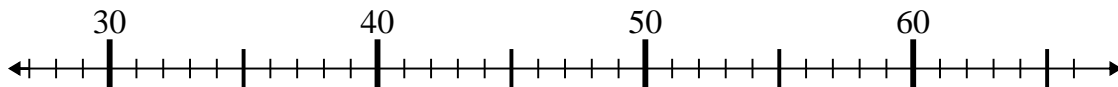
7) $56 - 18 =$



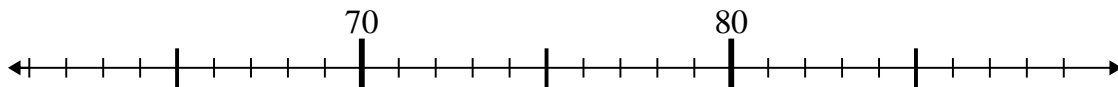
8) $61 - 13 =$



9) $40 + 16 =$



10) $78 + 3 =$



Answers

1. 35

2. 58

3. 62

4. 48

5. 28

6. 17

7. 38

8. 48

9. 56

10. 81