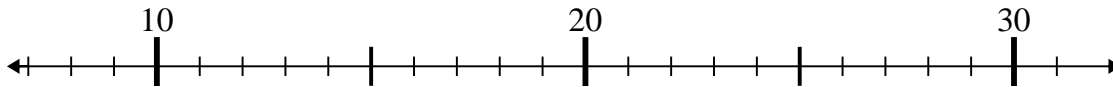




Use the numberlines to solve each problem.

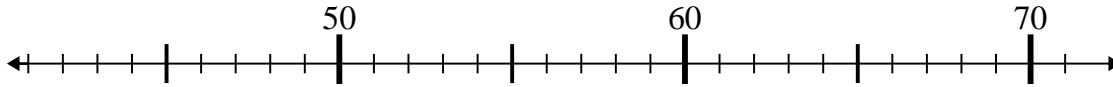
Answers

1) $20 + 2 =$



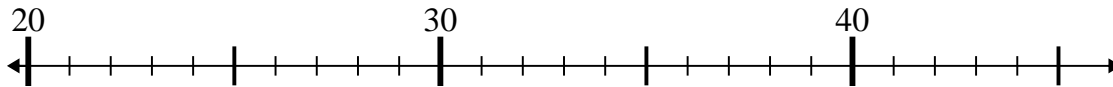
1. _____

2) $55 - 10 =$



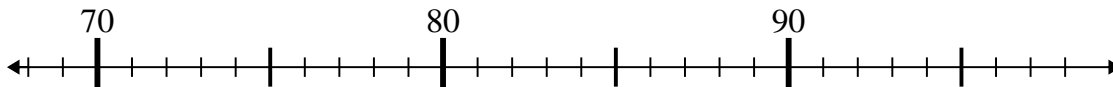
2. _____

3) $36 - 0 =$



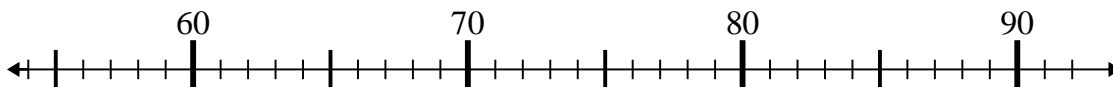
3. _____

4) $79 + 18 =$



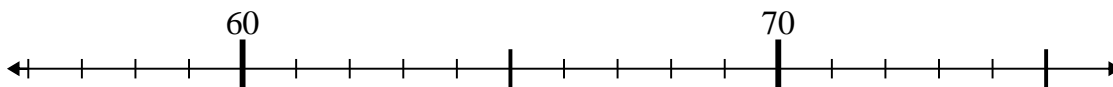
4. _____

5) $73 - 10 =$



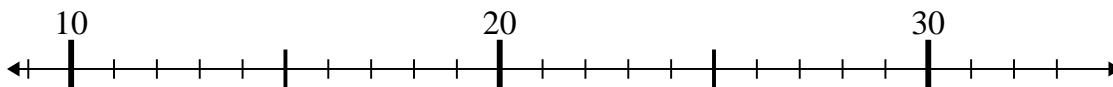
5. _____

6) $61 + 13 =$



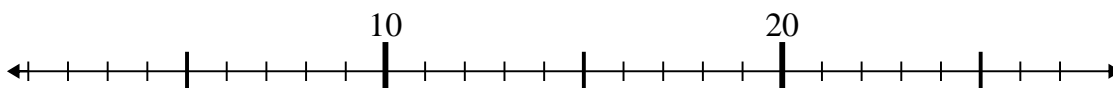
6. _____

7) $19 - 10 =$



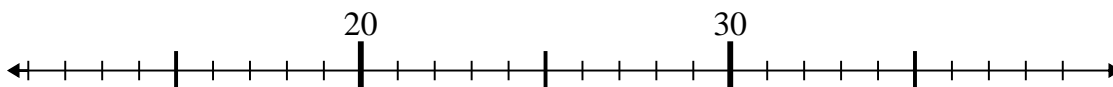
7. _____

8) $15 + 3 =$



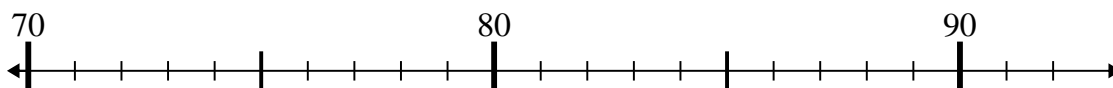
8. _____

9) $33 - 20 =$



9. _____

10) $76 - 1 =$

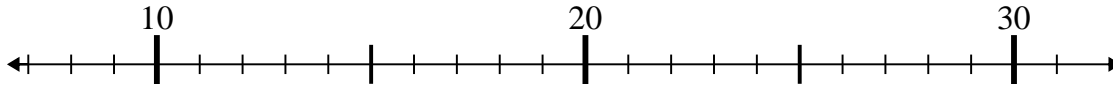


10. _____

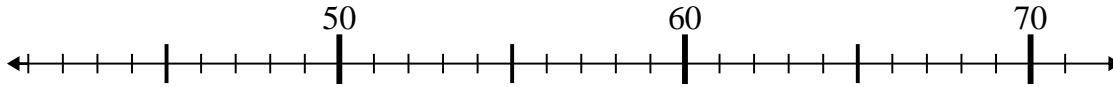


Use the numberlines to solve each problem.

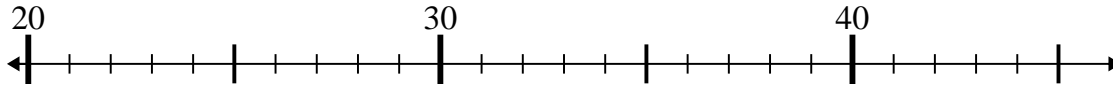
1) $20 + 2 =$



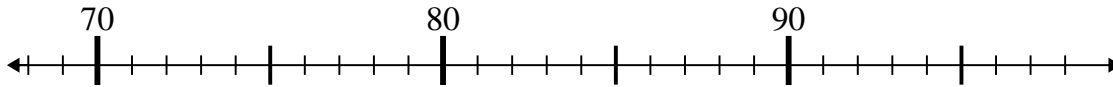
2) $55 - 10 =$



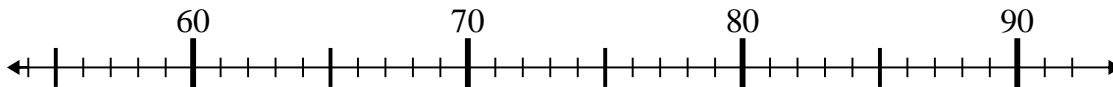
3) $36 - 0 =$



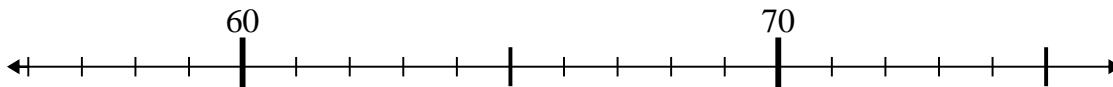
4) $79 + 18 =$



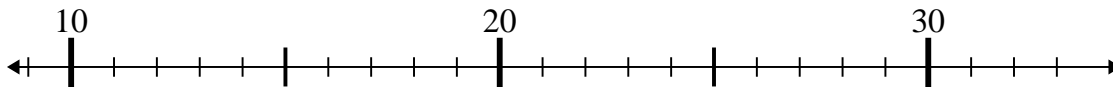
5) $73 - 10 =$



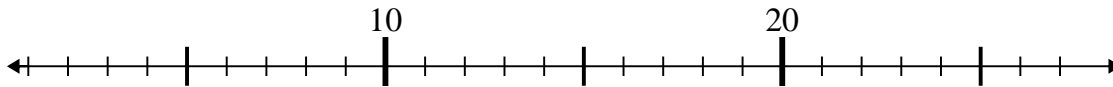
6) $61 + 13 =$



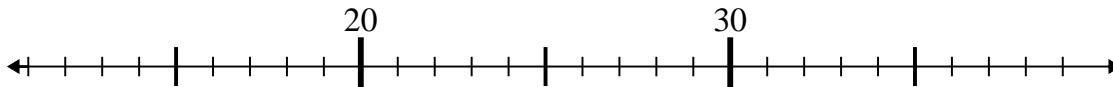
7) $19 - 10 =$



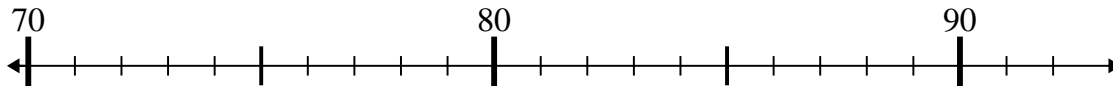
8) $15 + 3 =$



9) $33 - 20 =$



10) $76 - 1 =$



Answers

1. 22

2. 45

3. 36

4. 97

5. 63

6. 74

7. 9

8. 18

9. 13

10. 75