



Determine which letter best represents the sum.

1) $\frac{1}{4} + \frac{2}{4}$

3) $\frac{2}{8} + \frac{7}{8}$

5) $\frac{1}{2} + \frac{1}{2}$

7) $\frac{2}{3} + \frac{1}{3}$

9) $\frac{1}{3} + \frac{1}{3}$

11) $\frac{3}{5} + \frac{4}{5}$

13) $\frac{3}{5} + \frac{1}{5}$

2) $\frac{4}{8} + \frac{7}{8}$

4) $\frac{2}{3} + \frac{2}{3}$

6) $\frac{3}{4} + \frac{2}{4}$

8) $\frac{3}{8} + \frac{2}{8}$

10) $\frac{3}{5} + \frac{2}{5}$

12) $\frac{5}{10} + \frac{5}{10}$

14) $\frac{5}{6} + \frac{3}{6}$

Answers

1. _____

2. _____

3. _____

4. _____

5. _____

6. _____

7. _____

8. _____

9. _____

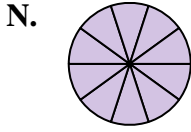
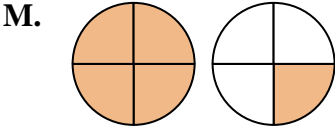
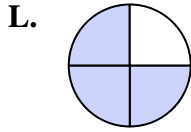
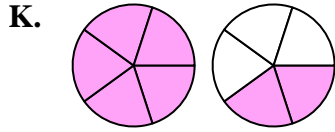
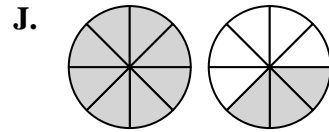
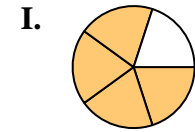
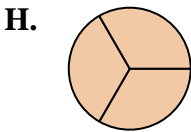
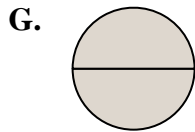
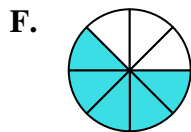
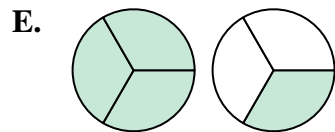
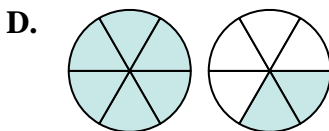
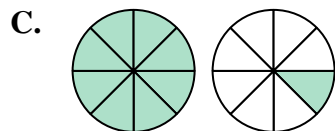
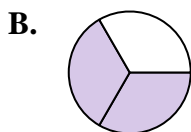
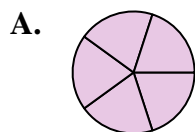
10. _____

11. _____

12. _____

13. _____

14. _____





Determine which letter best represents the sum.

1) $\frac{1}{4} + \frac{2}{4}$

3) $\frac{2}{8} + \frac{7}{8}$

5) $\frac{1}{2} + \frac{1}{2}$

7) $\frac{2}{3} + \frac{1}{3}$

9) $\frac{1}{3} + \frac{1}{3}$

11) $\frac{3}{5} + \frac{4}{5}$

13) $\frac{3}{5} + \frac{1}{5}$

2) $\frac{4}{8} + \frac{7}{8}$

4) $\frac{2}{3} + \frac{2}{3}$

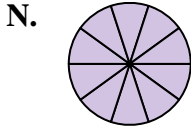
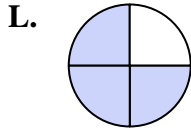
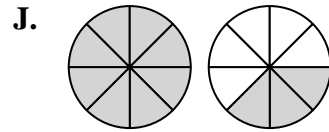
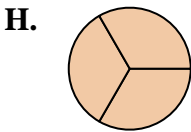
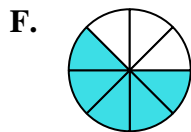
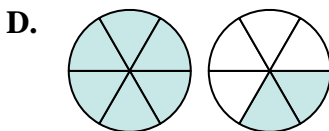
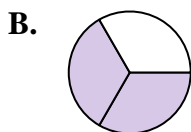
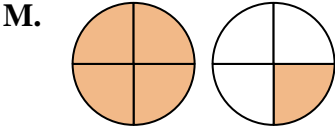
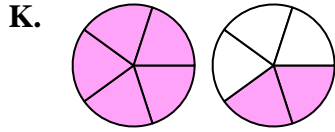
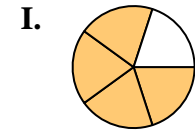
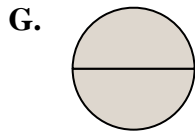
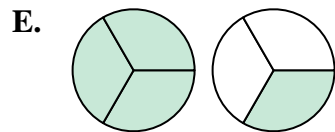
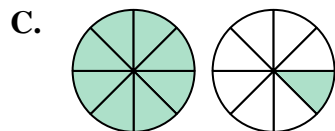
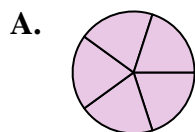
6) $\frac{3}{4} + \frac{2}{4}$

8) $\frac{3}{8} + \frac{2}{8}$

10) $\frac{3}{5} + \frac{2}{5}$

12) $\frac{5}{10} + \frac{5}{10}$

14) $\frac{5}{6} + \frac{3}{6}$



Answers

1. **L** $\frac{3}{4}$

2. **J** $1\frac{3}{8}$

3. **C** $1\frac{1}{8}$

4. **E** $1\frac{1}{3}$

5. **G** $\frac{2}{2}$

6. **M** $1\frac{1}{4}$

7. **H** $\frac{3}{3}$

8. **F** $\frac{5}{8}$

9. **B** $\frac{2}{3}$

10. **A** $\frac{5}{5}$

11. **K** $1\frac{2}{5}$

12. **N** $\frac{10}{10}$

13. **I** $\frac{4}{5}$

14. **D** $1\frac{2}{6}$