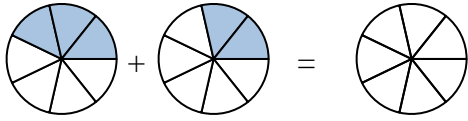




Shade in the fraction to solve the problem.

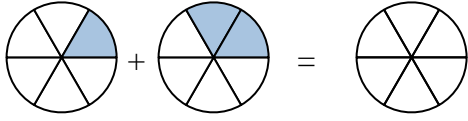
Answers

Ex)



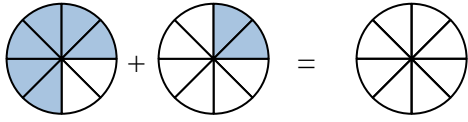
Ex. $\frac{3}{7}$ $\frac{2}{7}$ $\frac{5}{7}$

1)



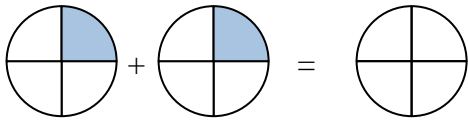
1. _____

2)



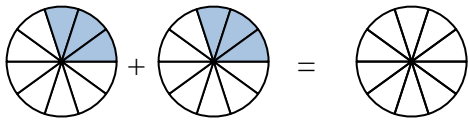
2. _____

3)



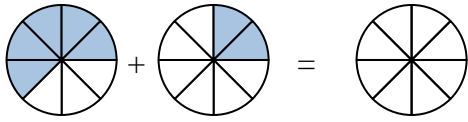
3. _____

4)



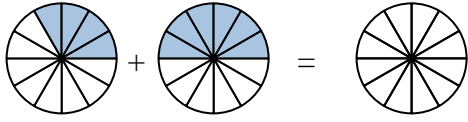
4. _____

5)



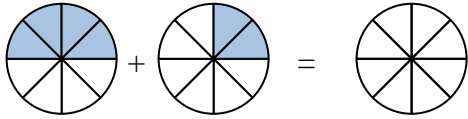
5. _____

6)



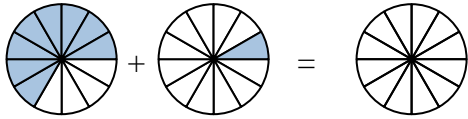
6. _____

7)



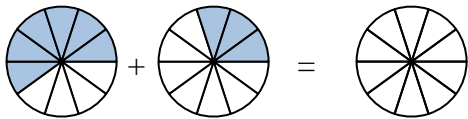
7. _____

8)



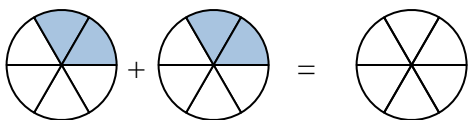
8. _____

9)



9. _____

10)



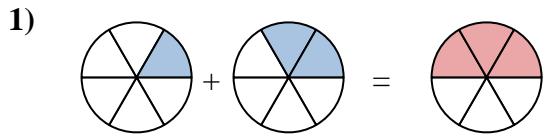
10. _____



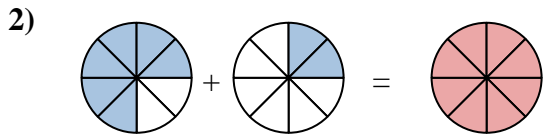
Shade in the fraction to solve the problem.



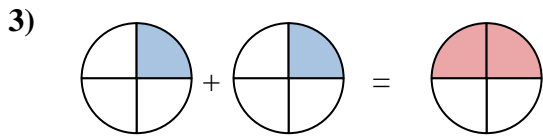
Ex. $\frac{3}{7}$ $\frac{2}{7}$ $\frac{5}{7}$



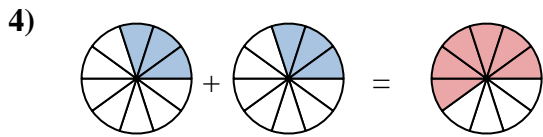
1. $\frac{1}{6}$ $\frac{2}{6}$ $\frac{3}{6}$



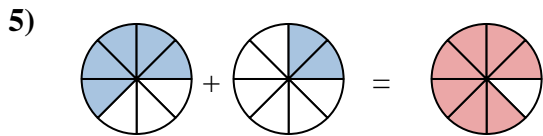
2. $\frac{6}{8}$ $\frac{2}{8}$ $\frac{8}{8}$



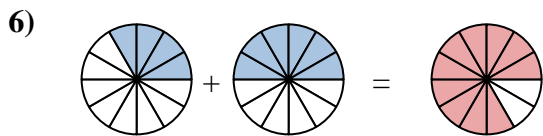
3. $\frac{1}{4}$ $\frac{1}{4}$ $\frac{2}{4}$



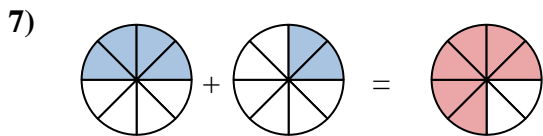
4. $\frac{3}{10}$ $\frac{3}{10}$ $\frac{6}{10}$



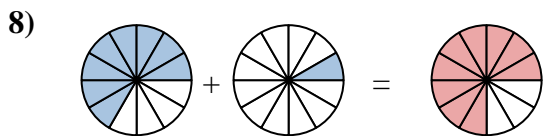
5. $\frac{5}{8}$ $\frac{2}{8}$ $\frac{7}{8}$



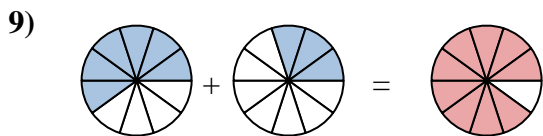
6. $\frac{4}{12}$ $\frac{6}{12}$ $\frac{10}{12}$



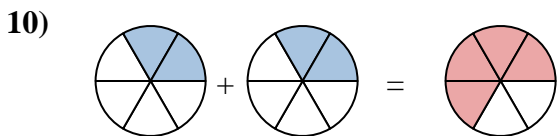
7. $\frac{4}{8}$ $\frac{2}{8}$ $\frac{6}{8}$



8. $\frac{8}{12}$ $\frac{1}{12}$ $\frac{9}{12}$



9. $\frac{6}{10}$ $\frac{3}{10}$ $\frac{9}{10}$



10. $\frac{2}{6}$ $\frac{2}{6}$ $\frac{4}{6}$

Answers