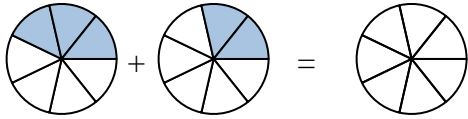




Shade in the fraction to solve the problem.

Answers

Ex)



Ex. $\frac{3}{7}$ $\frac{2}{7}$ $\frac{5}{7}$

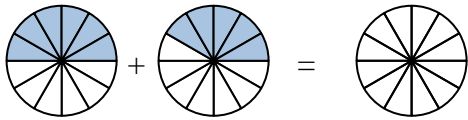
1. _____

1)



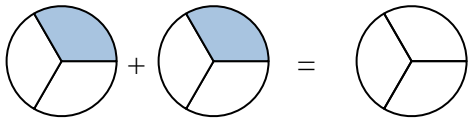
2. _____

2)



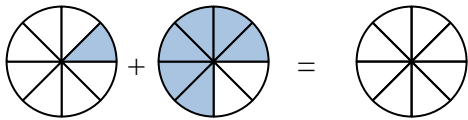
3. _____

3)



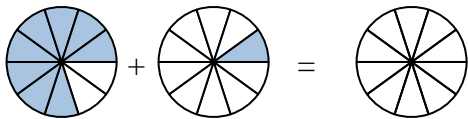
4. _____

4)



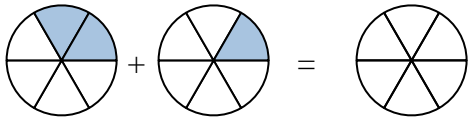
5. _____

5)



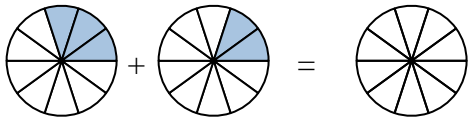
6. _____

6)



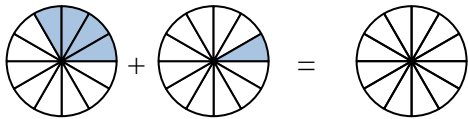
7. _____

7)



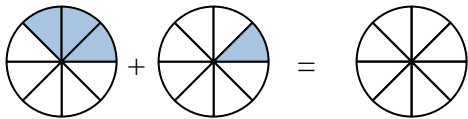
8. _____

8)



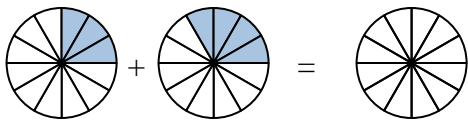
9. _____

9)



10. _____

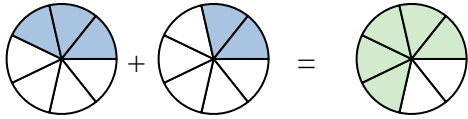
10)





Shade in the fraction to solve the problem.

Ex)



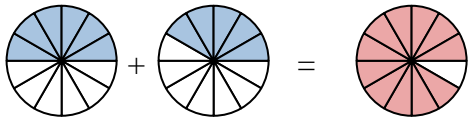
Ex. $\frac{3}{7}$ $\frac{2}{7}$ $\frac{5}{7}$

1)



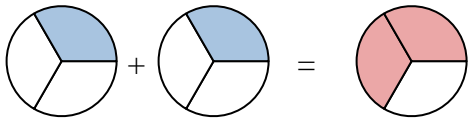
1. $\frac{2}{5}$ $\frac{2}{5}$ $\frac{4}{5}$

2)



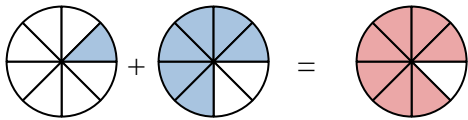
2. $\frac{6}{12}$ $\frac{5}{12}$ $\frac{11}{12}$

3)



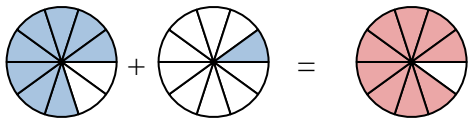
3. $\frac{1}{3}$ $\frac{1}{3}$ $\frac{2}{3}$

4)



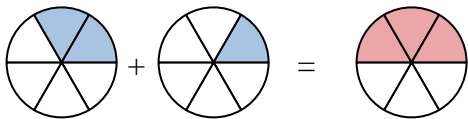
4. $\frac{1}{8}$ $\frac{6}{8}$ $\frac{7}{8}$

5)



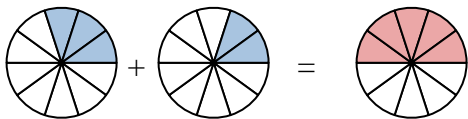
5. $\frac{8}{10}$ $\frac{1}{10}$ $\frac{9}{10}$

6)



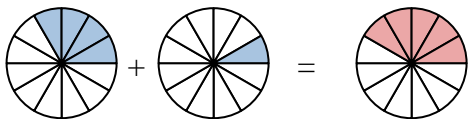
6. $\frac{2}{6}$ $\frac{1}{6}$ $\frac{3}{6}$

7)



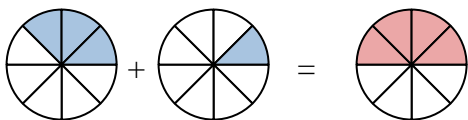
7. $\frac{3}{10}$ $\frac{2}{10}$ $\frac{5}{10}$

8)



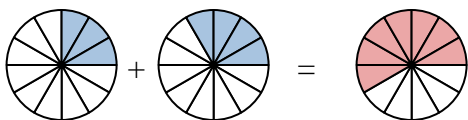
8. $\frac{4}{12}$ $\frac{1}{12}$ $\frac{5}{12}$

9)



9. $\frac{3}{8}$ $\frac{1}{8}$ $\frac{4}{8}$

10)



10. $\frac{3}{12}$ $\frac{4}{12}$ $\frac{7}{12}$

Answers