



Use the visual model to solve each problem.

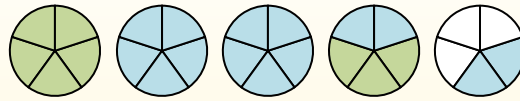
$1 \frac{3}{5} + 2 \frac{4}{5} = ?$



To solve a fraction addition problem one strategy is to shade in the whole amounts first (1 & 2).



Next fill in the fraction amounts ($\frac{3}{5}$ & $\frac{4}{5}$).



When all of the pieces are filled in we can see that $1 \frac{3}{5} + 2 \frac{4}{5} = 4 \frac{2}{5}$

Answers

1. _____
2. _____
3. _____
4. _____
5. _____
6. _____
7. _____
8. _____
9. _____
10. _____

1) $1 \frac{4}{5} + 2 \frac{1}{5} =$

2) $1 \frac{1}{10} + 2 \frac{8}{10} =$

3) $2 \frac{3}{4} + 3 \frac{1}{4} =$

4) $3 \frac{1}{3} + 2 \frac{1}{3} =$

5) $2 \frac{2}{5} + 1 \frac{4}{5} =$

6) $1 \frac{4}{6} + 3 \frac{1}{6} =$

7) $1 \frac{4}{12} + 1 \frac{2}{12} =$

8) $2 \frac{3}{5} + 1 \frac{3}{5} =$

9) $1 \frac{10}{12} + 3 \frac{2}{12} =$

10) $1 \frac{4}{5} + 1 \frac{3}{5} =$



Use the visual model to solve each problem.

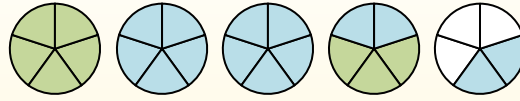
$$1\frac{3}{5} + 2\frac{4}{5} = ?$$



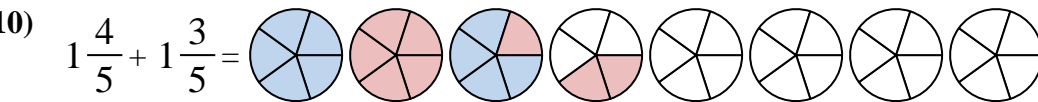
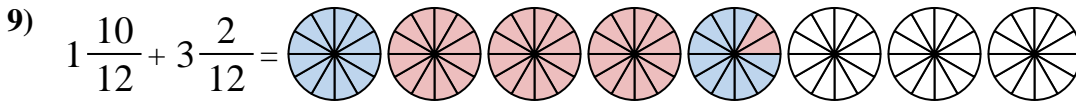
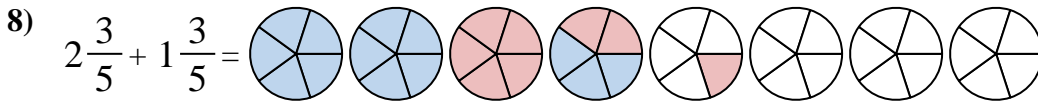
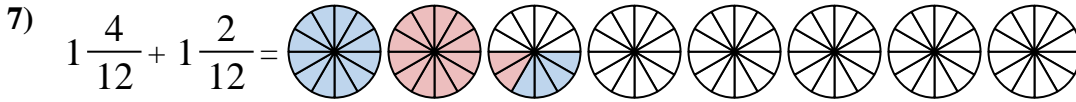
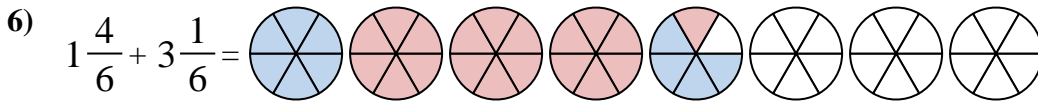
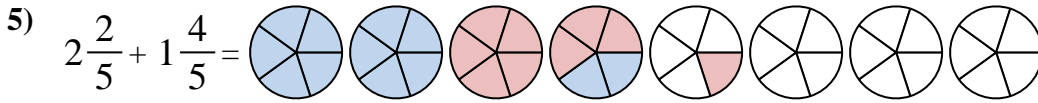
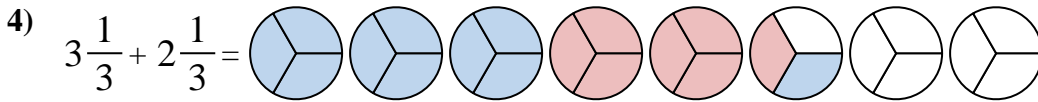
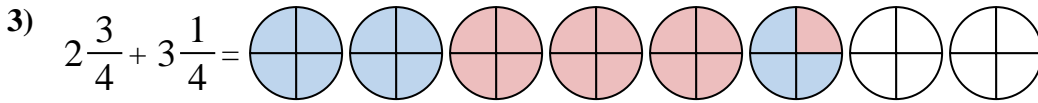
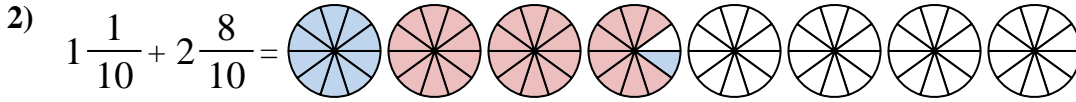
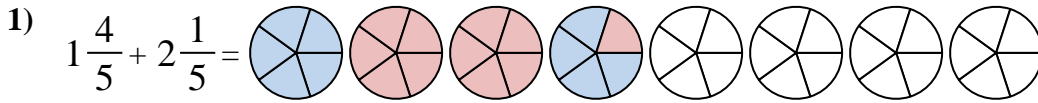
To solve a fraction addition problem one strategy is to shade in the whole amounts first (1 & 2).



Next fill in the fraction amounts ($\frac{3}{5}$ & $\frac{4}{5}$).



When all of the pieces are filled in we can see that $1\frac{3}{5} + 2\frac{4}{5} = 4\frac{2}{5}$



Answers

1. $4\frac{0}{5}$
2. $3\frac{9}{10}$
3. $6\frac{0}{4}$
4. $5\frac{2}{3}$
5. $4\frac{1}{5}$
6. $4\frac{5}{6}$
7. $2\frac{6}{12}$
8. $4\frac{1}{5}$
9. $5\frac{0}{12}$
10. $3\frac{2}{5}$