



Use the visual model to solve each problem.

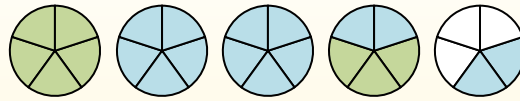
$1 \frac{3}{5} + 2 \frac{4}{5} = ?$



To solve a fraction addition problem one strategy is to shade in the whole amounts first (1 & 2).



Next fill in the fraction amounts ($\frac{3}{5}$ & $\frac{4}{5}$).



When all of the pieces are filled in we can see that $1 \frac{3}{5} + 2 \frac{4}{5} = 4 \frac{2}{5}$

Answers

1. _____
2. _____
3. _____
4. _____
5. _____
6. _____
7. _____
8. _____
9. _____
10. _____

1) $1 \frac{1}{4} + 2 \frac{1}{4} =$

2) $3 \frac{1}{5} + 3 \frac{2}{5} =$

3) $3 \frac{1}{4} + 1 \frac{1}{4} =$

4) $1 \frac{5}{12} + 2 \frac{2}{12} =$

5) $3 \frac{7}{12} + 2 \frac{3}{12} =$

6) $2 \frac{1}{3} + 3 \frac{2}{3} =$

7) $1 \frac{2}{3} + 3 \frac{1}{3} =$

8) $3 \frac{2}{3} + 2 \frac{1}{3} =$

9) $1 \frac{2}{12} + 2 \frac{5}{12} =$

10) $1 \frac{3}{5} + 2 \frac{4}{5} =$



Use the visual model to solve each problem.

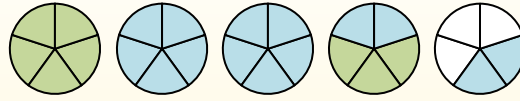
$$1 \frac{3}{5} + 2 \frac{4}{5} = ?$$



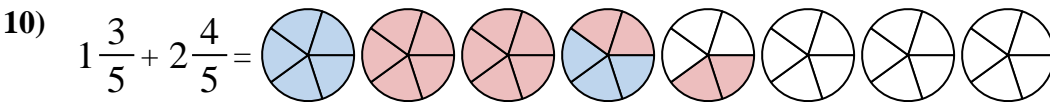
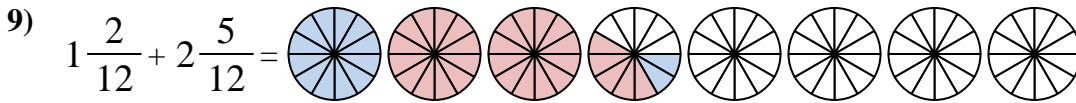
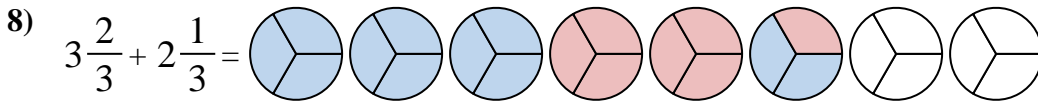
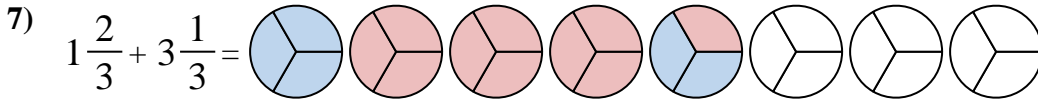
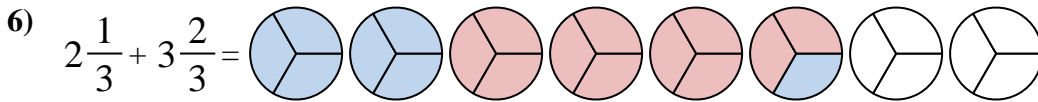
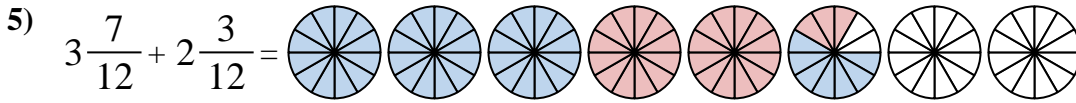
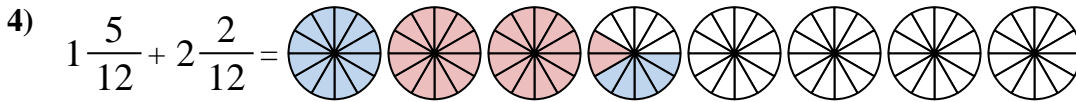
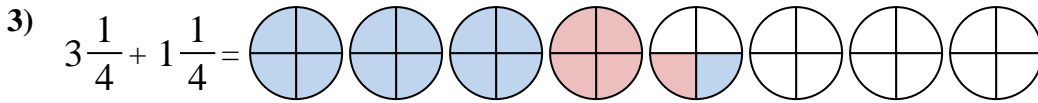
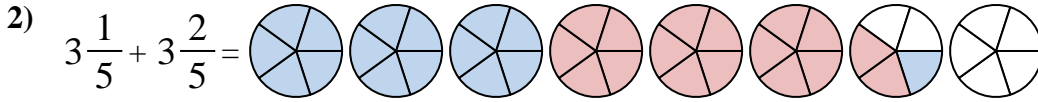
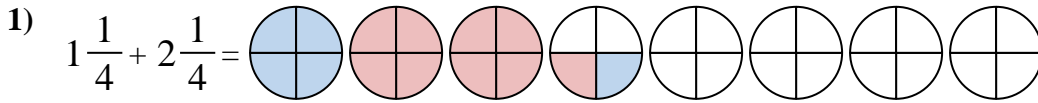
To solve a fraction addition problem one strategy is to shade in the whole amounts first (1 & 2).



Next fill in the fraction amounts ($\frac{3}{5}$ & $\frac{4}{5}$).



When all of the pieces are filled in we can see that $1 \frac{3}{5} + 2 \frac{4}{5} = 4 \frac{2}{5}$



Answers

1. $3 \frac{2}{4}$

2. $6 \frac{3}{5}$

3. $4 \frac{2}{4}$

4. $3 \frac{7}{12}$

5. $5 \frac{10}{12}$

6. $6 \frac{0}{3}$

7. $5 \frac{0}{3}$

8. $6 \frac{0}{3}$

9. $3 \frac{7}{12}$

10. $4 \frac{2}{5}$