




Match each equation to the answer and write the answer.

Answers

Ex) $\frac{1}{5} + \frac{1}{5}$



Ex. **G**

1) $\frac{1}{10} + \frac{1}{10}$



1. _____

2) $\frac{1}{5} + \frac{1}{5} + \frac{1}{5}$



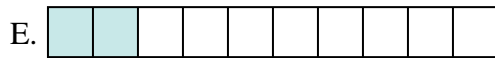
2. _____

3) $\frac{1}{3} + \frac{1}{3}$




3. _____

4) $\frac{1}{12} + \frac{1}{12}$



4. _____

5) $\frac{1}{12} + \frac{1}{12} + \frac{1}{12} + \frac{1}{12}$



5. _____

6) $\frac{1}{4} + \frac{1}{4}$



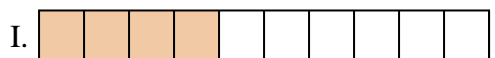
6. _____

7) $\frac{1}{6} + \frac{1}{6}$



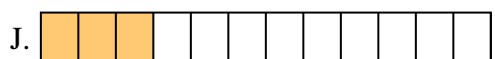
7. _____

8) $\frac{1}{4} + \frac{1}{4} + \frac{1}{4}$



8. _____

9) $\frac{1}{10} + \frac{1}{10} + \frac{1}{10} + \frac{1}{10}$




9. _____

10) $\frac{1}{6} + \frac{1}{6} + \frac{1}{6} + \frac{1}{6} + \frac{1}{6}$



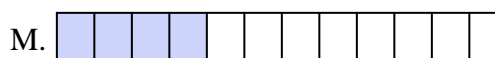
10. _____

11) $\frac{1}{8} + \frac{1}{8} + \frac{1}{8} + \frac{1}{8}$



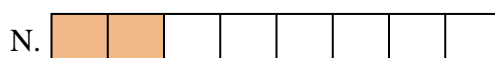
11. _____

12) $\frac{1}{12} + \frac{1}{12} + \frac{1}{12}$




12. _____

13) $\frac{1}{8} + \frac{1}{8}$




13. _____

14) $\frac{1}{6} + \frac{1}{6} + \frac{1}{6} + \frac{1}{6}$



14. _____

15) $\frac{1}{8} + \frac{1}{8} + \frac{1}{8} + \frac{1}{8} + \frac{1}{8}$



15. _____



Match each equation to the answer and write the answer.

Ex) $\frac{1}{5} + \frac{1}{5}$



Ex. **G**

1) $\frac{1}{10} + \frac{1}{10}$




1. **E**

2) $\frac{1}{5} + \frac{1}{5} + \frac{1}{5}$




2. **O**

3) $\frac{1}{3} + \frac{1}{3}$



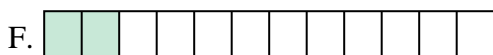
3. **K**

4) $\frac{1}{12} + \frac{1}{12}$



4. **F**

5) $\frac{1}{12} + \frac{1}{12} + \frac{1}{12} + \frac{1}{12}$



6. **D**

6) $\frac{1}{4} + \frac{1}{4}$




7. **A**

7) $\frac{1}{6} + \frac{1}{6}$



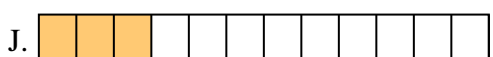
8. **P**

8) $\frac{1}{4} + \frac{1}{4} + \frac{1}{4}$



9. **I**

9) $\frac{1}{10} + \frac{1}{10} + \frac{1}{10} + \frac{1}{10}$




10. **B**

10) $\frac{1}{6} + \frac{1}{6} + \frac{1}{6} + \frac{1}{6} + \frac{1}{6}$



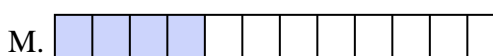
11. **C**

11) $\frac{1}{8} + \frac{1}{8} + \frac{1}{8} + \frac{1}{8}$




12. **J**

12) $\frac{1}{12} + \frac{1}{12} + \frac{1}{12}$




13. **N**

13) $\frac{1}{8} + \frac{1}{8}$




14. **L**

14) $\frac{1}{6} + \frac{1}{6} + \frac{1}{6} + \frac{1}{6}$



15. **H**

15) $\frac{1}{8} + \frac{1}{8} + \frac{1}{8} + \frac{1}{8} + \frac{1}{8}$



Answers